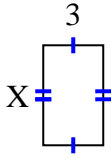




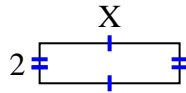
Trouvez la valeur de X pour chaque chiffre. Chaque chiffre est en centimètres (cm). Pas à l'échelle.

Réponses

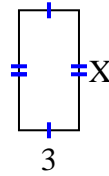
1) area = 15 cm^2



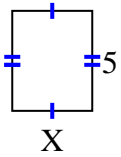
2) area = 14 cm^2



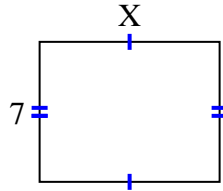
3) area = 18 cm^2



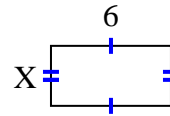
4) area = 20 cm^2



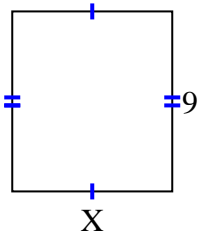
5) area = 63 cm^2



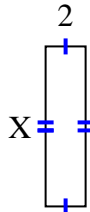
6) area = 18 cm^2



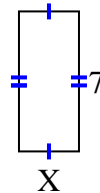
7) area = 72 cm^2



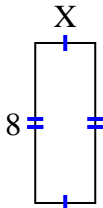
8) area = 16 cm^2



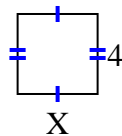
9) area = 21 cm^2



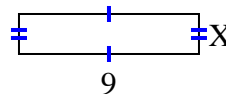
10) area = 24 cm^2



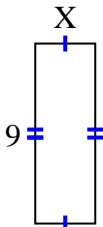
11) area = 16 cm^2



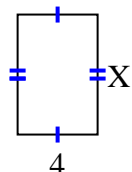
12) area = 18 cm^2



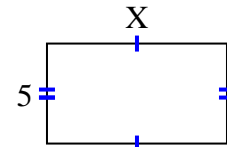
13) area = 27 cm^2



14) area = 24 cm^2



15) area = 45 cm^2

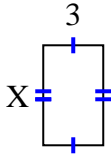


1. _____
2. _____
3. _____
4. _____
5. _____
6. _____
7. _____
8. _____
9. _____
10. _____
11. _____
12. _____
13. _____
14. _____
15. _____

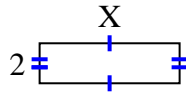


Trouvez la valeur de X pour chaque chiffre. Chaque chiffre est en centimètres (cm). Pas à l'échelle.

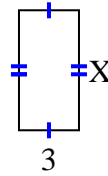
1) area = 15 cm^2



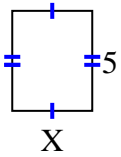
2) area = 14 cm^2



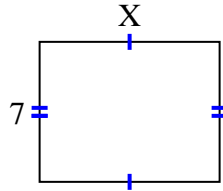
3) area = 18 cm^2



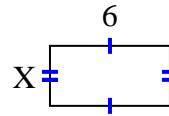
4) area = 20 cm^2



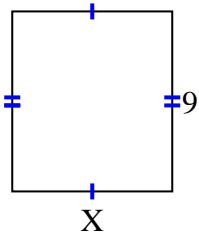
5) area = 63 cm^2



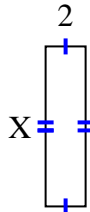
6) area = 18 cm^2



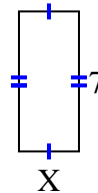
7) area = 72 cm^2



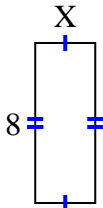
8) area = 16 cm^2



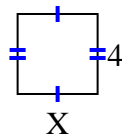
9) area = 21 cm^2



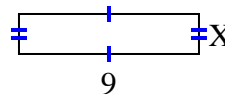
10) area = 24 cm^2



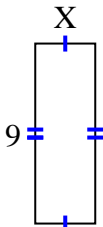
11) area = 16 cm^2



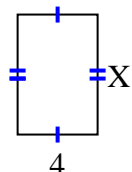
12) area = 18 cm^2



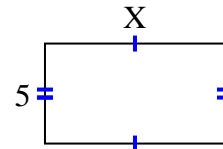
13) area = 27 cm^2



14) area = 24 cm^2



15) area = 45 cm^2



Réponses

1. 5

2. 7

3. 6

4. 4

5. 9

6. 3

7. 8

8. 8

9. 3

10. 3

11. 4

12. 2

13. 3

14. 6

15. 9