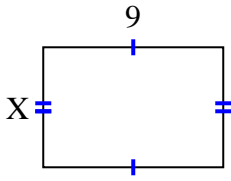




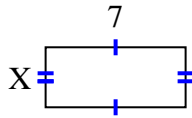
Trouvez la valeur de X pour chaque chiffre. Chaque chiffre est en centimètres (cm). Pas à l'échelle.

Réponses

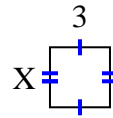
1) area = 54 cm^2



2) area = 21 cm^2



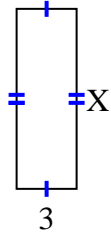
3) area = 9 cm^2



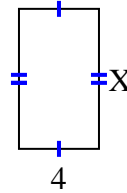
4) area = 4 cm^2



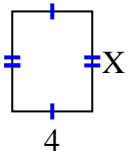
5) area = 27 cm^2



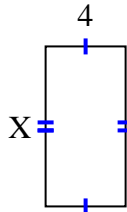
6) area = 28 cm^2



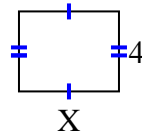
7) area = 20 cm^2



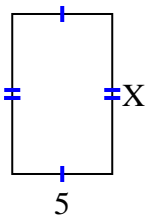
8) area = 32 cm^2



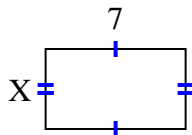
9) area = 20 cm^2



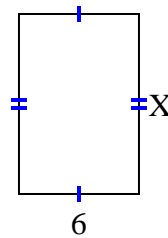
10) area = 40 cm^2



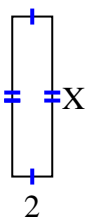
11) area = 28 cm^2



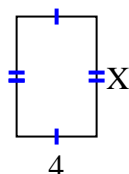
12) area = 54 cm^2



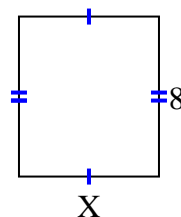
13) area = 16 cm^2



14) area = 24 cm^2



15) area = 56 cm^2

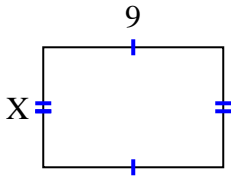


1. _____
2. _____
3. _____
4. _____
5. _____
6. _____
7. _____
8. _____
9. _____
10. _____
11. _____
12. _____
13. _____
14. _____
15. _____

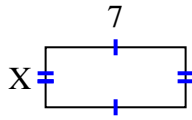


Trouvez la valeur de X pour chaque chiffre. Chaque chiffre est en centimètres (cm). Pas à l'échelle.

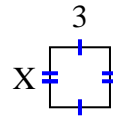
1) area = 54 cm^2



2) area = 21 cm^2



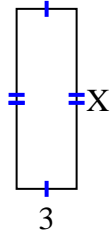
3) area = 9 cm^2



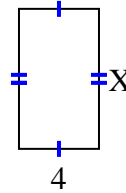
4) area = 4 cm^2



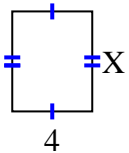
5) area = 27 cm^2



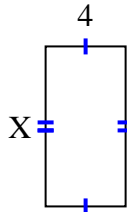
6) area = 28 cm^2



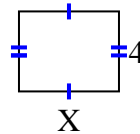
7) area = 20 cm^2



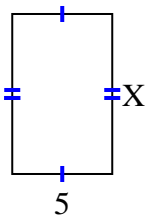
8) area = 32 cm^2



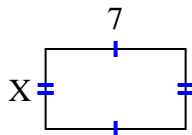
9) area = 20 cm^2



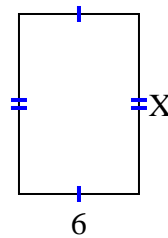
10) area = 40 cm^2



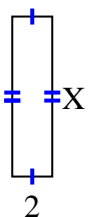
11) area = 28 cm^2



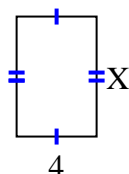
12) area = 54 cm^2



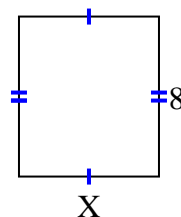
13) area = 16 cm^2



14) area = 24 cm^2



15) area = 56 cm^2



Réponses

1. 6

2. 3

3. 3

4. 2

5. 9

6. 7

7. 5

8. 8

9. 5

10. 8

11. 4

12. 9

13. 8

14. 6

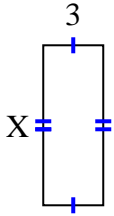
15. 7



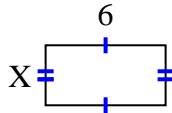
Trouvez la valeur de X pour chaque chiffre. Chaque chiffre est en centimètres (cm). Pas à l'échelle.

Réponses

1) area = 24 cm^2



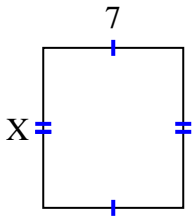
2) area = 18 cm^2



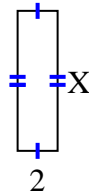
3) area = 4 cm^2



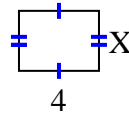
4) area = 56 cm^2



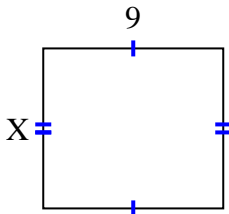
5) area = 14 cm^2



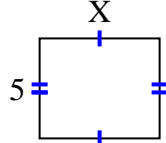
6) area = 12 cm^2



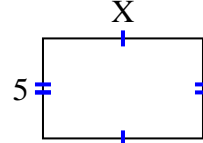
7) area = 72 cm^2



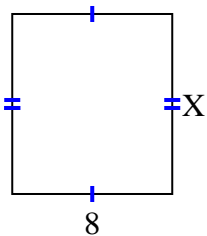
8) area = 30 cm^2



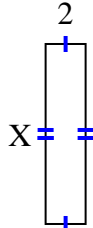
9) area = 40 cm^2



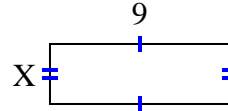
10) area = 72 cm^2



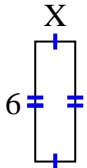
11) area = 18 cm^2



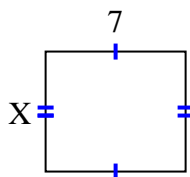
12) area = 27 cm^2



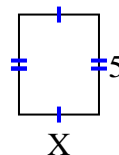
13) area = 12 cm^2



14) area = 42 cm^2



15) area = 20 cm^2

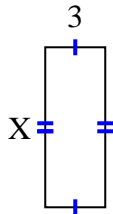


1. _____
2. _____
3. _____
4. _____
5. _____
6. _____
7. _____
8. _____
9. _____
10. _____
11. _____
12. _____
13. _____
14. _____
15. _____

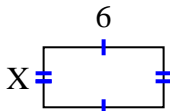


Trouvez la valeur de X pour chaque chiffre. Chaque chiffre est en centimètres (cm). Pas à l'échelle.

1) area = 24 cm^2



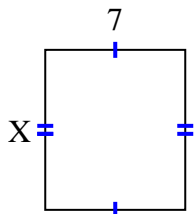
2) area = 18 cm^2



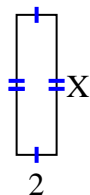
3) area = 4 cm^2



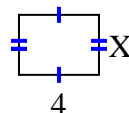
4) area = 56 cm^2



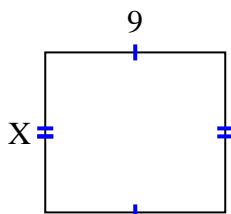
5) area = 14 cm^2



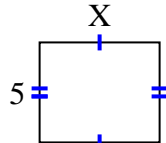
6) area = 12 cm^2



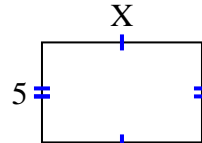
7) area = 72 cm^2



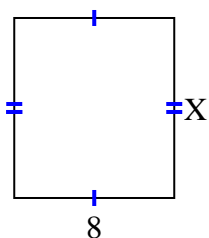
8) area = 30 cm^2



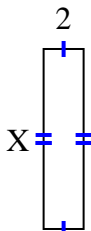
9) area = 40 cm^2



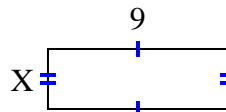
10) area = 72 cm^2



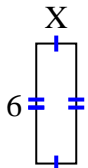
11) area = 18 cm^2



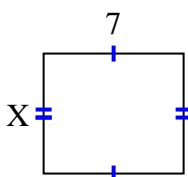
12) area = 27 cm^2



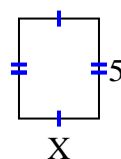
13) area = 12 cm^2



14) area = 42 cm^2



15) area = 20 cm^2



Réponses

1. 8

2. 3

3. 2

4. 8

5. 7

6. 3

7. 8

8. 6

9. 8

10. 9

11. 9

12. 3

13. 2

14. 6

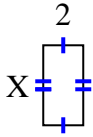
15. 4



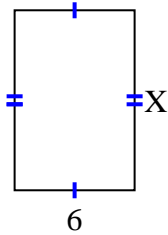
Trouvez la valeur de X pour chaque chiffre. Chaque chiffre est en centimètres (cm). Pas à l'échelle.

Réponses

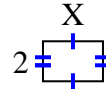
1) area = 8 cm^2



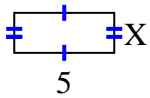
2) area = 54 cm^2



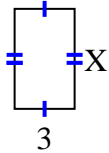
3) area = 6 cm^2



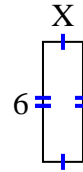
4) area = 10 cm^2



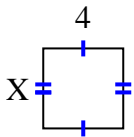
5) area = 15 cm^2



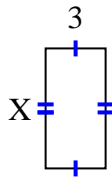
6) area = 12 cm^2



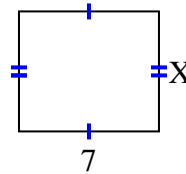
7) area = 16 cm^2



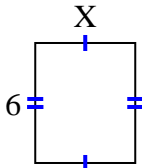
8) area = 18 cm^2



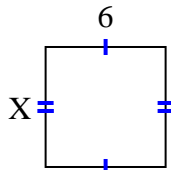
9) area = 42 cm^2



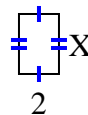
10) area = 30 cm^2



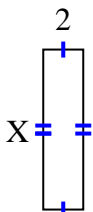
11) area = 36 cm^2



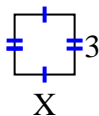
12) area = 6 cm^2



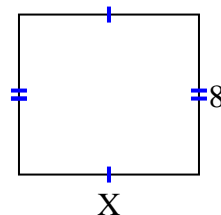
13) area = 16 cm^2



14) area = 9 cm^2



15) area = 72 cm^2

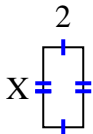


1. _____
2. _____
3. _____
4. _____
5. _____
6. _____
7. _____
8. _____
9. _____
10. _____
11. _____
12. _____
13. _____
14. _____
15. _____

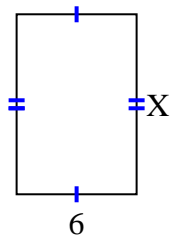


Trouvez la valeur de X pour chaque chiffre. Chaque chiffre est en centimètres (cm). Pas à l'échelle.

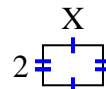
1) area = 8 cm^2



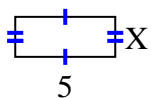
2) area = 54 cm^2



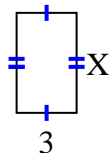
3) area = 6 cm^2



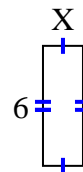
4) area = 10 cm^2



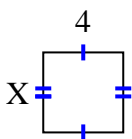
5) area = 15 cm^2



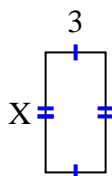
6) area = 12 cm^2



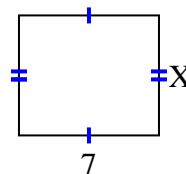
7) area = 16 cm^2



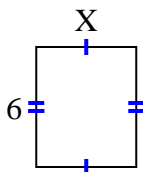
8) area = 18 cm^2



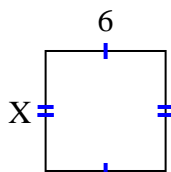
9) area = 42 cm^2



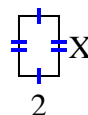
10) area = 30 cm^2



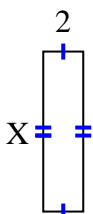
11) area = 36 cm^2



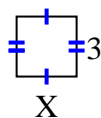
12) area = 6 cm^2



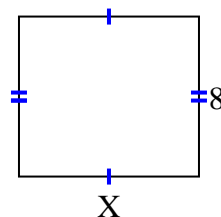
13) area = 16 cm^2



14) area = 9 cm^2



15) area = 72 cm^2



Réponses

1. 4

2. 9

3. 3

4. 2

5. 5

6. 2

7. 4

8. 6

9. 6

10. 5

11. 6

12. 3

13. 8

14. 3

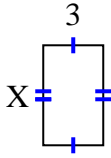
15. 9



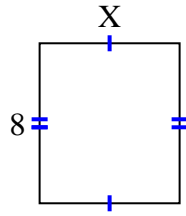
Trouvez la valeur de X pour chaque chiffre. Chaque chiffre est en centimètres (cm). Pas à l'échelle.

Réponses

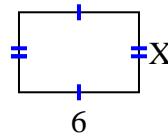
1) area = 15 cm^2



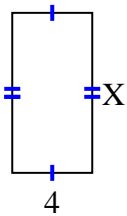
2) area = 56 cm^2



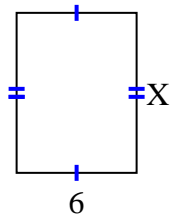
3) area = 24 cm^2



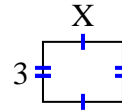
4) area = 32 cm^2



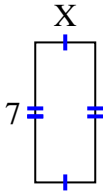
5) area = 48 cm^2



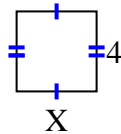
6) area = 12 cm^2



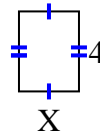
7) area = 21 cm^2



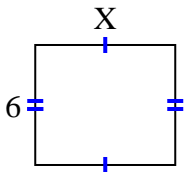
8) area = 16 cm^2



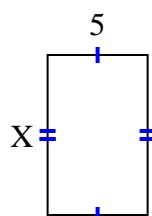
9) area = 12 cm^2



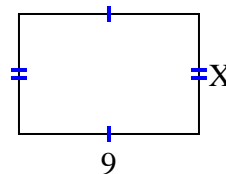
10) area = 42 cm^2



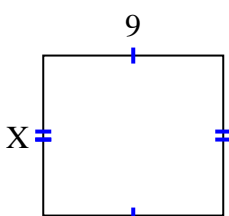
11) area = 40 cm^2



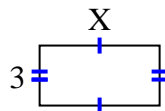
12) area = 54 cm^2



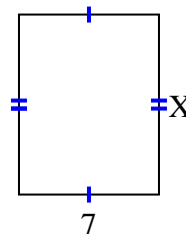
13) area = 72 cm^2



14) area = 18 cm^2



15) area = 63 cm^2

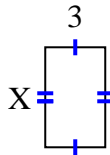


1. _____
2. _____
3. _____
4. _____
5. _____
6. _____
7. _____
8. _____
9. _____
10. _____
11. _____
12. _____
13. _____
14. _____
15. _____

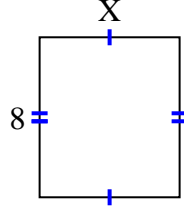


Trouvez la valeur de X pour chaque chiffre. Chaque chiffre est en centimètres (cm). Pas à l'échelle.

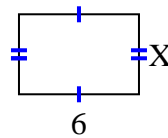
1) area = 15 cm^2



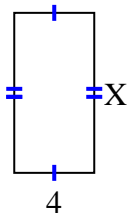
2) area = 56 cm^2



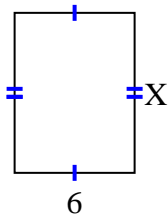
3) area = 24 cm^2



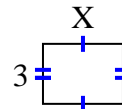
4) area = 32 cm^2



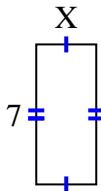
5) area = 48 cm^2



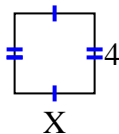
6) area = 12 cm^2



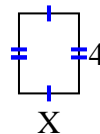
7) area = 21 cm^2



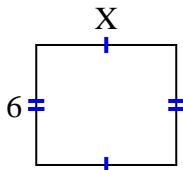
8) area = 16 cm^2



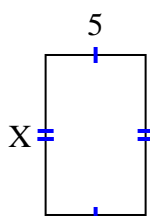
9) area = 12 cm^2



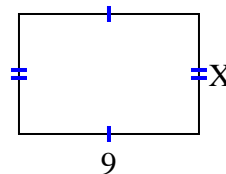
10) area = 42 cm^2



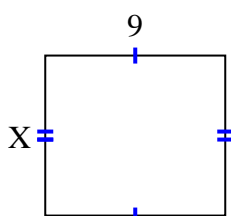
11) area = 40 cm^2



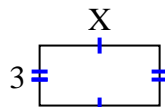
12) area = 54 cm^2



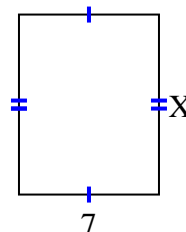
13) area = 72 cm^2



14) area = 18 cm^2



15) area = 63 cm^2



Réponses

1. 5

2. 7

3. 4

4. 8

5. 8

6. 4

7. 3

8. 4

9. 3

10. 7

11. 8

12. 6

13. 8

14. 6

15. 9



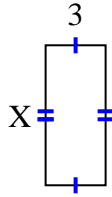
Trouvez la valeur de X pour chaque chiffre. Chaque chiffre est en centimètres (cm). Pas à l'échelle.

Réponses

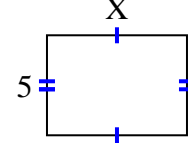
1) area = 4 cm^2



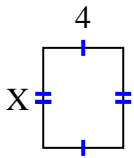
2) area = 21 cm^2



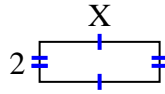
3) area = 35 cm^2



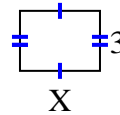
4) area = 20 cm^2



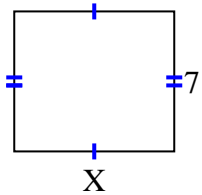
5) area = 12 cm^2



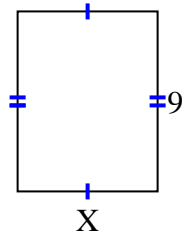
6) area = 12 cm^2



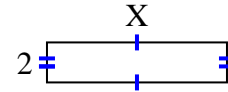
7) area = 56 cm^2



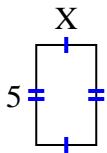
8) area = 63 cm^2



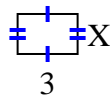
9) area = 18 cm^2



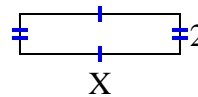
10) area = 15 cm^2



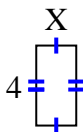
11) area = 6 cm^2



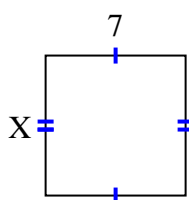
12) area = 16 cm^2



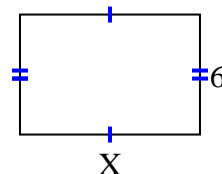
13) area = 8 cm^2



14) area = 49 cm^2



15) area = 54 cm^2



1. _____
2. _____
3. _____
4. _____
5. _____
6. _____
7. _____
8. _____
9. _____
10. _____
11. _____
12. _____
13. _____
14. _____
15. _____

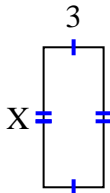


Trouvez la valeur de X pour chaque chiffre. Chaque chiffre est en centimètres (cm). Pas à l'échelle.

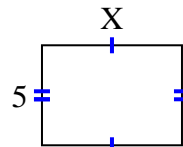
1) area = 4 cm^2



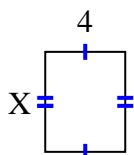
2) area = 21 cm^2



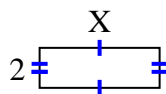
3) area = 35 cm^2



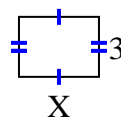
4) area = 20 cm^2



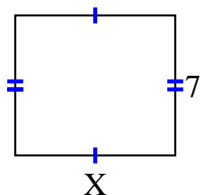
5) area = 12 cm^2



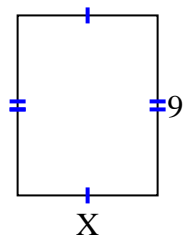
6) area = 12 cm^2



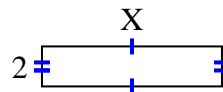
7) area = 56 cm^2



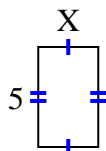
8) area = 63 cm^2



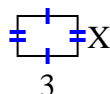
9) area = 18 cm^2



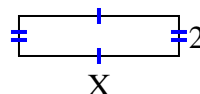
10) area = 15 cm^2



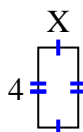
11) area = 6 cm^2



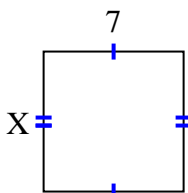
12) area = 16 cm^2



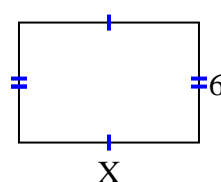
13) area = 8 cm^2



14) area = 49 cm^2



15) area = 54 cm^2



Réponses

1. 2

2. 7

3. 7

4. 5

5. 6

6. 4

7. 8

8. 7

9. 9

10. 3

11. 2

12. 8

13. 2

14. 7

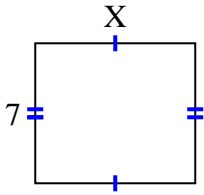
15. 9



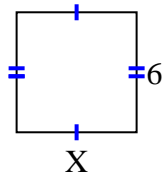
Trouvez la valeur de X pour chaque chiffre. Chaque chiffre est en centimètres (cm). Pas à l'échelle.

Réponses

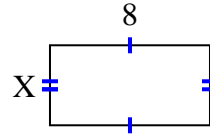
1) area = 56 cm^2



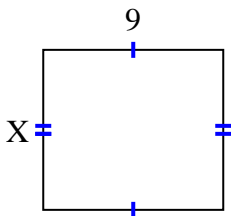
2) area = 36 cm^2



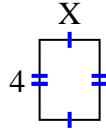
3) area = 32 cm^2



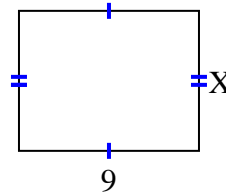
4) area = 72 cm^2



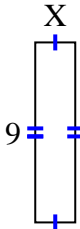
5) area = 12 cm^2



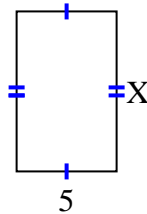
6) area = 63 cm^2



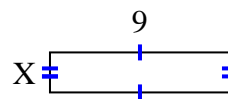
7) area = 18 cm^2



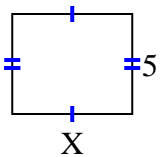
8) area = 40 cm^2



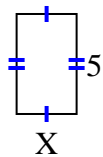
9) area = 18 cm^2



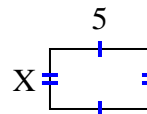
10) area = 30 cm^2



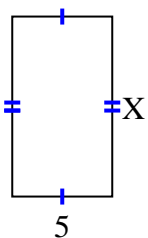
11) area = 15 cm^2



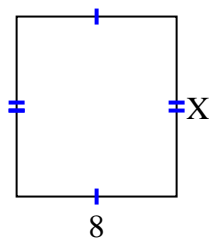
12) area = 15 cm^2



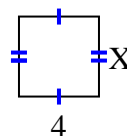
13) area = 45 cm^2



14) area = 72 cm^2



15) area = 16 cm^2

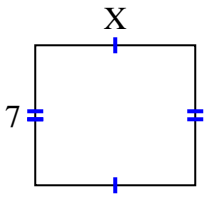


1. _____
2. _____
3. _____
4. _____
5. _____
6. _____
7. _____
8. _____
9. _____
10. _____
11. _____
12. _____
13. _____
14. _____
15. _____

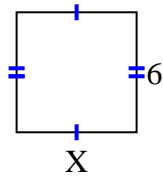


Trouvez la valeur de X pour chaque chiffre. Chaque chiffre est en centimètres (cm). Pas à l'échelle.

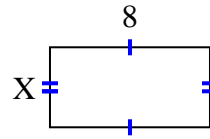
1) area = 56 cm^2



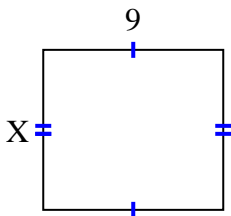
2) area = 36 cm^2



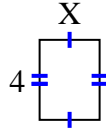
3) area = 32 cm^2



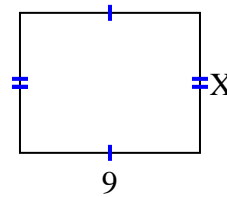
4) area = 72 cm^2



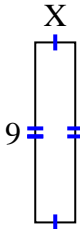
5) area = 12 cm^2



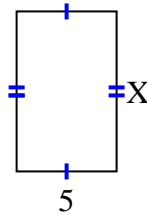
6) area = 63 cm^2



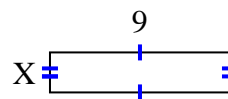
7) area = 18 cm^2



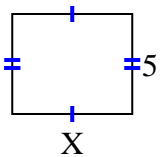
8) area = 40 cm^2



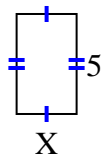
9) area = 18 cm^2



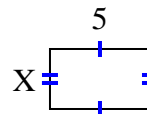
10) area = 30 cm^2



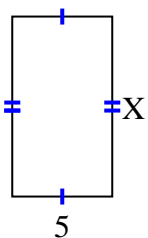
11) area = 15 cm^2



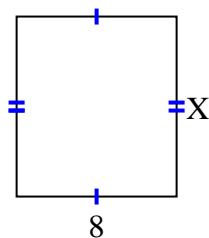
12) area = 15 cm^2



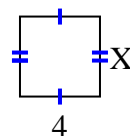
13) area = 45 cm^2



14) area = 72 cm^2



15) area = 16 cm^2



Réponses

1. 8

2. 6

3. 4

4. 8

5. 3

6. 7

7. 2

8. 8

9. 2

10. 6

11. 3

12. 3

13. 9

14. 9

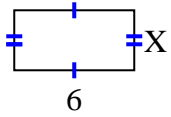
15. 4



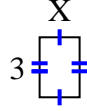
Trouvez la valeur de X pour chaque chiffre. Chaque chiffre est en centimètres (cm). Pas à l'échelle.

Réponses

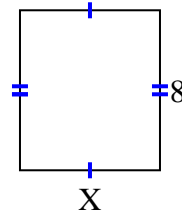
1) area = 18 cm^2



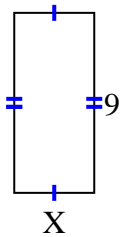
2) area = 6 cm^2



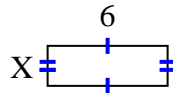
3) area = 56 cm^2



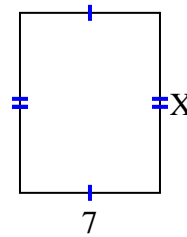
4) area = 36 cm^2



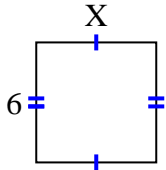
5) area = 12 cm^2



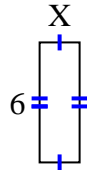
6) area = 63 cm^2



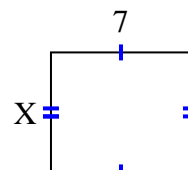
7) area = 36 cm^2



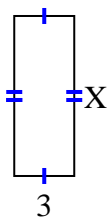
8) area = 12 cm^2



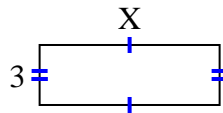
9) area = 42 cm^2



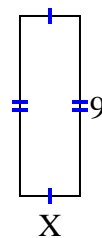
10) area = 24 cm^2



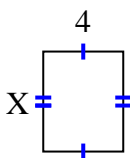
11) area = 27 cm^2



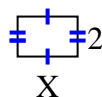
12) area = 27 cm^2



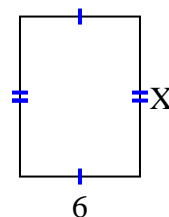
13) area = 20 cm^2



14) area = 6 cm^2



15) area = 48 cm^2

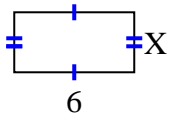


1. _____
2. _____
3. _____
4. _____
5. _____
6. _____
7. _____
8. _____
9. _____
10. _____
11. _____
12. _____
13. _____
14. _____
15. _____

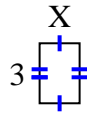


Trouvez la valeur de X pour chaque chiffre. Chaque chiffre est en centimètres (cm). Pas à l'échelle.

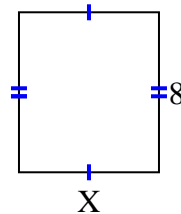
1) area = 18 cm^2



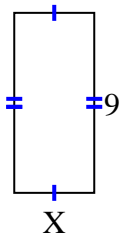
2) area = 6 cm^2



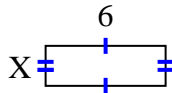
3) area = 56 cm^2



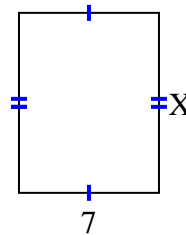
4) area = 36 cm^2



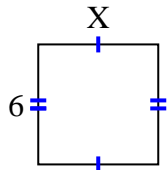
5) area = 12 cm^2



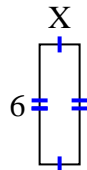
6) area = 63 cm^2



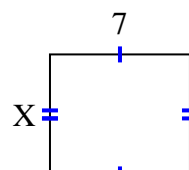
7) area = 36 cm^2



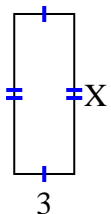
8) area = 12 cm^2



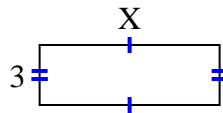
9) area = 42 cm^2



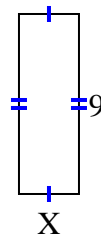
10) area = 24 cm^2



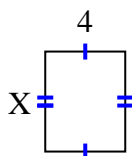
11) area = 27 cm^2



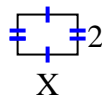
12) area = 27 cm^2



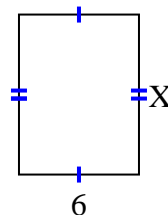
13) area = 20 cm^2



14) area = 6 cm^2



15) area = 48 cm^2



Réponses

1. 3

2. 2

3. 7

4. 4

5. 2

6. 9

7. 6

8. 2

9. 6

10. 8

11. 9

12. 3

13. 5

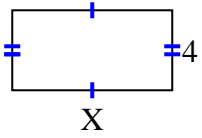
14. 3

15. 8

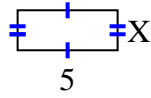


Trouvez la valeur de X pour chaque chiffre. Chaque chiffre est en centimètres (cm). Pas à l'échelle.

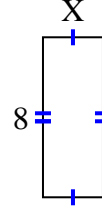
1) area = 32 cm^2



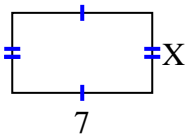
2) area = 10 cm^2



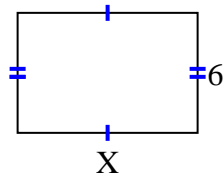
3) area = 24 cm^2



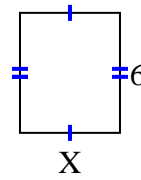
4) area = 28 cm^2



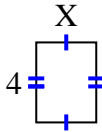
5) area = 54 cm^2



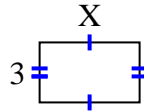
6) area = 30 cm^2



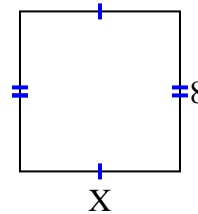
7) area = 12 cm^2



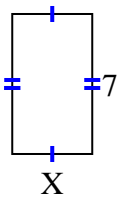
8) area = 15 cm^2



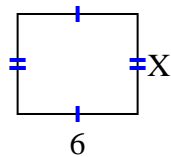
9) area = 64 cm^2



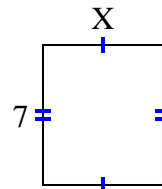
10) area = 28 cm^2



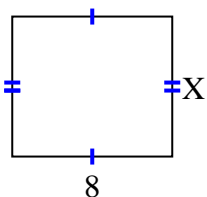
11) area = 30 cm^2



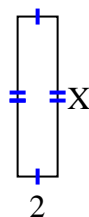
12) area = 42 cm^2



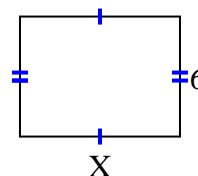
13) area = 56 cm^2



14) area = 16 cm^2



15) area = 48 cm^2



Réponses

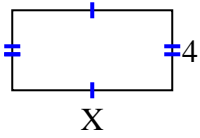
1. _____
2. _____
3. _____
4. _____
5. _____
6. _____
7. _____
8. _____
9. _____
10. _____
11. _____
12. _____
13. _____
14. _____
15. _____



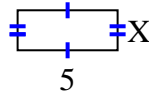
Trouvez la valeur de X pour chaque chiffre. Chaque chiffre est en centimètres (cm). Pas à l'échelle.

Réponses

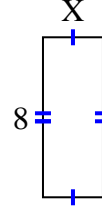
1) area = 32 cm^2



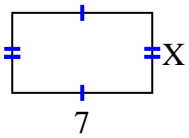
2) area = 10 cm^2



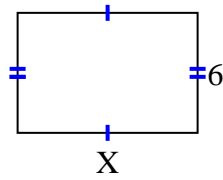
3) area = 24 cm^2



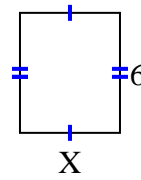
4) area = 28 cm^2



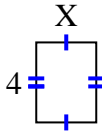
5) area = 54 cm^2



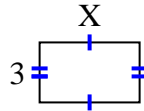
6) area = 30 cm^2



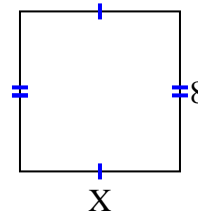
7) area = 12 cm^2



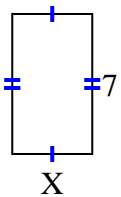
8) area = 15 cm^2



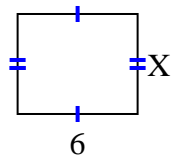
9) area = 64 cm^2



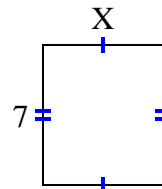
10) area = 28 cm^2



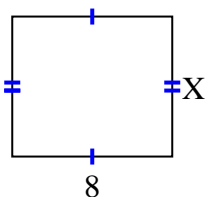
11) area = 30 cm^2



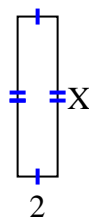
12) area = 42 cm^2



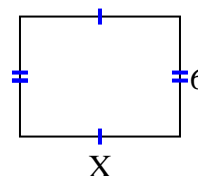
13) area = 56 cm^2



14) area = 16 cm^2



15) area = 48 cm^2



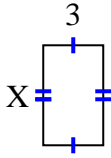
1. 8
2. 2
3. 3
4. 4
5. 9
6. 5
7. 3
8. 5
9. 8
10. 4
11. 5
12. 6
13. 7
14. 8
15. 8



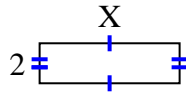
Trouvez la valeur de X pour chaque chiffre. Chaque chiffre est en centimètres (cm). Pas à l'échelle.

Réponses

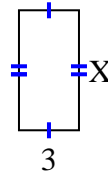
1) area = 15 cm^2



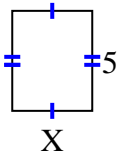
2) area = 14 cm^2



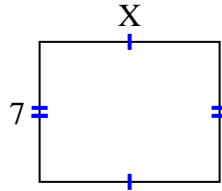
3) area = 18 cm^2



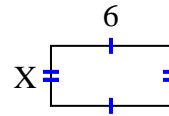
4) area = 20 cm^2



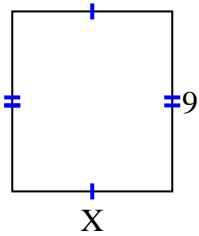
5) area = 63 cm^2



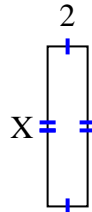
6) area = 18 cm^2



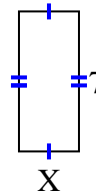
7) area = 72 cm^2



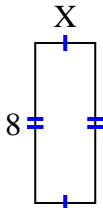
8) area = 16 cm^2



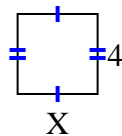
9) area = 21 cm^2



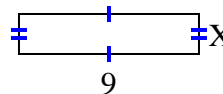
10) area = 24 cm^2



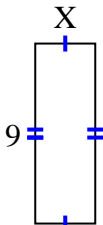
11) area = 16 cm^2



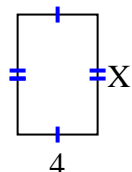
12) area = 18 cm^2



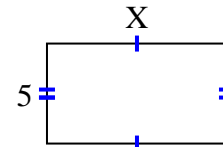
13) area = 27 cm^2



14) area = 24 cm^2



15) area = 45 cm^2

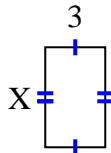


1. _____
2. _____
3. _____
4. _____
5. _____
6. _____
7. _____
8. _____
9. _____
10. _____
11. _____
12. _____
13. _____
14. _____
15. _____

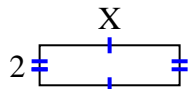


Trouvez la valeur de X pour chaque chiffre. Chaque chiffre est en centimètres (cm). Pas à l'échelle.

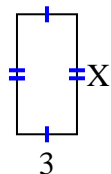
1) area = 15 cm^2



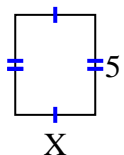
2) area = 14 cm^2



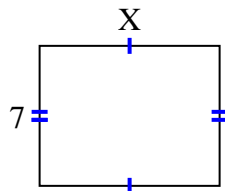
3) area = 18 cm^2



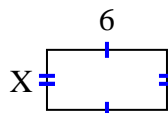
4) area = 20 cm^2



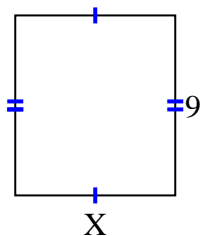
5) area = 63 cm^2



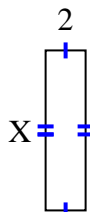
6) area = 18 cm^2



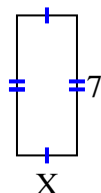
7) area = 72 cm^2



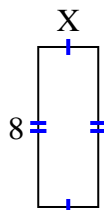
8) area = 16 cm^2



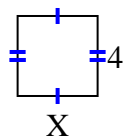
9) area = 21 cm^2



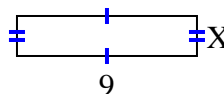
10) area = 24 cm^2



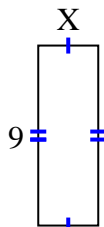
11) area = 16 cm^2



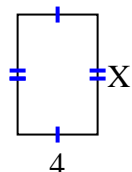
12) area = 18 cm^2



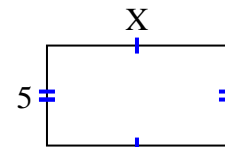
13) area = 27 cm^2



14) area = 24 cm^2



15) area = 45 cm^2



Réponses

1. 5

2. 7

3. 6

4. 4

5. 9

6. 3

7. 8

8. 8

9. 3

10. 3

11. 4

12. 2

13. 3

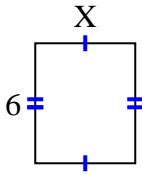
14. 6

15. 9

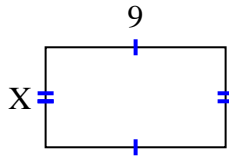


Trouvez la valeur de X pour chaque chiffre. Chaque chiffre est en centimètres (cm). Pas à l'échelle.

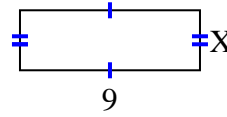
1) area = 30 cm^2



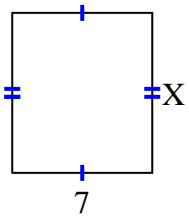
2) area = 45 cm^2



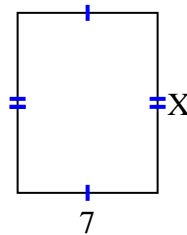
3) area = 27 cm^2



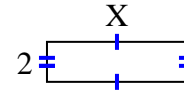
4) area = 56 cm^2



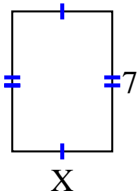
5) area = 63 cm^2



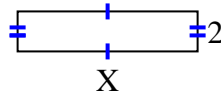
6) area = 14 cm^2



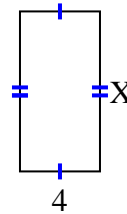
7) area = 35 cm^2



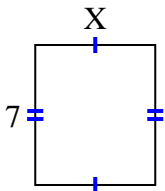
8) area = 18 cm^2



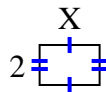
9) area = 32 cm^2



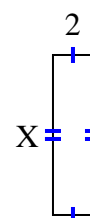
10) area = 42 cm^2



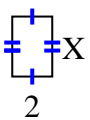
11) area = 6 cm^2



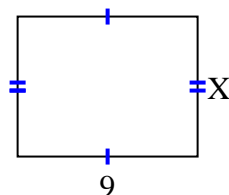
12) area = 16 cm^2



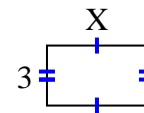
13) area = 6 cm^2



14) area = 63 cm^2



15) area = 15 cm^2



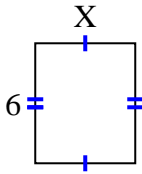
Réponses

1. _____
2. _____
3. _____
4. _____
5. _____
6. _____
7. _____
8. _____
9. _____
10. _____
11. _____
12. _____
13. _____
14. _____
15. _____

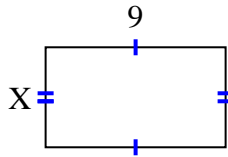


Trouvez la valeur de X pour chaque chiffre. Chaque chiffre est en centimètres (cm). Pas à l'échelle.

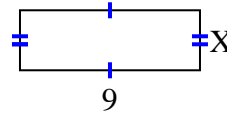
1) area = 30 cm^2



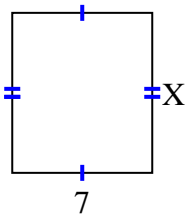
2) area = 45 cm^2



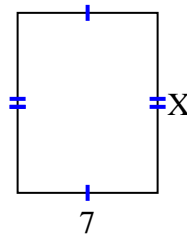
3) area = 27 cm^2



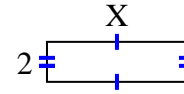
4) area = 56 cm^2



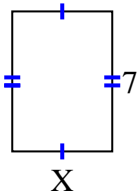
5) area = 63 cm^2



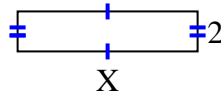
6) area = 14 cm^2



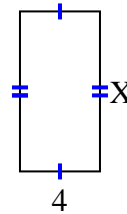
7) area = 35 cm^2



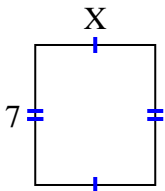
8) area = 18 cm^2



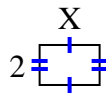
9) area = 32 cm^2



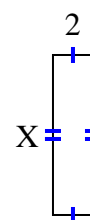
10) area = 42 cm^2



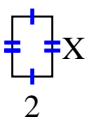
11) area = 6 cm^2



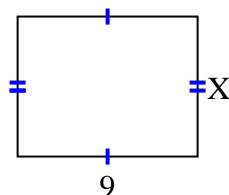
12) area = 16 cm^2



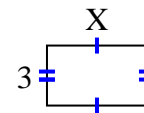
13) area = 6 cm^2



14) area = 63 cm^2



15) area = 15 cm^2



Réponses

1. 5

2. 5

3. 3

4. 8

5. 9

6. 7

7. 5

8. 9

9. 8

10. 6

11. 3

12. 8

13. 3

14. 7

15. 5