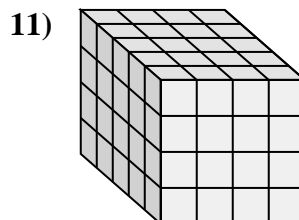
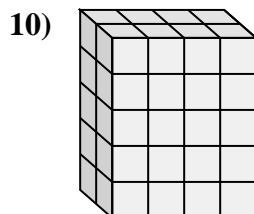
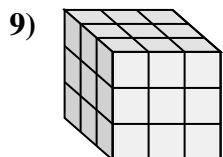
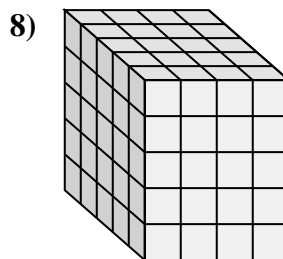
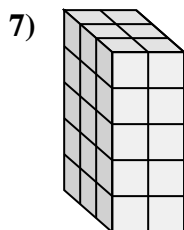
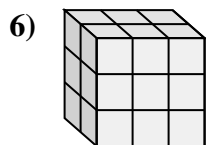
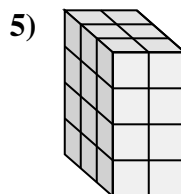
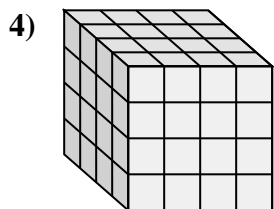
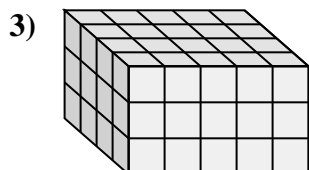
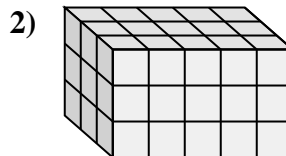
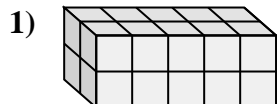
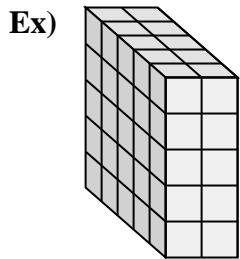




Associez chaque problème à l'équation qui pourrait le représenter. Répondez avec le terme et la lettre manquants.



Réponses

Ex. F, 2

1. I, 20

2. H, 3

3. B, 4

4. G, 4

5. D, 4

6. K, 2

7. A, 3

8. E, 5

9. C, 3

10. L, 5

11. J, 5

A. $__ \times 2 \times 5 = 30$

B. $__ \times 5 \times 3 = 60$

C. $3 \times 3 \times __ = 27$

D. $3 \times 2 \times __ = 24$

E. $__ \times 4 \times 5 = 100$

F. $5 \times __ \times 5 = 50$

G. $__ \times 4 \times 4 = 64$

H. $3 \times 5 \times __ = 45$

I. $2 \times 5 \times 2 = __$

J. $__ \times 4 \times 4 = 80$

K. $__ \times 3 \times 3 = 18$

L. $2 \times 4 \times __ = 40$