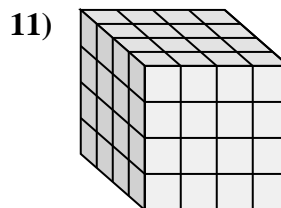
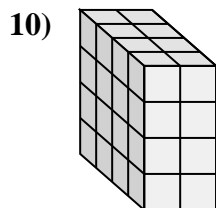
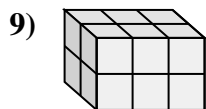
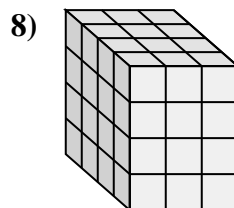
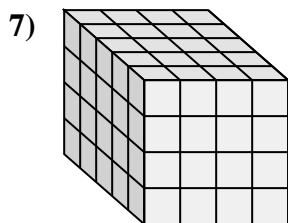
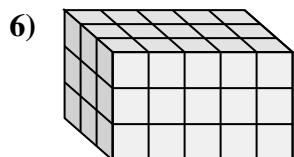
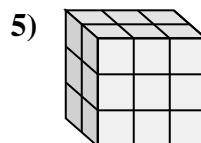
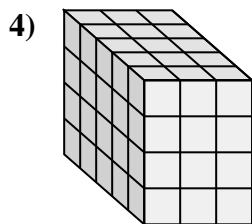
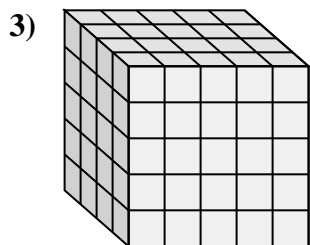
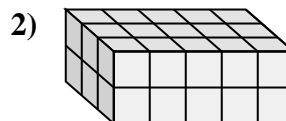
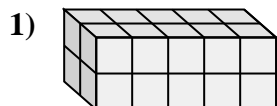
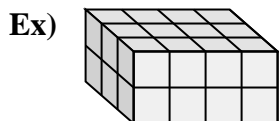






Associez chaque problème à l'équation qui pourrait le représenter. Répondez avec le terme et la lettre manquants.



**Réponses**

Ex. J, 24

1. F, 2

2. H, 5

3. B, 4

4. E, 3

5. L, 3

6. K, 3

7. D, 5

8. A, 48

9. C, 2

10. I, 4

11. G, 4

A.  $4 \times 3 \times 4 = \underline{\quad}$

B.  $\underline{\quad} \times 5 \times 5 = 100$

C.  $\underline{\quad} \times 3 \times 2 = 12$

D.  $\underline{\quad} \times 4 \times 4 = 80$

E.  $5 \times \underline{\quad} \times 4 = 60$

F.  $\underline{\quad} \times 5 \times 2 = 20$

G.  $4 \times 4 \times \underline{\quad} = 64$

H.  $3 \times \underline{\quad} \times 2 = 30$

I.  $\underline{\quad} \times 2 \times 4 = 32$

J.  $3 \times 4 \times 2 = \underline{\quad}$

K.  $3 \times 5 \times \underline{\quad} = 45$

L.  $2 \times 3 \times \underline{\quad} = 18$