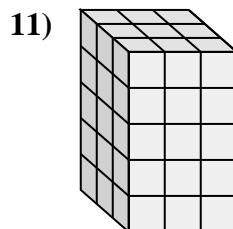
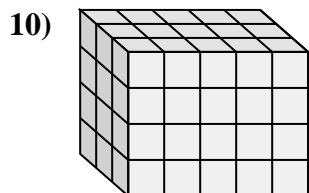
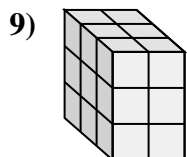
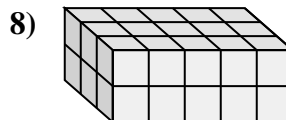
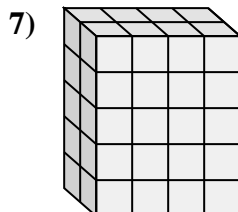
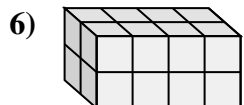
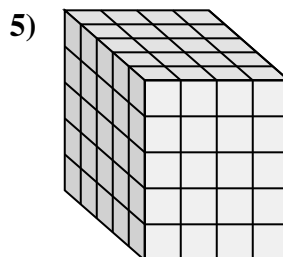
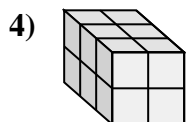
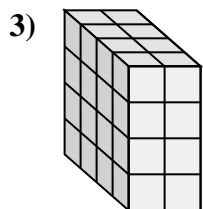
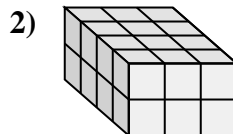
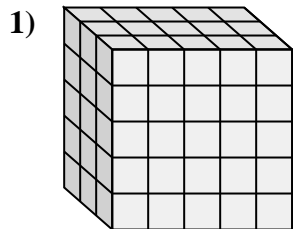
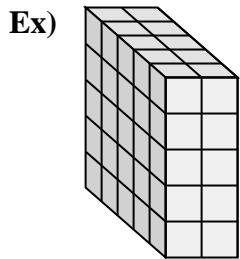






Associez chaque problème à l'équation qui pourrait le représenter. Répondez avec le terme et la lettre manquants.



**Réponses**

Ex. E, 5

1. G, 5

2. F, 2

3. H, 4

4. K, 12

5. L, 100

6. A, 16

7. J, 40

8. C, 5

9. B, 3

10. D, 4

11. I, 3

A.  $2 \times 4 \times 2 = \underline{\quad}$

B.  $3 \times 2 \times \underline{\quad} = 18$

C.  $3 \times \underline{\quad} \times 2 = 30$

D.  $3 \times 5 \times \underline{\quad} = 60$

E.  $\underline{\quad} \times 2 \times 5 = 50$

F.  $4 \times 3 \times \underline{\quad} = 24$

G.  $3 \times 5 \times \underline{\quad} = 75$

H.  $\underline{\quad} \times 2 \times 4 = 32$

I.  $3 \times \underline{\quad} \times 5 = 45$

J.  $2 \times 4 \times 5 = \underline{\quad}$

K.  $3 \times 2 \times 2 = \underline{\quad}$

L.  $5 \times 4 \times 5 = \underline{\quad}$