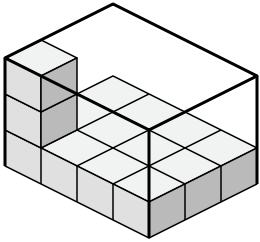




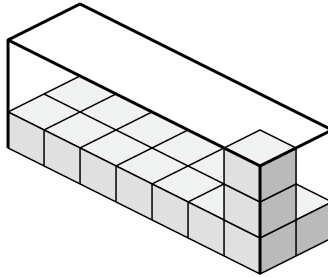
Créez une expression pour déterminer le volume de chaque boîte.

Réponses

1)



2)



1. _____

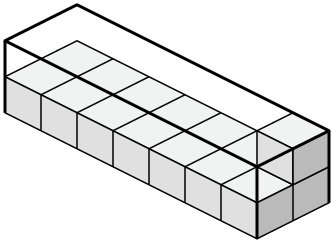
2. _____

3. _____

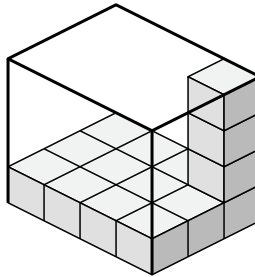
4. _____

5. _____

3)



4)

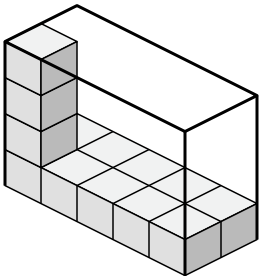


6. _____

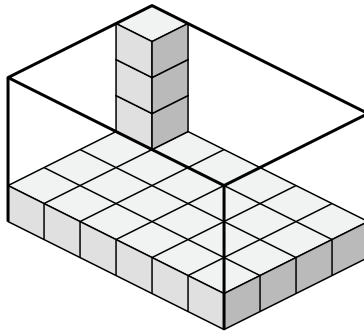
7. _____

8. _____

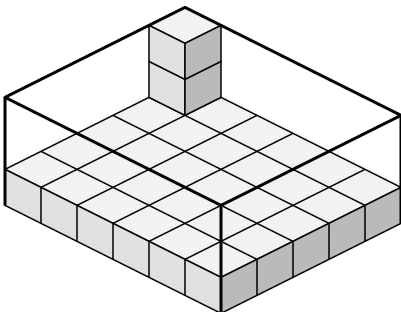
5)



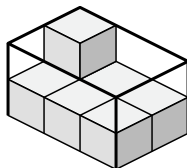
6)



7)



8)

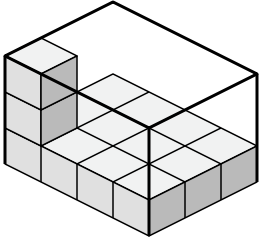




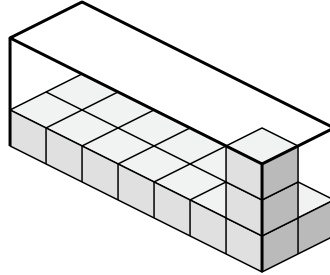
Créez une expression pour déterminer le volume de chaque boîte.

Réponses

1)



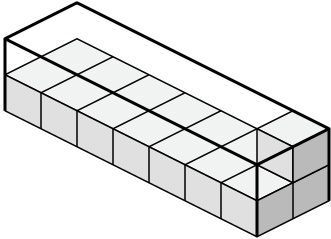
2)



1. $4 \times 3 \times 3$

2. $7 \times 2 \times 3$

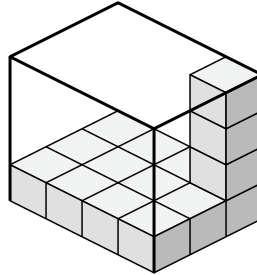
3)



3. $7 \times 2 \times 2$

4. $4 \times 3 \times 4$

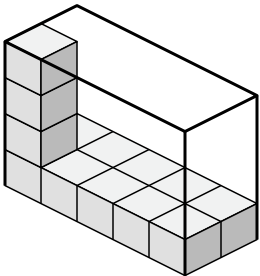
4)



5. $5 \times 2 \times 4$

6. $6 \times 4 \times 4$

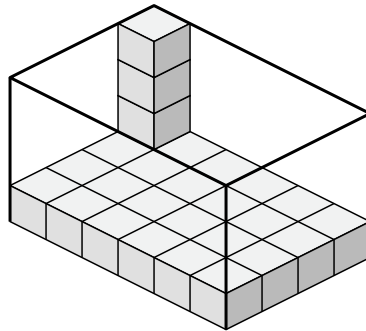
5)



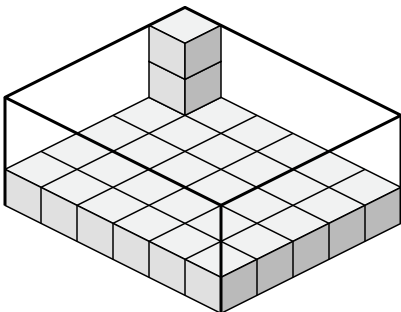
7. $6 \times 5 \times 3$

8. $3 \times 2 \times 2$

6)



7)



8)

