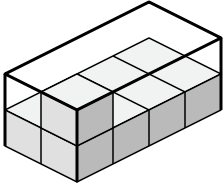


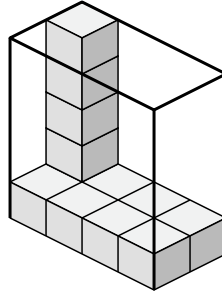


Créez une expression pour déterminer le volume de chaque boîte.

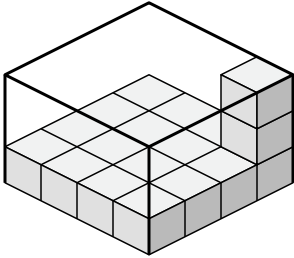
1)



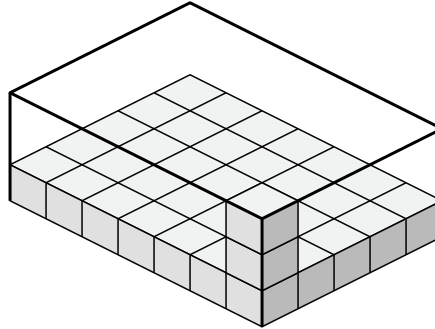
2)



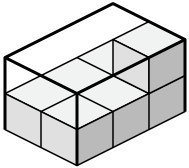
3)



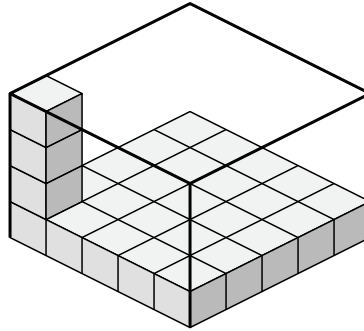
4)



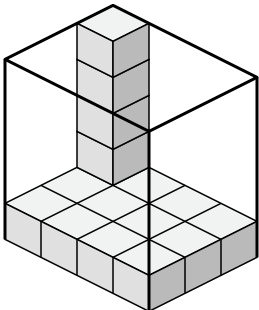
5)



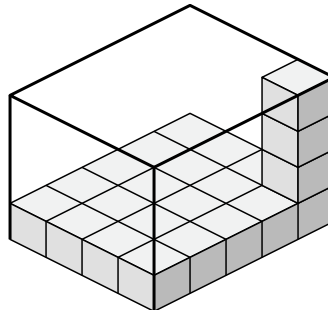
6)



7)



8)



Réponses

1. _____

2. _____

3. _____

4. _____

5. _____

6. _____

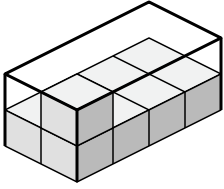
7. _____

8. _____

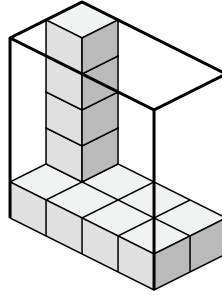


Créez une expression pour déterminer le volume de chaque boîte.

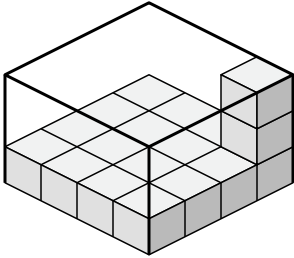
1)



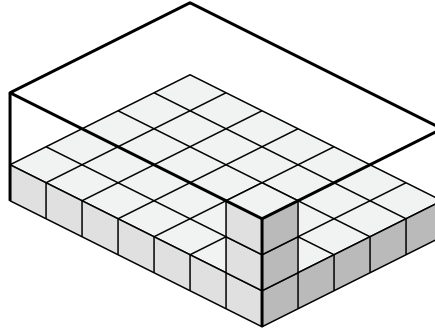
2)



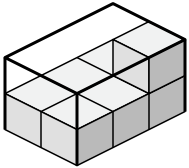
3)



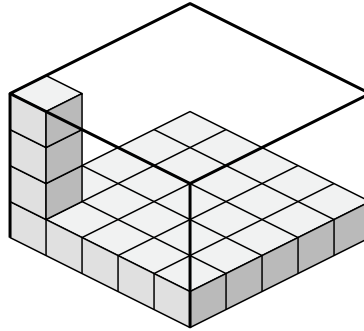
4)



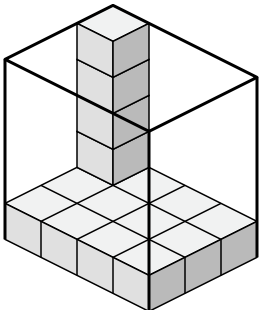
5)



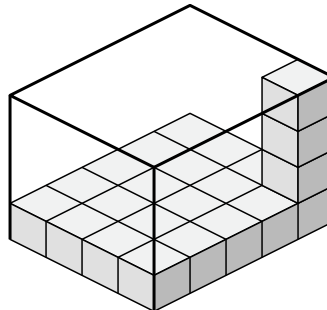
6)



7)



8)



Réponses

1. 2×4×2

2. 4×2×5

3. 4×4×3

4. 7×5×3

5. 2×3×2

6. 5×5×4

7. 4×3×5

8. 4×5×4