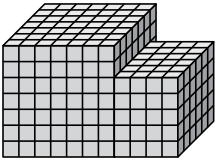




Trouvez le volume total de chaque figure. La mesure est en cm (pas à l'échelle).

Réponses

1)



1. _____

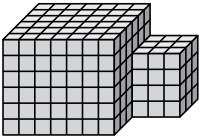
2. _____

3. _____

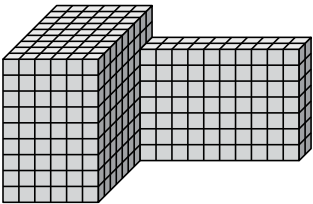
4. _____

5. _____

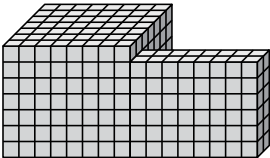
2)



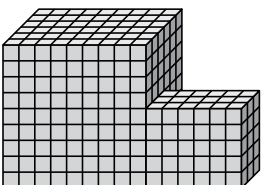
3)



4)

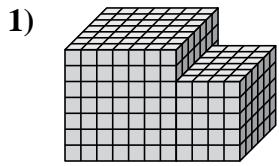


5)



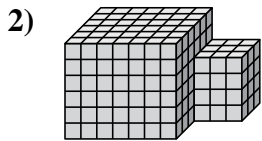


Trouvez le volume total de chaque figure. La mesure est en cm (pas à l'échelle).

Réponses

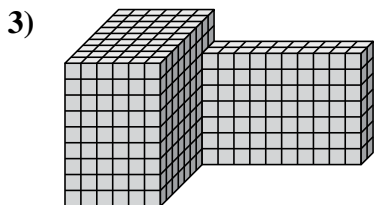
$$7 \times 7 \times 7 = 343$$
$$4 \times 6 \times 5 = 120$$

1. 463 cm³



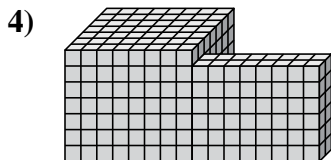
$$7 \times 6 \times 6 = 252$$
$$3 \times 3 \times 4 = 36$$

2. 288 cm³



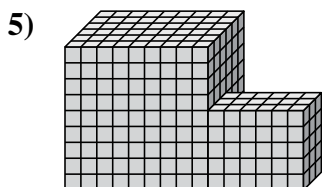
$$6 \times 9 \times 9 = 486$$
$$10 \times 2 \times 7 = 140$$

3. 626 cm³



$$8 \times 7 \times 7 = 392$$
$$8 \times 2 \times 6 = 96$$

4. 488 cm³



$$9 \times 6 \times 9 = 486$$
$$6 \times 3 \times 5 = 90$$

5. 576 cm³