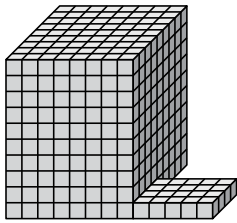




Trouvez le volume total de chaque figure. La mesure est en cm (pas à l'échelle).

Réponses

1)



1. _____

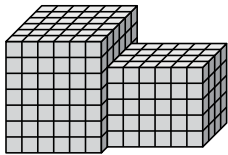
2. _____

3. _____

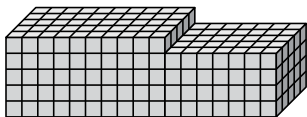
4. _____

5. _____

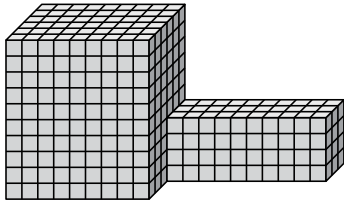
2)



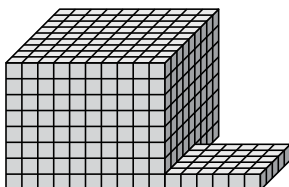
3)



4)



5)

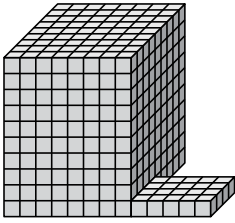




Trouvez le volume total de chaque figure. La mesure est en cm (pas à l'échelle).

Réponses

1)

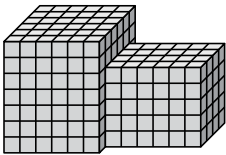


$$8 \times 9 \times 10 = 720$$

$$5 \times 4 \times 1 = 20$$

1. 740 cm³

2)

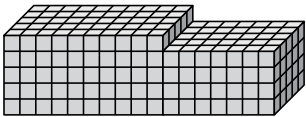


$$6 \times 6 \times 7 = 252$$

$$6 \times 4 \times 5 = 120$$

2. 372 cm³

3)

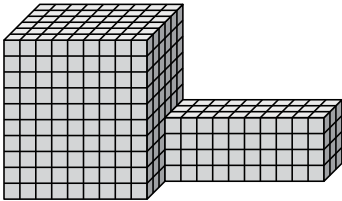


$$10 \times 5 \times 5 = 250$$

$$7 \times 5 \times 4 = 140$$

3. 390 cm³

4)

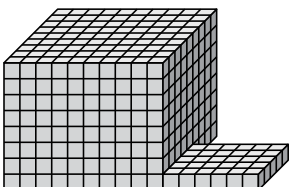


$$9 \times 6 \times 10 = 540$$

$$10 \times 3 \times 4 = 120$$

4. 660 cm³

5)



$$10 \times 9 \times 8 = 720$$

$$6 \times 5 \times 1 = 30$$

5. 750 cm³