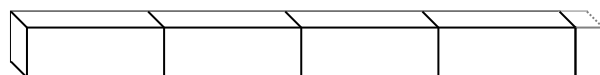
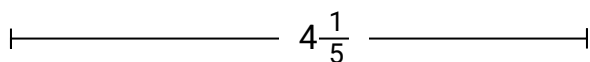





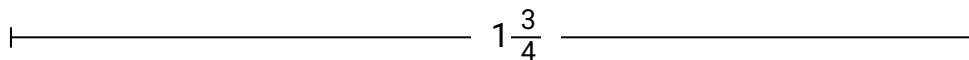
Déterminez la plus petite fraction qui peut être faite à partir d'une plus grosse pièce.

Réponses

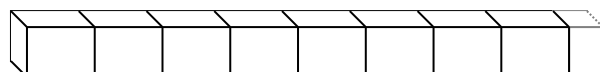
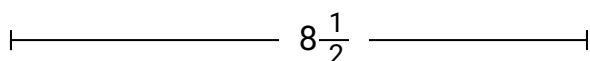
Ex)



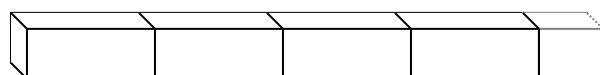
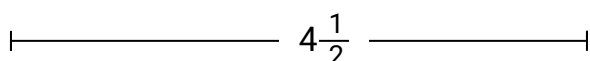
1)



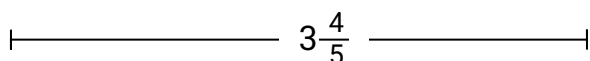
2)



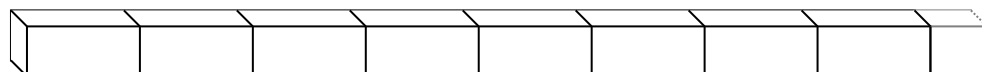
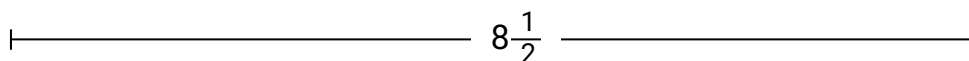
3)



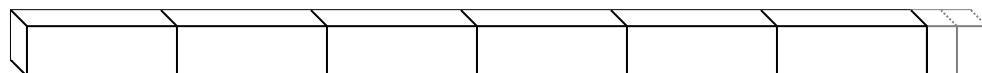
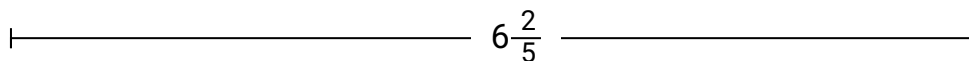
4)



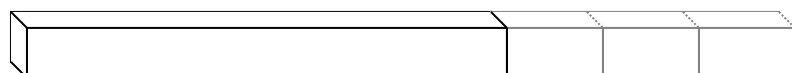
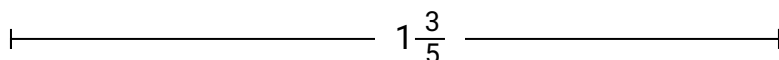
5)



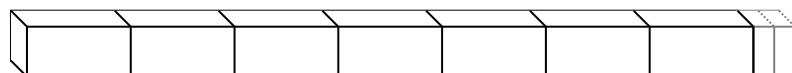
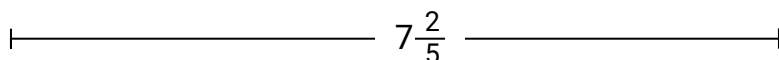
6)




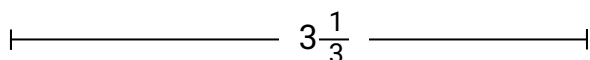
7)




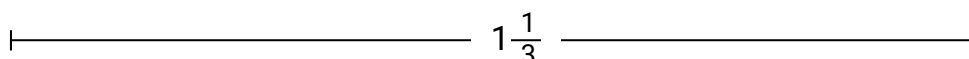
8)



9)



10)



Ex.

21

1.

2.

3.

4.

5.

6.

7.

8.

9.

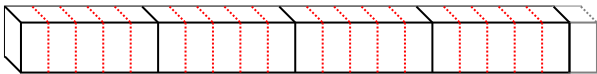
10.




Déterminez la plus petite fraction qui peut être faite à partir d'une plus grosse pièce.

Réponses

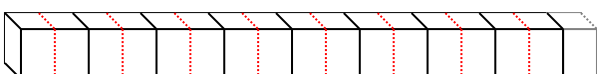
Ex) $4\frac{1}{5}$



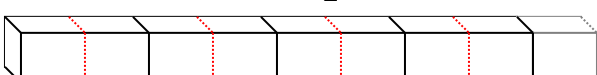
1) $1\frac{3}{4}$




2) $8\frac{1}{2}$




3) $4\frac{1}{2}$



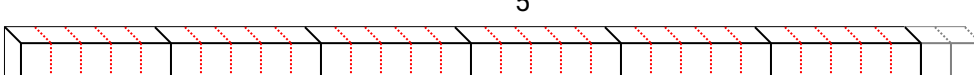
4) $3\frac{4}{5}$



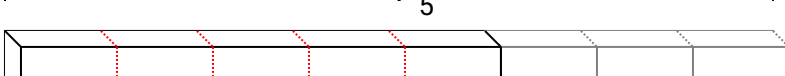
5) $8\frac{1}{2}$



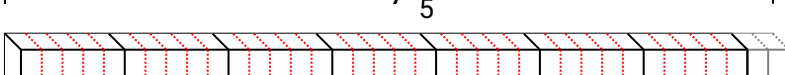
6) $6\frac{2}{5}$



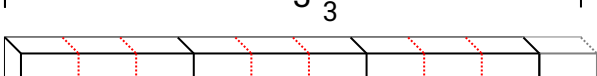
7) $1\frac{3}{5}$



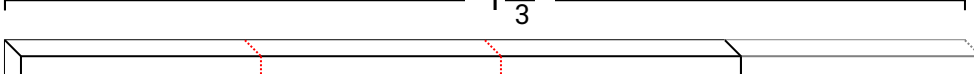
8) $7\frac{2}{5}$



9) $3\frac{1}{3}$



10) $1\frac{1}{3}$



- Ex. **21**
1. **7**
2. **17**
3. **9**
4. **19**
5. **17**
6. **32**
7. **8**
8. **37**
9. **10**
10. **4**