
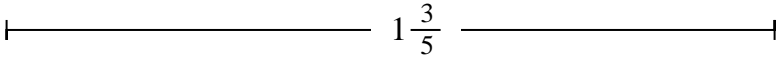




Déterminez la plus petite fraction qui peut être faite à partir d'une plus grosse pièce.


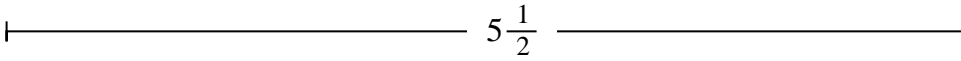
Réponses

Ex)



Ex. **8**


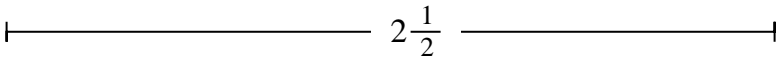
1)



1. _____

2. _____

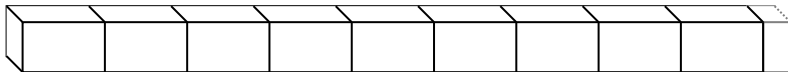
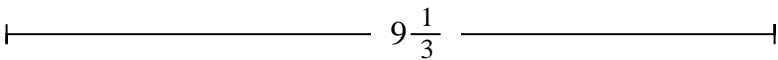
2)



3. _____

4. _____

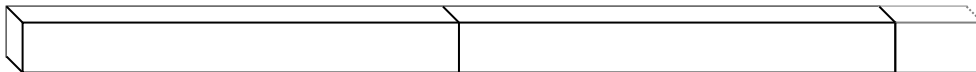
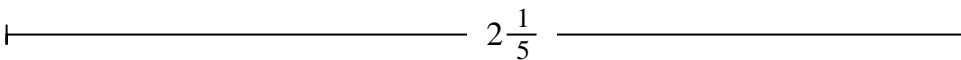
3)



5. _____

6. _____

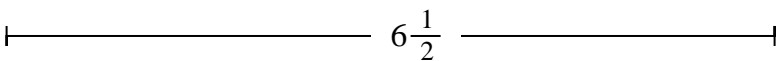
4)



7. _____

8. _____

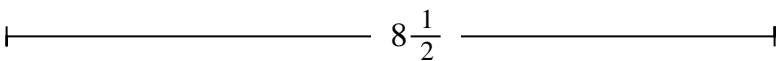
5)



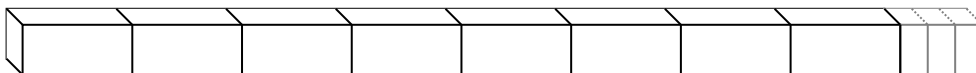
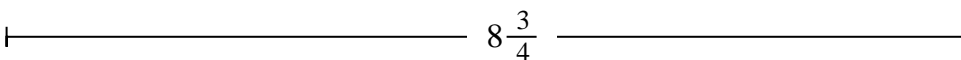
9. _____

10. _____


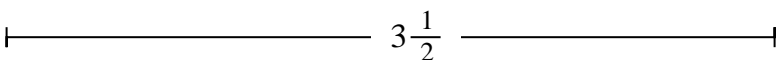
6)




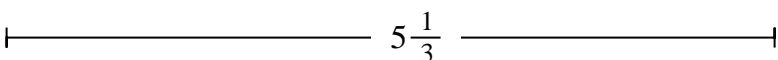
7)



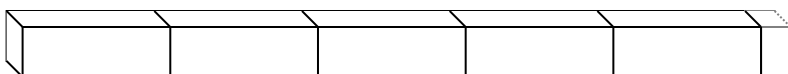
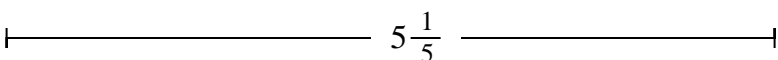
8)



9)



10)





Déterminez la plus petite fraction qui peut être faite à partir d'une plus grosse pièce.

Réponses

Ex) $1\frac{3}{5}$

1) $5\frac{1}{2}$

2) $2\frac{1}{2}$

3) $9\frac{1}{3}$

4) $2\frac{1}{5}$

5) $6\frac{1}{2}$

6) $8\frac{1}{2}$

7) $8\frac{3}{4}$

8) $3\frac{1}{2}$

9) $5\frac{1}{3}$

10) $5\frac{1}{5}$

- Ex. 8
- 1. 11
- 2. 5
- 3. 28
- 4. 11
- 5. 13
- 6. 17
- 7. 35
- 8. 7
- 9. 16
- 10. 26