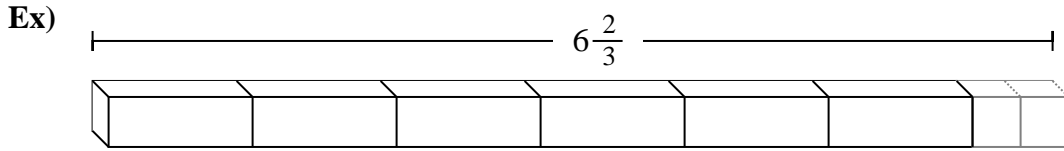


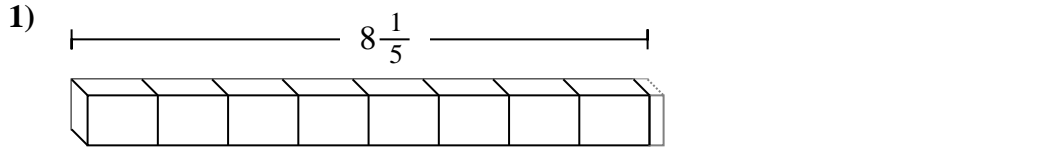


Déterminez la plus petite fraction qui peut être faite à partir d'une plus grosse pièce.

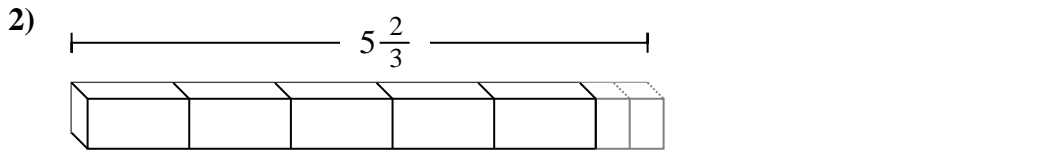
Réponses



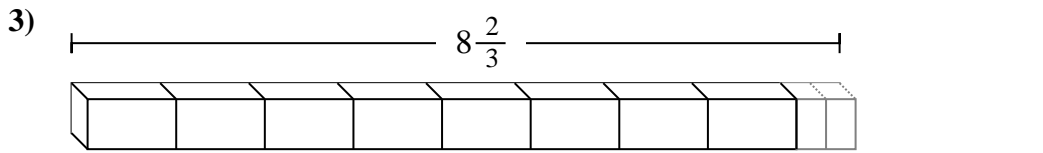
Ex. **20**



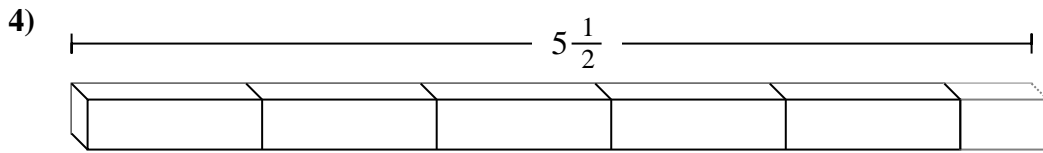
1. _____



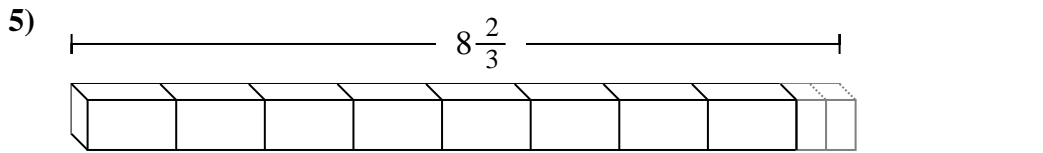
2. _____



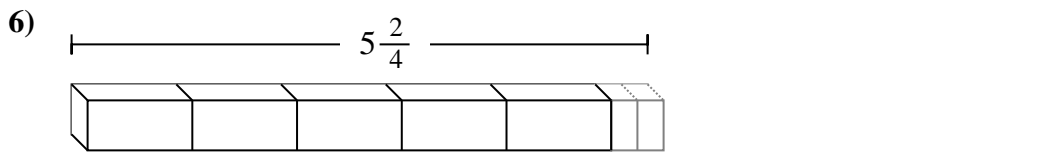
3. _____



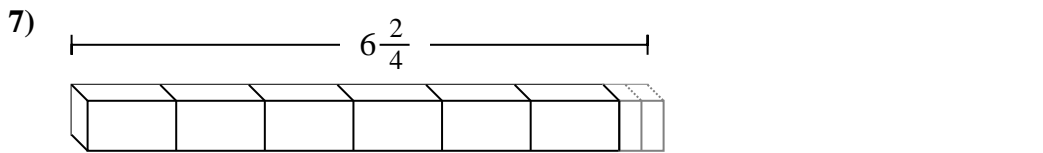
4. _____



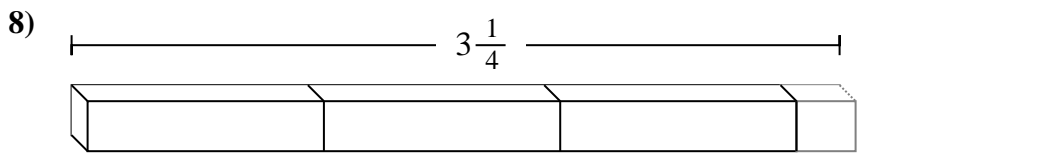
5. _____



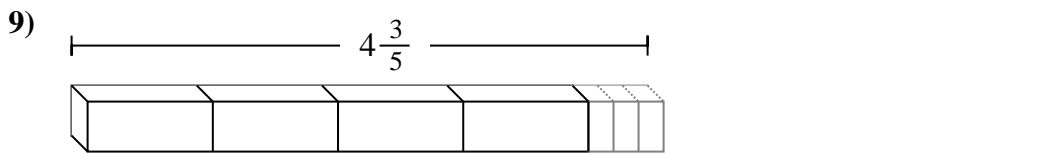
6. _____



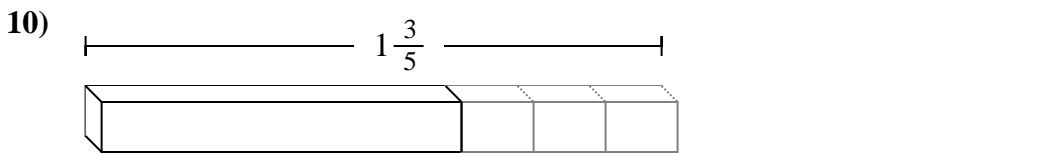
7. _____



8. _____



9. _____

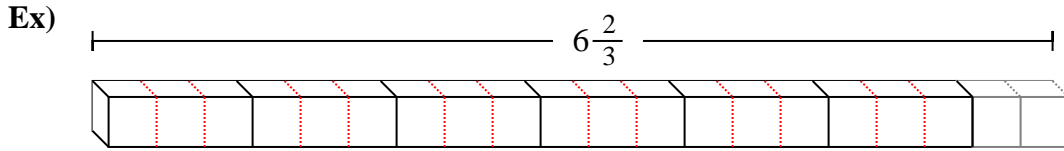


10. _____

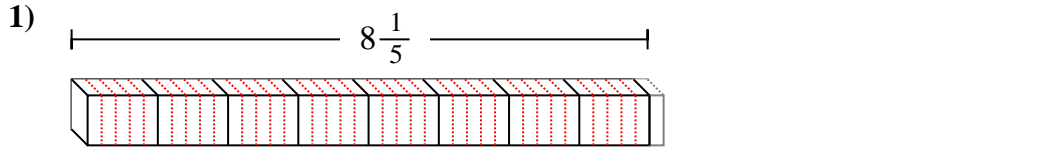


Déterminez la plus petite fraction qui peut être faite à partir d'une plus grosse pièce.

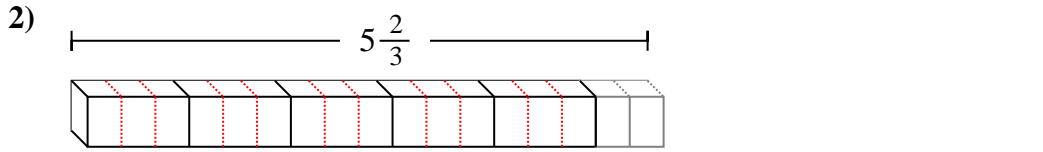
Réponses



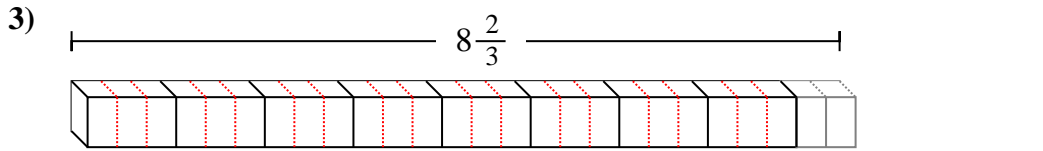
Ex. 20



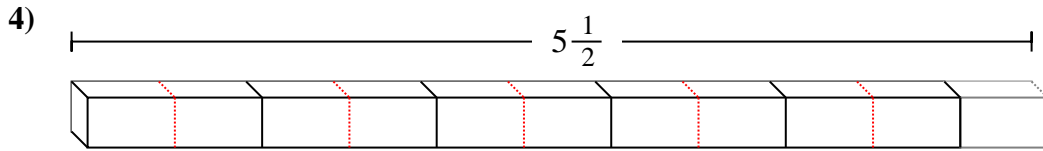
1. 41



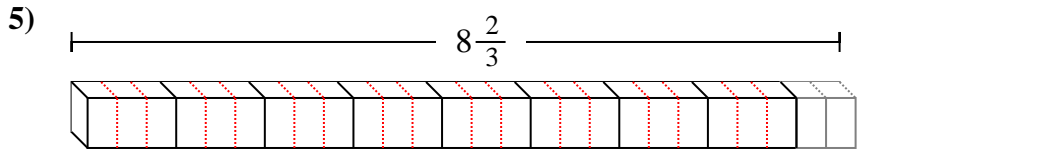
2. 17



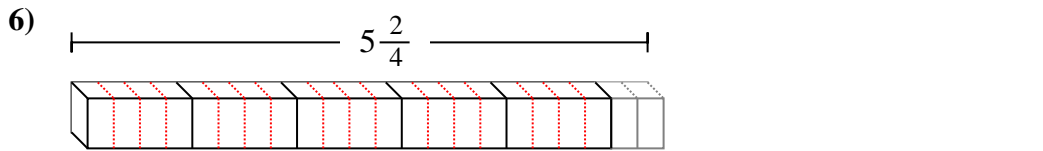
3. 26



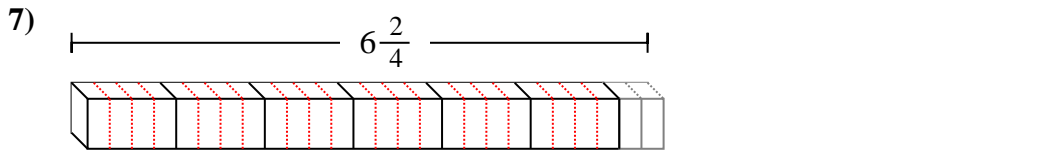
4. 11



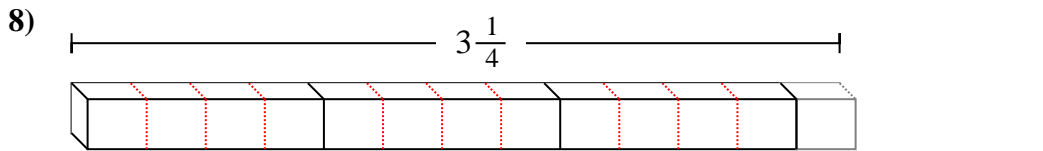
5. 26



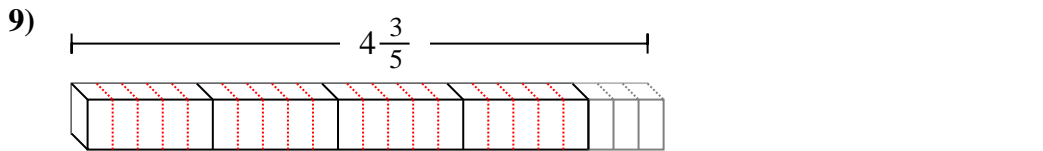
6. 22



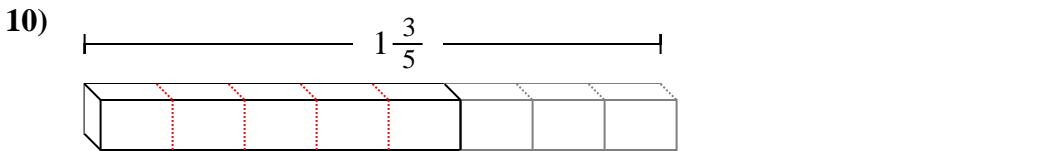
7. 26



8. 13



9. 23

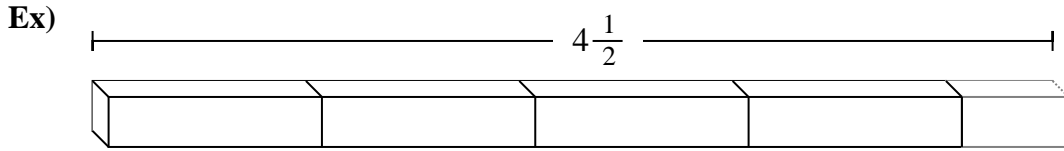


10. 8

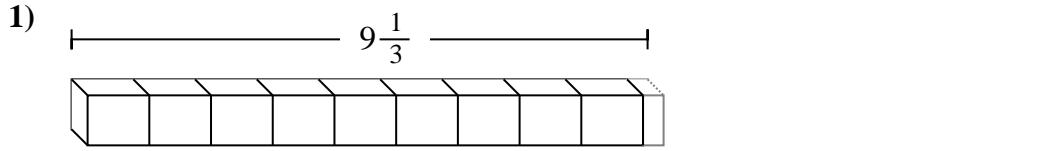


Déterminez la plus petite fraction qui peut être faite à partir d'une plus grosse pièce.

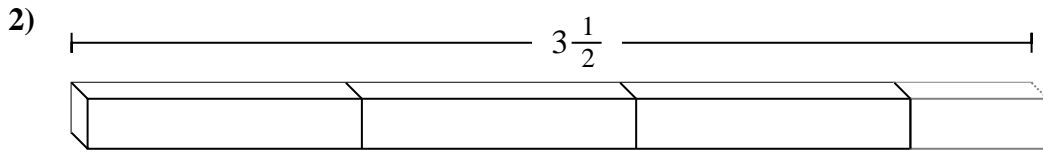
Réponses



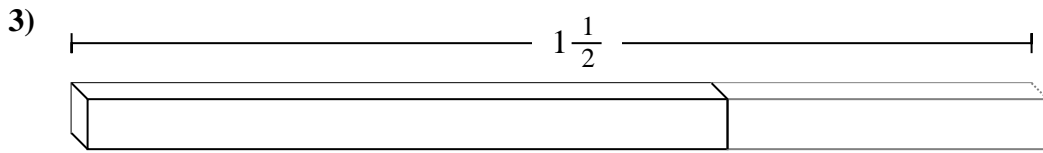
Ex. 9



1. _____



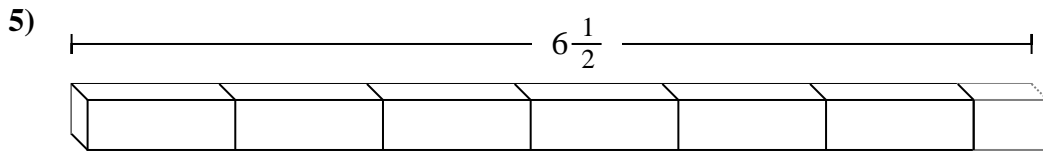
2. _____



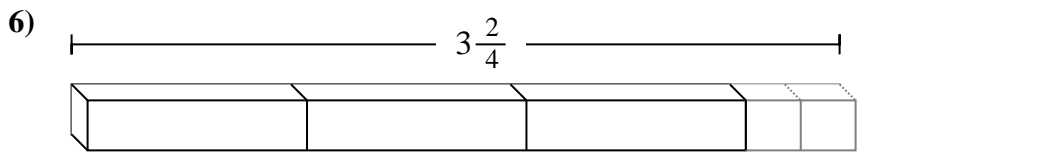
3. _____



4. _____



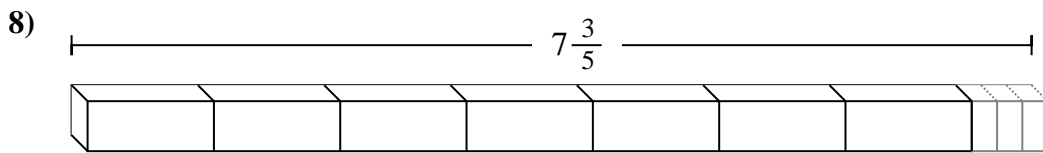
5. _____



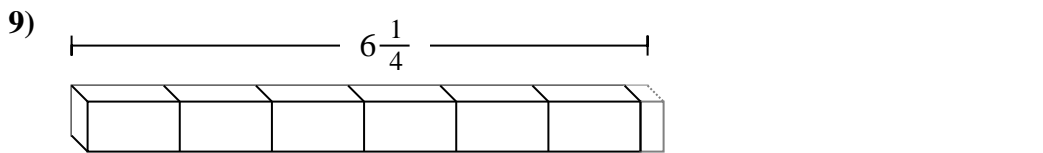
6. _____



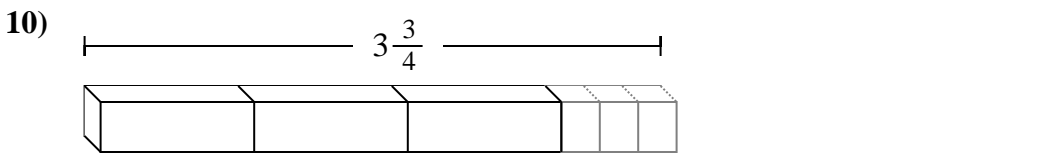
7. _____



8. _____



9. _____

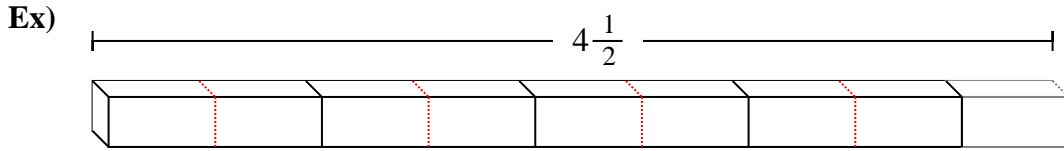


10. _____

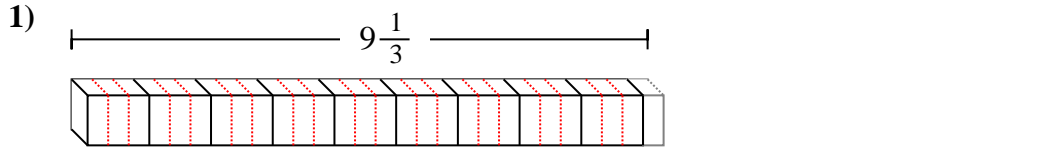


Déterminez la plus petite fraction qui peut être faite à partir d'une plus grosse pièce.

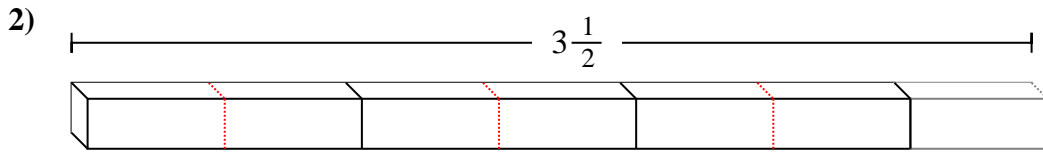
Réponses



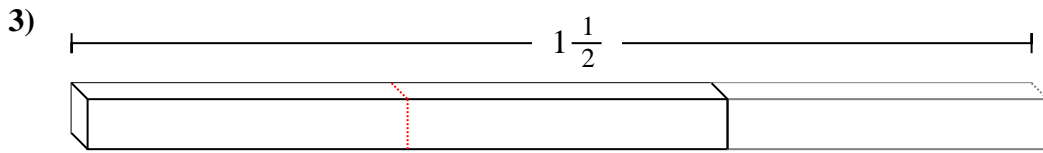
Ex. 9



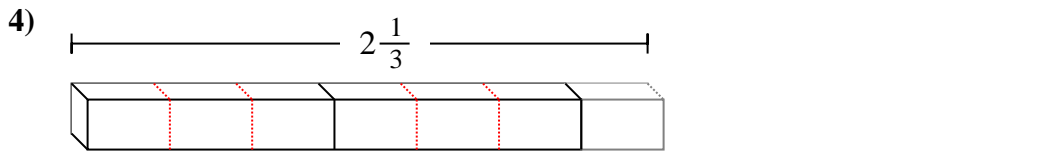
1. 28



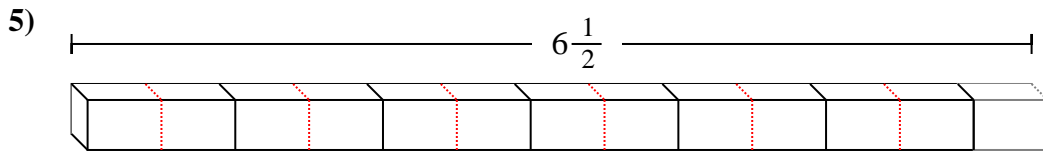
2. 7



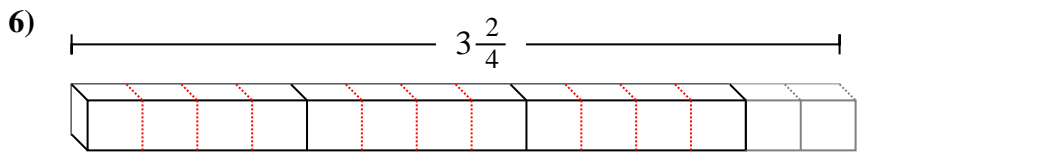
3. 3



4. 7



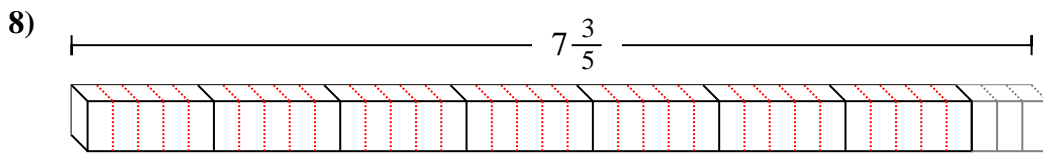
5. 13



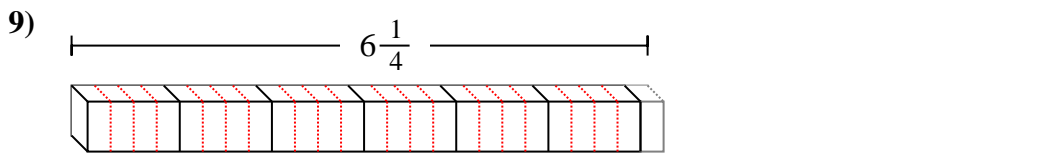
6. 14



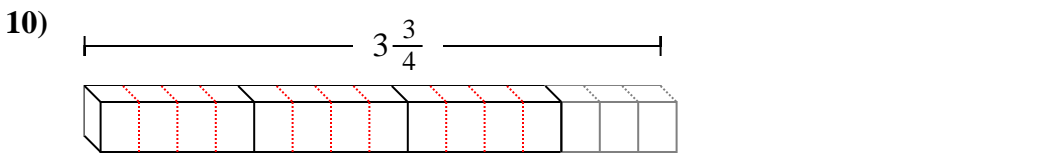
7. 8



8. 38



9. 25




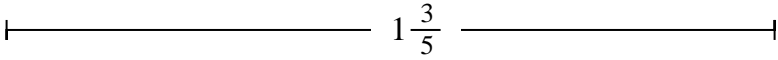
10. 15



Déterminez la plus petite fraction qui peut être faite à partir d'une plus grosse pièce.


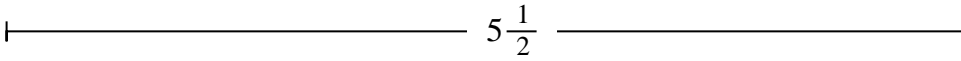
Réponses

Ex)




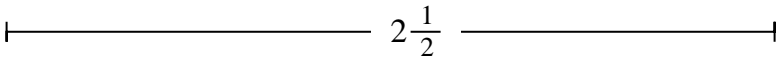
Ex. **8**

1)



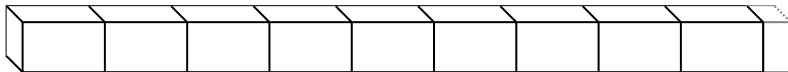
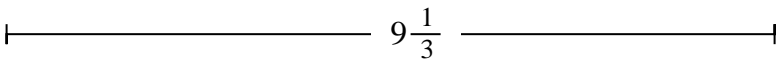
1. _____

2)



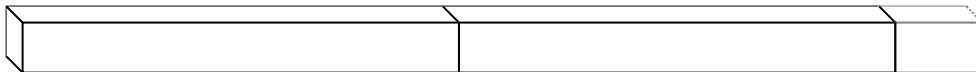
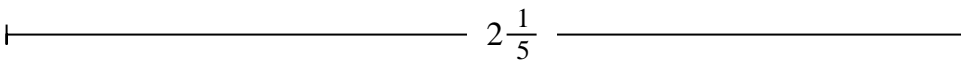
2. _____

3)



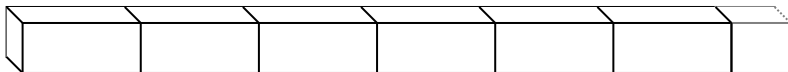
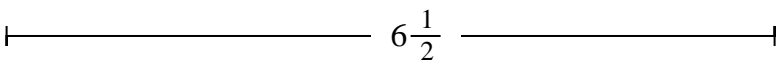
3. _____

4)



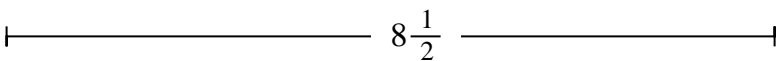
4. _____

5)



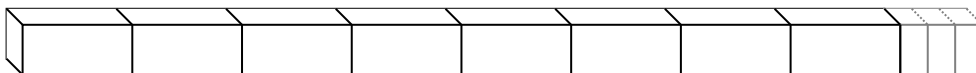
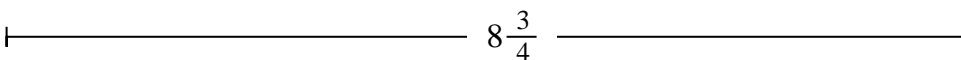
5. _____

6)




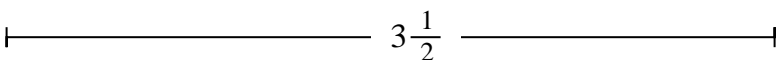
6. _____

7)




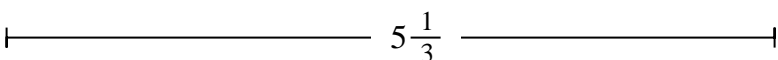
7. _____

8)



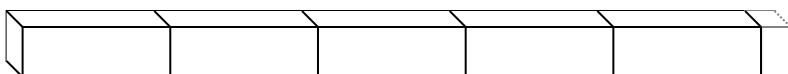
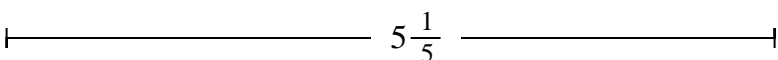
8. _____

9)



9. _____

10)



10. _____



Déterminez la plus petite fraction qui peut être faite à partir d'une plus grosse pièce.

Réponses

Ex) $1\frac{3}{5}$

1) $5\frac{1}{2}$

2) $2\frac{1}{2}$

3) $9\frac{1}{3}$

4) $2\frac{1}{5}$

5) $6\frac{1}{2}$

6) $8\frac{1}{2}$

7) $8\frac{3}{4}$

8) $3\frac{1}{2}$

9) $5\frac{1}{3}$

10) $5\frac{1}{5}$

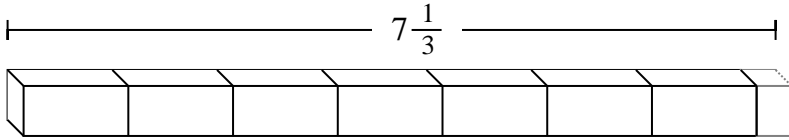
- Ex. 8
1. 11
2. 5
3. 28
4. 11
5. 13
6. 17
7. 35
8. 7
9. 16
10. 26



Déterminez la plus petite fraction qui peut être faite à partir d'une plus grosse pièce.

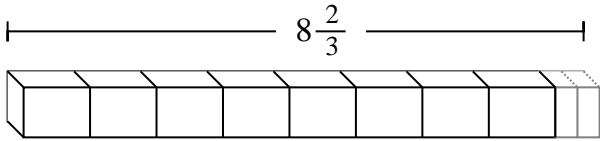
Réponses

Ex)



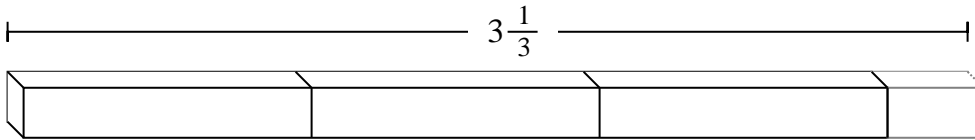
Ex. **22**

1)



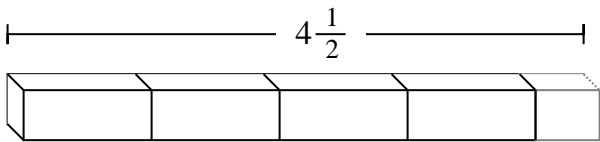
1. _____

2)



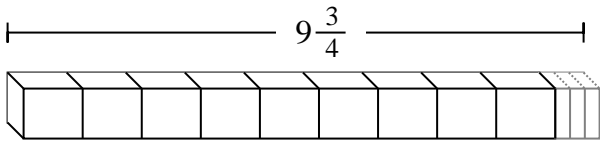
2. _____

3)



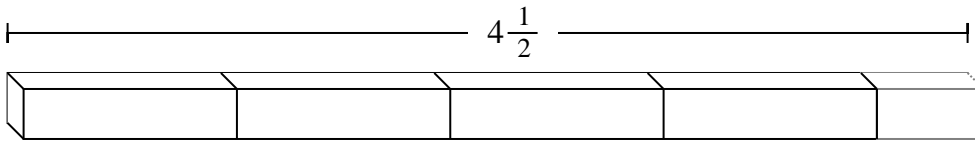
3. _____

4)



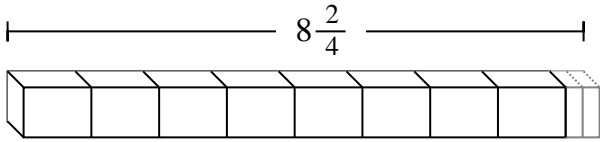
4. _____

5)



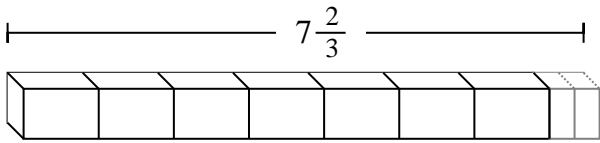
5. _____

6)



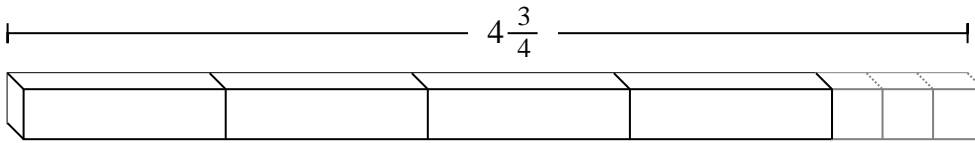
6. _____

7)



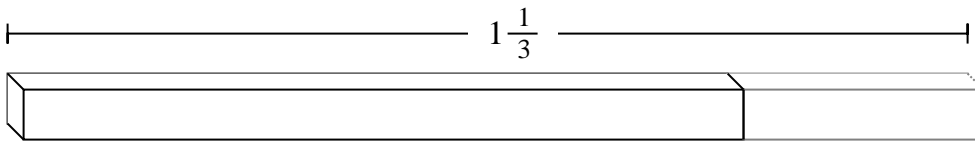
7. _____

8)



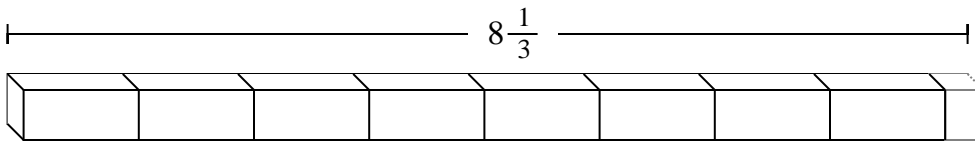
8. _____

9)



9. _____

10)



10. _____



Déterminez la plus petite fraction qui peut être faite à partir d'une plus grosse pièce.

Réponses

Ex) $7\frac{1}{3}$

1) $8\frac{2}{3}$

2) $3\frac{1}{3}$

3) $4\frac{1}{2}$

4) $9\frac{3}{4}$

5) $4\frac{1}{2}$

6) $8\frac{2}{4}$

7) $7\frac{2}{3}$

8) $4\frac{3}{4}$

9) $1\frac{1}{3}$

10) $8\frac{1}{3}$

- Ex. 22
- 1. 26
- 2. 10
- 3. 9
- 4. 39
- 5. 9
- 6. 34
- 7. 23
- 8. 19
- 9. 4
- 10. 25



Déterminez la plus petite fraction qui peut être faite à partir d'une plus grosse pièce.

Réponses

Ex) $9\frac{1}{2}$

1) $9\frac{1}{2}$

2) $3\frac{2}{3}$

3) $9\frac{2}{3}$

4) $7\frac{2}{4}$

5) $2\frac{1}{2}$

6) $5\frac{2}{4}$

7) $4\frac{2}{4}$

8) $4\frac{2}{3}$

9) $4\frac{1}{5}$

10) $8\frac{2}{3}$

- Ex. **19**
1. _____
2. _____
3. _____
4. _____
5. _____
6. _____
7. _____
8. _____
9. _____
10. _____



Déterminez la plus petite fraction qui peut être faite à partir d'une plus grosse pièce.

Réponses

Ex) $9\frac{1}{2}$

1) $9\frac{1}{2}$

2) $3\frac{2}{3}$

3) $9\frac{2}{3}$

4) $7\frac{2}{4}$

5) $2\frac{1}{2}$

6) $5\frac{2}{4}$

7) $4\frac{2}{4}$

8) $4\frac{2}{3}$

9) $4\frac{1}{5}$

10) $8\frac{2}{3}$

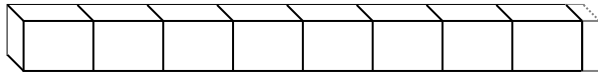
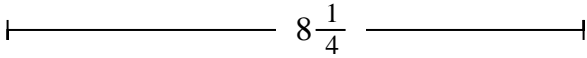
- Ex. 19
- 1. 19
- 2. 11
- 3. 29
- 4. 30
- 5. 5
- 6. 22
- 7. 18
- 8. 14
- 9. 21
- 10. 26



Déterminez la plus petite fraction qui peut être faite à partir d'une plus grosse pièce.

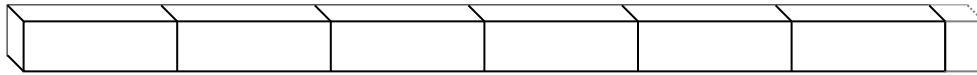
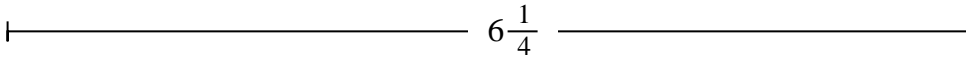
Réponses

Ex)



Ex. **33**

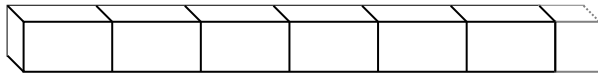
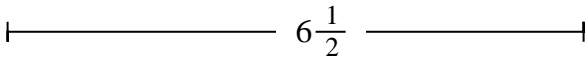
1)



1. _____

2. _____

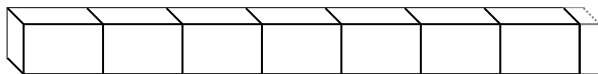
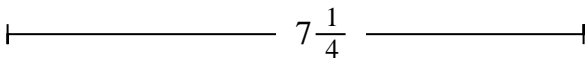
2)



3. _____

4. _____


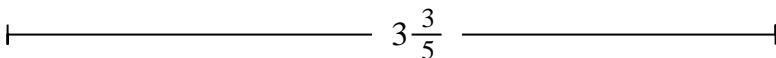
3)



5. _____

6. _____


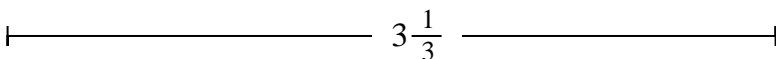
4)



7. _____

8. _____

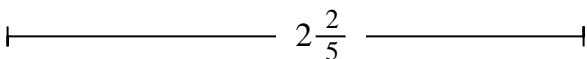
5)



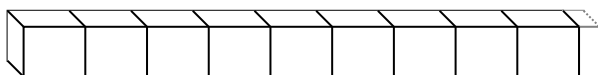
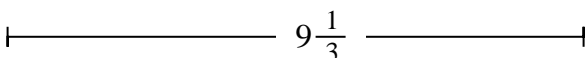
9. _____

10. _____

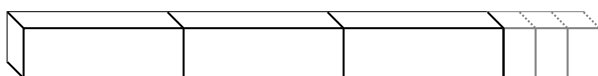
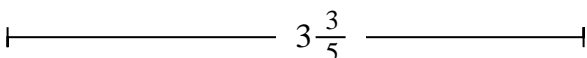
6)



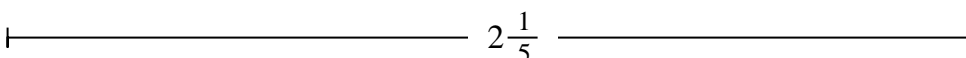
7)



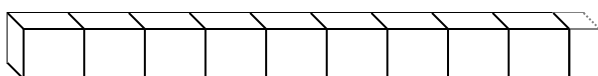
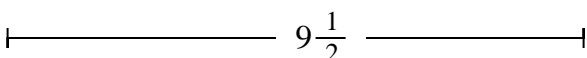
8)



9)



10)





Déterminez la plus petite fraction qui peut être faite à partir d'une plus grosse pièce.

Réponses

Ex) $8\frac{1}{4}$

1) $6\frac{1}{4}$

2) $6\frac{1}{2}$

3) $7\frac{1}{4}$

4) $3\frac{3}{5}$

5) $3\frac{1}{3}$

6) $2\frac{2}{5}$

7) $9\frac{1}{3}$

8) $3\frac{3}{5}$

9) $2\frac{1}{5}$

10) $9\frac{1}{2}$

- Ex. 33
1. 25
2. 13
3. 29
4. 18
5. 10
6. 12
7. 28
8. 18
9. 11
10. 19



Déterminez la plus petite fraction qui peut être faite à partir d'une plus grosse pièce.

Réponses

Ex) $6\frac{3}{4}$

1) $7\frac{1}{2}$

2) $5\frac{1}{2}$

3) $4\frac{1}{3}$

4) $9\frac{3}{4}$

5) $7\frac{1}{2}$

6) $8\frac{2}{3}$

7) $2\frac{1}{2}$

8) $7\frac{1}{2}$

9) $2\frac{1}{3}$

10) $8\frac{1}{3}$

- Ex. **27**
1. _____
2. _____
3. _____
4. _____
5. _____
6. _____
7. _____
8. _____
9. _____
10. _____



Déterminez la plus petite fraction qui peut être faite à partir d'une plus grosse pièce.

Réponses

Ex) $6\frac{3}{4}$

1) $7\frac{1}{2}$

2) $5\frac{1}{2}$

3) $4\frac{1}{3}$

4) $9\frac{3}{4}$

5) $7\frac{1}{2}$

6) $8\frac{2}{3}$

7) $2\frac{1}{2}$

8) $7\frac{1}{2}$

9) $2\frac{1}{3}$

10) $8\frac{1}{3}$

- Ex. 27
- 1. 15
- 2. 11
- 3. 13
- 4. 39
- 5. 15
- 6. 26
- 7. 5
- 8. 15
- 9. 7
- 10. 25



Déterminez la plus petite fraction qui peut être faite à partir d'une plus grosse pièce.

Réponses

Ex) $5\frac{2}{4}$

1) $6\frac{2}{4}$

2) $2\frac{1}{5}$

3) $2\frac{1}{3}$

4) $5\frac{1}{3}$

5) $6\frac{1}{5}$

6) $3\frac{1}{5}$

7) $3\frac{1}{3}$

8) $1\frac{2}{5}$

9) $7\frac{2}{4}$

10) $3\frac{1}{4}$

- Ex. **22**
1. _____
2. _____
3. _____
4. _____
5. _____
6. _____
7. _____
8. _____
9. _____
10. _____



Déterminez la plus petite fraction qui peut être faite à partir d'une plus grosse pièce.

Réponses

Ex) $5\frac{2}{4}$

1) $6\frac{2}{4}$

2) $2\frac{1}{5}$

3) $2\frac{1}{3}$

4) $5\frac{1}{3}$

5) $6\frac{1}{5}$

6) $3\frac{1}{5}$

7) $3\frac{1}{3}$

8) $1\frac{2}{5}$

9) $7\frac{2}{4}$

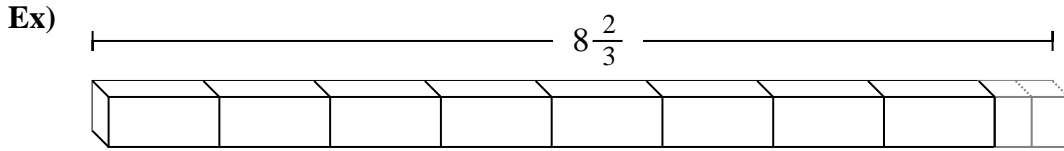
10) $3\frac{1}{4}$

- Ex. 22
1. 26
2. 11
3. 7
4. 16
5. 31
6. 16
7. 10
8. 7
9. 30
10. 13

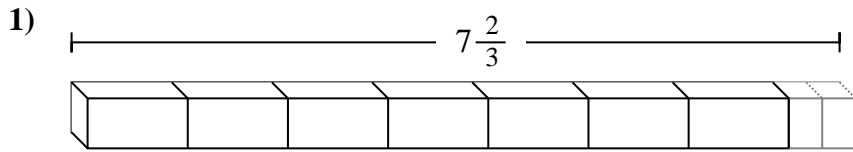


Déterminez la plus petite fraction qui peut être faite à partir d'une plus grosse pièce.

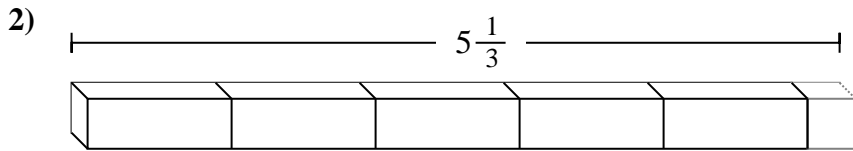
Réponses



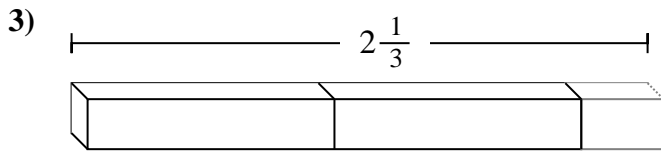
Ex. **26**



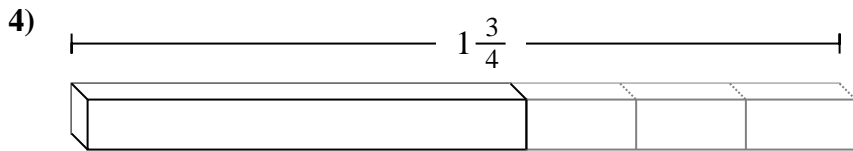
1. _____



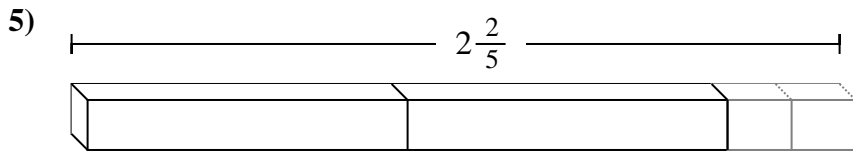
2. _____



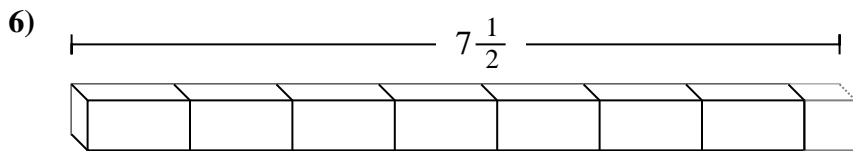
3. _____



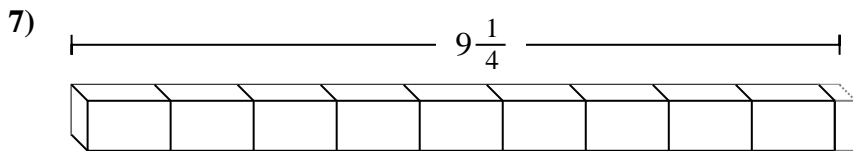
4. _____



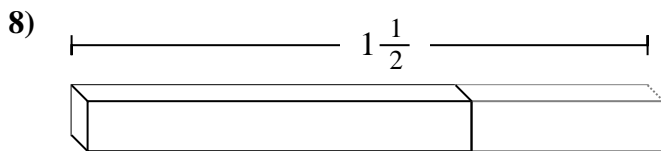
5. _____



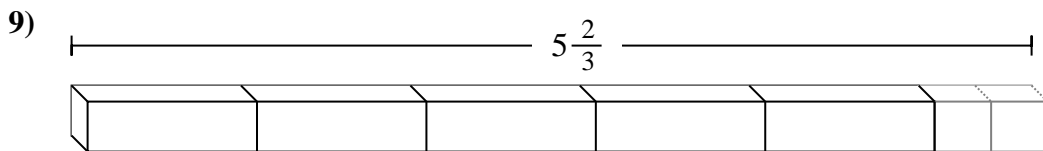
6. _____



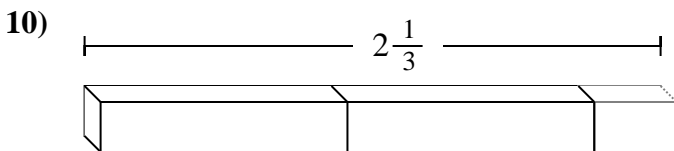
7. _____



8. _____



9. _____

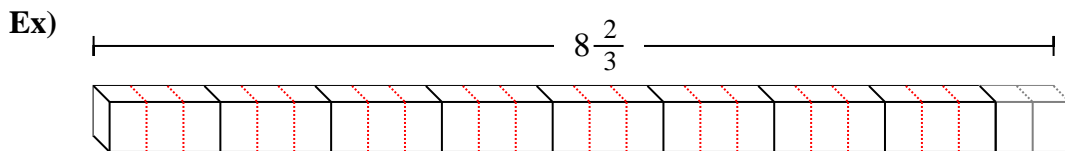


10. _____

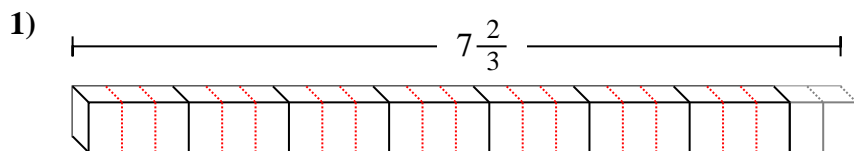


Déterminez la plus petite fraction qui peut être faite à partir d'une plus grosse pièce.

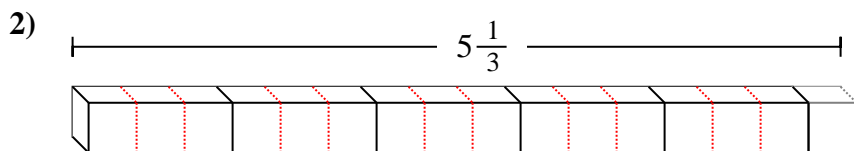
Réponses



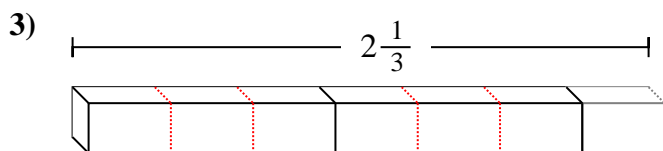
Ex. 26



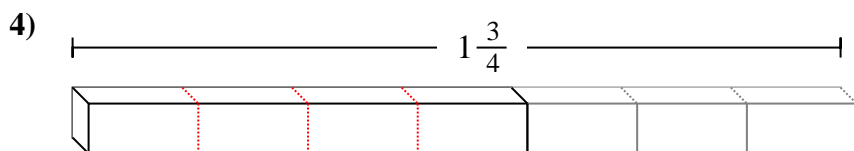
1. 23



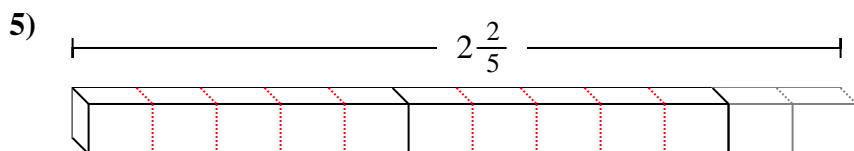
2. 16



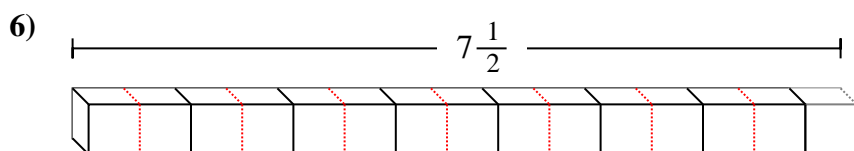
3. 7



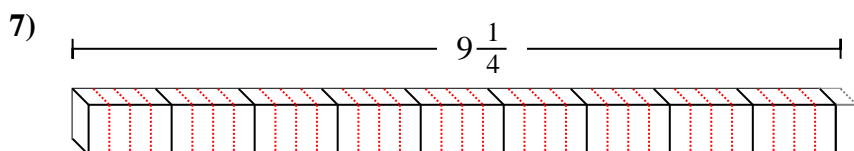
4. 7



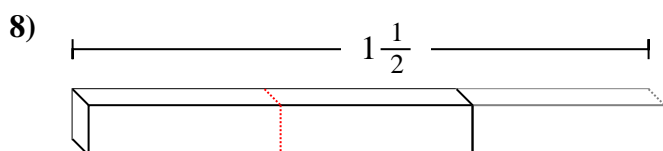
5. 12



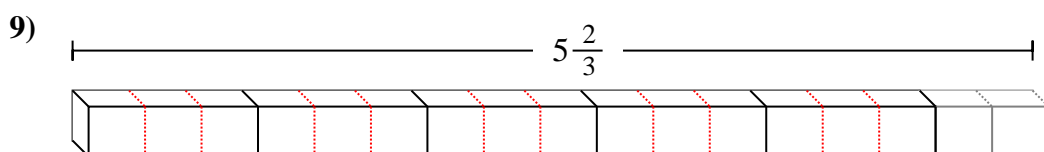
6. 15



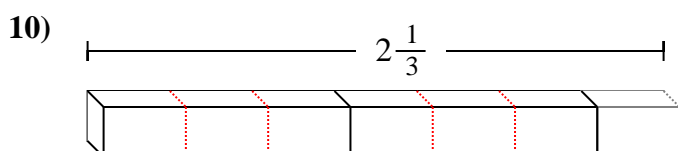
7. 37



8. 3



9. 17



10. 7



Déterminez la plus petite fraction qui peut être faite à partir d'une plus grosse pièce.

Réponses

Ex) $5\frac{3}{4}$

1) $9\frac{1}{5}$

2) $8\frac{4}{5}$

3) $4\frac{2}{5}$

4) $7\frac{1}{3}$

5) $8\frac{2}{3}$

6) $2\frac{1}{3}$

7) $3\frac{2}{5}$

8) $9\frac{1}{5}$

9) $9\frac{3}{4}$

10) $1\frac{1}{2}$

- Ex. **23**
1. _____
2. _____
3. _____
4. _____
5. _____
6. _____
7. _____
8. _____
9. _____
10. _____



Déterminez la plus petite fraction qui peut être faite à partir d'une plus grosse pièce.

Réponses

Ex) $5\frac{3}{4}$

1) $9\frac{1}{5}$

2) $8\frac{4}{5}$

3) $4\frac{2}{5}$

4) $7\frac{1}{3}$

5) $8\frac{2}{3}$

6) $2\frac{1}{3}$

7) $3\frac{2}{5}$

8) $9\frac{1}{5}$

9) $9\frac{3}{4}$

10) $1\frac{1}{2}$

- Ex. 23
1. 46
2. 44
3. 22
4. 22
5. 26
6. 7
7. 17
8. 46
9. 39
10. 3