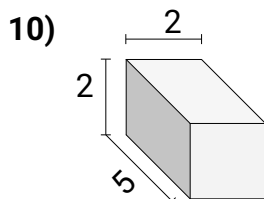
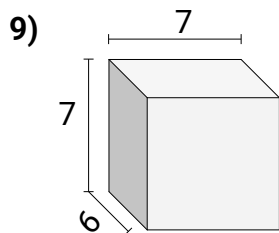
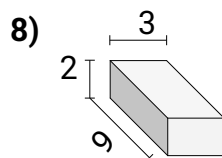
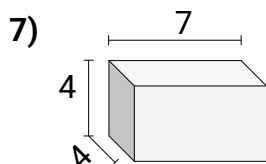
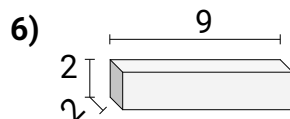
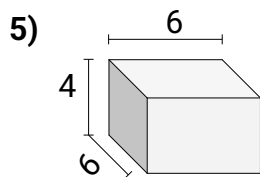
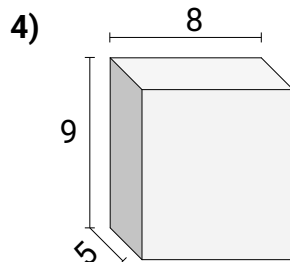
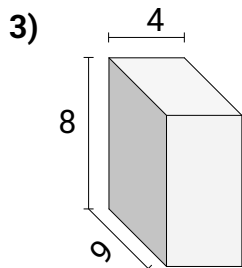
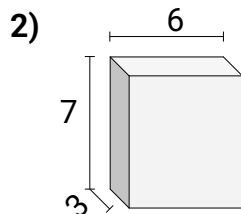
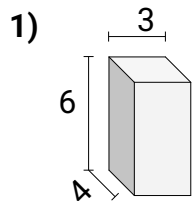




Calculez le volume de prismes rectangulaires. Unités sont en cm (pas à l'échelle).

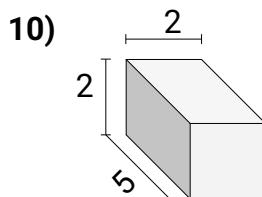
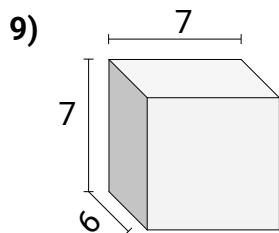
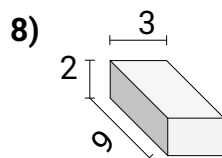
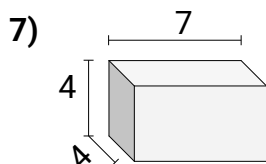
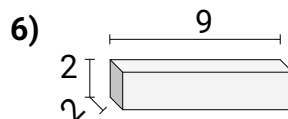
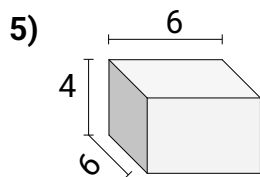
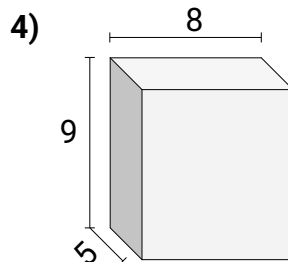
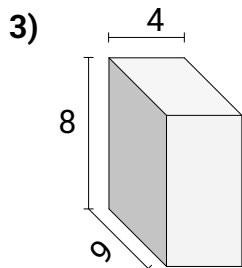
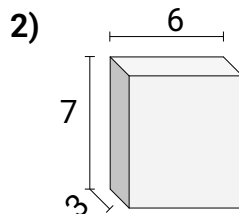
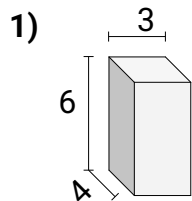
Réponses



1. _____
2. _____
3. _____
4. _____
5. _____
6. _____
7. _____
8. _____
9. _____
10. _____



Calculez le volume de prismes rectangulaires. Unités sont en cm (pas à l'échelle).

Réponses

- | | Réponses |
|-----|------------|
| 1. | 72 |
| 2. | 126 |
| 3. | 288 |
| 4. | 360 |
| 5. | 144 |
| 6. | 36 |
| 7. | 112 |
| 8. | 54 |
| 9. | 294 |
| 10. | 20 |