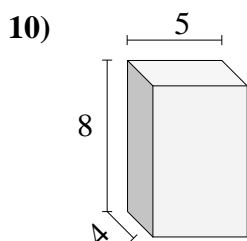
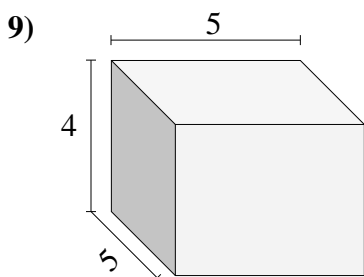
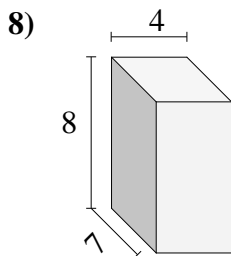
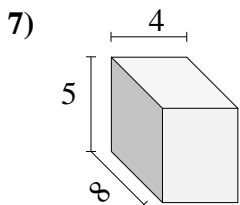
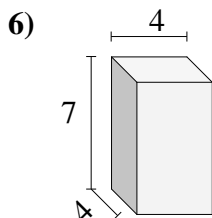
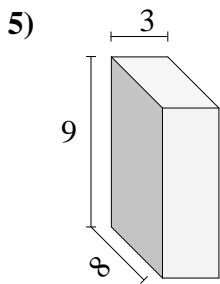
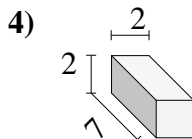
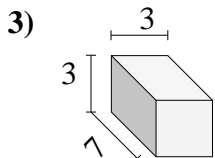
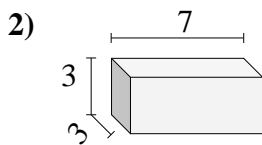
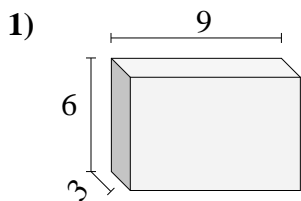




Calculez le volume de prismes rectangulaires. Unités sont en cm (pas à l'échelle).

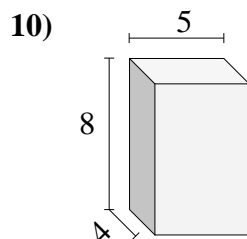
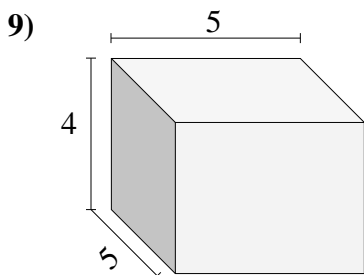
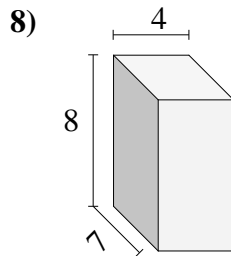
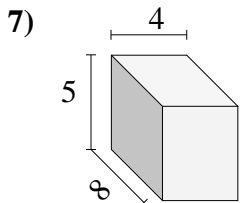
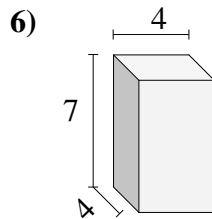
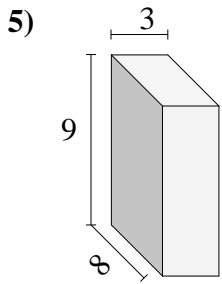
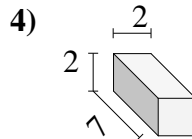
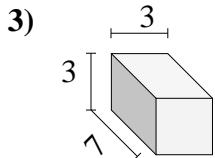
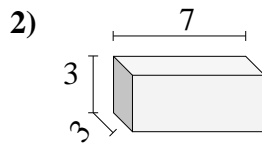
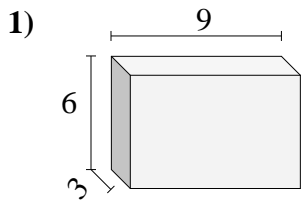


Réponses

- 1. _____
- 2. _____
- 3. _____
- 4. _____
- 5. _____
- 6. _____
- 7. _____
- 8. _____
- 9. _____
- 10. _____

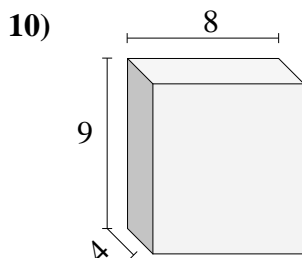
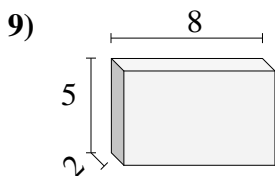
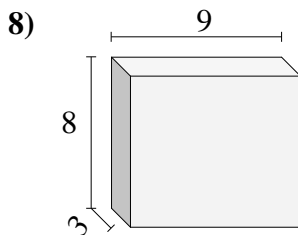
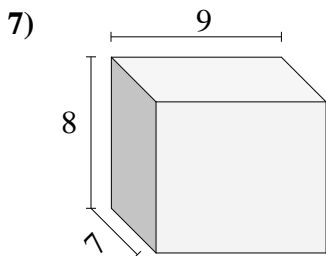
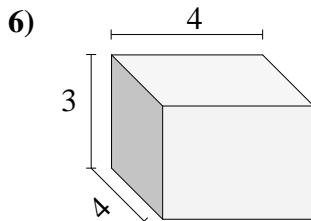
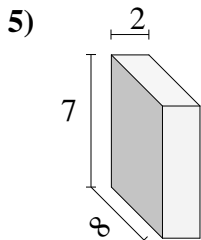
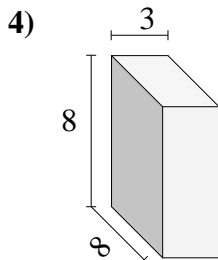
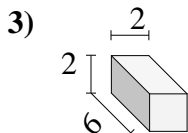
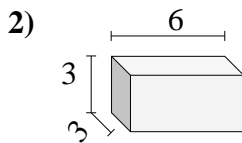
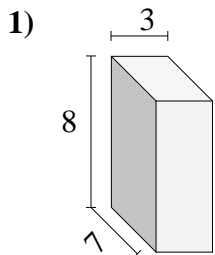


Calculez le volume de prismes rectangulaires. Unités sont en cm (pas à l'échelle).

**Réponses**1. **162**2. **63**3. **63**4. **28**5. **216**6. **112**7. **160**8. **224**9. **100**10. **160**



Calculez le volume de prismes rectangulaires. Unités sont en cm (pas à l'échelle).

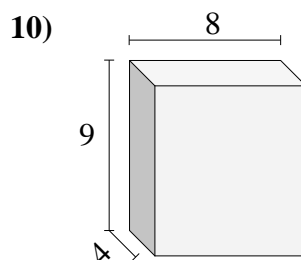
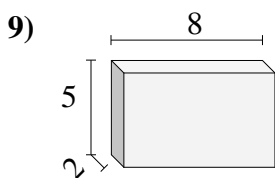
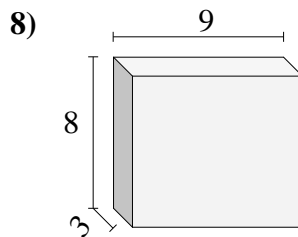
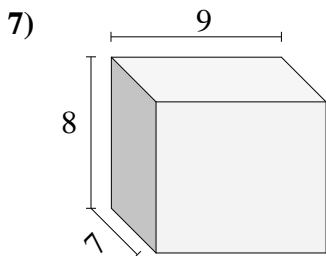
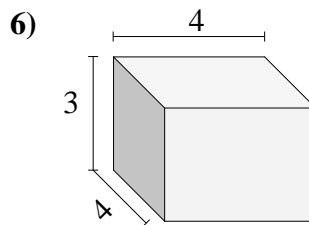
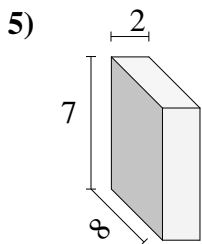
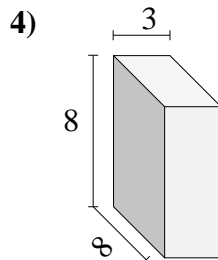
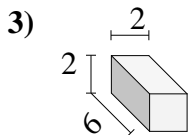
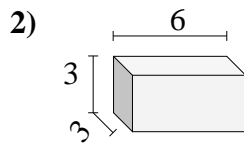
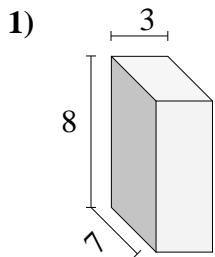


Réponses

- 1. _____
- 2. _____
- 3. _____
- 4. _____
- 5. _____
- 6. _____
- 7. _____
- 8. _____
- 9. _____
- 10. _____

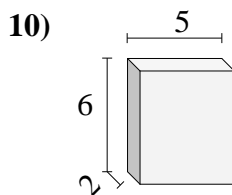
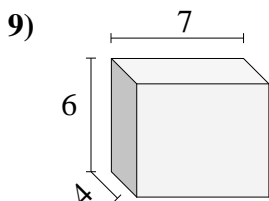
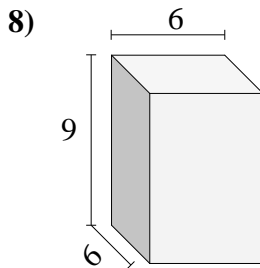
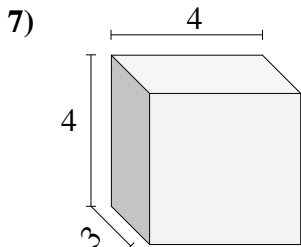
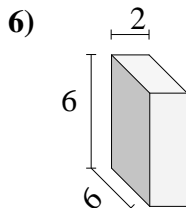
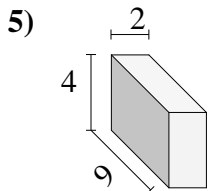
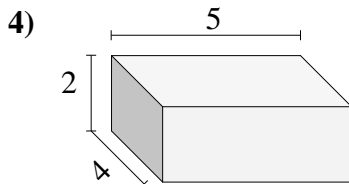
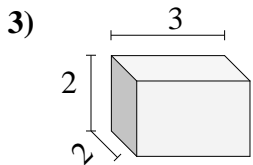
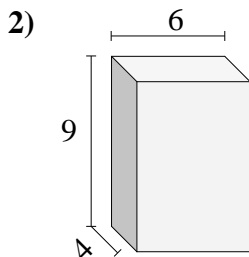
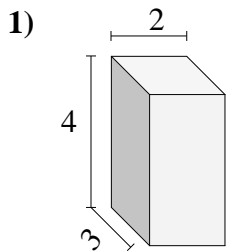


Calculez le volume de prismes rectangulaires. Unités sont en cm (pas à l'échelle).

**Réponses**1. 1682. 543. 244. 1925. 1126. 487. 5048. 2169. 8010. 288



Calculez le volume de prismes rectangulaires. Unités sont en cm (pas à l'échelle).

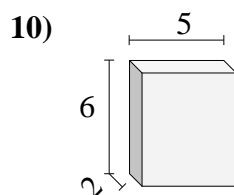
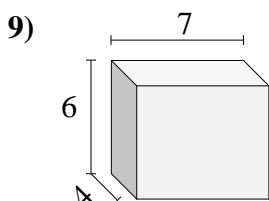
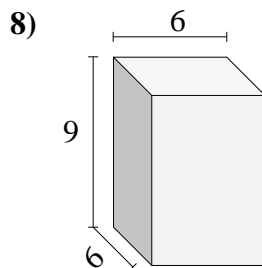
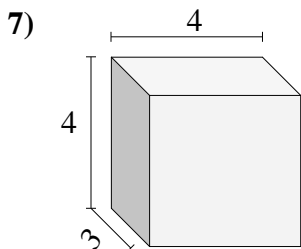
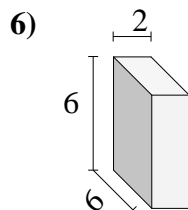
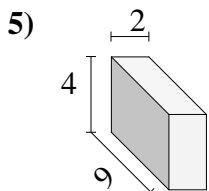
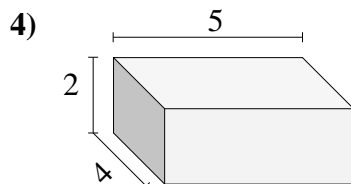
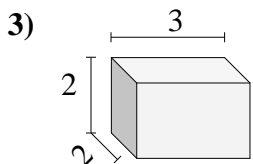
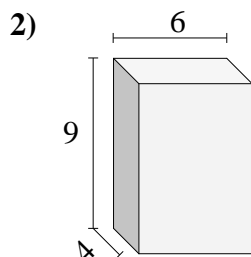
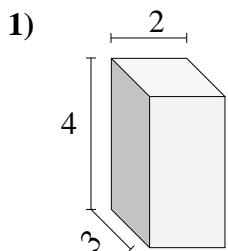


Réponses

- 1. _____
- 2. _____
- 3. _____
- 4. _____
- 5. _____
- 6. _____
- 7. _____
- 8. _____
- 9. _____
- 10. _____

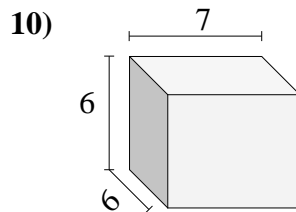
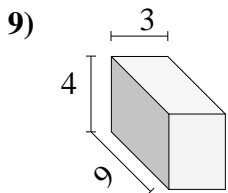
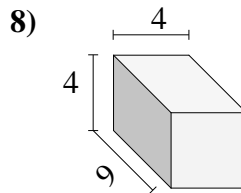
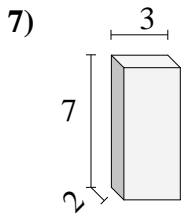
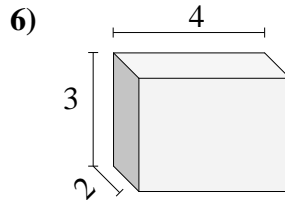
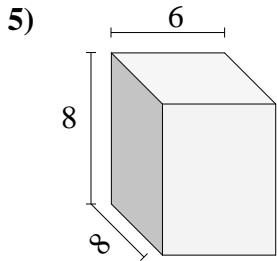
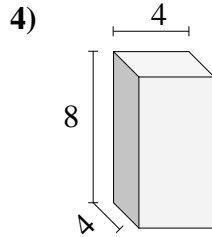
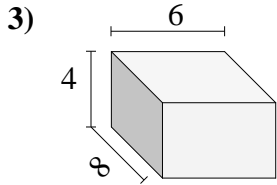
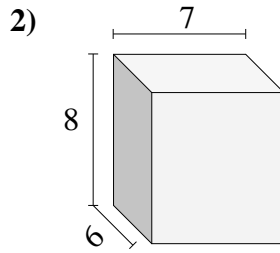
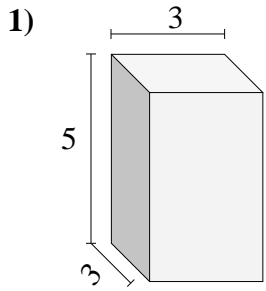


Calculez le volume de prismes rectangulaires. Unités sont en cm (pas à l'échelle).

**Réponses**1. **24**2. **216**3. **12**4. **40**5. **72**6. **72**7. **48**8. **324**9. **168**10. **60**



Calculez le volume de prismes rectangulaires. Unités sont en cm (pas à l'échelle).

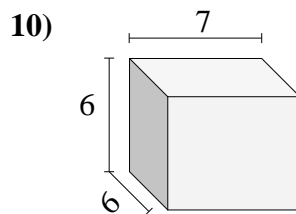
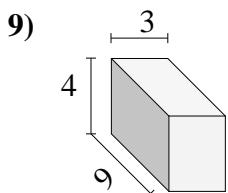
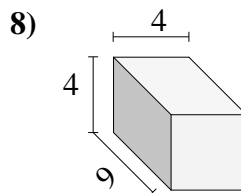
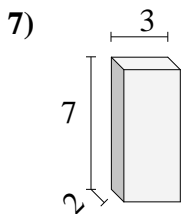
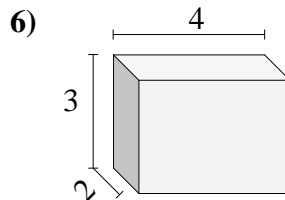
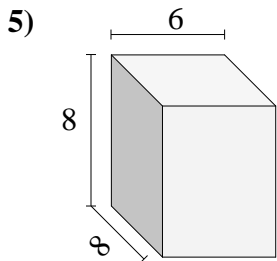
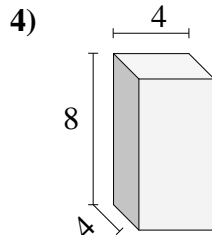
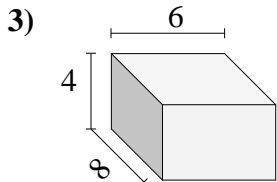
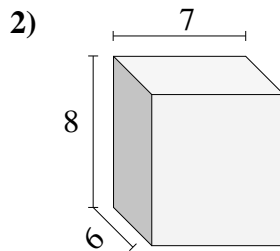
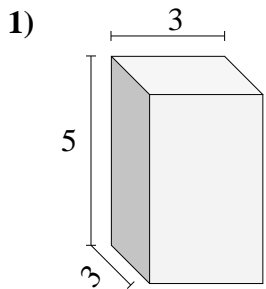


Réponses

- 1. _____
- 2. _____
- 3. _____
- 4. _____
- 5. _____
- 6. _____
- 7. _____
- 8. _____
- 9. _____
- 10. _____

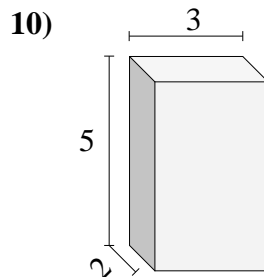
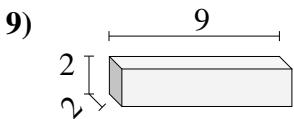
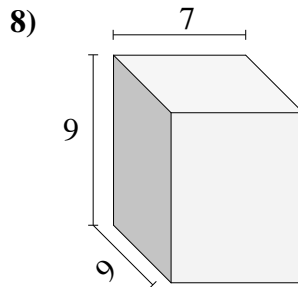
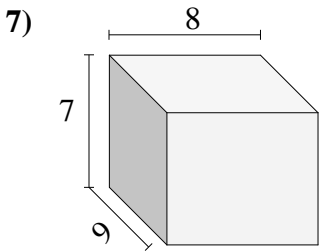
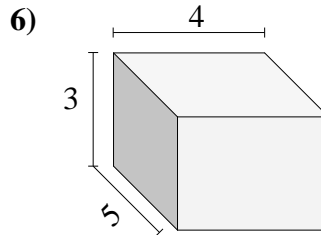
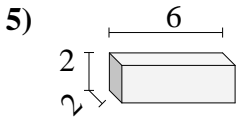
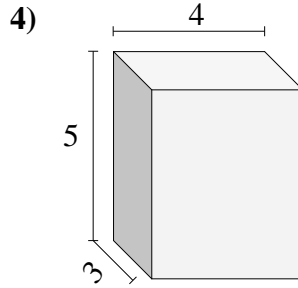
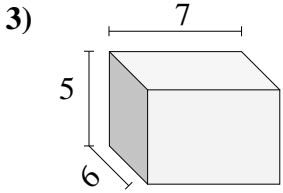
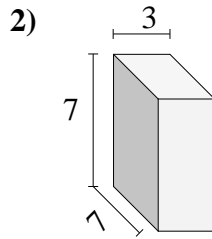
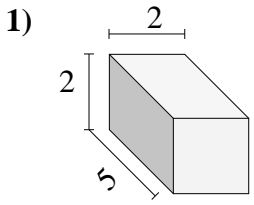


Calculez le volume de prismes rectangulaires. Unités sont en cm (pas à l'échelle).

**Réponses**1. 452. 3363. 1924. 1285. 3846. 247. 428. 1449. 10810. 252



Calculez le volume de prismes rectangulaires. Unités sont en cm (pas à l'échelle).

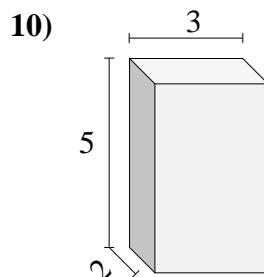
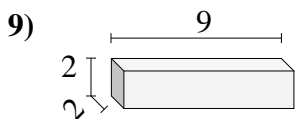
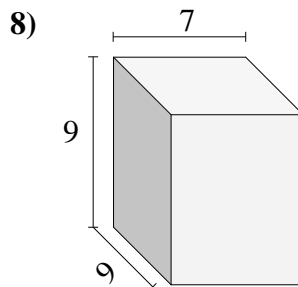
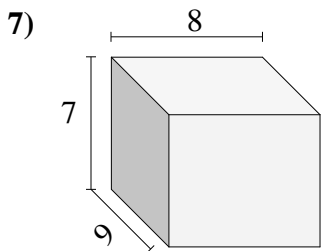
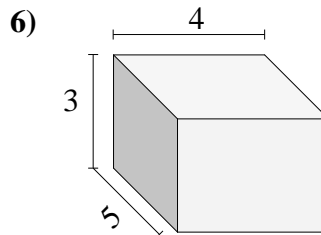
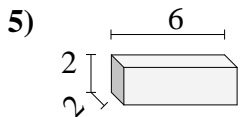
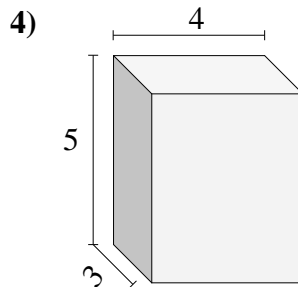
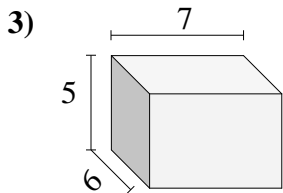
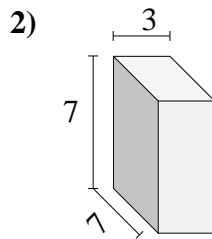
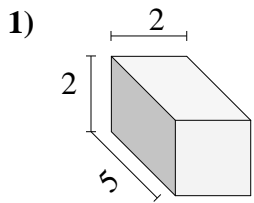


Réponses

- 1. _____
- 2. _____
- 3. _____
- 4. _____
- 5. _____
- 6. _____
- 7. _____
- 8. _____
- 9. _____
- 10. _____

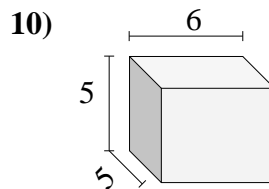
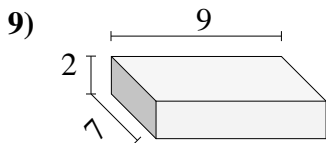
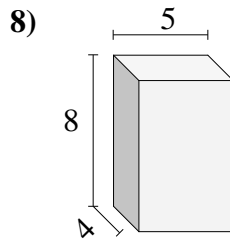
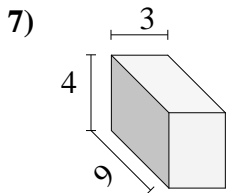
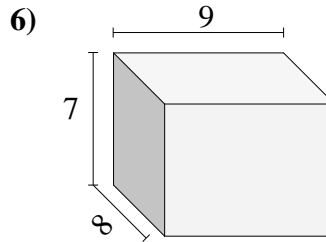
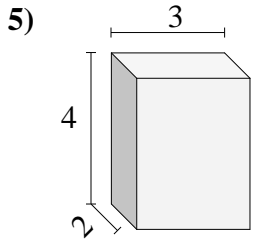
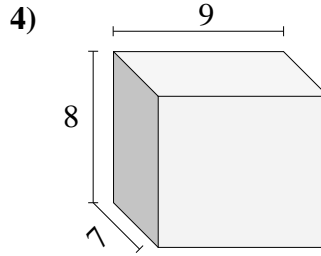
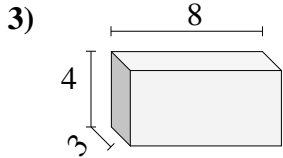
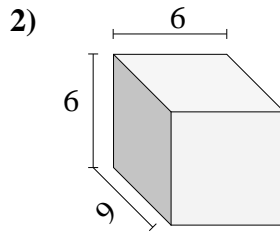
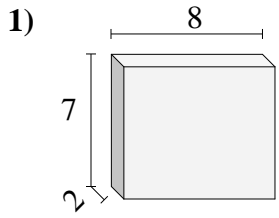


Calculez le volume de prismes rectangulaires. Unités sont en cm (pas à l'échelle).

**Réponses**1. 202. 1473. 2104. 605. 246. 607. 5048. 5679. 3610. 30



Calculez le volume de prismes rectangulaires. Unités sont en cm (pas à l'échelle).

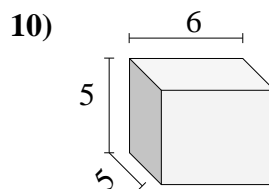
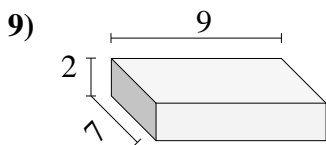
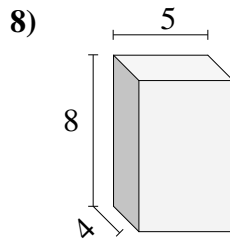
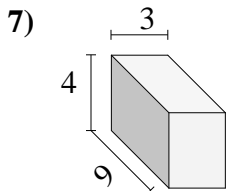
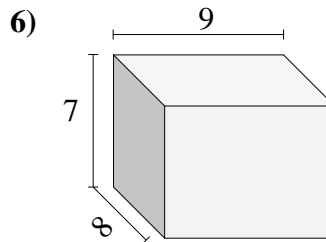
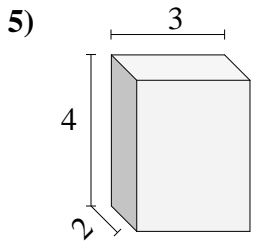
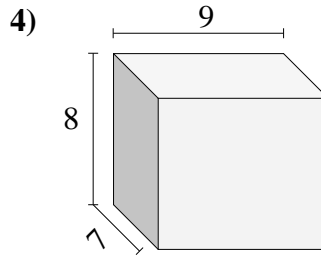
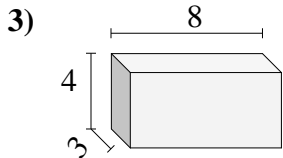
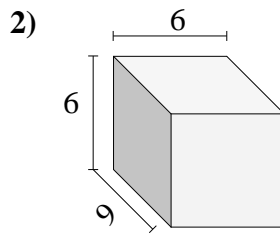
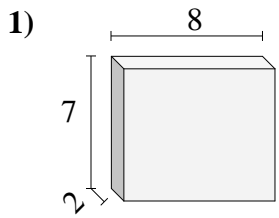


Réponses

- 1. _____
- 2. _____
- 3. _____
- 4. _____
- 5. _____
- 6. _____
- 7. _____
- 8. _____
- 9. _____
- 10. _____

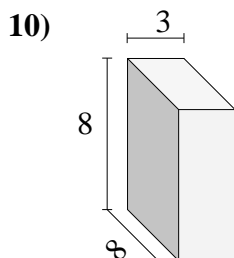
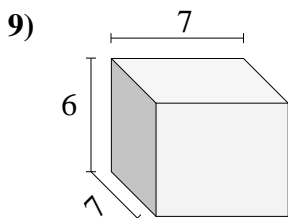
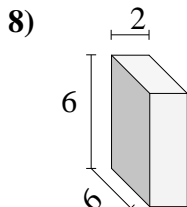
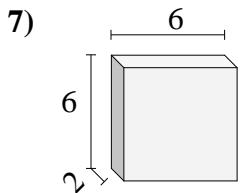
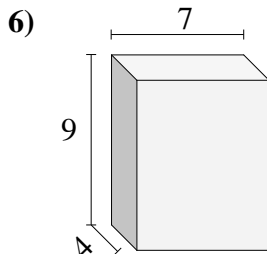
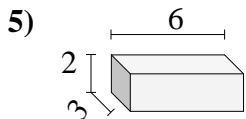
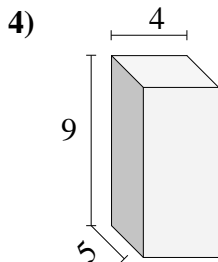
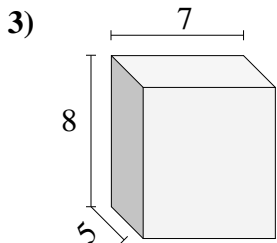
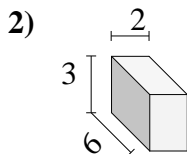
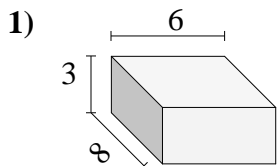


Calculez le volume de prismes rectangulaires. Unités sont en cm (pas à l'échelle).

**Réponses**1. **112**2. **324**3. **96**4. **504**5. **24**6. **504**7. **108**8. **160**9. **126**10. **150**



Calculez le volume de prismes rectangulaires. Unités sont en cm (pas à l'échelle).

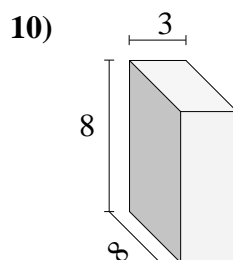
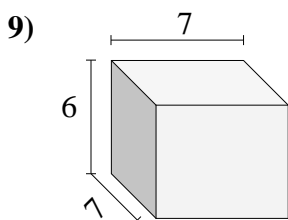
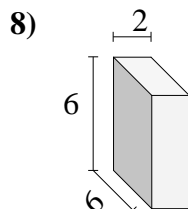
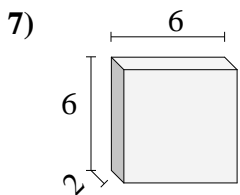
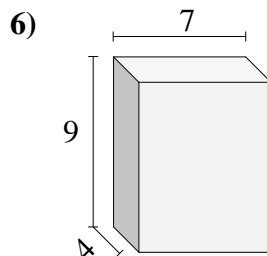
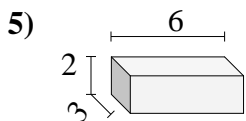
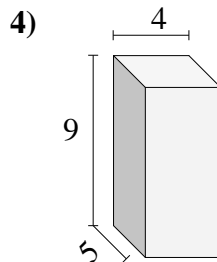
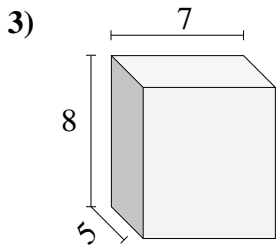
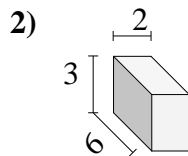
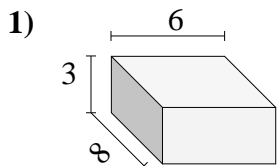


Réponses

- 1. _____
- 2. _____
- 3. _____
- 4. _____
- 5. _____
- 6. _____
- 7. _____
- 8. _____
- 9. _____
- 10. _____

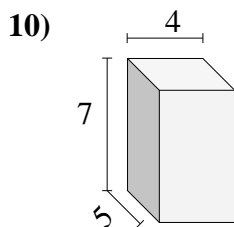
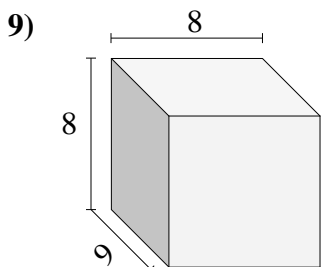
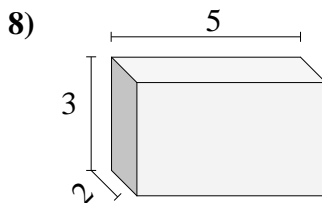
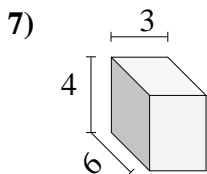
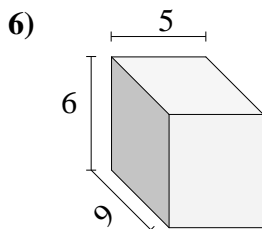
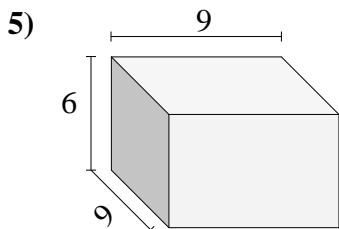
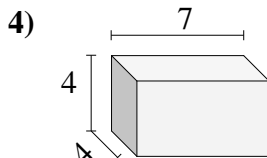
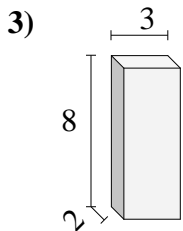
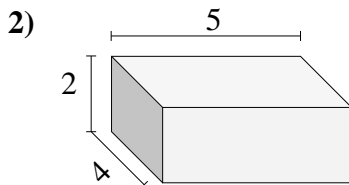
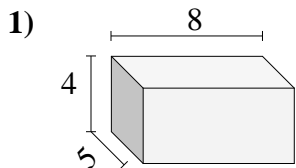


Calculez le volume de prismes rectangulaires. Unités sont en cm (pas à l'échelle).

Réponses1. 1442. 363. 2804. 1805. 366. 2527. 728. 729. 29410. 192



Calculez le volume de prismes rectangulaires. Unités sont en cm (pas à l'échelle).

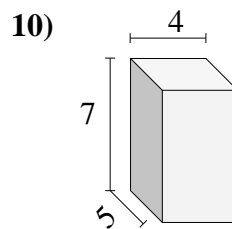
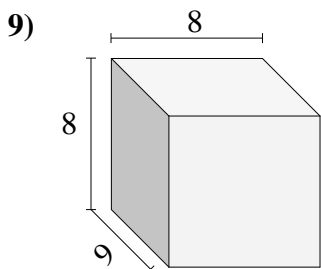
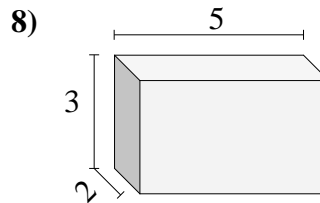
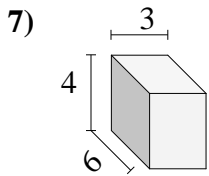
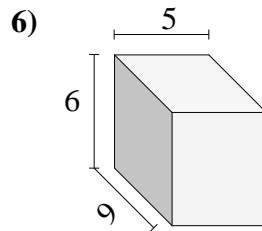
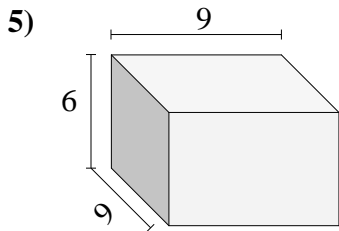
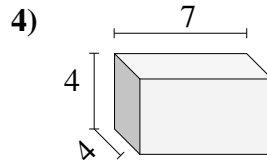
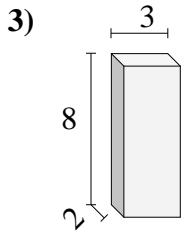
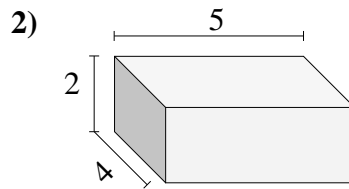
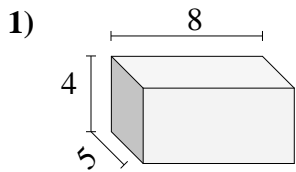


Réponses

- 1. _____
- 2. _____
- 3. _____
- 4. _____
- 5. _____
- 6. _____
- 7. _____
- 8. _____
- 9. _____
- 10. _____

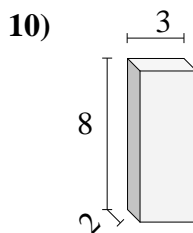
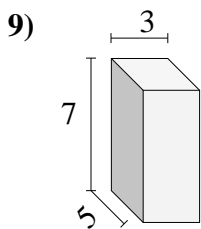
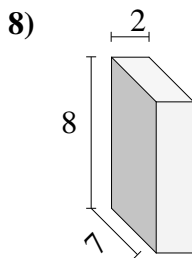
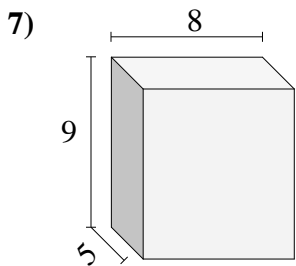
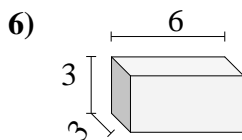
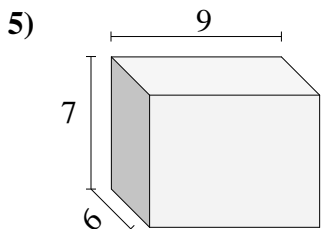
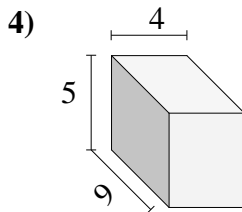
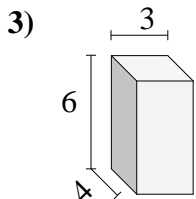
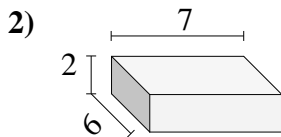
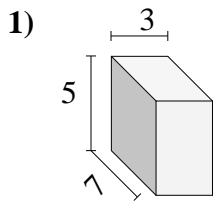


Calculez le volume de prismes rectangulaires. Unités sont en cm (pas à l'échelle).

**Réponses**1. 1602. 403. 484. 1125. 4866. 2707. 728. 309. 57610. 140



Calculez le volume de prismes rectangulaires. Unités sont en cm (pas à l'échelle).

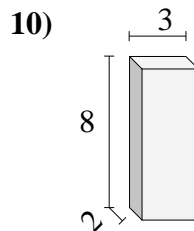
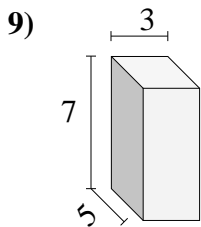
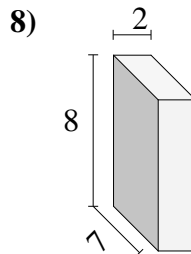
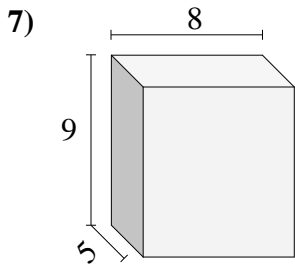
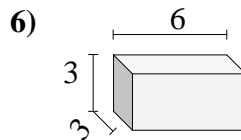
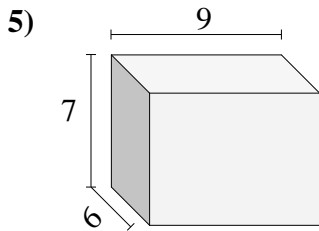
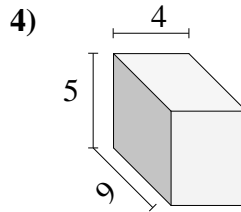
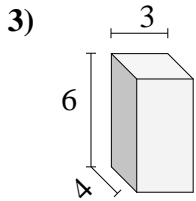
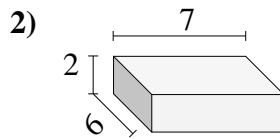
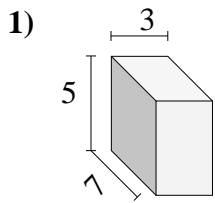


Réponses

- 1. _____
- 2. _____
- 3. _____
- 4. _____
- 5. _____
- 6. _____
- 7. _____
- 8. _____
- 9. _____
- 10. _____

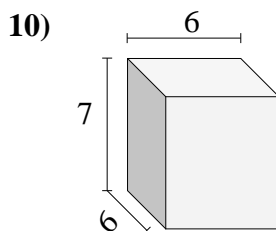
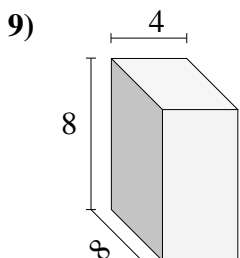
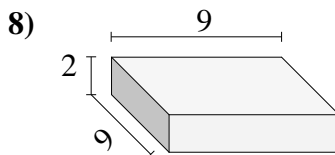
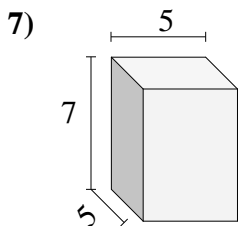
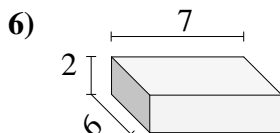
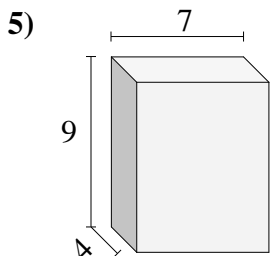
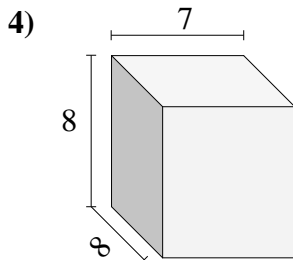
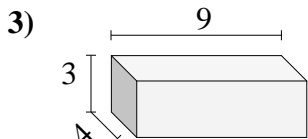
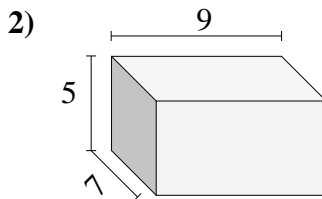
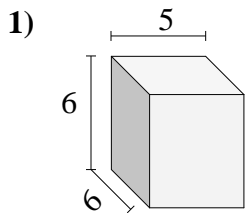


Calculez le volume de prismes rectangulaires. Unités sont en cm (pas à l'échelle).

**Réponses**1. 1052. 843. 724. 1805. 3786. 547. 3608. 1129. 10510. 48



Calculez le volume de prismes rectangulaires. Unités sont en cm (pas à l'échelle).

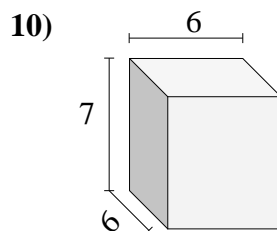
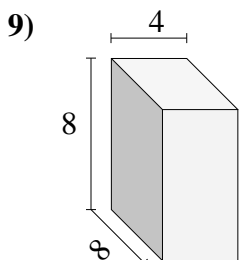
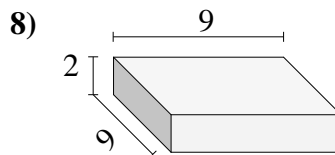
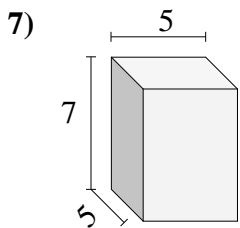
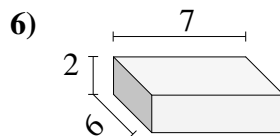
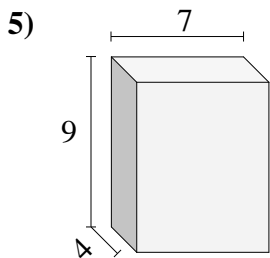
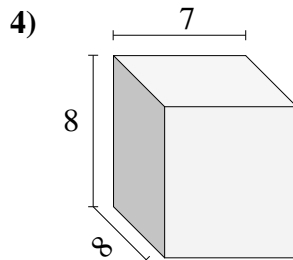
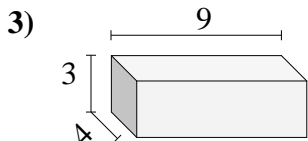
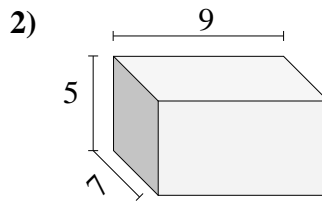
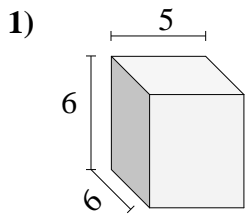


Réponses

- 1. _____
- 2. _____
- 3. _____
- 4. _____
- 5. _____
- 6. _____
- 7. _____
- 8. _____
- 9. _____
- 10. _____



Calculez le volume de prismes rectangulaires. Unités sont en cm (pas à l'échelle).

**Réponses**1. **180**2. **315**3. **108**4. **448**5. **252**6. **84**7. **175**8. **162**9. **256**10. **252**