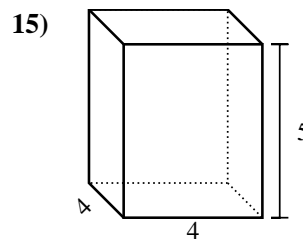
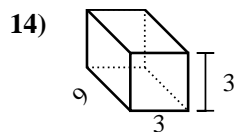
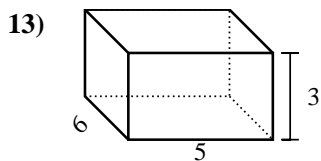
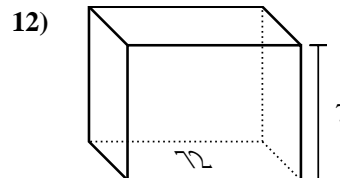
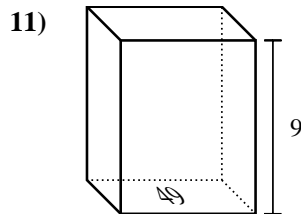
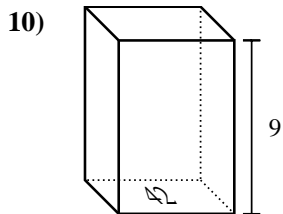
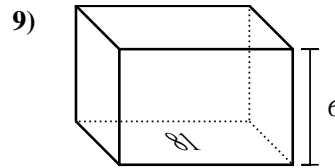
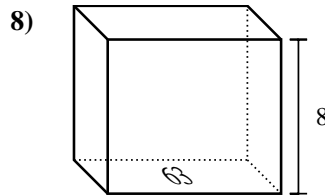
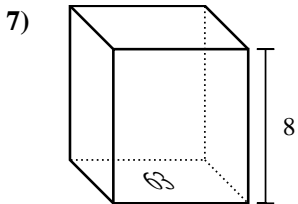
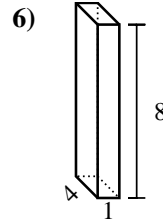
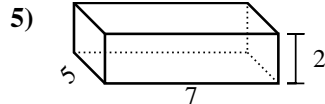
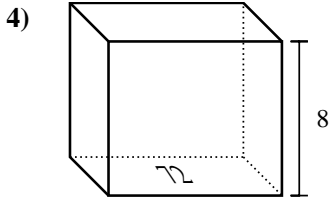
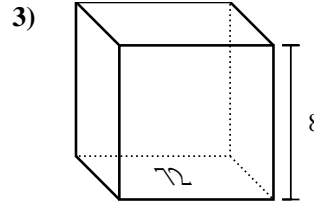
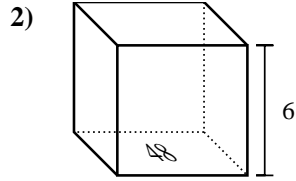
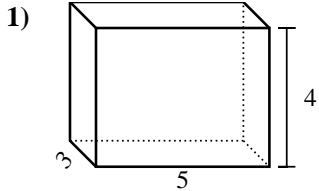




Calculez le volume de prismes rectangulaires. Unités sont en cm (pas à l'échelle). Rappel $V = BH$ and $V=L \times l \times H$

Réponses

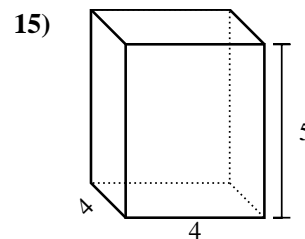
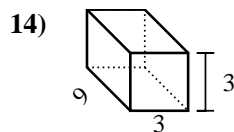
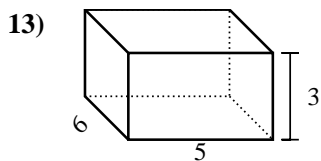
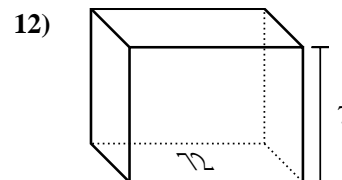
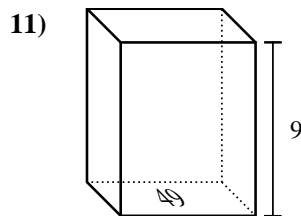
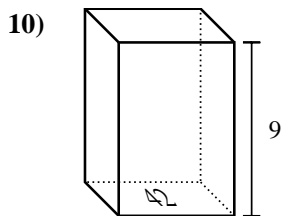
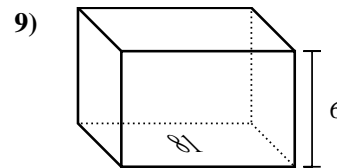
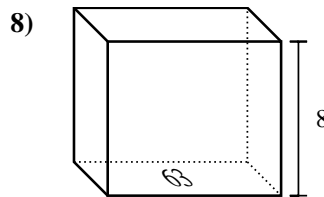
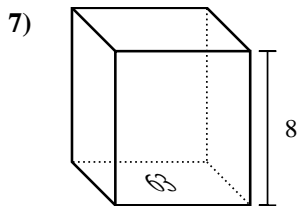
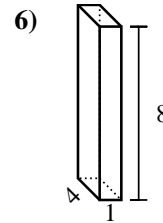
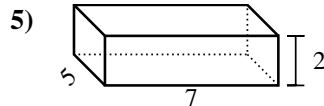
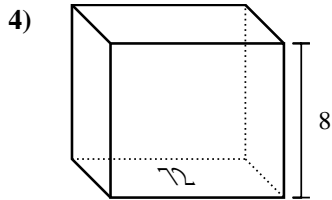
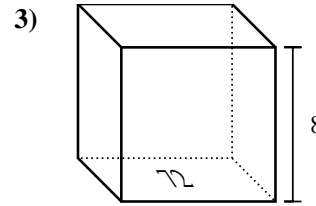
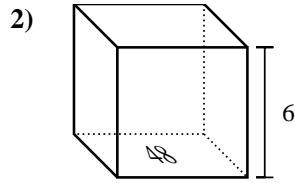
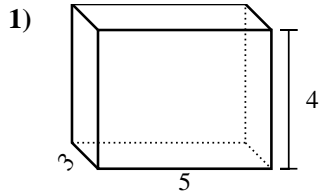


1. _____
2. _____
3. _____
4. _____
5. _____
6. _____
7. _____
8. _____
9. _____
10. _____
11. _____
12. _____
13. _____
14. _____
15. _____



Calculez le volume de prismes rectangulaires. Unités sont en cm (pas à l'échelle). Rappel $V = BH$ and $V=L \times l \times H$

Réponses



1. 60 cm³

2. 288 cm³

3. 576 cm³

4. 576 cm³

5. 70 cm³

6. 32 cm³

7. 504 cm³

8. 504 cm³

9. 486 cm³

10. 378 cm³

11. 441 cm³

12. 504 cm³

13. 90 cm³

14. 81 cm³

15. 80 cm³