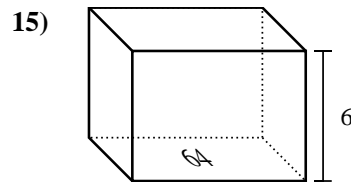
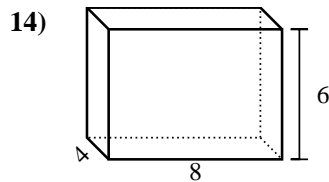
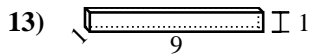
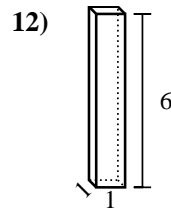
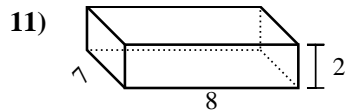
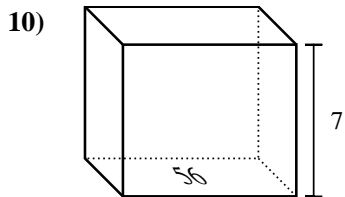
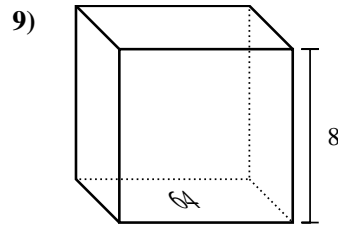
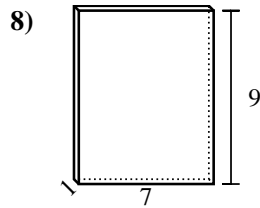
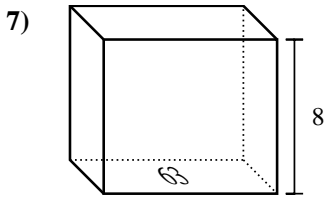
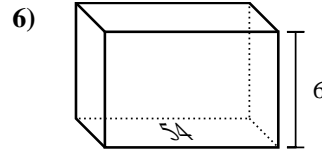
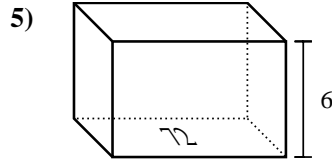
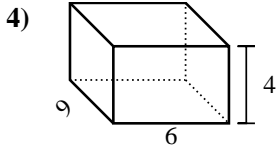
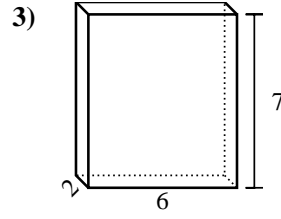
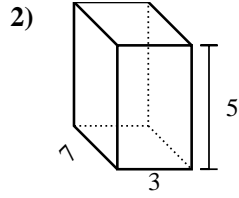
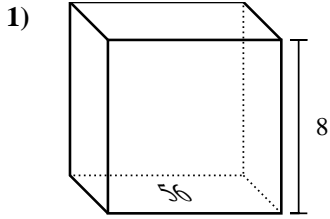




Calculez le volume de prismes rectangulaires. Unités sont en cm (pas à l'échelle). Rappel $V = BH$ and $V=L \times l \times H$

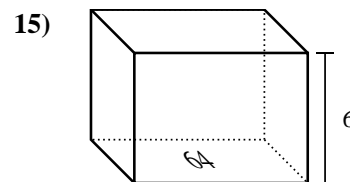
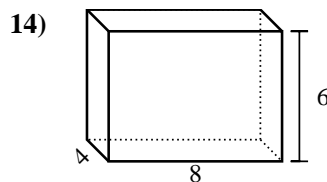
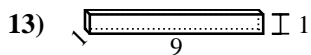
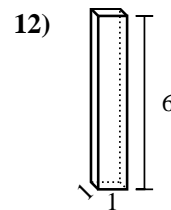
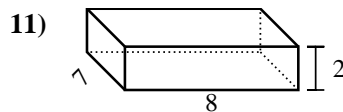
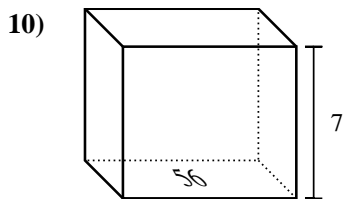
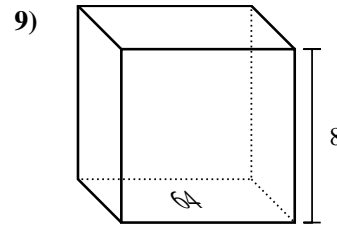
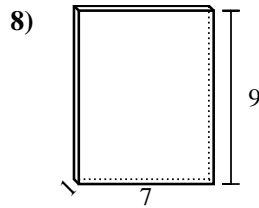
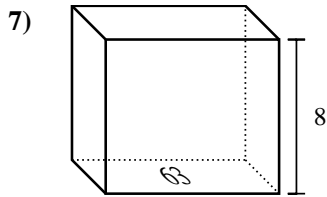
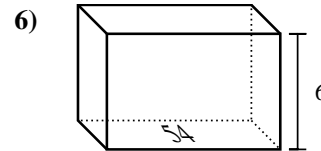
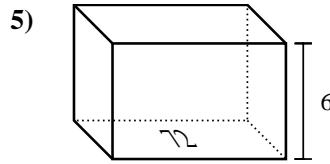
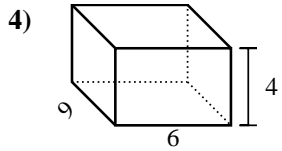
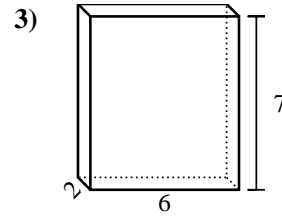
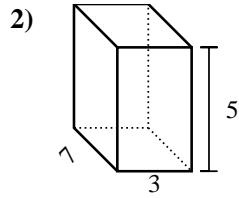
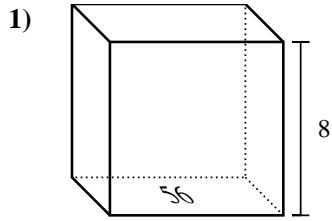
Réponses



1. _____
2. _____
3. _____
4. _____
5. _____
6. _____
7. _____
8. _____
9. _____
10. _____
11. _____
12. _____
13. _____
14. _____
15. _____



Calculez le volume de prismes rectangulaires. Unités sont en cm (pas à l'échelle). Rappel $V = BH$ and $V=L \times l \times H$



Réponses

1. 448 cm³
2. 105 cm³
3. 84 cm³
4. 216 cm³
5. 432 cm³
6. 324 cm³
7. 504 cm³
8. 63 cm³
9. 512 cm³
10. 392 cm³
11. 112 cm³
12. 6 cm³
13. 9 cm³
14. 192 cm³
15. 384 cm³