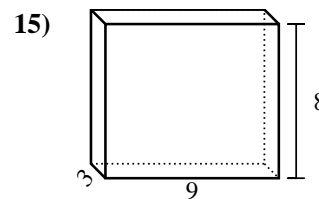
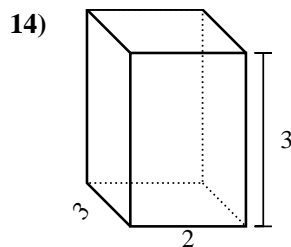
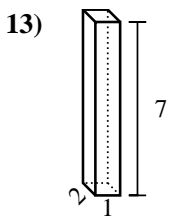
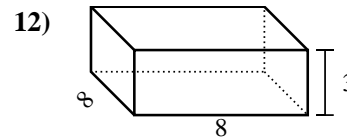
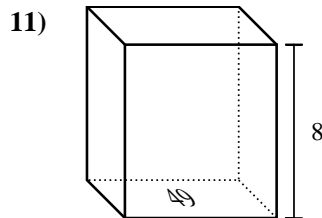
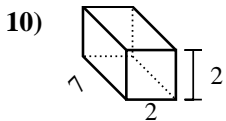
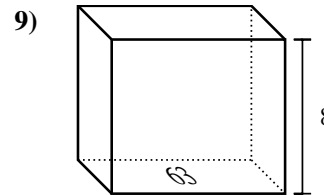
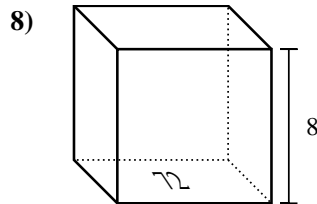
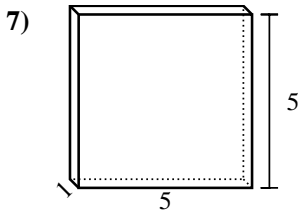
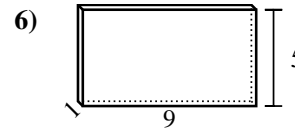
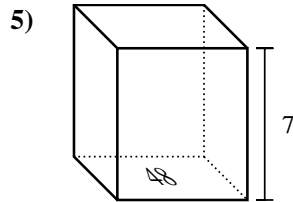
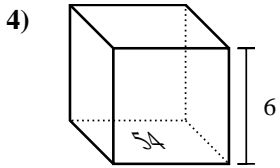
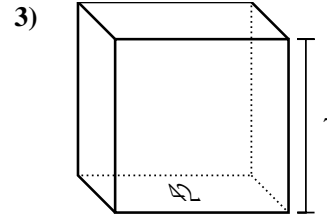
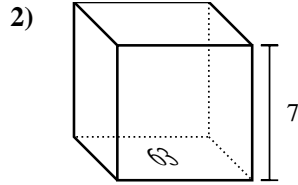
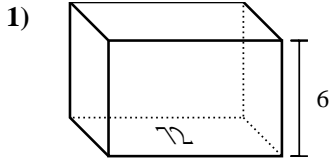




Calculez le volume de prismes rectangulaires. Unités sont en cm (pas à l'échelle). Rappel $V = BH$ and $V=L \times l \times H$

Réponses

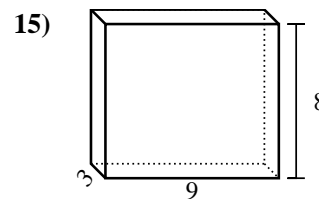
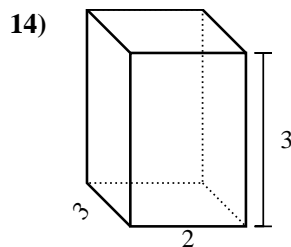
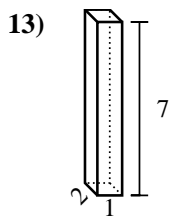
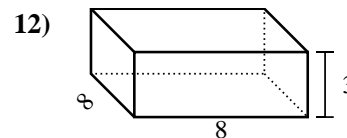
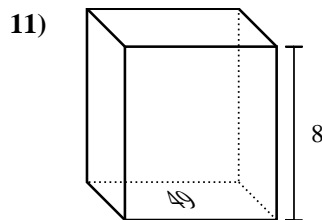
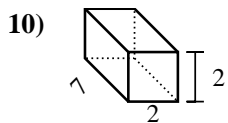
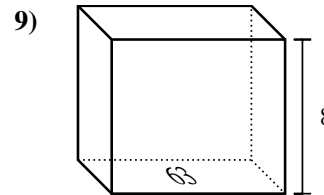
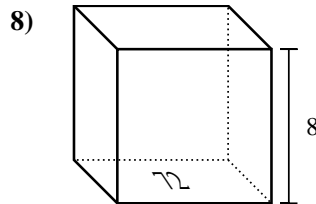
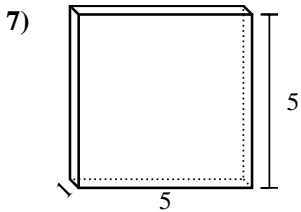
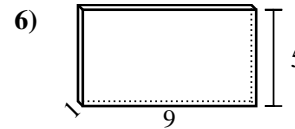
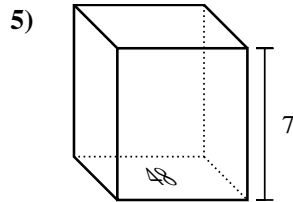
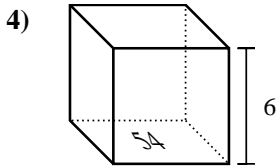
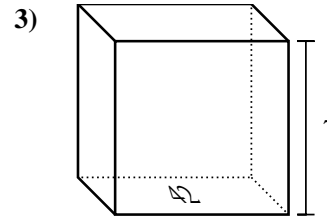
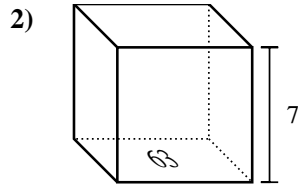
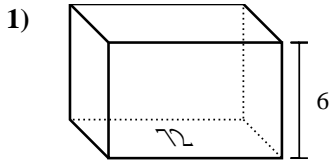


1. _____
2. _____
3. _____
4. _____
5. _____
6. _____
7. _____
8. _____
9. _____
10. _____
11. _____
12. _____
13. _____
14. _____
15. _____



Calculez le volume de prismes rectangulaires. Unités sont en cm (pas à l'échelle). Rappel $V = BH$ and $V=L \times l \times H$

Réponses

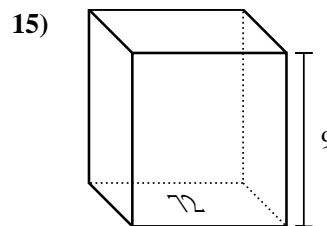
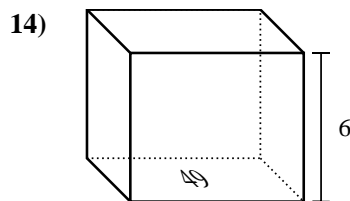
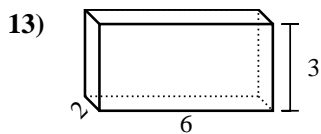
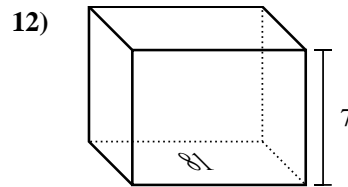
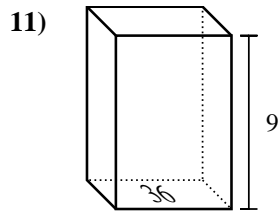
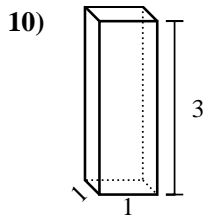
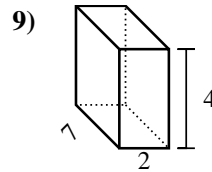
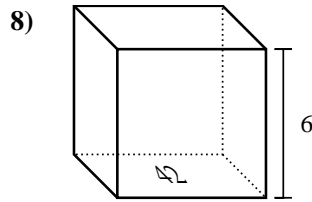
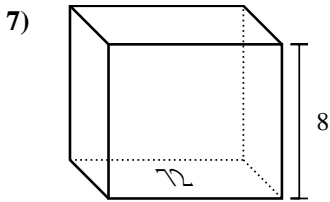
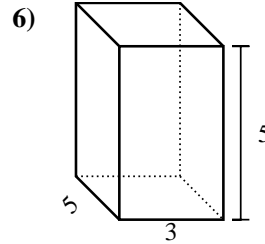
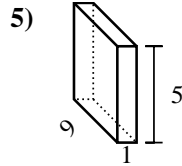
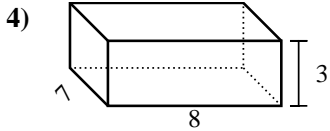
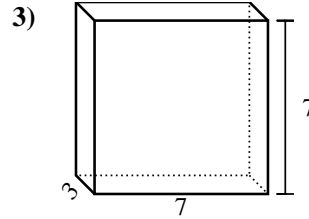
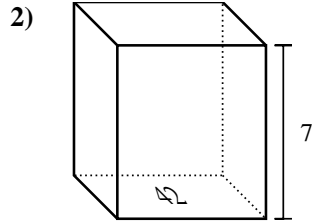
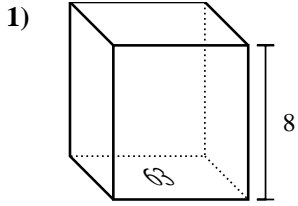


1. 432 cm³
2. 441 cm³
3. 294 cm³
4. 324 cm³
5. 336 cm³
6. 45 cm³
7. 25 cm³
8. 576 cm³
9. 504 cm³
10. 28 cm³
11. 392 cm³
12. 192 cm³
13. 14 cm³
14. 18 cm³
15. 216 cm³



Calculez le volume de prismes rectangulaires. Unités sont en cm (pas à l'échelle). Rappel $V = BH$ and $V=L \times l \times H$

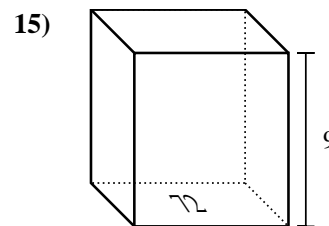
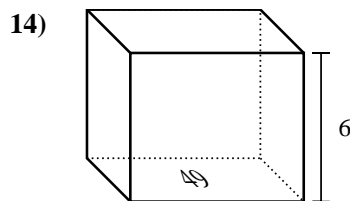
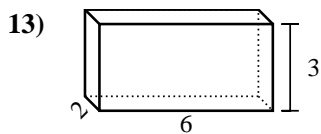
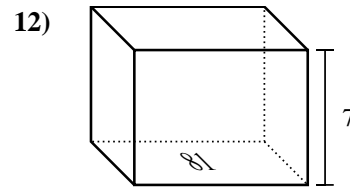
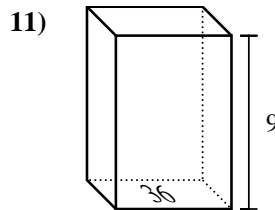
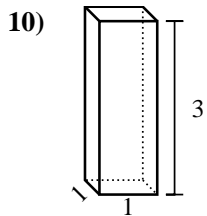
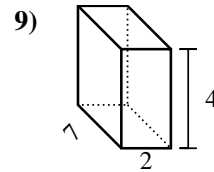
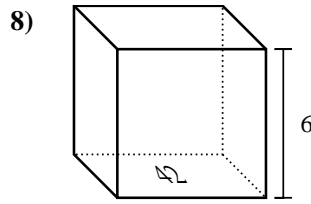
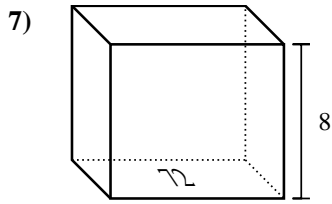
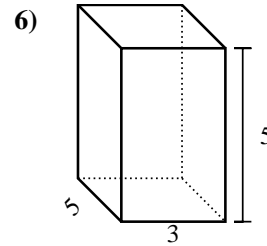
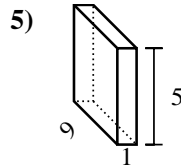
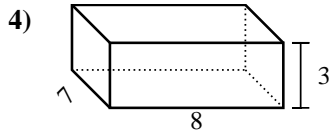
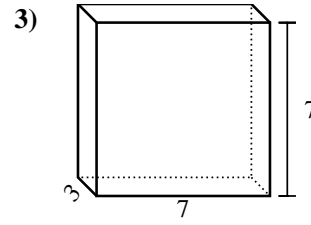
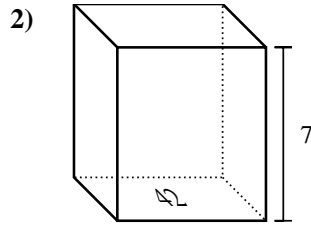
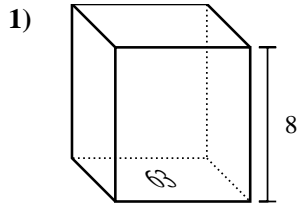
Réponses



1. _____
2. _____
3. _____
4. _____
5. _____
6. _____
7. _____
8. _____
9. _____
10. _____
11. _____
12. _____
13. _____
14. _____
15. _____



Calculez le volume de prismes rectangulaires. Unités sont en cm (pas à l'échelle). Rappel $V = BH$ and $V=L \times l \times H$



Réponses

1. **504 cm³**

2. **294 cm³**

3. **147 cm³**

4. **168 cm³**

5. **45 cm³**

6. **75 cm³**

7. **576 cm³**

8. **252 cm³**

9. **56 cm³**

10. **3 cm³**

11. **324 cm³**

12. **567 cm³**

13. **36 cm³**

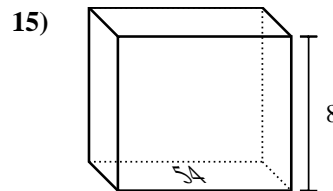
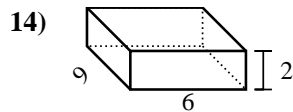
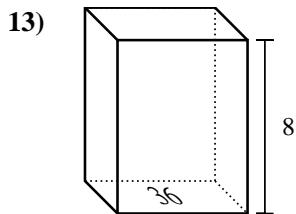
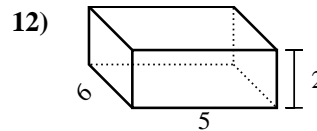
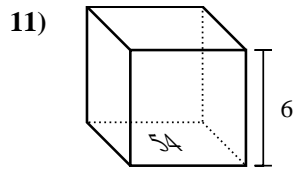
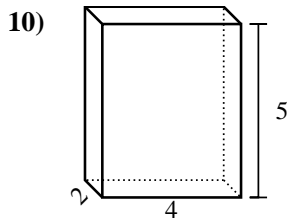
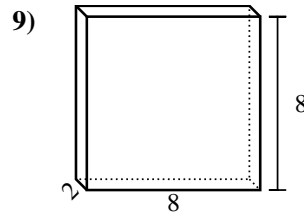
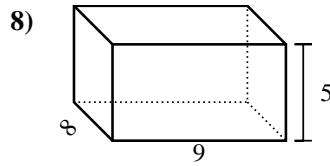
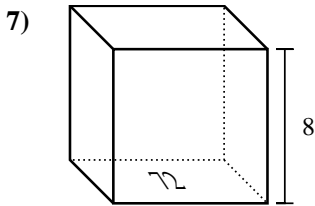
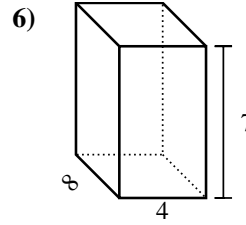
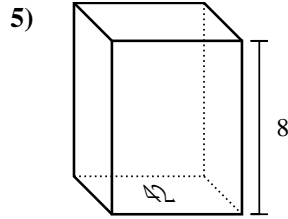
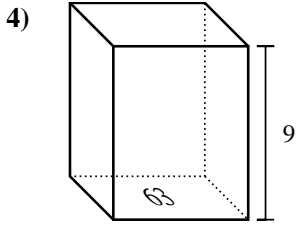
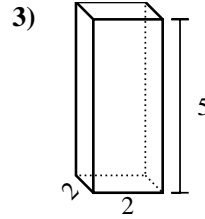
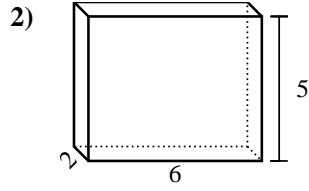
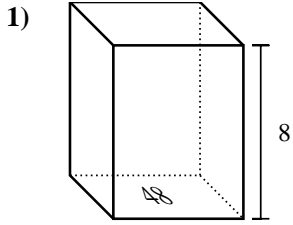
14. **294 cm³**

15. **648 cm³**



Calculez le volume de prismes rectangulaires. Unités sont en cm (pas à l'échelle). Rappel $V = BH$ and $V=L \times l \times H$

Réponses

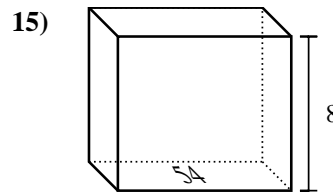
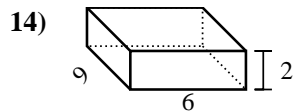
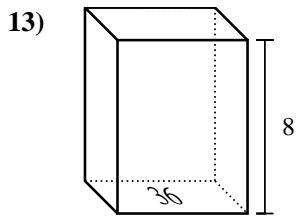
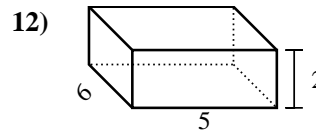
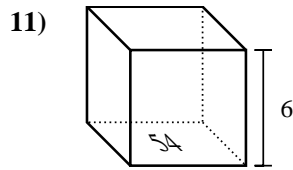
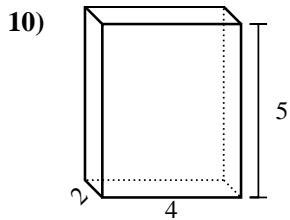
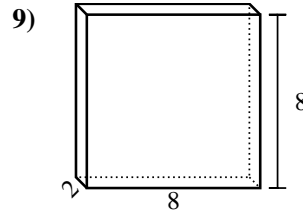
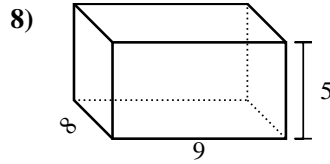
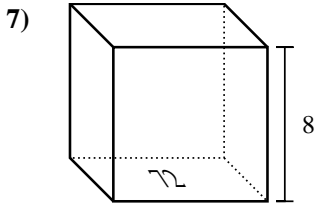
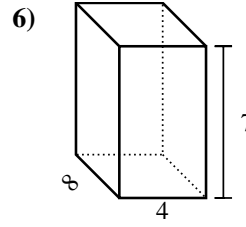
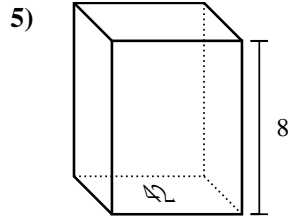
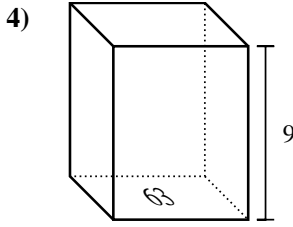
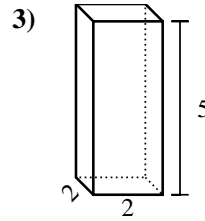
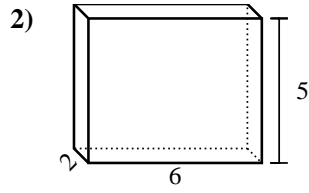
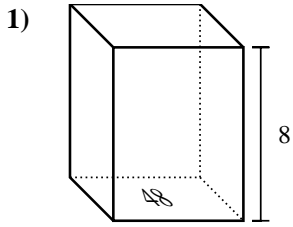


1. _____
2. _____
3. _____
4. _____
5. _____
6. _____
7. _____
8. _____
9. _____
10. _____
11. _____
12. _____
13. _____
14. _____
15. _____



Calculez le volume de prismes rectangulaires. Unités sont en cm (pas à l'échelle). Rappel $V = BH$ and $V=L \times l \times H$

Réponses

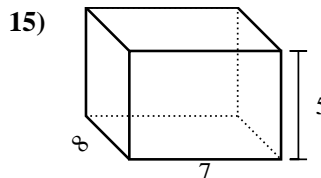
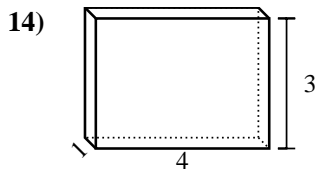
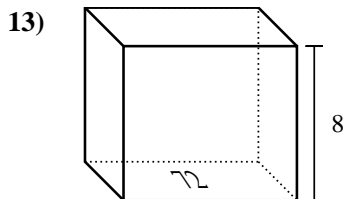
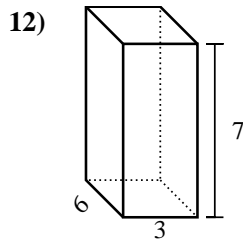
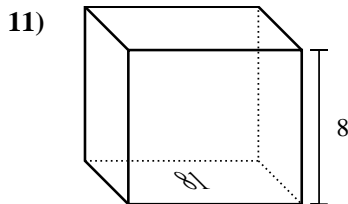
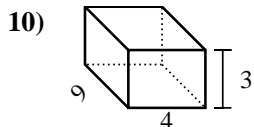
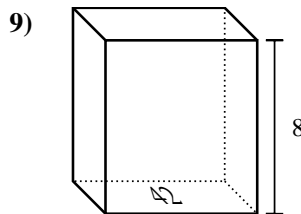
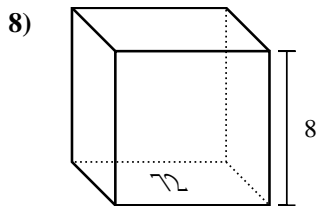
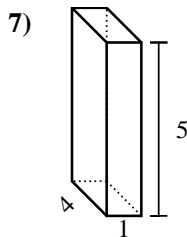
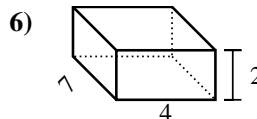
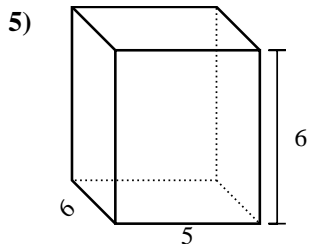
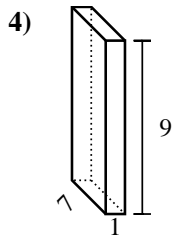
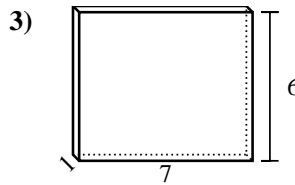
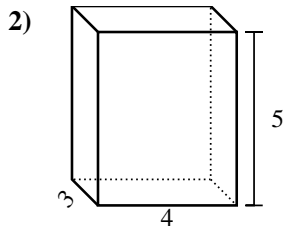
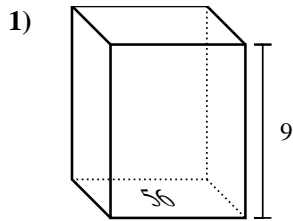


1. 384 cm³
2. 60 cm³
3. 20 cm³
4. 567 cm³
5. 336 cm³
6. 224 cm³
7. 576 cm³
8. 360 cm³
9. 128 cm³
10. 40 cm³
11. 324 cm³
12. 60 cm³
13. 288 cm³
14. 108 cm³
15. 432 cm³



Calculez le volume de prismes rectangulaires. Unités sont en cm (pas à l'échelle). Rappel $V = BH$ and $V=L \times l \times H$

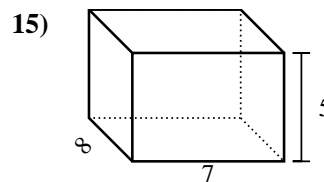
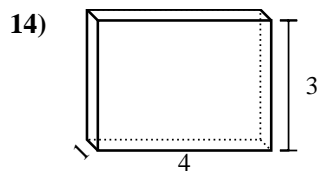
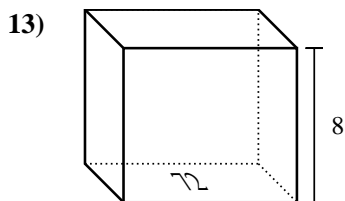
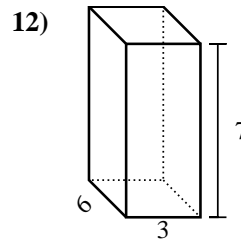
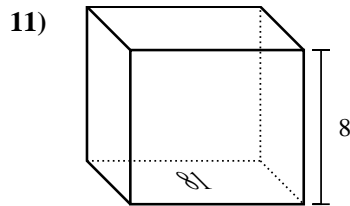
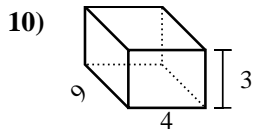
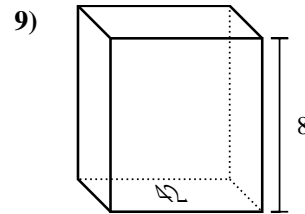
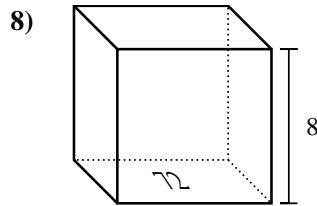
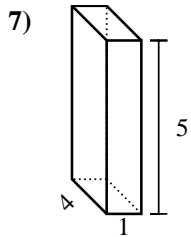
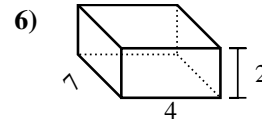
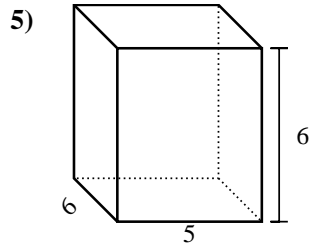
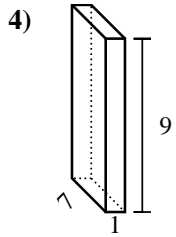
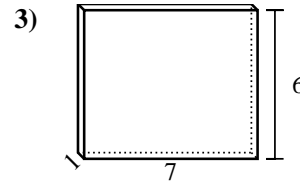
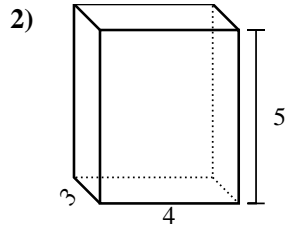
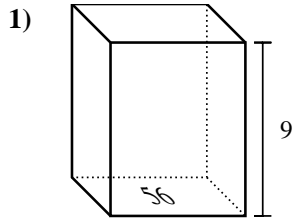
Réponses



1. _____
2. _____
3. _____
4. _____
5. _____
6. _____
7. _____
8. _____
9. _____
10. _____
11. _____
12. _____
13. _____
14. _____
15. _____



Calculez le volume de prismes rectangulaires. Unités sont en cm (pas à l'échelle). Rappel $V = BH$ and $V=L \times l \times H$



Réponses

1. **504 cm³**

2. **60 cm³**

3. **42 cm³**

4. **63 cm³**

5. **180 cm³**

6. **56 cm³**

7. **20 cm³**

8. **576 cm³**

9. **336 cm³**

10. **108 cm³**

11. **648 cm³**

12. **126 cm³**

13. **576 cm³**

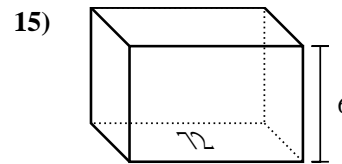
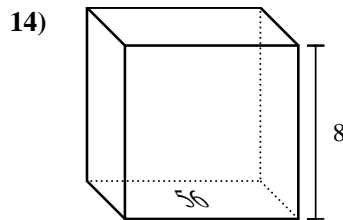
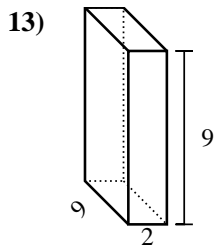
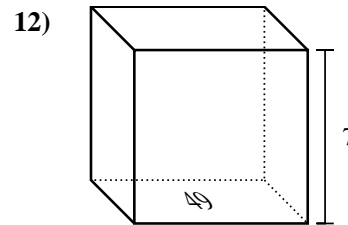
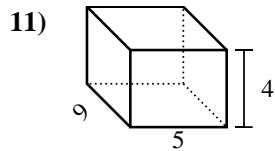
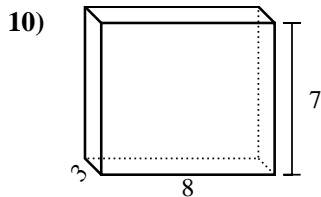
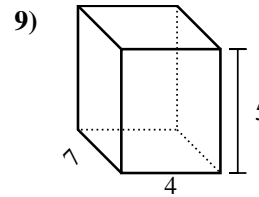
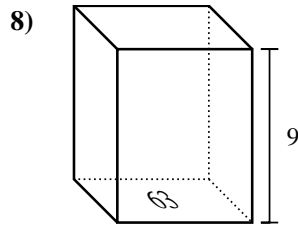
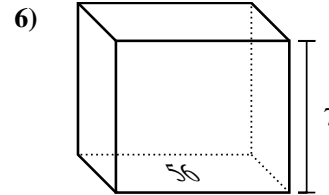
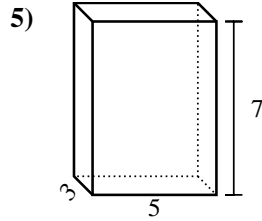
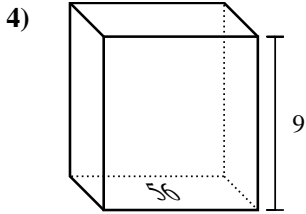
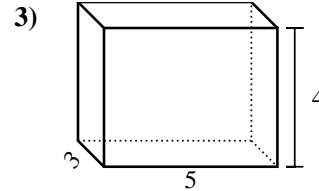
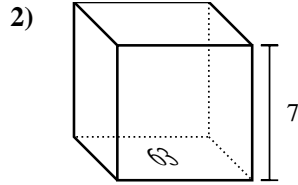
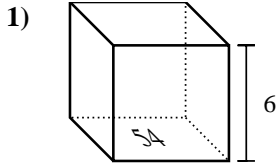
14. **12 cm³**

15. **280 cm³**



Calculez le volume de prismes rectangulaires. Unités sont en cm (pas à l'échelle). Rappel $V = BH$ and $V=L \times l \times H$

Réponses

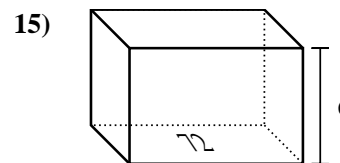
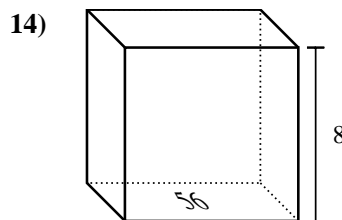
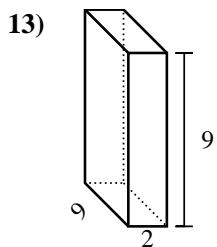
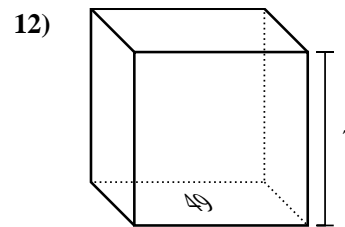
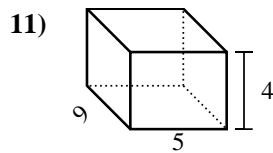
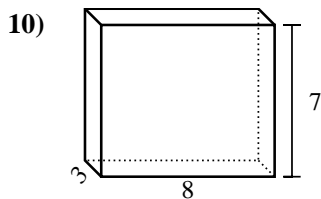
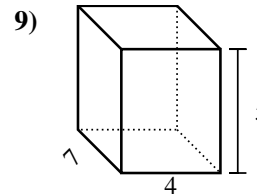
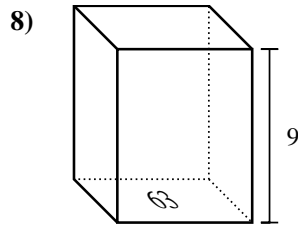
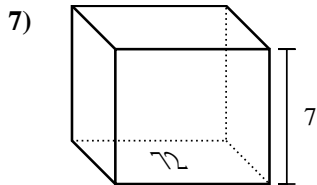
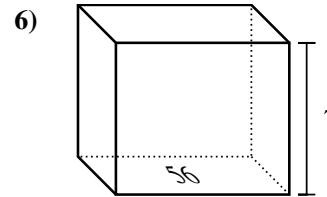
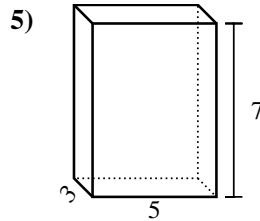
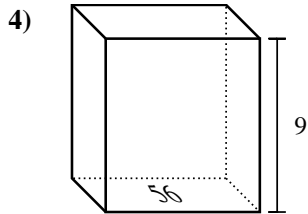
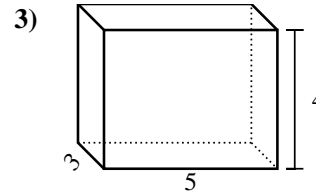
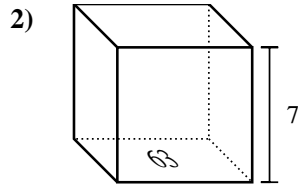
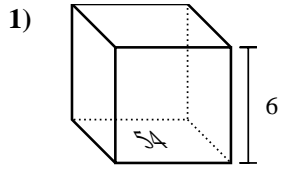


1. _____
2. _____
3. _____
4. _____
5. _____
6. _____
7. _____
8. _____
9. _____
10. _____
11. _____
12. _____
13. _____
14. _____
15. _____



Calculez le volume de prismes rectangulaires. Unités sont en cm (pas à l'échelle). Rappel $V = BH$ and $V=L \times l \times H$

Réponses

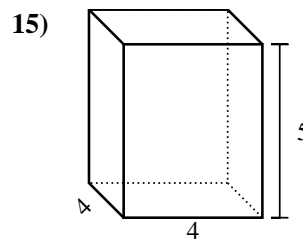
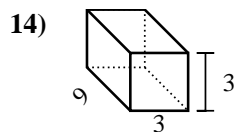
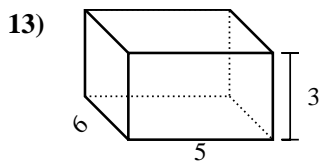
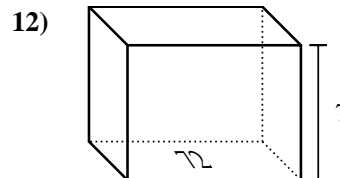
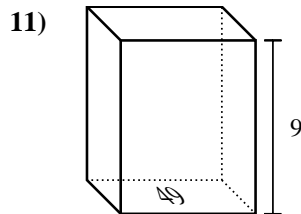
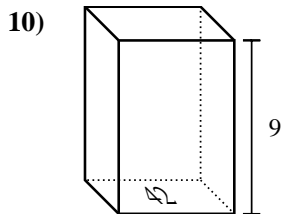
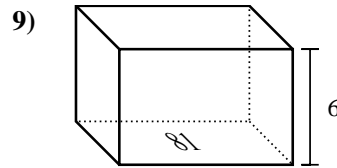
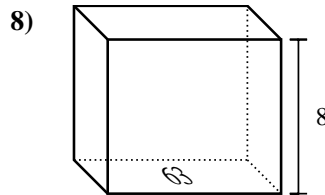
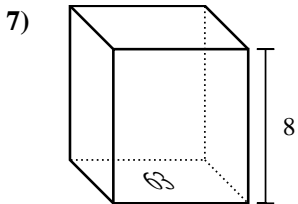
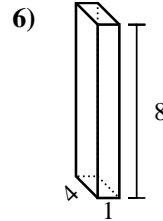
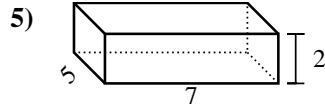
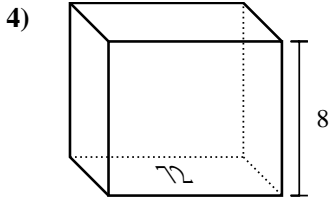
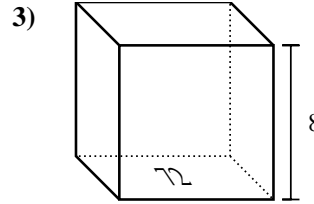
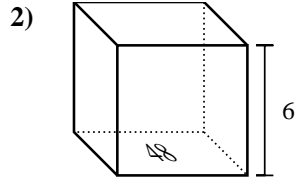
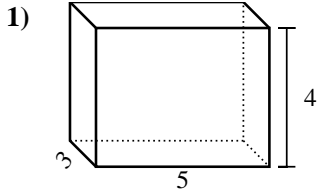


1. 324 cm³
2. 441 cm³
3. 60 cm³
4. 504 cm³
5. 105 cm³
6. 392 cm³
7. 504 cm³
8. 567 cm³
9. 140 cm³
10. 168 cm³
11. 180 cm³
12. 343 cm³
13. 162 cm³
14. 448 cm³
15. 432 cm³



Calculez le volume de prismes rectangulaires. Unités sont en cm (pas à l'échelle). Rappel $V = BH$ and $V=L \times l \times H$

Réponses

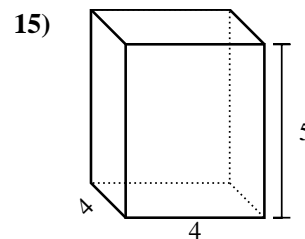
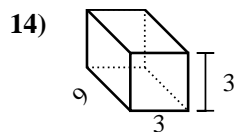
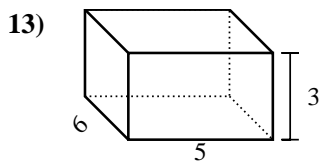
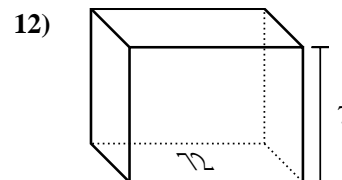
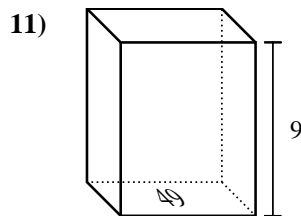
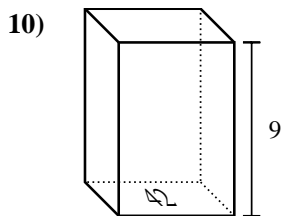
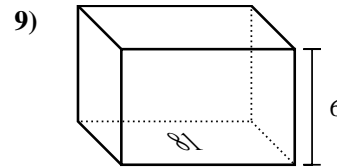
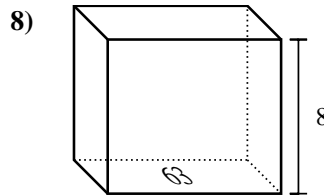
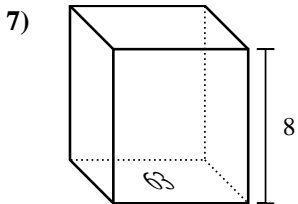
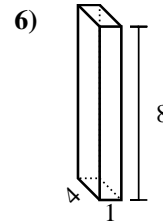
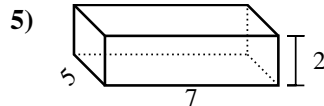
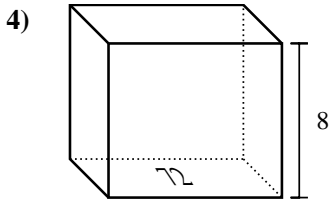
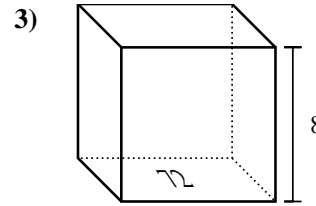
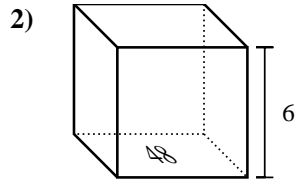
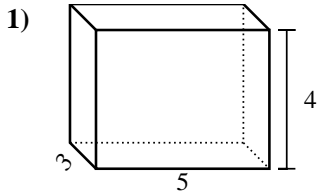


1. _____
2. _____
3. _____
4. _____
5. _____
6. _____
7. _____
8. _____
9. _____
10. _____
11. _____
12. _____
13. _____
14. _____
15. _____



Calculez le volume de prismes rectangulaires. Unités sont en cm (pas à l'échelle). Rappel $V = BH$ and $V=L \times l \times H$

Réponses



1. 60 cm³

2. 288 cm³

3. 576 cm³

4. 576 cm³

5. 70 cm³

6. 32 cm³

7. 504 cm³

8. 504 cm³

9. 486 cm³

10. 378 cm³

11. 441 cm³

12. 504 cm³

13. 90 cm³

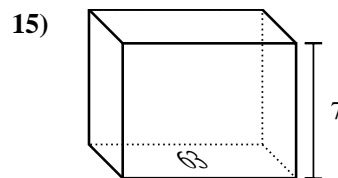
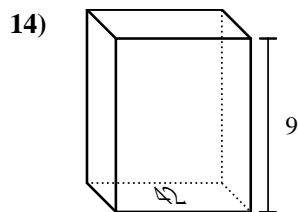
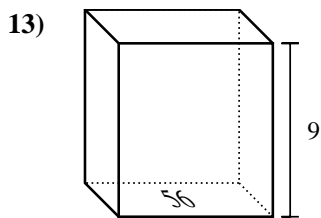
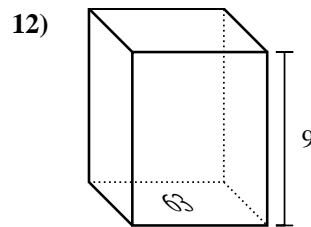
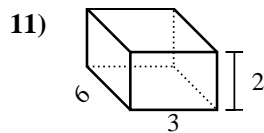
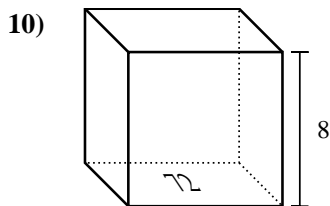
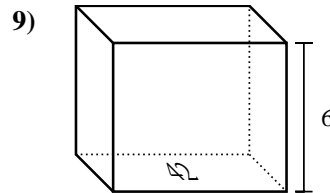
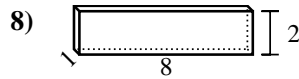
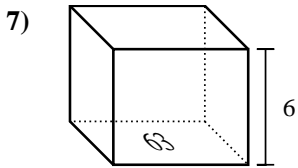
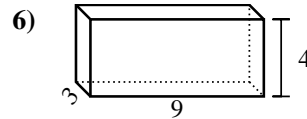
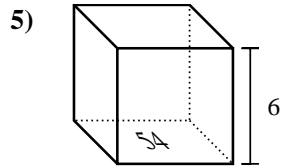
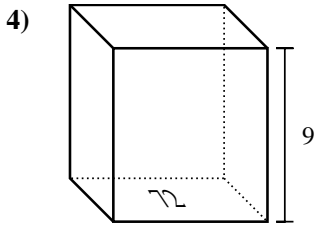
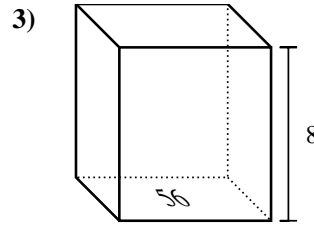
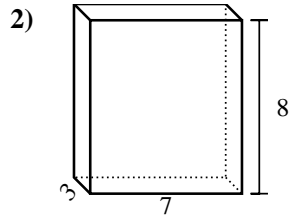
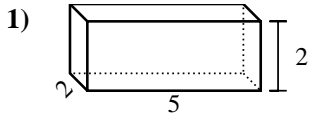
14. 81 cm³

15. 80 cm³



Calculez le volume de prismes rectangulaires. Unités sont en cm (pas à l'échelle). Rappel $V = BH$ and $V=L \times l \times H$

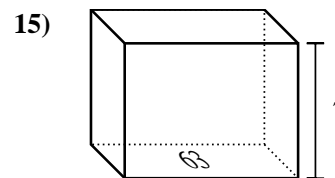
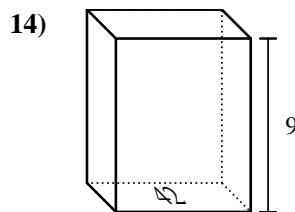
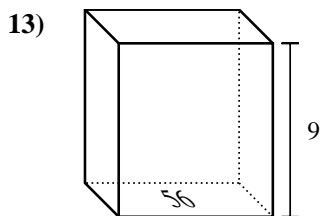
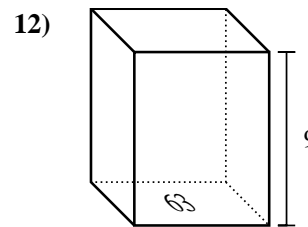
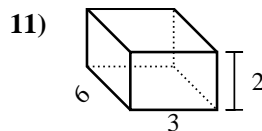
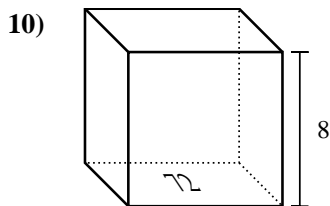
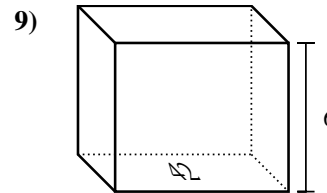
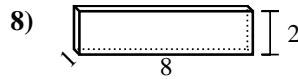
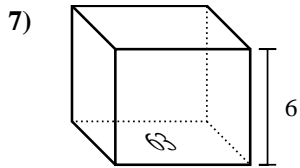
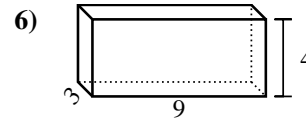
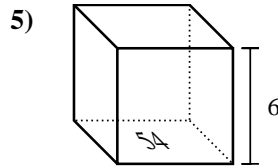
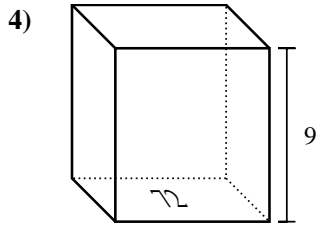
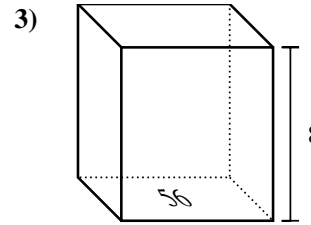
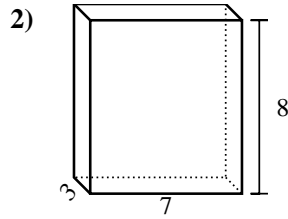
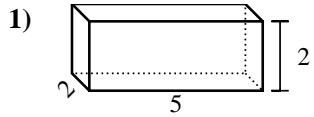
Réponses



1. _____
2. _____
3. _____
4. _____
5. _____
6. _____
7. _____
8. _____
9. _____
10. _____
11. _____
12. _____
13. _____
14. _____
15. _____



Calculez le volume de prismes rectangulaires. Unités sont en cm (pas à l'échelle). Rappel $V = BH$ and $V=L \times l \times H$



Réponses

1. **20 cm³**

2. **168 cm³**

3. **448 cm³**

4. **648 cm³**

5. **324 cm³**

6. **108 cm³**

7. **378 cm³**

8. **16 cm³**

9. **252 cm³**

10. **576 cm³**

11. **36 cm³**

12. **567 cm³**

13. **504 cm³**

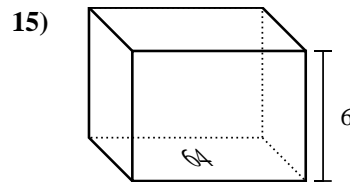
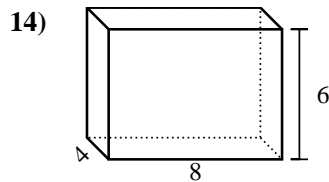
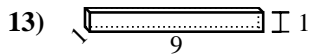
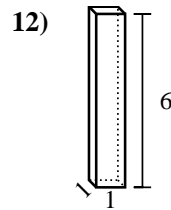
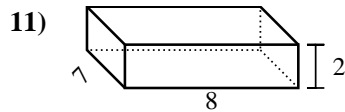
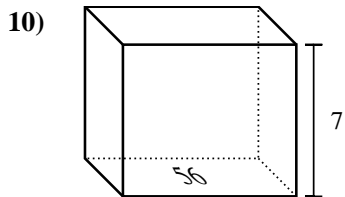
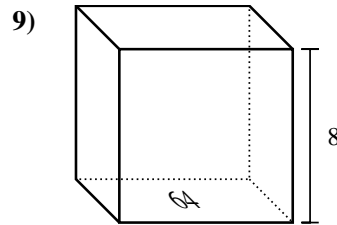
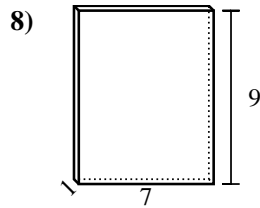
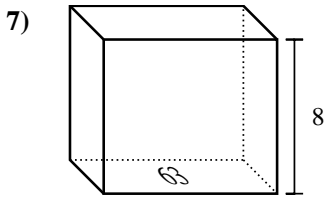
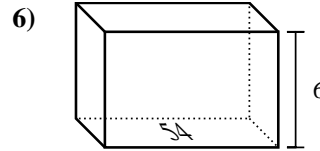
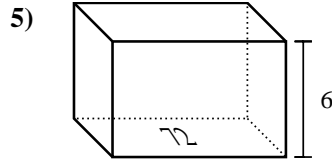
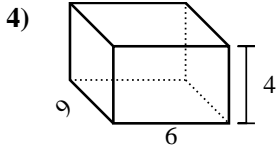
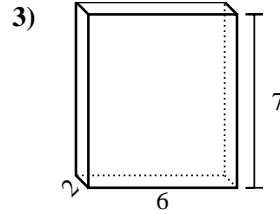
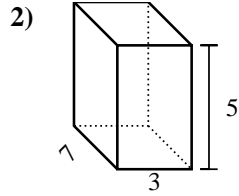
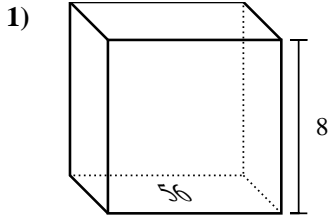
14. **378 cm³**

15. **441 cm³**



Calculez le volume de prismes rectangulaires. Unités sont en cm (pas à l'échelle). Rappel $V = BH$ and $V=L \times l \times H$

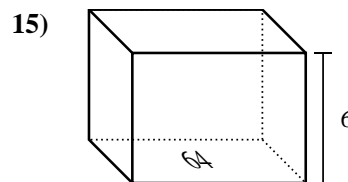
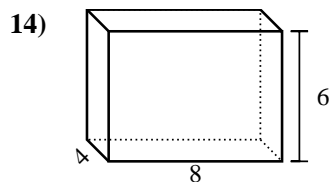
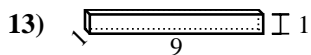
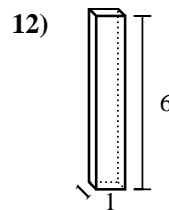
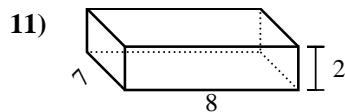
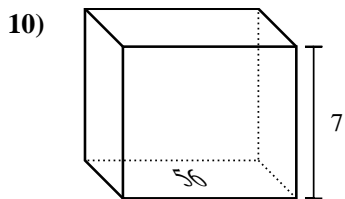
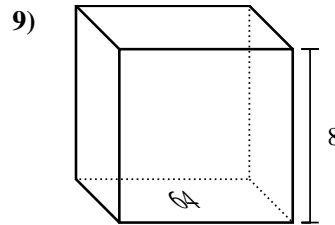
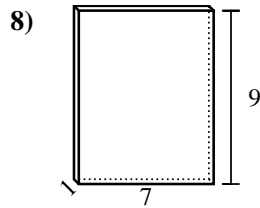
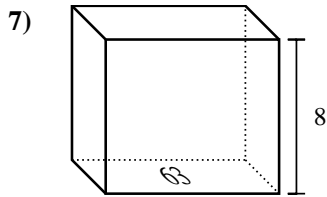
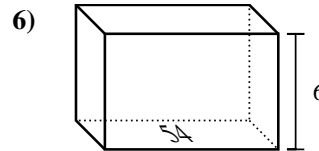
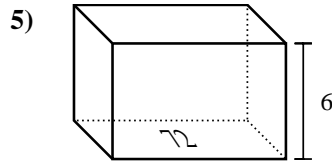
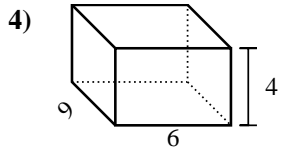
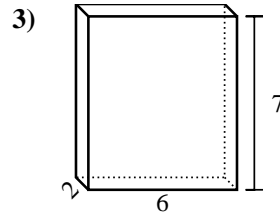
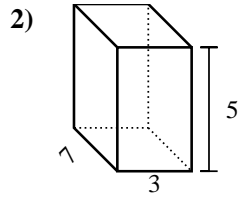
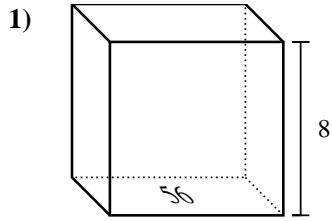
Réponses



1. _____
2. _____
3. _____
4. _____
5. _____
6. _____
7. _____
8. _____
9. _____
10. _____
11. _____
12. _____
13. _____
14. _____
15. _____



Calculez le volume de prismes rectangulaires. Unités sont en cm (pas à l'échelle). Rappel $V = BH$ and $V=L \times l \times H$



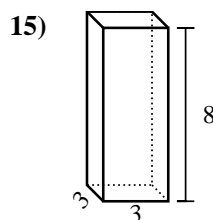
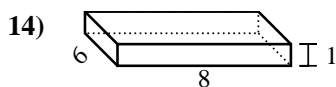
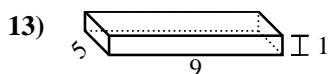
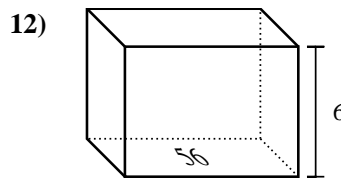
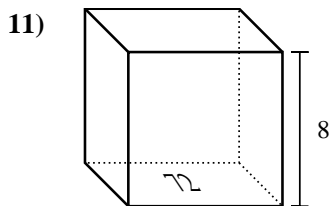
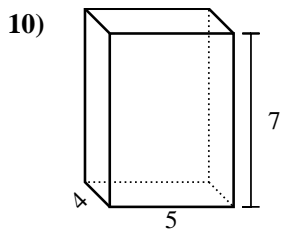
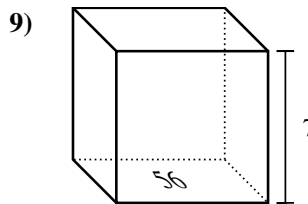
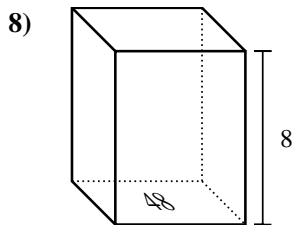
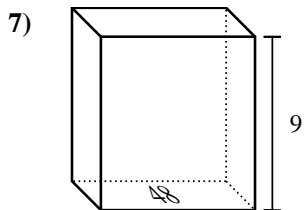
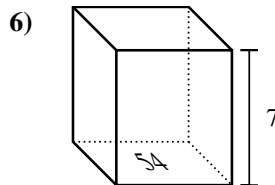
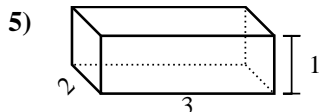
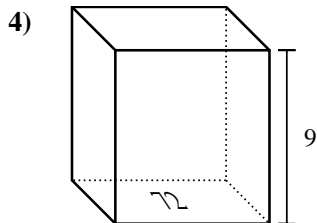
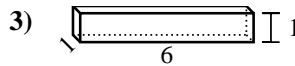
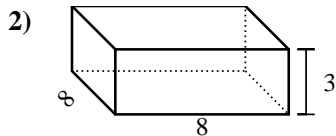
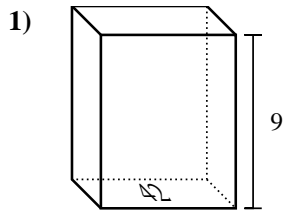
Réponses

1. 448 cm³
2. 105 cm³
3. 84 cm³
4. 216 cm³
5. 432 cm³
6. 324 cm³
7. 504 cm³
8. 63 cm³
9. 512 cm³
10. 392 cm³
11. 112 cm³
12. 6 cm³
13. 9 cm³
14. 192 cm³
15. 384 cm³



Calculez le volume de prismes rectangulaires. Unités sont en cm (pas à l'échelle). Rappel $V = BH$ and $V=L \times l \times H$

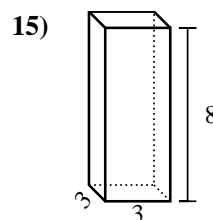
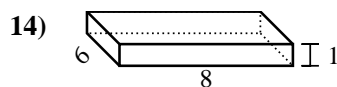
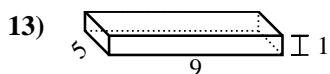
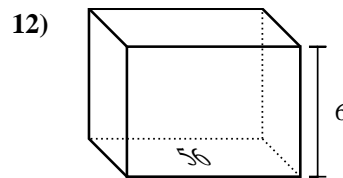
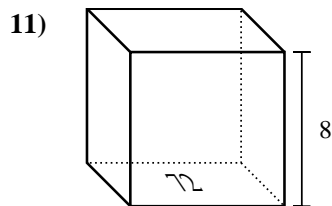
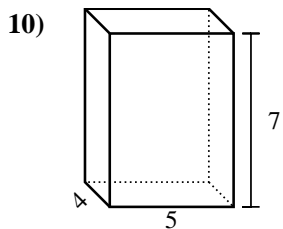
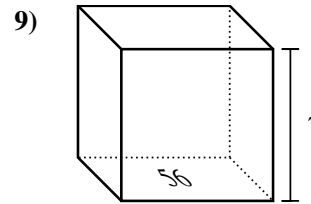
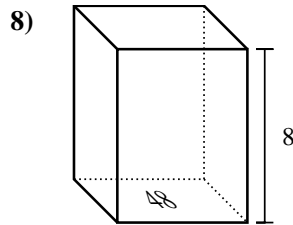
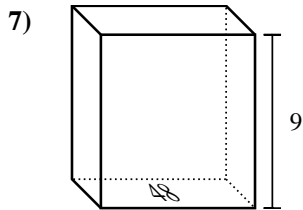
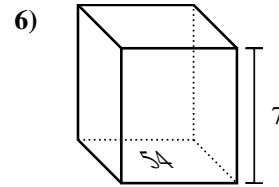
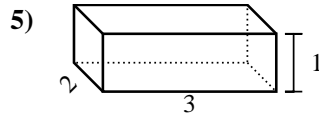
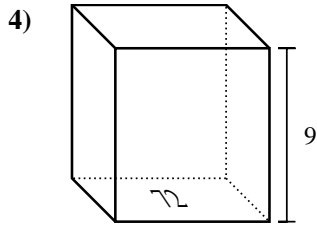
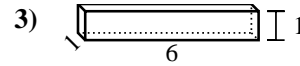
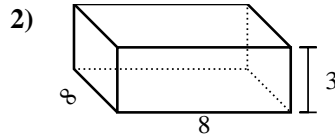
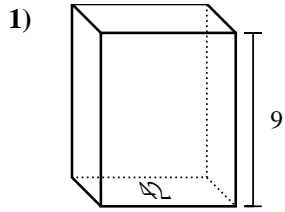
Réponses



1. _____
2. _____
3. _____
4. _____
5. _____
6. _____
7. _____
8. _____
9. _____
10. _____
11. _____
12. _____
13. _____
14. _____
15. _____



Calculez le volume de prismes rectangulaires. Unités sont en cm (pas à l'échelle). Rappel $V = BH$ and $V=L \times l \times H$



Réponses

1. **378 cm³**

2. **192 cm³**

3. **6 cm³**

4. **648 cm³**

5. **6 cm³**

6. **378 cm³**

7. **432 cm³**

8. **384 cm³**

9. **392 cm³**

10. **140 cm³**

11. **576 cm³**

12. **336 cm³**

13. **45 cm³**

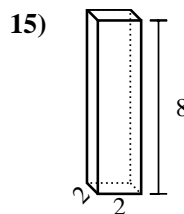
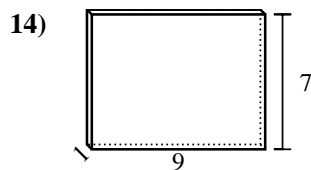
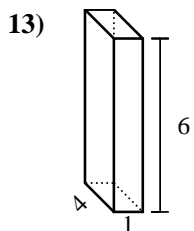
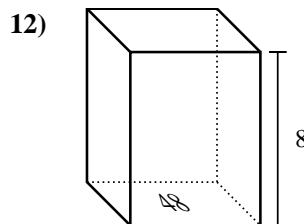
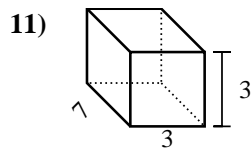
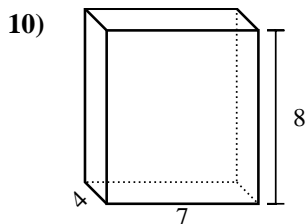
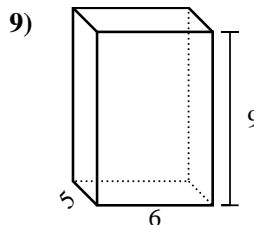
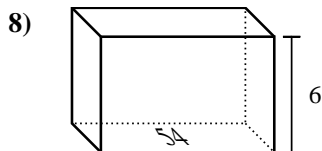
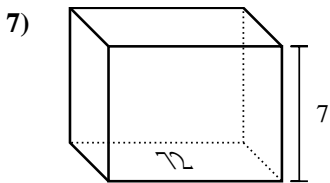
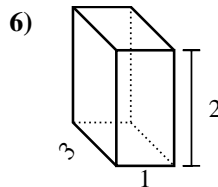
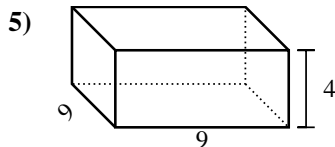
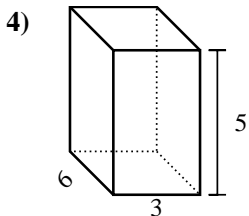
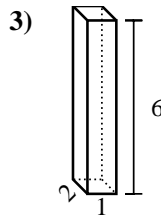
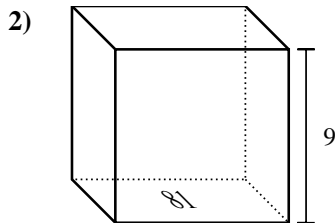
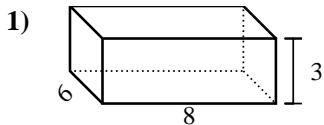
14. **48 cm³**

15. **72 cm³**



Calculez le volume de prismes rectangulaires. Unités sont en cm (pas à l'échelle). Rappel $V = BH$ and $V=L \times l \times H$

Réponses

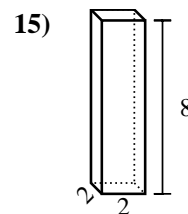
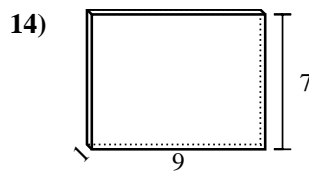
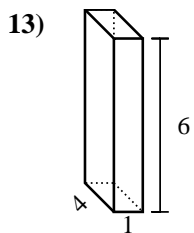
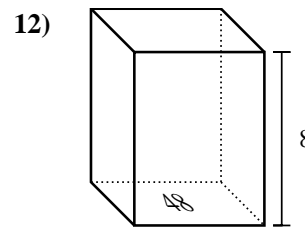
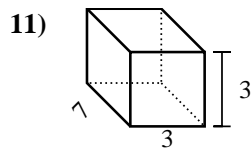
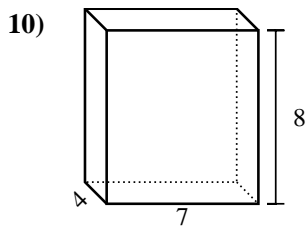
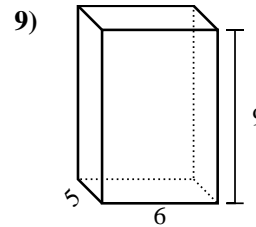
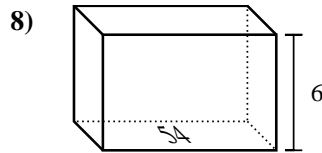
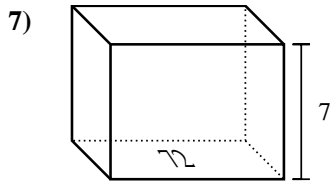
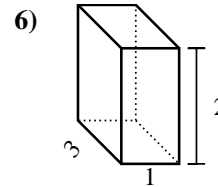
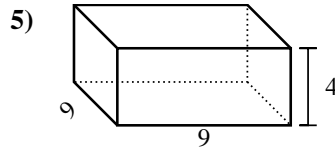
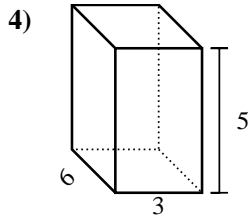
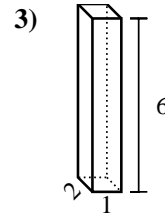
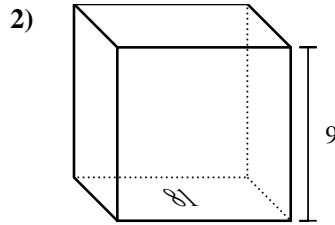
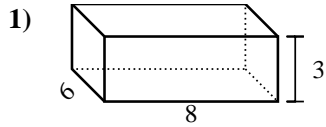


1. _____
2. _____
3. _____
4. _____
5. _____
6. _____
7. _____
8. _____
9. _____
10. _____
11. _____
12. _____
13. _____
14. _____
15. _____



Calculez le volume de prismes rectangulaires. Unités sont en cm (pas à l'échelle). Rappel $V = BH$ and $V=L \times l \times H$

Réponses



1. 144 cm³
2. 729 cm³
3. 12 cm³
4. 90 cm³
5. 324 cm³
6. 6 cm³
7. 504 cm³
8. 324 cm³
9. 270 cm³
10. 224 cm³
11. 63 cm³
12. 384 cm³
13. 24 cm³
14. 63 cm³
15. 32 cm³