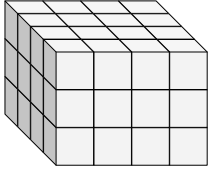


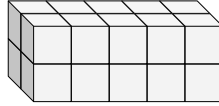


Trouvez la longueur, la largeur et la hauteur du prisme rectangulaire. Trouvez ensuite le volume.

Ex)



1)



Ex. 4 4 3 48

1. _____

2. _____

3. _____

4. _____

5. _____

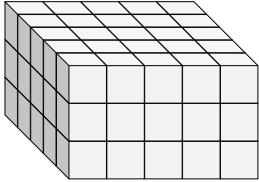
6. _____

7. _____

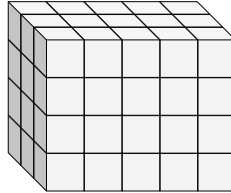
8. _____

9. _____

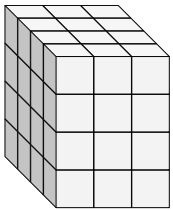
2)



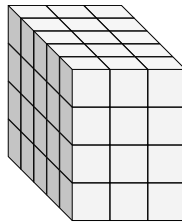
3)



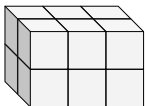
4)



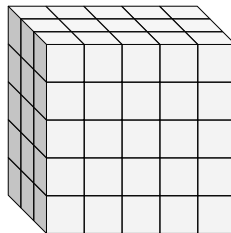
5)



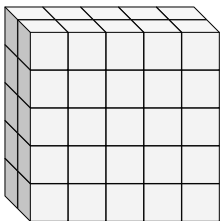
6)



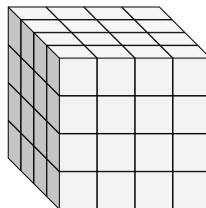
7)



8)

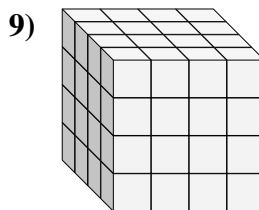
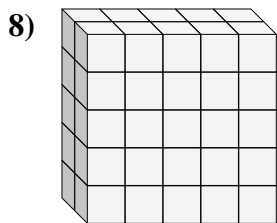
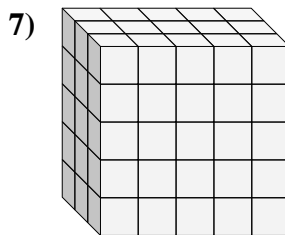
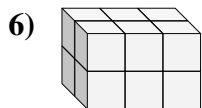
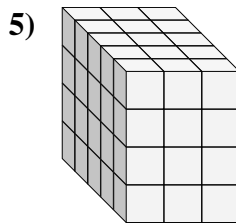
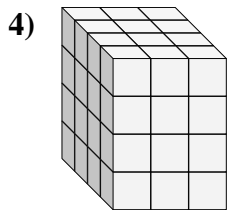
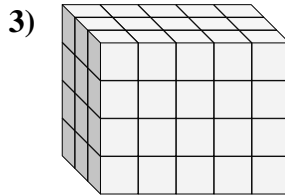
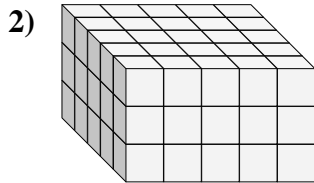
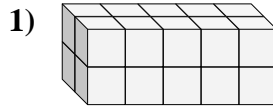
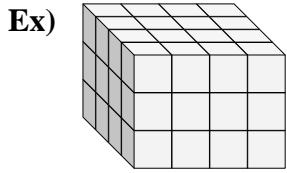


9)





Trouvez la longueur, la largeur et la hauteur du prisme rectangulaire. Trouvez ensuite le volume.



Réponses

Ex.	<u>4</u>	<u>4</u>	<u>3</u>	<u>48</u>
1.	<u>2</u>	<u>5</u>	<u>2</u>	<u>20</u>
2.	<u>5</u>	<u>5</u>	<u>3</u>	<u>75</u>
3.	<u>3</u>	<u>5</u>	<u>4</u>	<u>60</u>
4.	<u>4</u>	<u>3</u>	<u>4</u>	<u>48</u>
5.	<u>5</u>	<u>3</u>	<u>4</u>	<u>60</u>
6.	<u>2</u>	<u>3</u>	<u>2</u>	<u>12</u>
7.	<u>3</u>	<u>5</u>	<u>5</u>	<u>75</u>
8.	<u>2</u>	<u>5</u>	<u>5</u>	<u>50</u>
9.	<u>4</u>	<u>4</u>	<u>4</u>	<u>64</u>