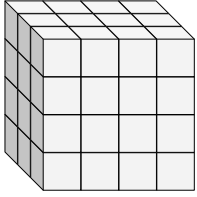


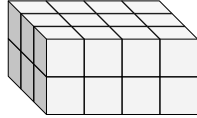


Trouvez la longueur, la largeur et la hauteur du prisme rectangulaire. Trouvez ensuite le volume.

Ex)



1)



Ex. 3 4 4 48

1. _____

2. _____

3. _____

4. _____

5. _____

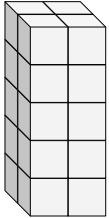
6. _____

7. _____

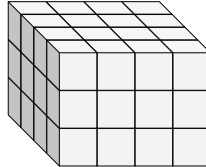
8. _____

9. _____

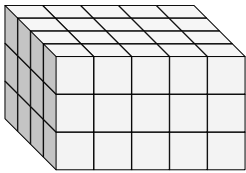
2)



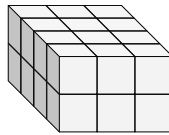
3)



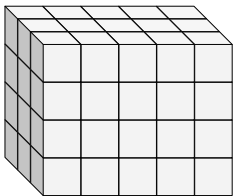
4)



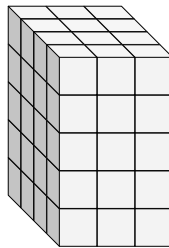
5)



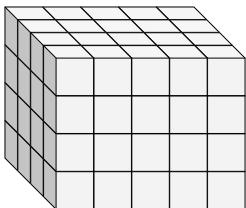
6)



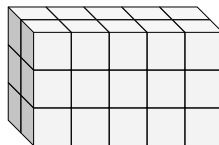
7)



8)

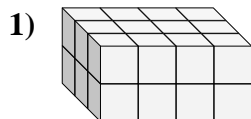
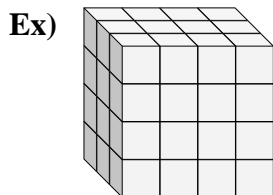


9)





Trouvez la longueur, la largeur et la hauteur du prisme rectangulaire. Trouvez ensuite le volume.



Ex. 3 4 4 48

1. 3 4 2 24

2. 2 2 5 20

3. 4 4 3 48

4. 4 5 3 60

5. 4 3 2 24

6. 3 5 4 60

7. 4 3 5 60

8. 4 5 4 80

9. 2 5 3 30

