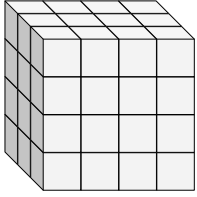


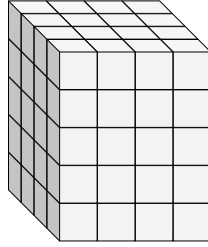


Trouvez la longueur, la largeur et la hauteur du prisme rectangulaire. Trouvez ensuite le volume.

Ex)



1)



Ex. 3 4 4 48

1. _____

2. _____

3. _____

4. _____

5. _____

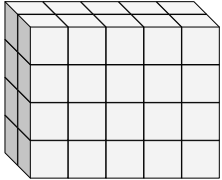
6. _____

7. _____

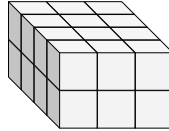
8. _____

9. _____

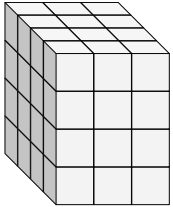
2)



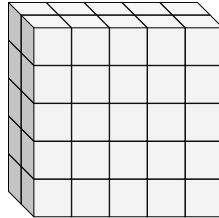
3)



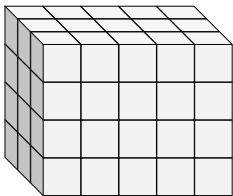
4)



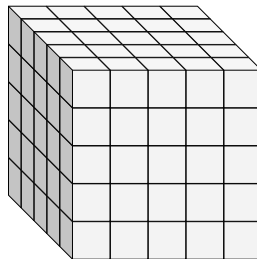
5)



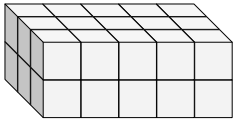
6)



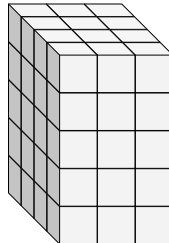
7)



8)



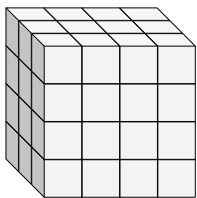
9)



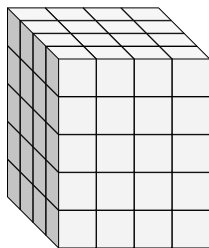


Trouvez la longueur, la largeur et la hauteur du prisme rectangulaire. Trouvez ensuite le volume.

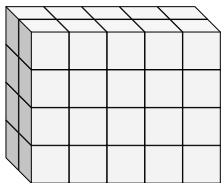
Ex)



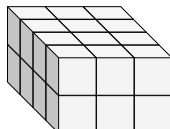
1)



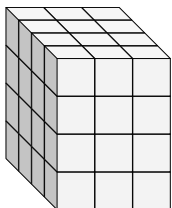
2)



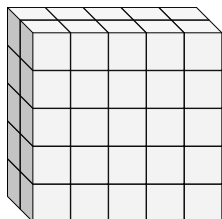
3)



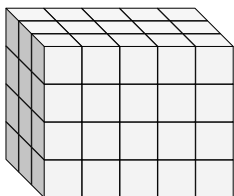
4)



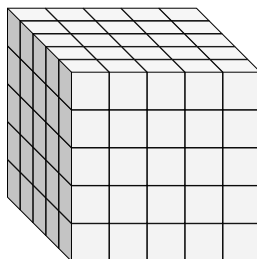
5)



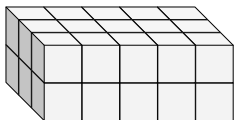
6)



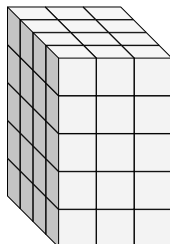
7)



8)



9)

**Réponses**Ex. 3 4 4 481. 4 4 5 802. 2 5 4 403. 4 3 2 244. 4 3 4 485. 2 5 5 506. 3 5 4 607. 5 5 5 1258. 3 5 2 309. 4 3 5 60