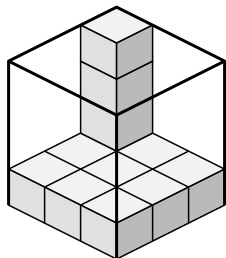




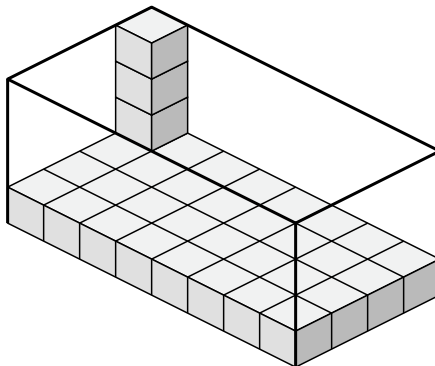
Déterminez le volume de chaque boîte. Chaque bloc correspond à 1 unité cubique (u<sup>3</sup>).

**Réponses**

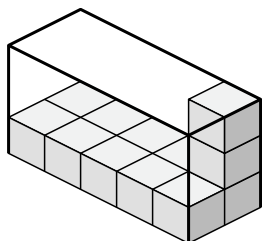
1)



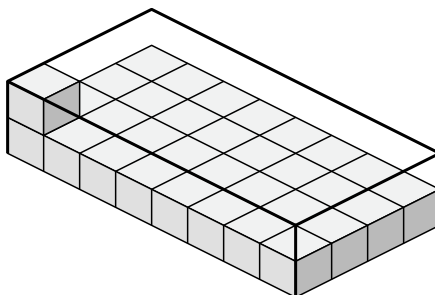
2)



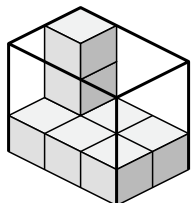
3)



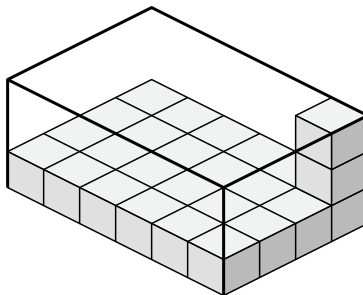
4)



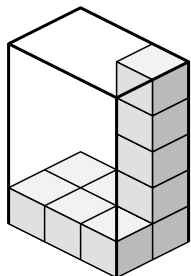
5)



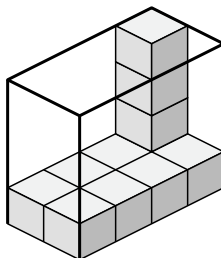
6)



7)



8)



1. \_\_\_\_\_

2. \_\_\_\_\_

3. \_\_\_\_\_

4. \_\_\_\_\_

5. \_\_\_\_\_

6. \_\_\_\_\_

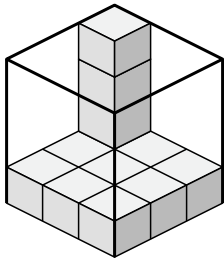
7. \_\_\_\_\_

8. \_\_\_\_\_

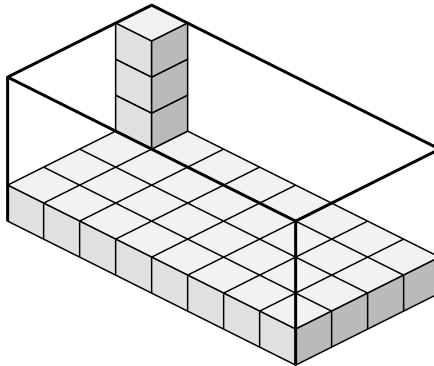


Déterminez le volume de chaque boîte. Chaque bloc correspond à 1 unité cubique ( $u^3$ ).

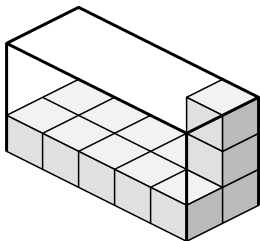
1)



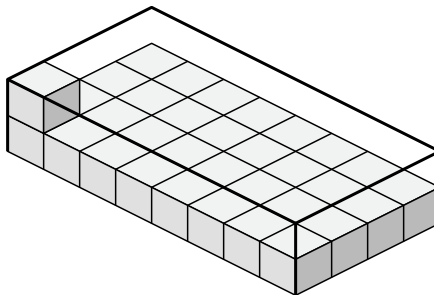
2)



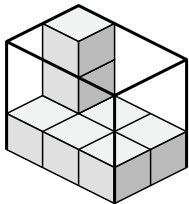
3)



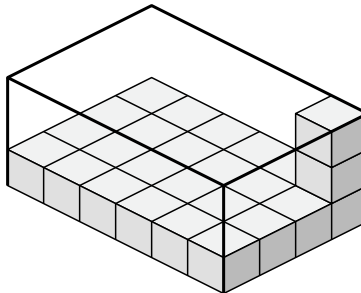
4)



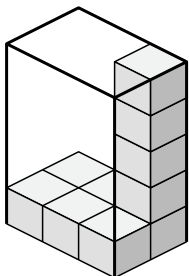
5)



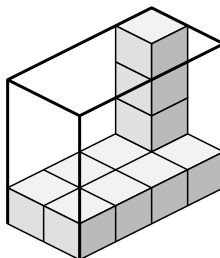
6)



7)



8)

**Réponses**

1. **36  $u^3$**
2. **128  $u^3$**
3. **30  $u^3$**
4. **64  $u^3$**
5. **18  $u^3$**
6. **72  $u^3$**
7. **30  $u^3$**
8. **32  $u^3$**