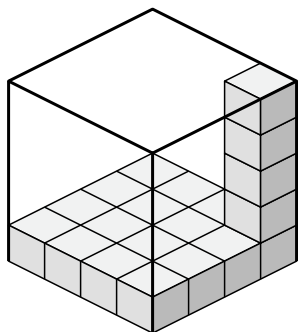




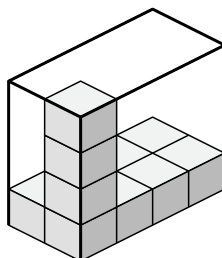
Déterminez le volume de chaque boîte. Chaque bloc correspond à 1 unité cubique (u 3).

Réponses

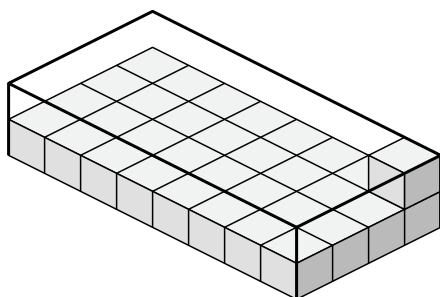
1)



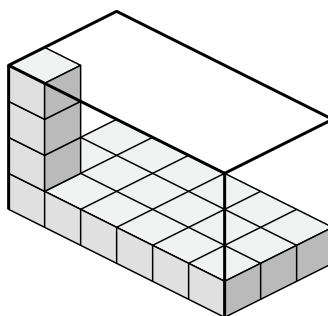
2)



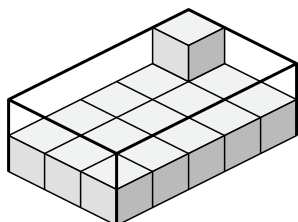
3)



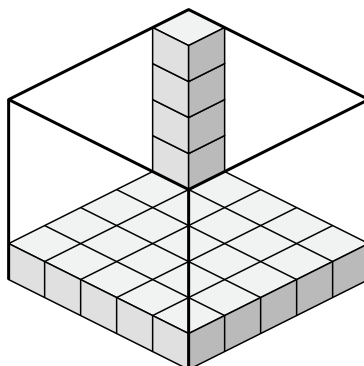
4)



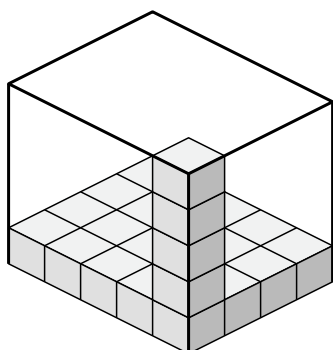
5)



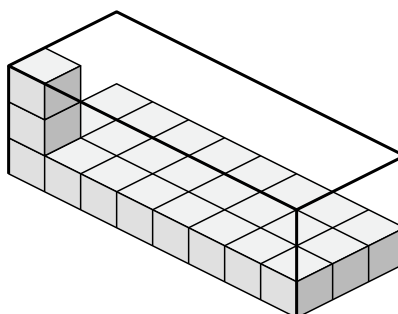
6)



7)



8)



1. _____

2. _____

3. _____

4. _____

5. _____

6. _____

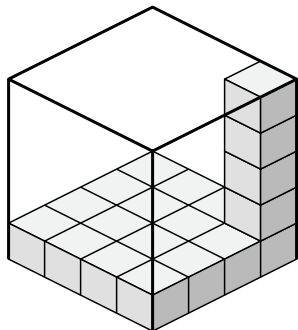
7. _____

8. _____

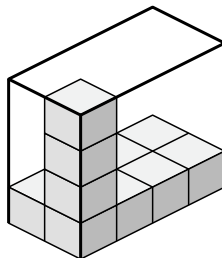


Déterminez le volume de chaque boîte. Chaque bloc correspond à 1 unité cubique (u^3).

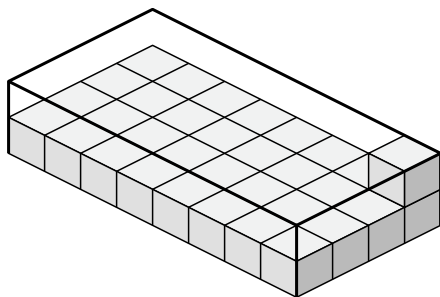
1)



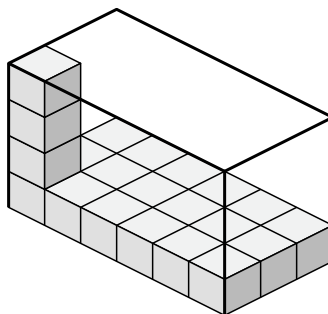
2)



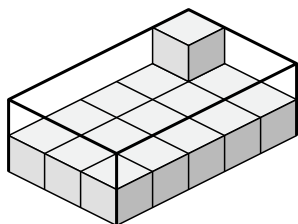
3)



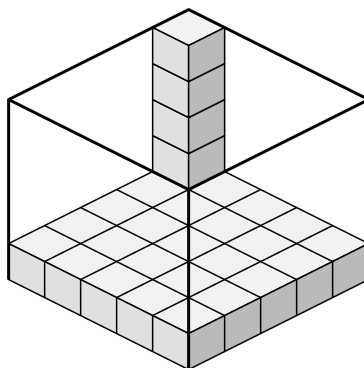
4)



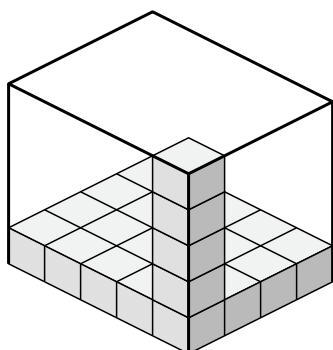
5)



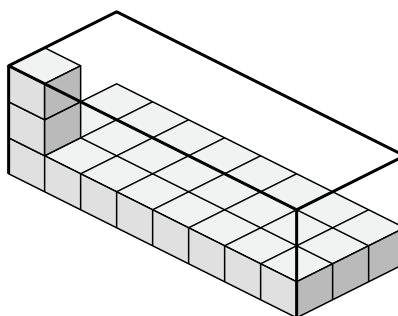
6)



7)



8)

**Réponses**1. **80 u^3** 2. **32 u^3** 3. **64 u^3** 4. **72 u^3** 5. **30 u^3** 6. **125 u^3** 7. **100 u^3** 8. **72 u^3**