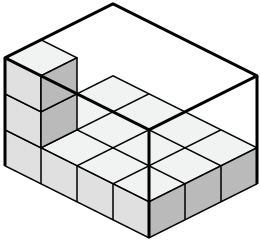




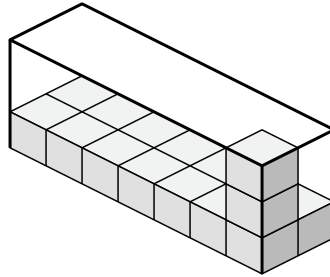
Déterminez le volume de chaque boîte. Chaque bloc correspond à 1 unité cubique (u³).

Réponses

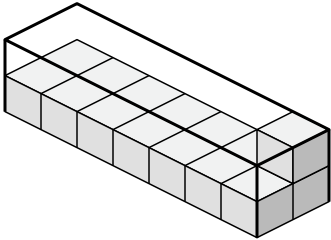
1)



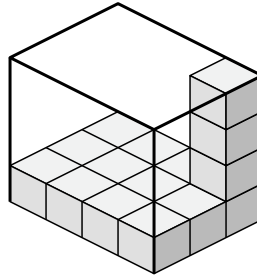
2)



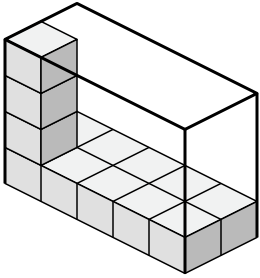
3)



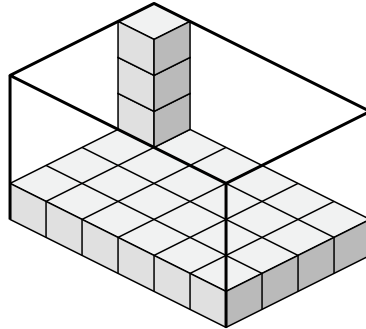
4)



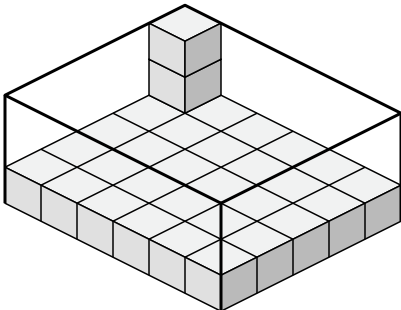
5)



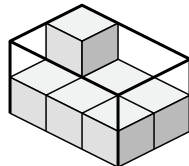
6)



7)



8)



1. _____

2. _____

3. _____

4. _____

5. _____

6. _____

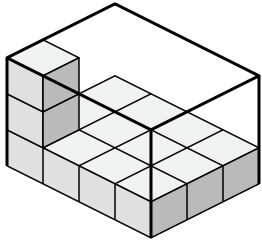
7. _____

8. _____

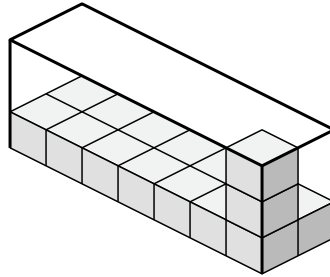


Déterminez le volume de chaque boîte. Chaque bloc correspond à 1 unité cubique (u³).

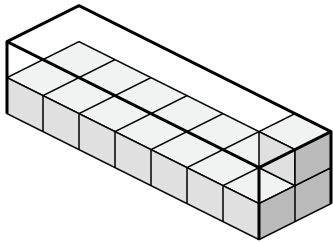
1)



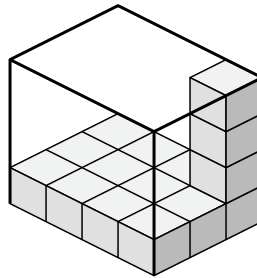
2)



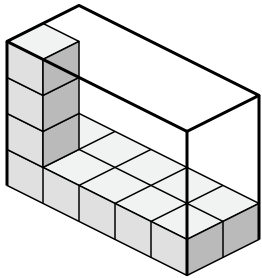
3)



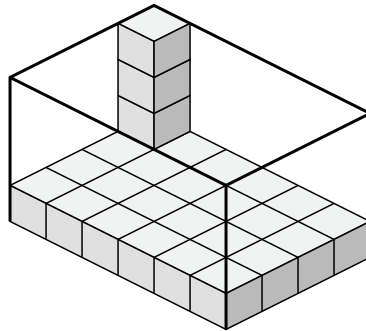
4)



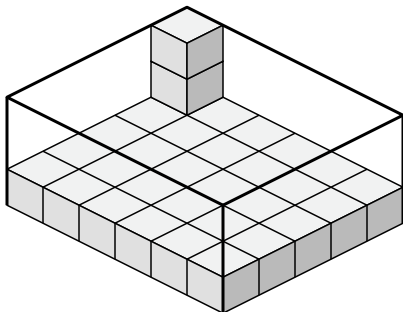
5)



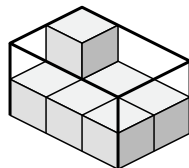
6)



7)



8)



Réponses

1. 36 u³

2. 42 u³

3. 28 u³

4. 48 u³

5. 40 u³

6. 96 u³

7. 90 u³

8. 12 u³