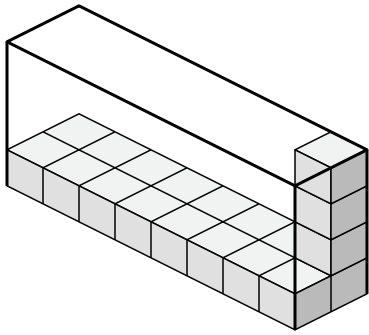




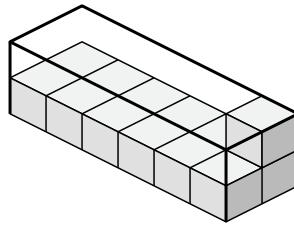
Déterminez le volume de chaque boîte. Chaque bloc correspond à 1 unité cubique (u 3).

**Réponses**

1)



2)



1. \_\_\_\_\_

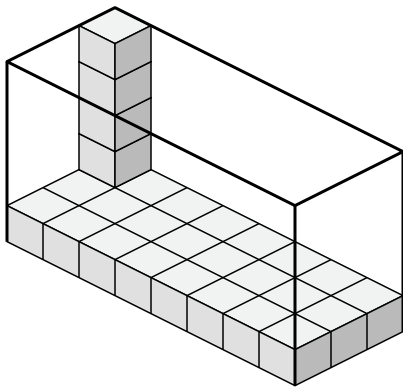
2. \_\_\_\_\_

3. \_\_\_\_\_

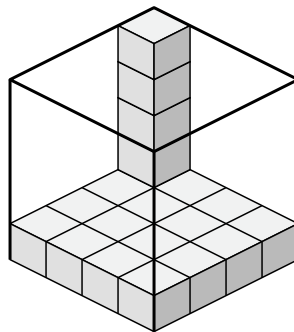
4. \_\_\_\_\_

5. \_\_\_\_\_

3)



4)

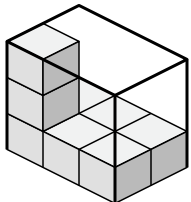


6. \_\_\_\_\_

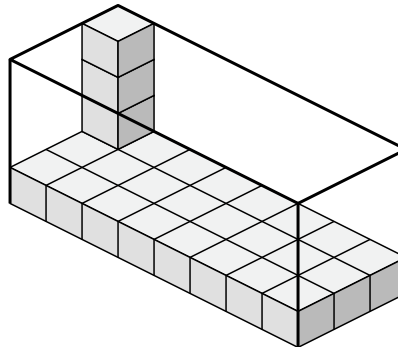
7. \_\_\_\_\_

8. \_\_\_\_\_

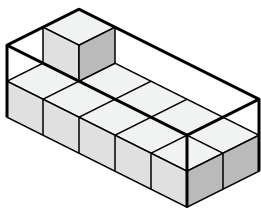
5)



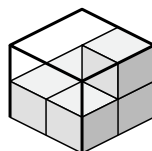
6)



7)



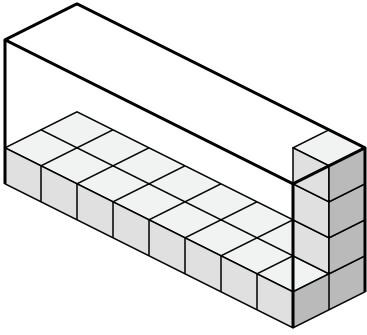
8)



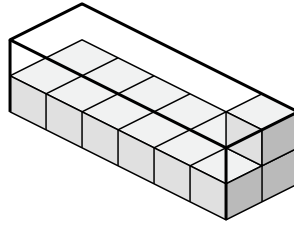


Déterminez le volume de chaque boîte. Chaque bloc correspond à 1 unité cubique (u<sup>3</sup>).

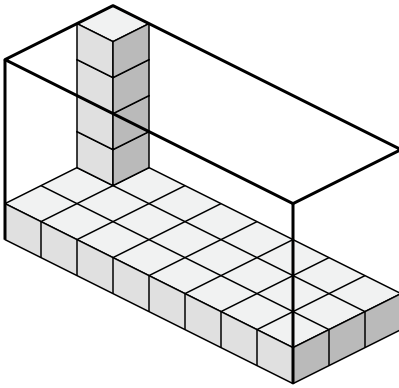
1)



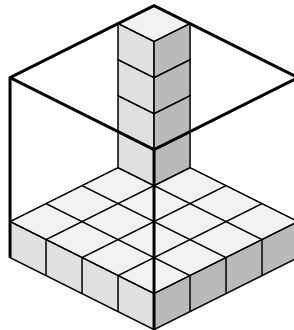
2)



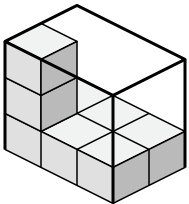
3)



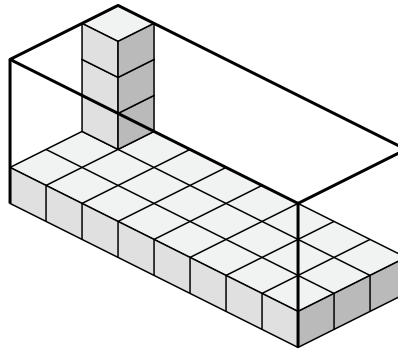
4)



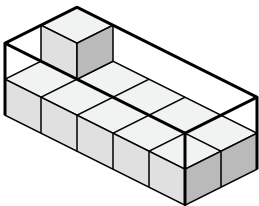
5)



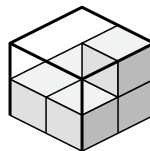
6)



7)



8)



**Réponses**

1. **64 u<sup>3</sup>**

2. **24 u<sup>3</sup>**

3. **120 u<sup>3</sup>**

4. **80 u<sup>3</sup>**

5. **18 u<sup>3</sup>**

6. **96 u<sup>3</sup>**

7. **20 u<sup>3</sup>**

8. **8 u<sup>3</sup>**