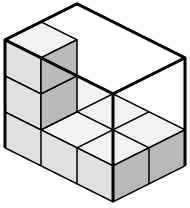




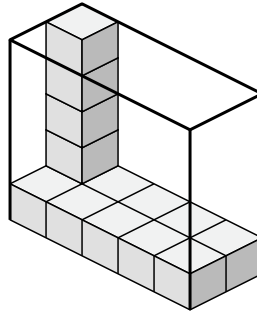
Déterminez le volume de chaque boîte. Chaque bloc correspond à 1 unité cubique (u 3).

Réponses

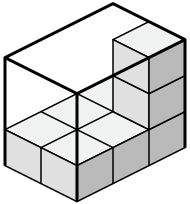
1)



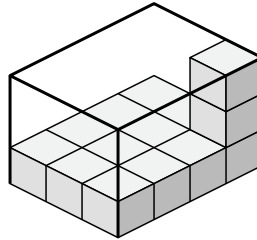
2)



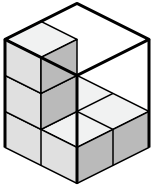
3)



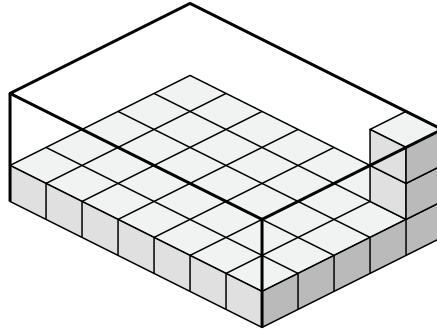
4)



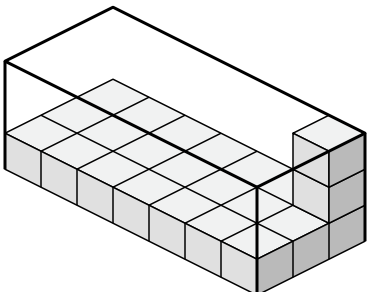
5)



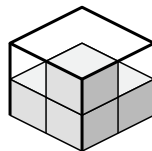
6)



7)



8)

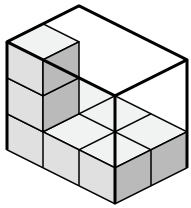


- 1. _____
- 2. _____
- 3. _____
- 4. _____
- 5. _____
- 6. _____
- 7. _____
- 8. _____

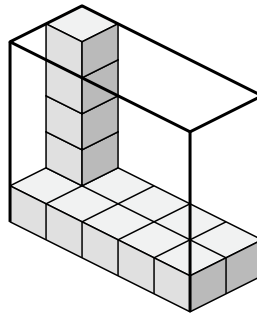


Déterminez le volume de chaque boîte. Chaque bloc correspond à 1 unité cubique (u³).

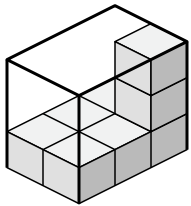
1)



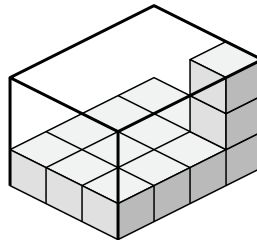
2)



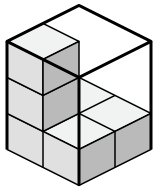
3)



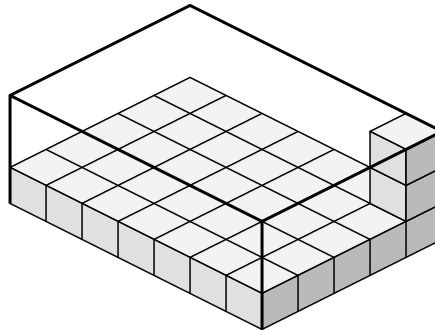
4)



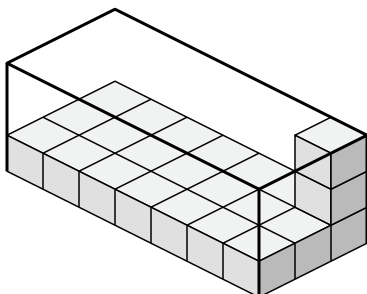
5)



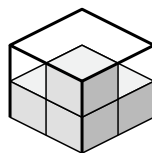
6)



7)



8)



Réponses

1. 18 u³

2. 50 u³

3. 18 u³

4. 36 u³

5. 12 u³

6. 105 u³

7. 63 u³

8. 8 u³