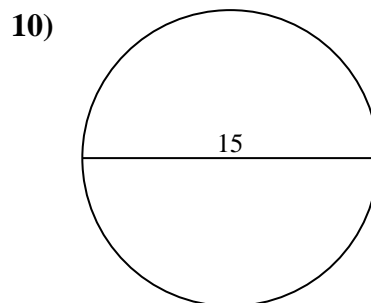
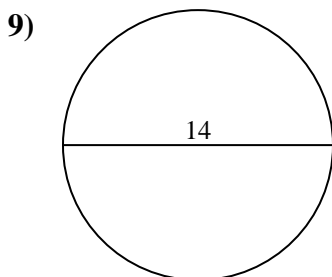
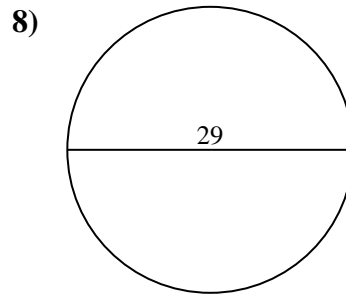
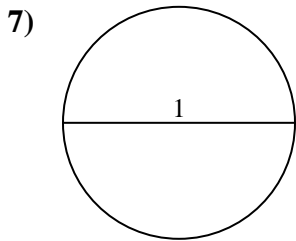
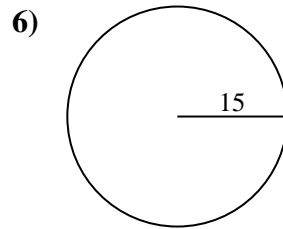
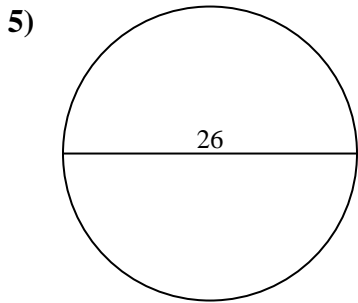
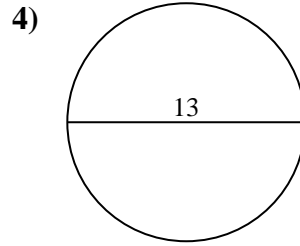
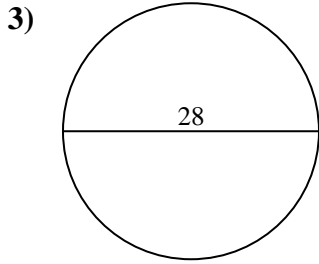
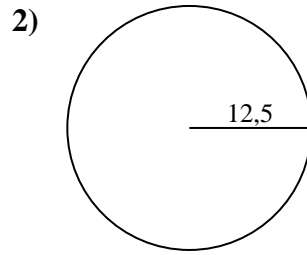
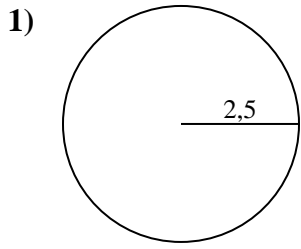




Calculez l'aire et la circonférence de chaque cercle. Les cercles ne sont pas à l'échelle.



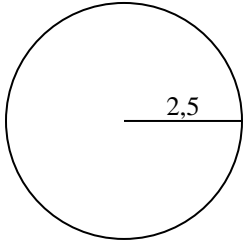
Réponses

- 1. _____
- 2. _____
- 3. _____
- 4. _____
- 5. _____
- 6. _____
- 7. _____
- 8. _____
- 9. _____
- 10. _____

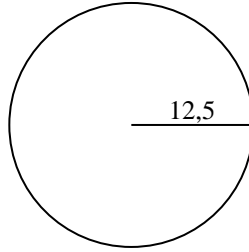


Calculez l'aire et la circonférence de chaque cercle. Les cercles ne sont pas à l'échelle.

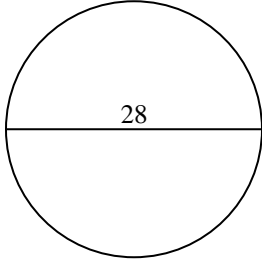
1)



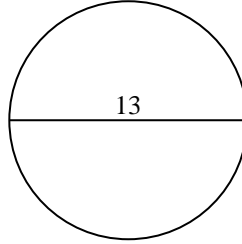
2)



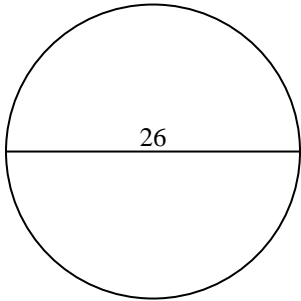
3)



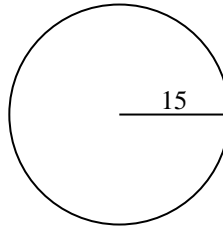
4)



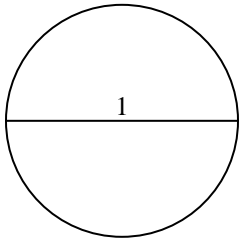
5)



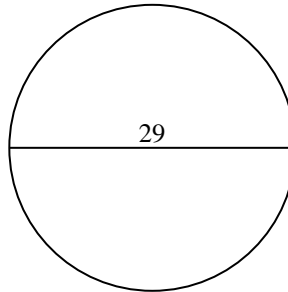
6)



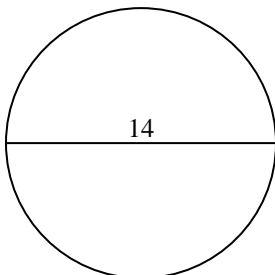
7)



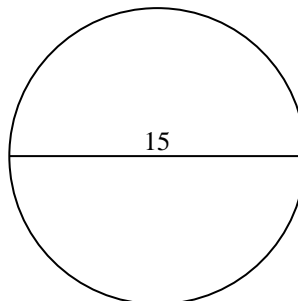
8)



9)



10)



Réponses

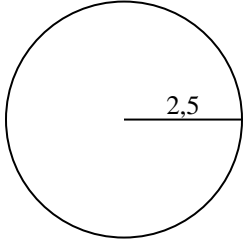
1.	<u>19,6</u>	<u>15,7</u>
2.	<u>490,9</u>	<u>78,5</u>
3.	<u>615,8</u>	<u>88</u>
4.	<u>132,7</u>	<u>40,8</u>
5.	<u>530,9</u>	<u>81,7</u>
6.	<u>706,9</u>	<u>94,2</u>
7.	<u>0,8</u>	<u>3,1</u>
8.	<u>660,5</u>	<u>91,1</u>
9.	<u>153,9</u>	<u>44</u>
10.	<u>176,7</u>	<u>47,1</u>



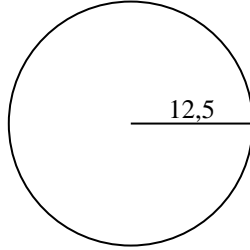
Calculez l'aire et la circonférence de chaque cercle. Les cercles ne sont pas à l'échelle.

490,9	78,5	15,7	88	530,9
0,8	153,9	44	660,5	3,1
615,8	81,7	94,2	91,1	19,6
706,9	132,7	40,8		

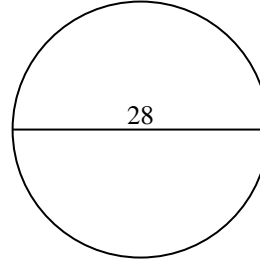
1)



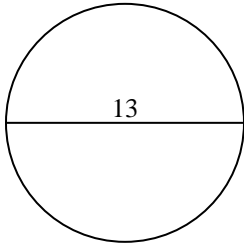
2)



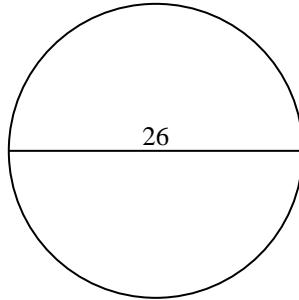
3)



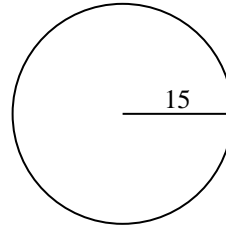
4)



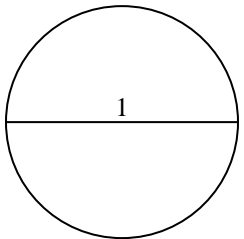
5)



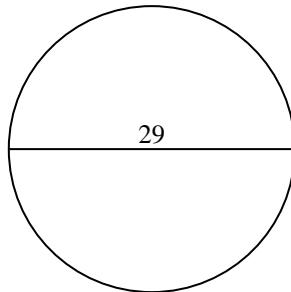
6)



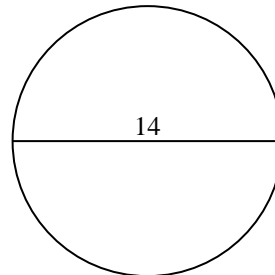
7)



8)



9)



Réponses

1. _____
2. _____
3. _____
4. _____
5. _____
6. _____
7. _____
8. _____
9. _____