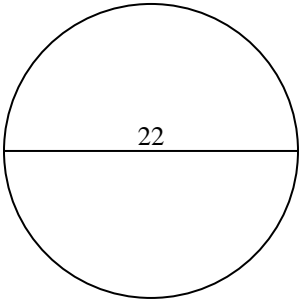


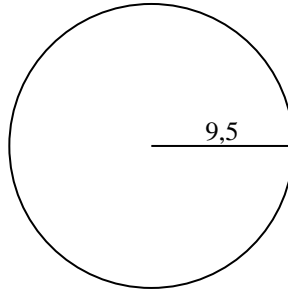


Calculez l'aire de chaque cercle. Les cercles ne sont pas à l'échelle.

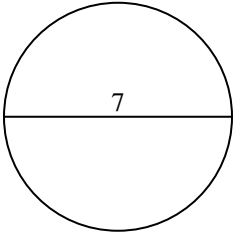
1)



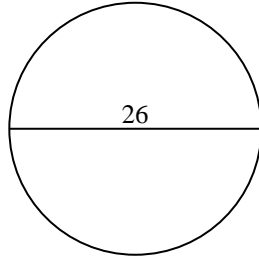
2)



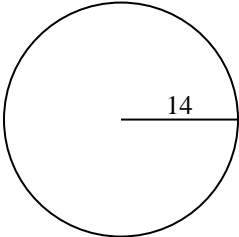
3)



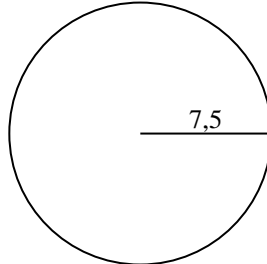
4)



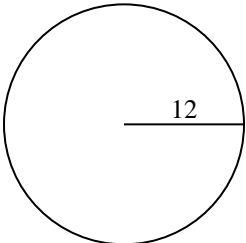
5)



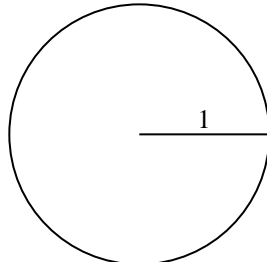
6)



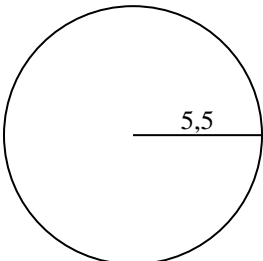
7)



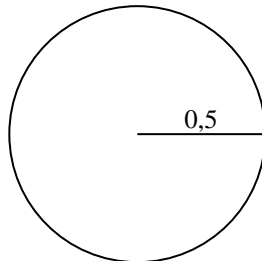
8)



9)



10)

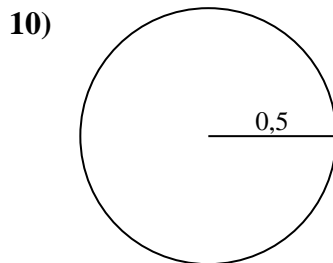
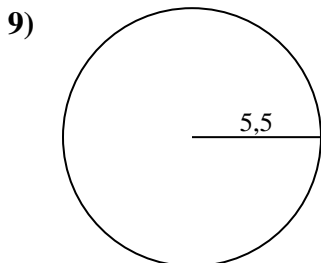
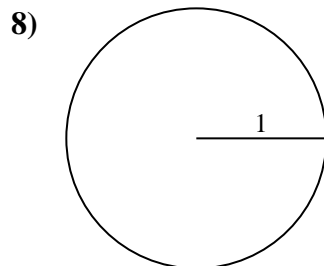
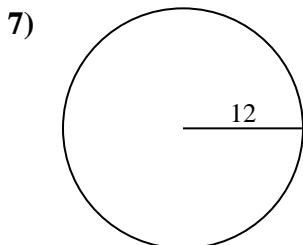
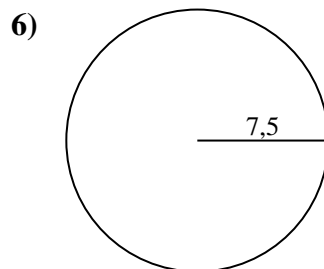
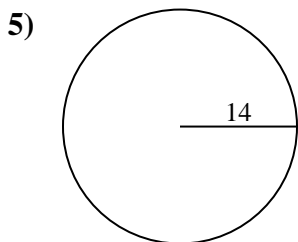
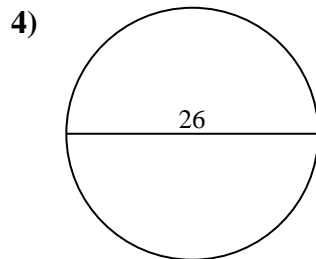
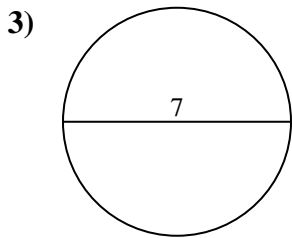
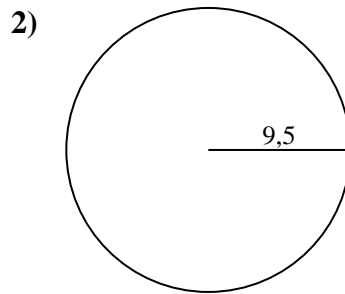
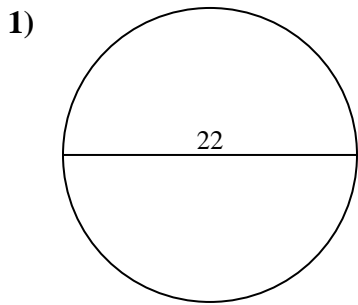


Réponses

- 1. _____
- 2. _____
- 3. _____
- 4. _____
- 5. _____
- 6. _____
- 7. _____
- 8. _____
- 9. _____
- 10. _____



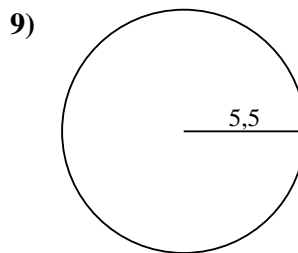
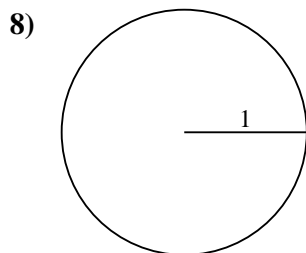
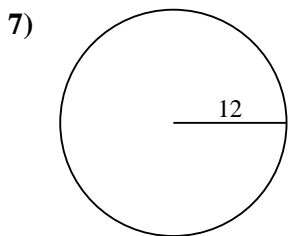
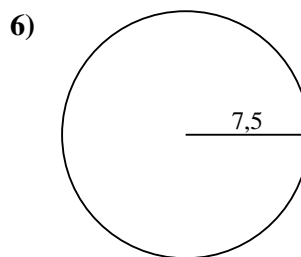
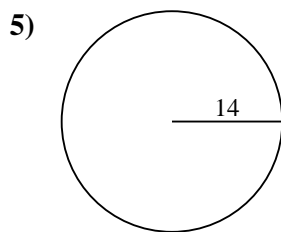
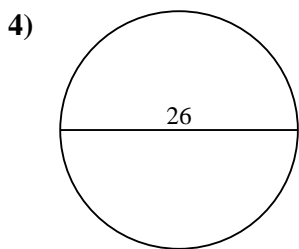
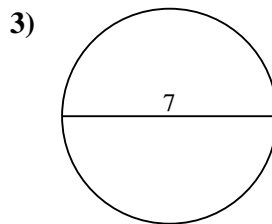
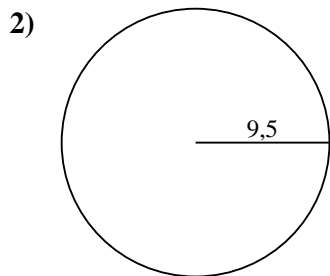
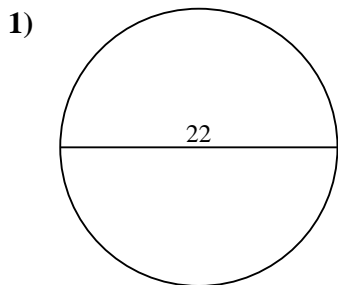
Calculez l'aire de chaque cercle. Les cercles ne sont pas à l'échelle.

**Réponses**1. 380,12. 283,53. 38,54. 530,95. 615,86. 176,77. 452,48. 3,19. 9510. 0,8



Calculez l'aire de chaque cercle. Les cercles ne sont pas à l'échelle.

176,7	38,5	530,9	283,5	95
615,8	3,1	452,4	380,1	



Réponses

- 1. _____
- 2. _____
- 3. _____
- 4. _____
- 5. _____
- 6. _____
- 7. _____
- 8. _____
- 9. _____