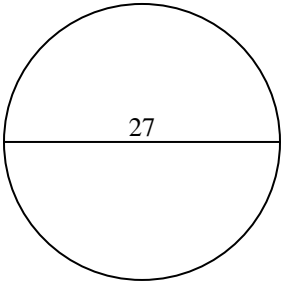


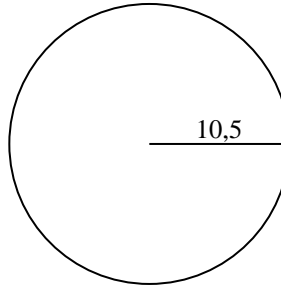


Calculez l'aire de chaque cercle. Les cercles ne sont pas à l'échelle.

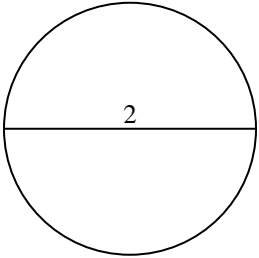
1)



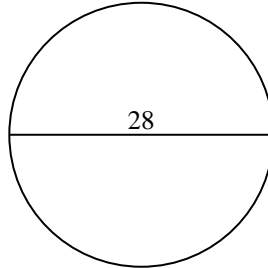
2)



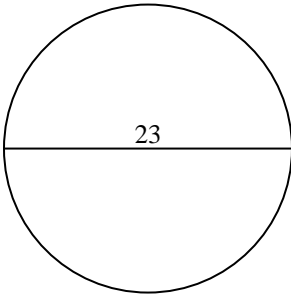
3)



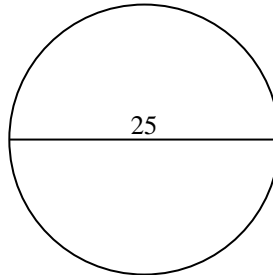
4)



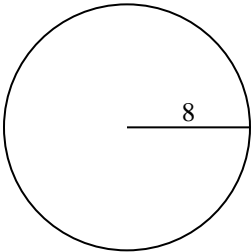
5)



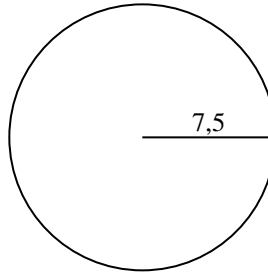
6)



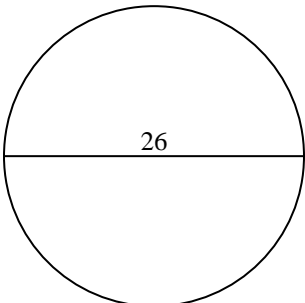
7)



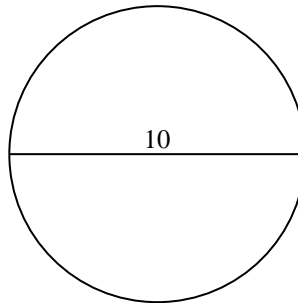
8)



9)



10)



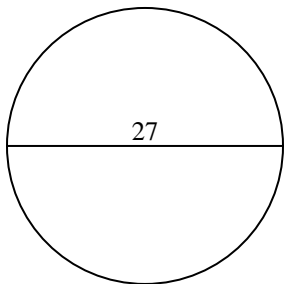
Réponses

- 1. _____
- 2. _____
- 3. _____
- 4. _____
- 5. _____
- 6. _____
- 7. _____
- 8. _____
- 9. _____
- 10. _____

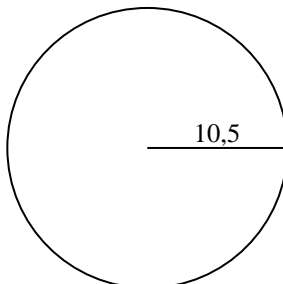


Calculez l'aire de chaque cercle. Les cercles ne sont pas à l'échelle.

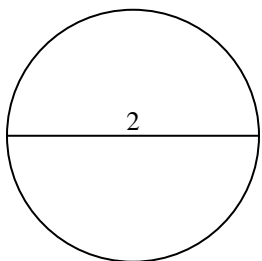
1)



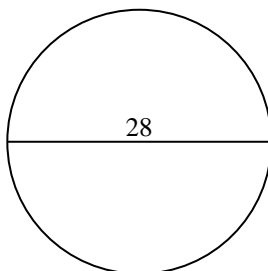
2)



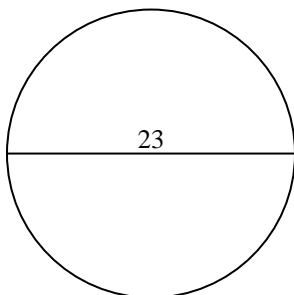
3)



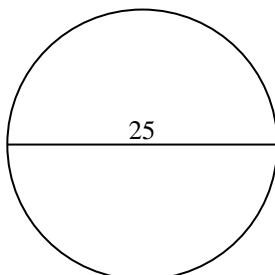
4)



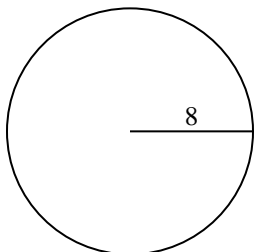
5)



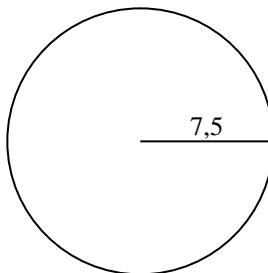
6)



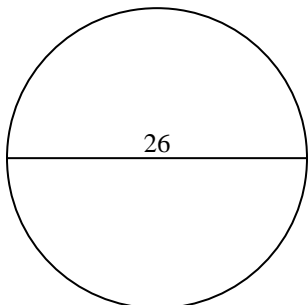
7)



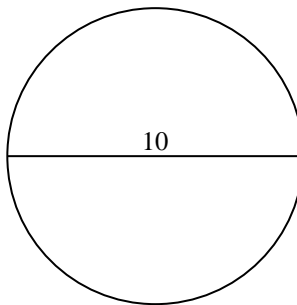
8)



9)



10)

**Réponses**1. 572,62. 346,43. 3,14. 615,85. 415,56. 490,97. 201,18. 176,79. 530,910. 78,5



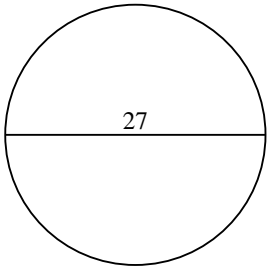
Calculez l'aire de chaque cercle. Les cercles ne sont pas à l'échelle.

530,9	3,1	615,8	201,1	490,9
572,6	415,5	176,7	346,4	

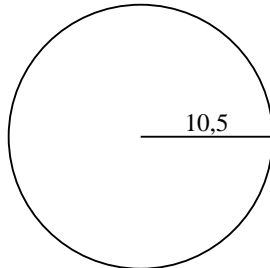
Réponses

- 1. _____
- 2. _____
- 3. _____
- 4. _____
- 5. _____
- 6. _____
- 7. _____
- 8. _____
- 9. _____

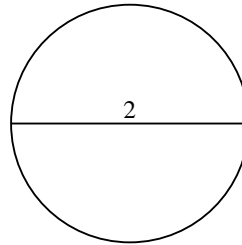
1)



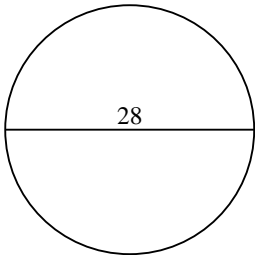
2)



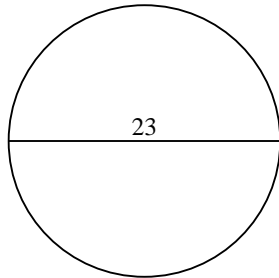
3)



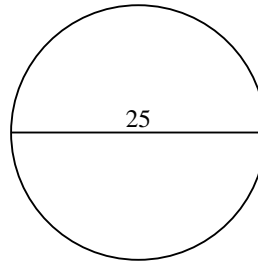
4)



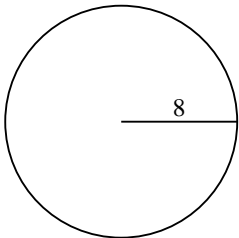
5)



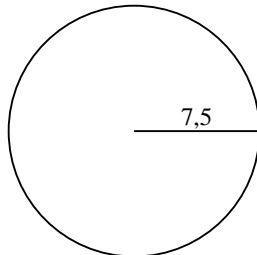
6)



7)



8)



9)

