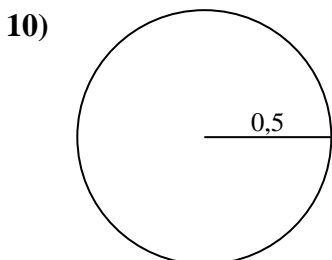
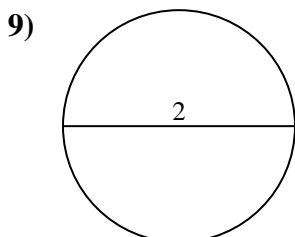
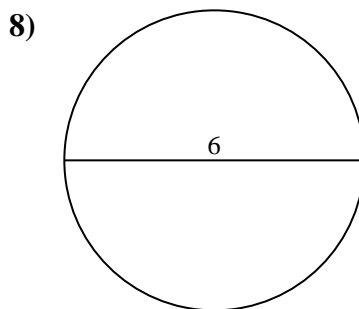
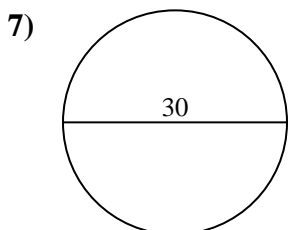
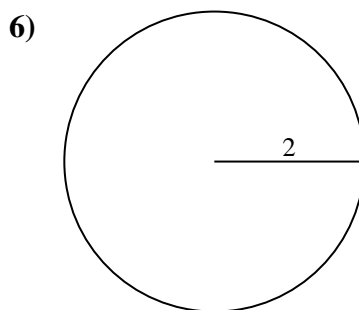
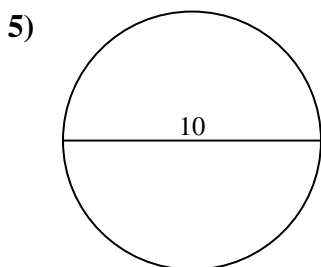
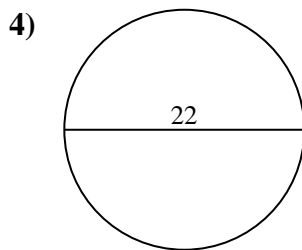
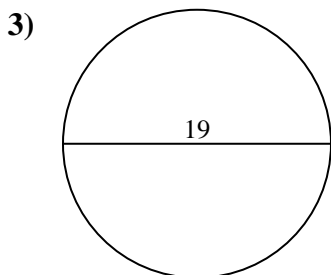
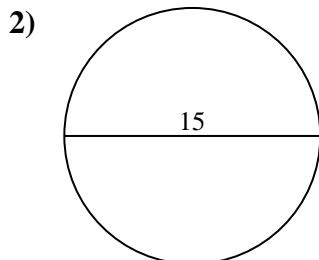
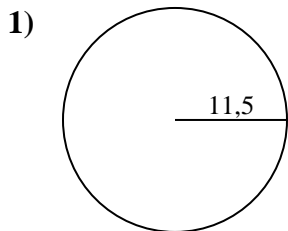




Calculez l'aire de chaque cercle. Les cercles ne sont pas à l'échelle.

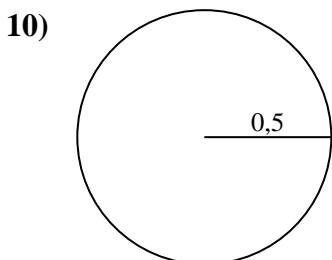
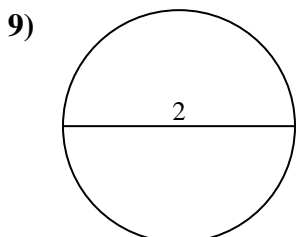
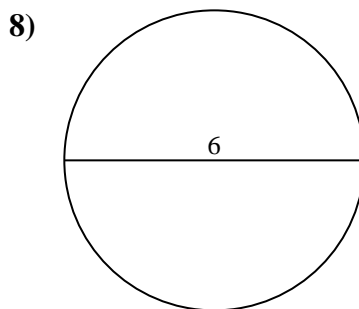
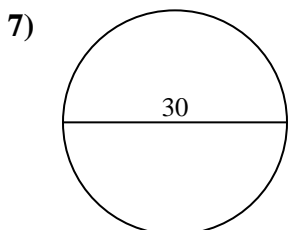
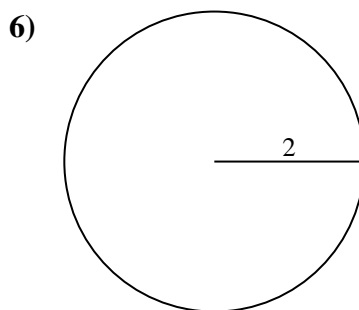
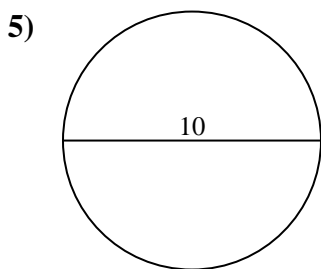
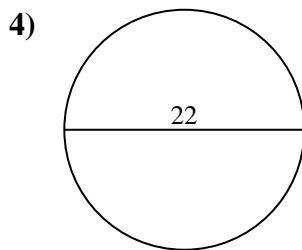
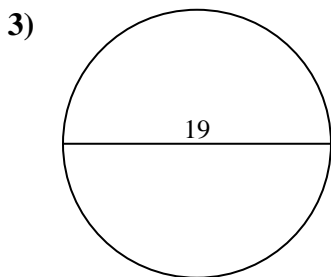
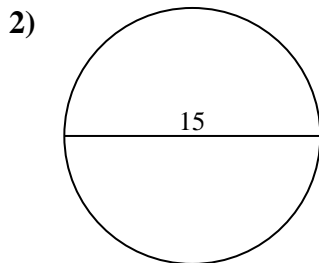
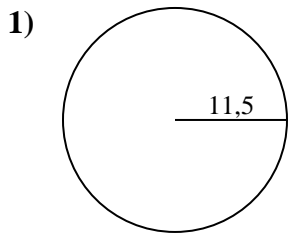


**Réponses**

- 1. \_\_\_\_\_
- 2. \_\_\_\_\_
- 3. \_\_\_\_\_
- 4. \_\_\_\_\_
- 5. \_\_\_\_\_
- 6. \_\_\_\_\_
- 7. \_\_\_\_\_
- 8. \_\_\_\_\_
- 9. \_\_\_\_\_
- 10. \_\_\_\_\_



Calculez l'aire de chaque cercle. Les cercles ne sont pas à l'échelle.

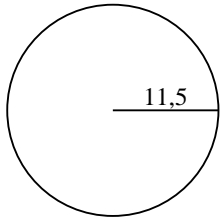
**Réponses**1. 415,52. 176,73. 283,54. 380,15. 78,56. 12,67. 706,98. 28,39. 3,110. 0,8



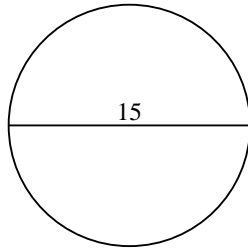
Calculez l'aire de chaque cercle. Les cercles ne sont pas à l'échelle.

283,5	176,7	415,5	3,1	78,5
380,1	706,9	28,3	12,6	

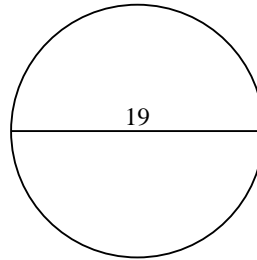
1)



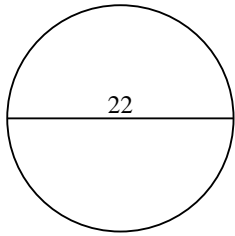
2)



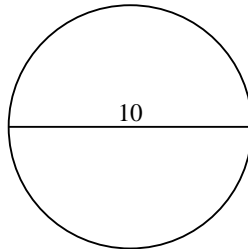
3)



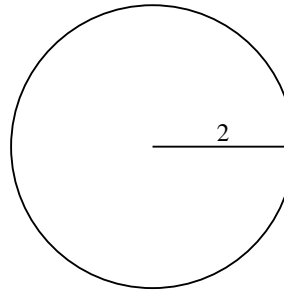
4)



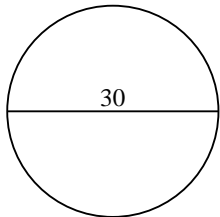
5)



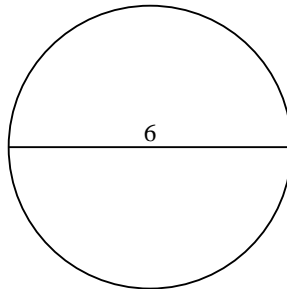
6)



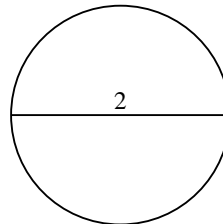
7)



8)



9)



**Réponses**

- 1. \_\_\_\_\_
- 2. \_\_\_\_\_
- 3. \_\_\_\_\_
- 4. \_\_\_\_\_
- 5. \_\_\_\_\_
- 6. \_\_\_\_\_
- 7. \_\_\_\_\_
- 8. \_\_\_\_\_
- 9. \_\_\_\_\_