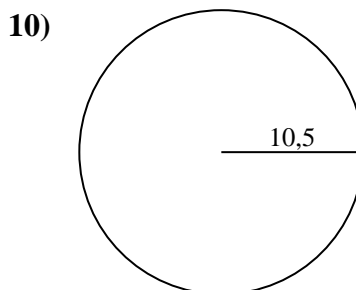
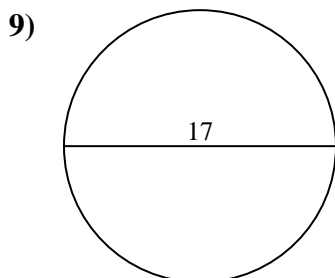
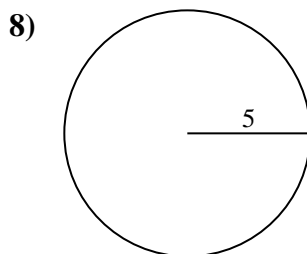
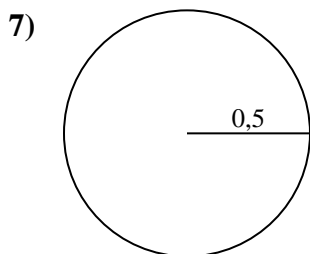
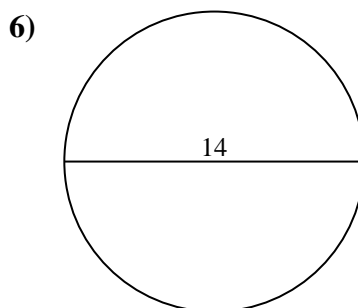
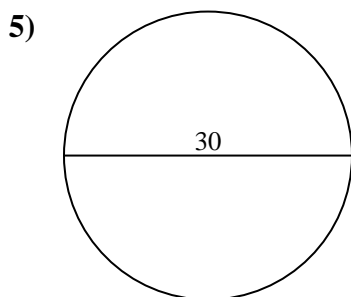
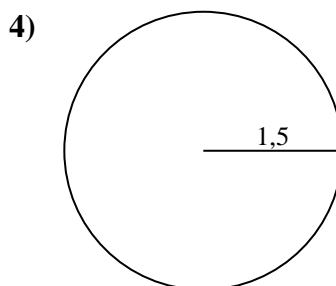
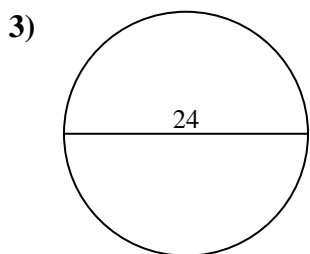
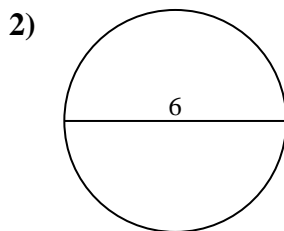
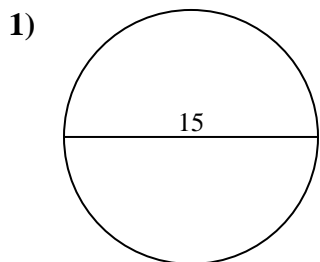




Calculez l'aire de chaque cercle. Les cercles ne sont pas à l'échelle.



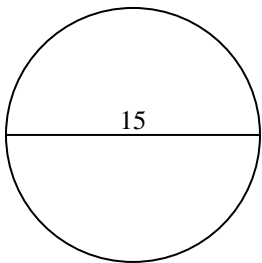
Réponses

- 1. _____
- 2. _____
- 3. _____
- 4. _____
- 5. _____
- 6. _____
- 7. _____
- 8. _____
- 9. _____
- 10. _____

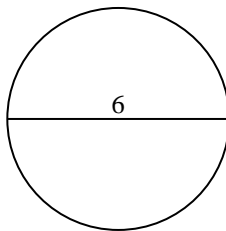


Calculez l'aire de chaque cercle. Les cercles ne sont pas à l'échelle.

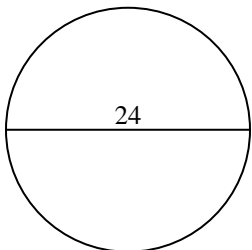
1)



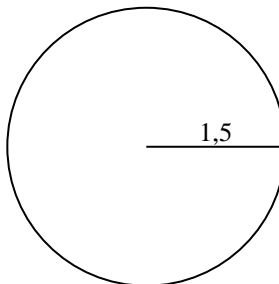
2)



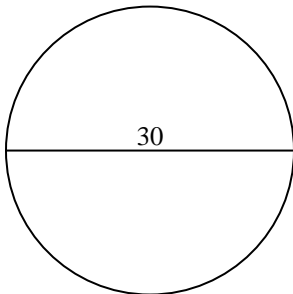
3)



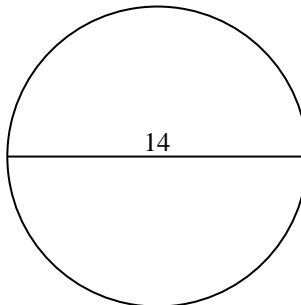
4)



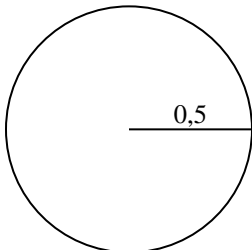
5)



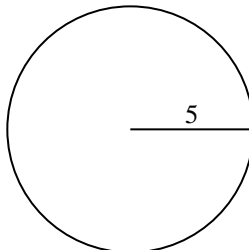
6)



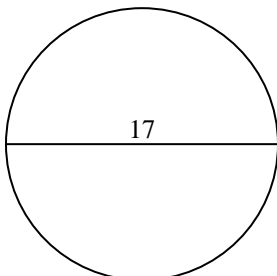
7)



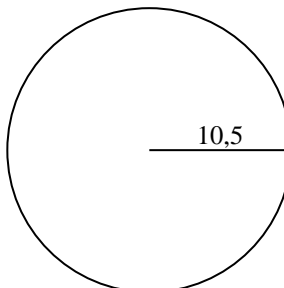
8)



9)



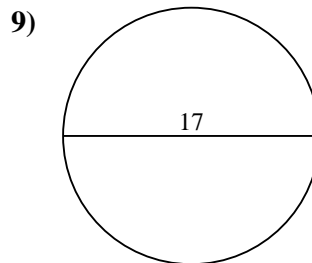
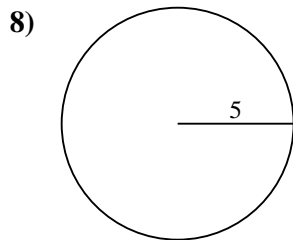
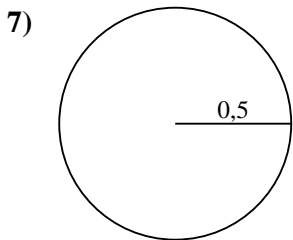
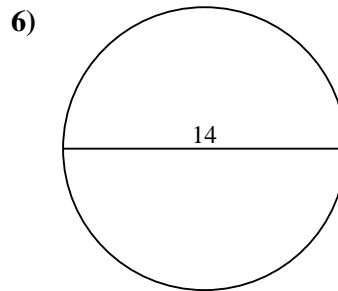
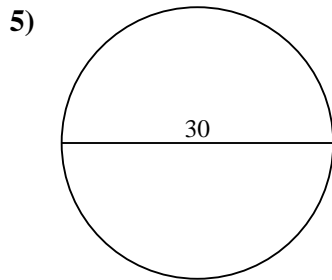
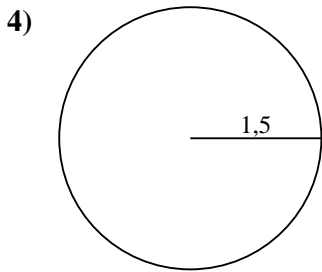
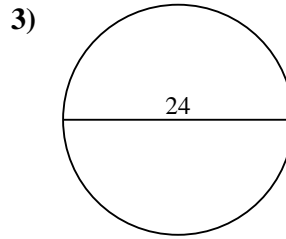
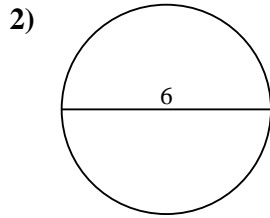
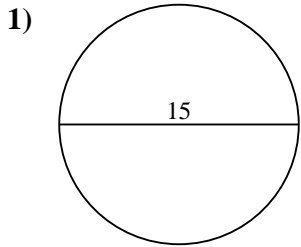
10)

**Réponses**1. 176,72. 28,33. 452,44. 7,15. 706,96. 153,97. 0,88. 78,59. 22710. 346,4



Calculez l'aire de chaque cercle. Les cercles ne sont pas à l'échelle.

452,4	0,8	153,9	7,1	227
28,3	78,5	706,9	176,7	



Réponses

- 1. _____
- 2. _____
- 3. _____
- 4. _____
- 5. _____
- 6. _____
- 7. _____
- 8. _____
- 9. _____