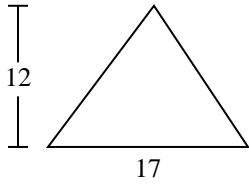


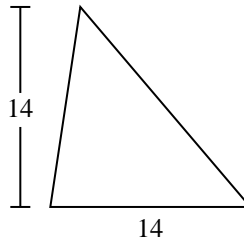


Calculez l'aire de chaque triangle. Les triangles ne sont pas à l'échelle.

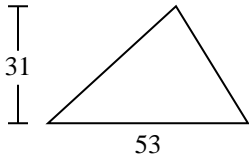
1)



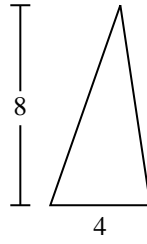
2)



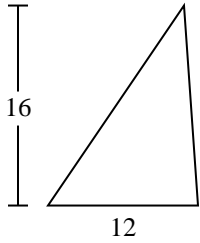
3)



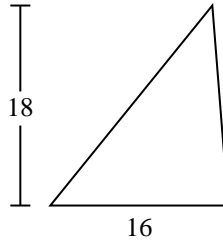
4)



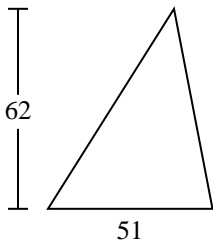
5)



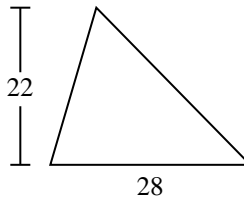
6)



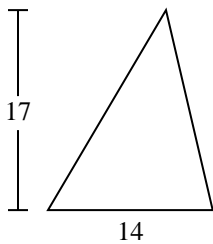
7)



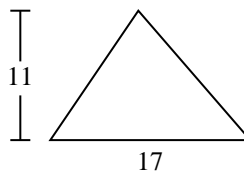
8)



9)



10)



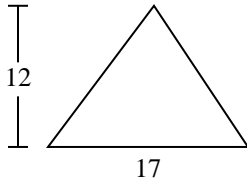
Réponses

- 1. _____
- 2. _____
- 3. _____
- 4. _____
- 5. _____
- 6. _____
- 7. _____
- 8. _____
- 9. _____
- 10. _____

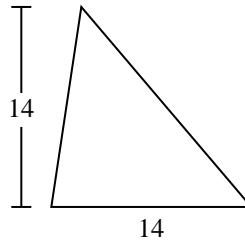


Calculez l'aire de chaque triangle. Les triangles ne sont pas à l'échelle.

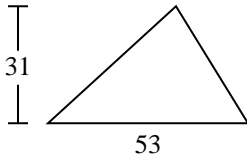
1)



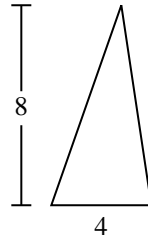
2)



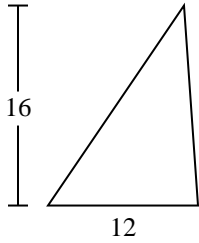
3)



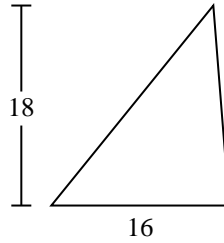
4)



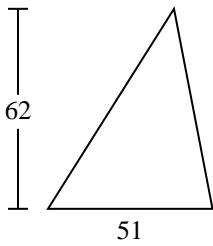
5)



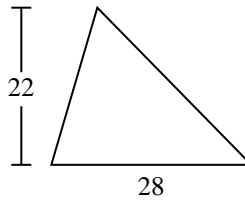
6)



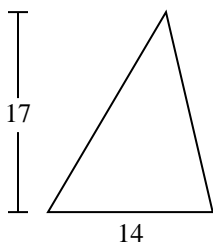
7)



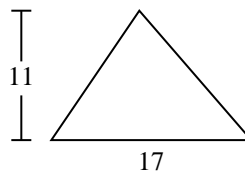
8)



9)



10)

**Réponses**1. 1022. 983. 821,54. 165. 966. 1447. 1 5818. 3089. 11910. 93,5



Calculez l'aire de chaque triangle. Les triangles ne sont pas à l'échelle.

102

1 581

308

144

16

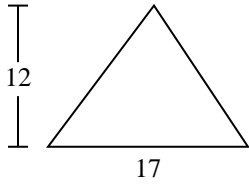
119

821,5

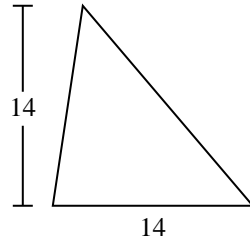
98

96

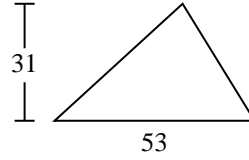
1)



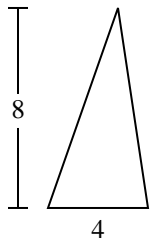
2)



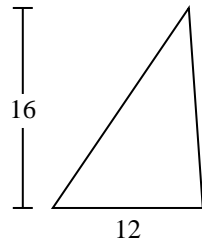
3)



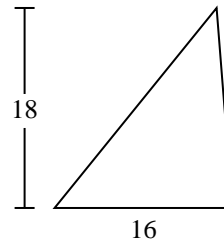
4)



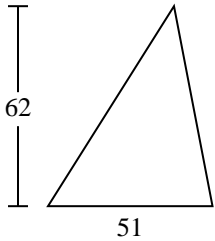
5)



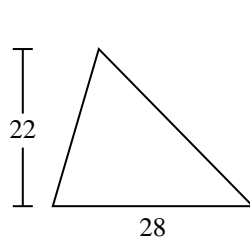
6)



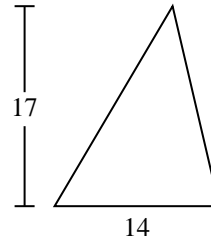
7)



8)



9)



Réponses

1. _____
2. _____
3. _____
4. _____
5. _____
6. _____
7. _____
8. _____
9. _____