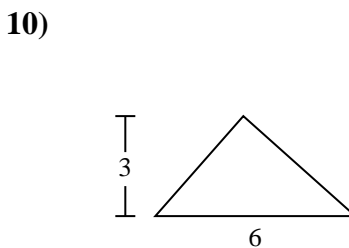
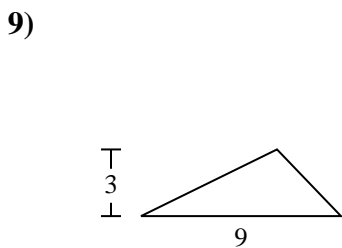
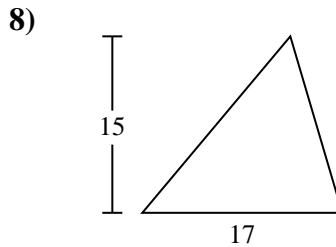
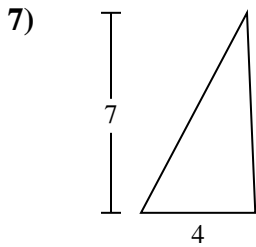
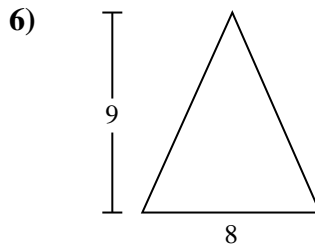
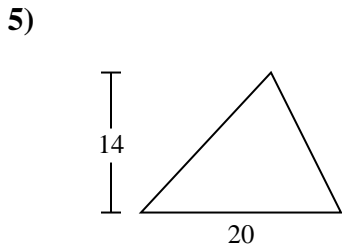
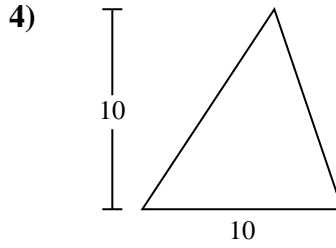
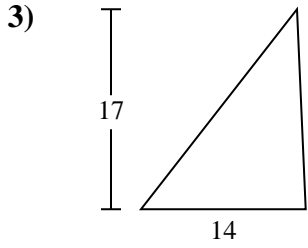
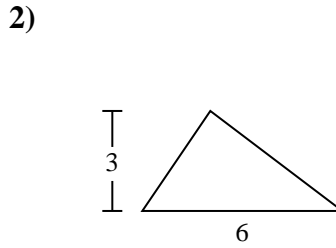
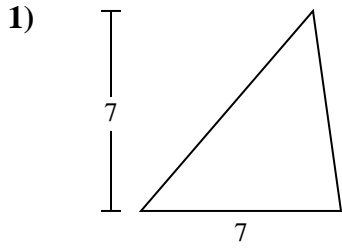




Calculez l'aire de chaque triangle. Les triangles ne sont pas à l'échelle.

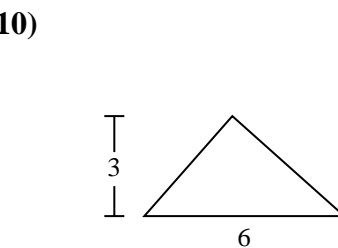
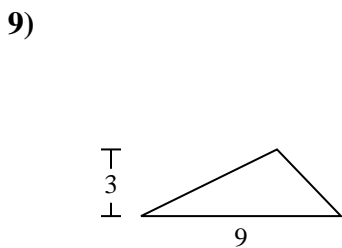
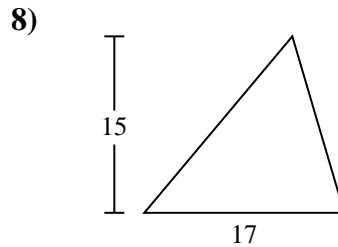
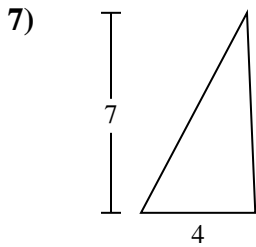
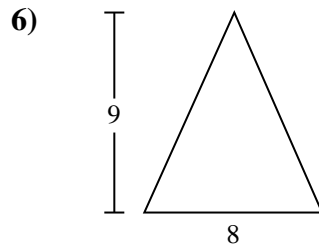
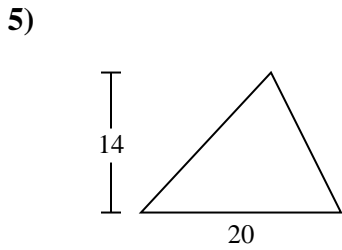
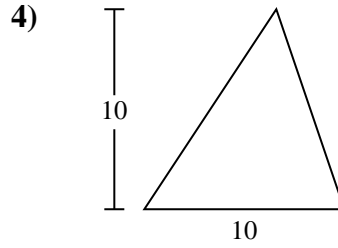
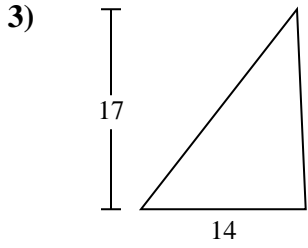
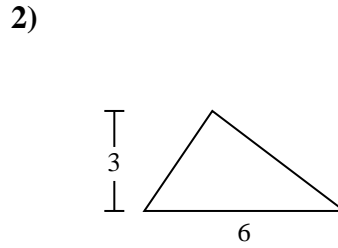
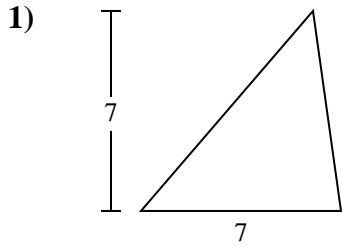


**Réponses**

- 1. \_\_\_\_\_
- 2. \_\_\_\_\_
- 3. \_\_\_\_\_
- 4. \_\_\_\_\_
- 5. \_\_\_\_\_
- 6. \_\_\_\_\_
- 7. \_\_\_\_\_
- 8. \_\_\_\_\_
- 9. \_\_\_\_\_
- 10. \_\_\_\_\_



Calculez l'aire de chaque triangle. Les triangles ne sont pas à l'échelle.

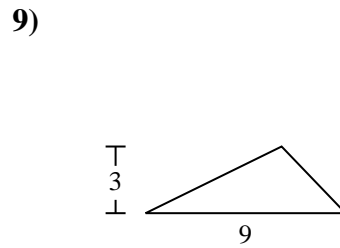
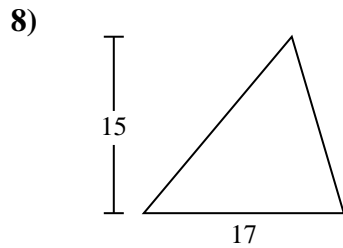
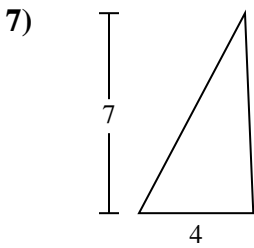
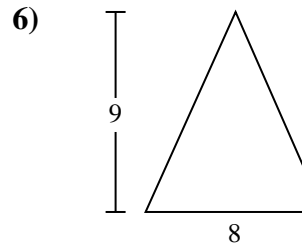
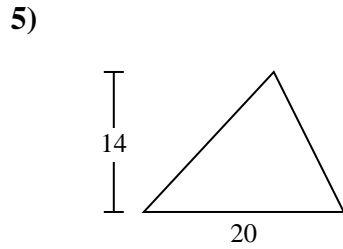
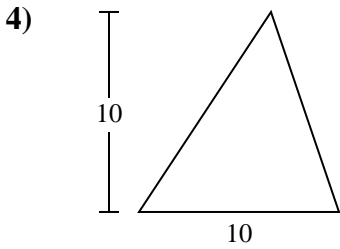
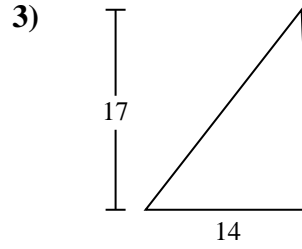
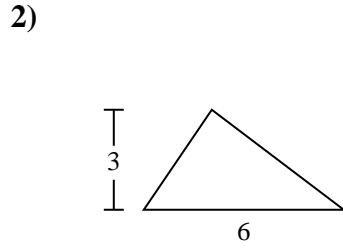
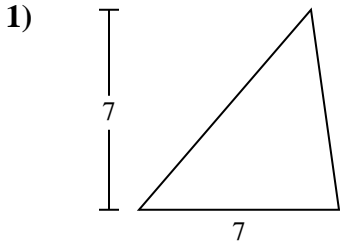
**Réponses**

1. 24,5
2. 9
3. 119
4. 50
5. 140
6. 36
7. 14
8. 127,5
9. 13,5
10. 9



Calculez l'aire de chaque triangle. Les triangles ne sont pas à l'échelle.

127,5	13,5	119	140	14
24,5	9	36	50	



**Réponses**

1. \_\_\_\_\_
2. \_\_\_\_\_
3. \_\_\_\_\_
4. \_\_\_\_\_
5. \_\_\_\_\_
6. \_\_\_\_\_
7. \_\_\_\_\_
8. \_\_\_\_\_
9. \_\_\_\_\_