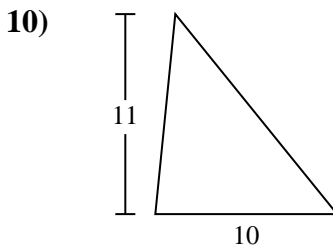
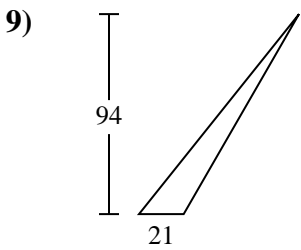
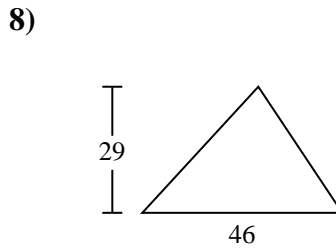
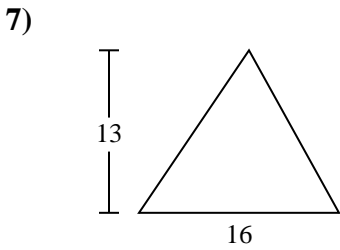
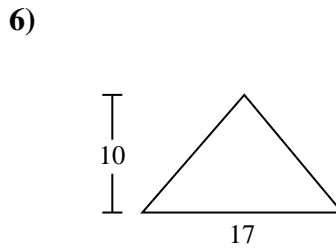
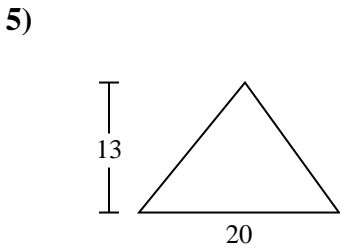
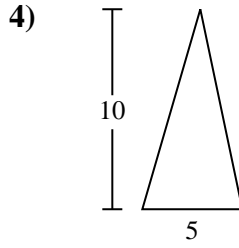
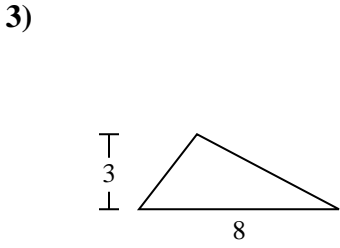
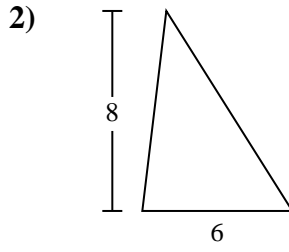
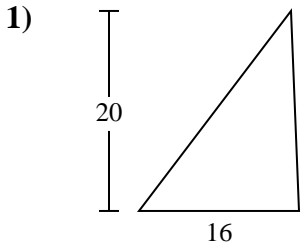




Calculez l'aire de chaque triangle. Les triangles ne sont pas à l'échelle.

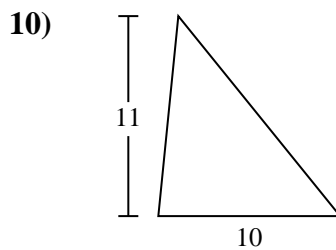
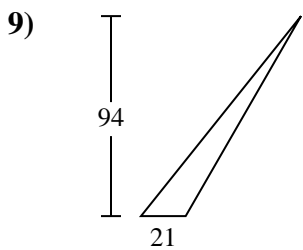
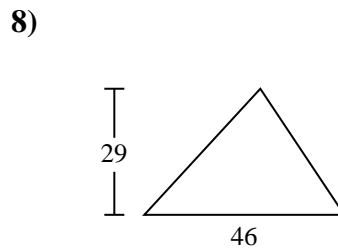
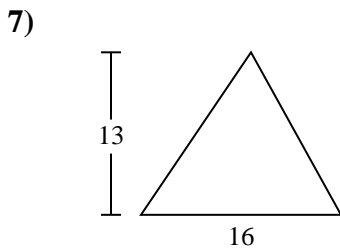
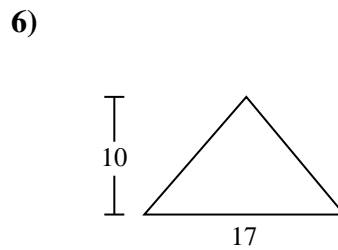
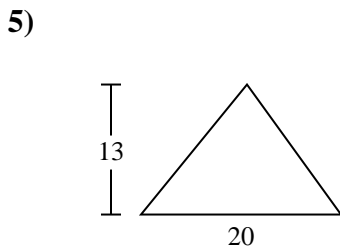
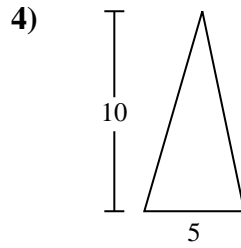
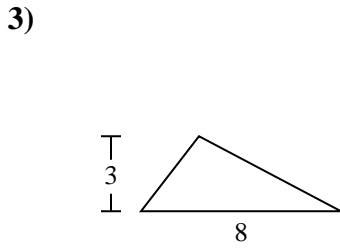
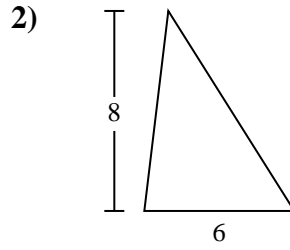
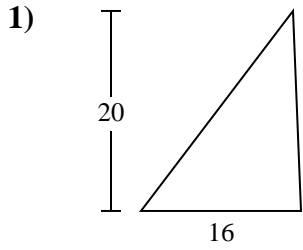


**Réponses**

- 1. \_\_\_\_\_
- 2. \_\_\_\_\_
- 3. \_\_\_\_\_
- 4. \_\_\_\_\_
- 5. \_\_\_\_\_
- 6. \_\_\_\_\_
- 7. \_\_\_\_\_
- 8. \_\_\_\_\_
- 9. \_\_\_\_\_
- 10. \_\_\_\_\_



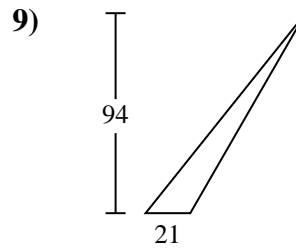
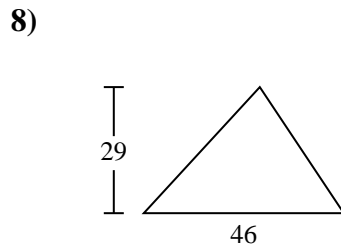
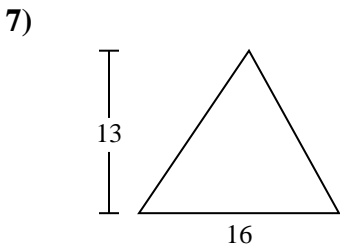
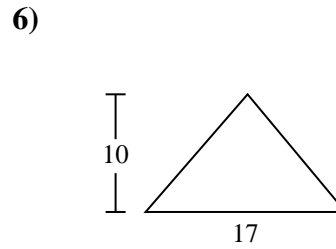
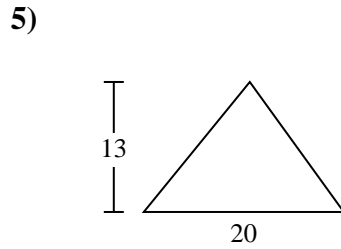
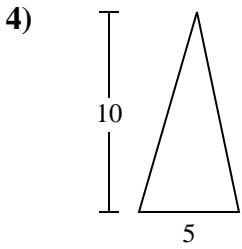
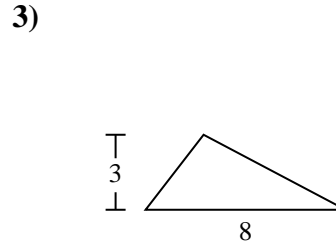
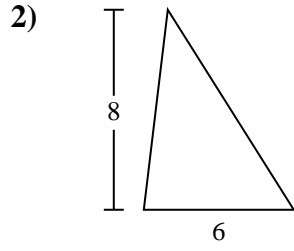
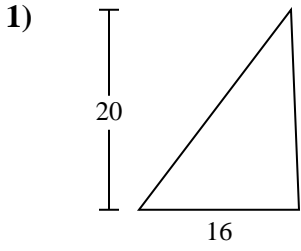
Calculez l'aire de chaque triangle. Les triangles ne sont pas à l'échelle.

**Réponses**1. **160**2. **24**3. **12**4. **25**5. **130**6. **85**7. **104**8. **667**9. **987**10. **55**



Calculez l'aire de chaque triangle. Les triangles ne sont pas à l'échelle.

25	160	85	24	667
987	104	12	130	



**Réponses**

1. \_\_\_\_\_
2. \_\_\_\_\_
3. \_\_\_\_\_
4. \_\_\_\_\_
5. \_\_\_\_\_
6. \_\_\_\_\_
7. \_\_\_\_\_
8. \_\_\_\_\_
9. \_\_\_\_\_