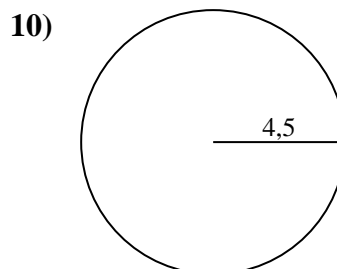
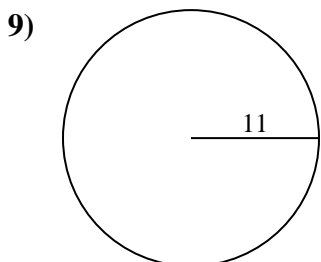
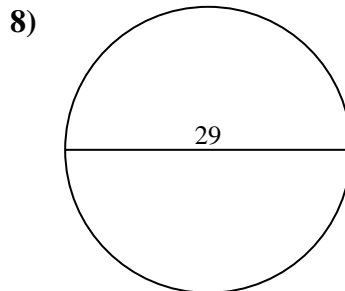
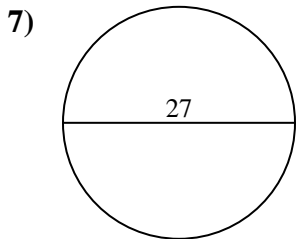
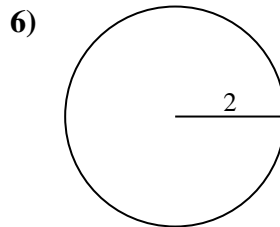
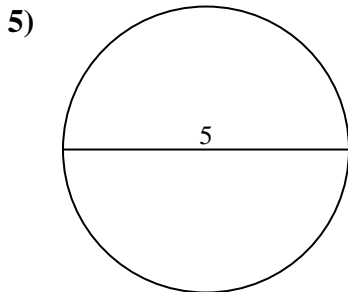
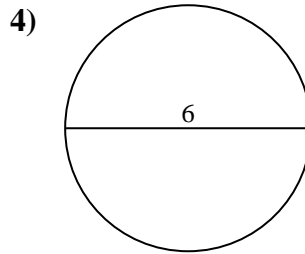
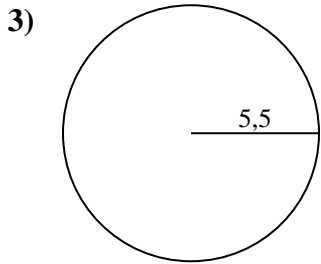
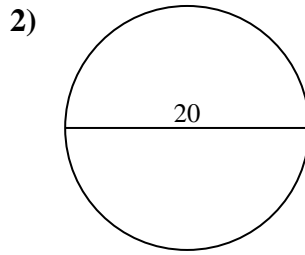
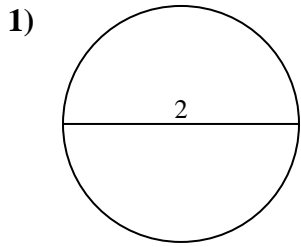




Calculez la circonférence de chaque cercle. Les cercles ne sont pas à l'échelle.

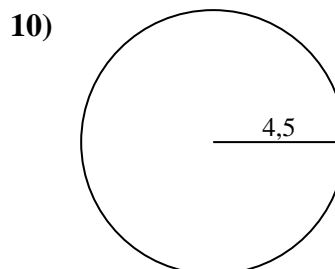
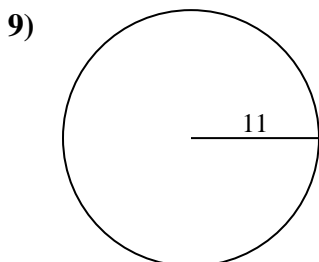
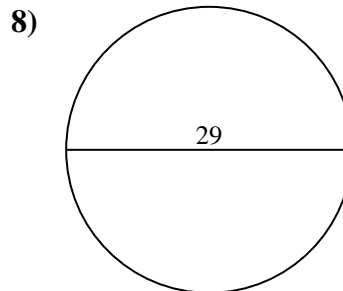
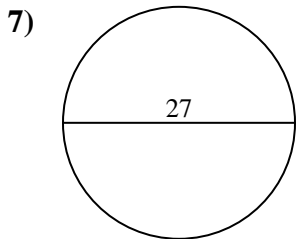
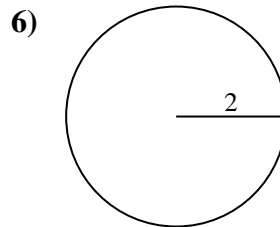
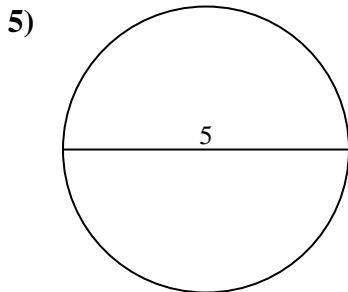
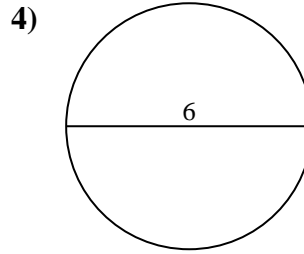
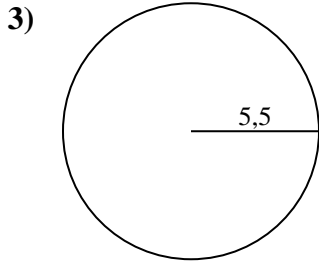
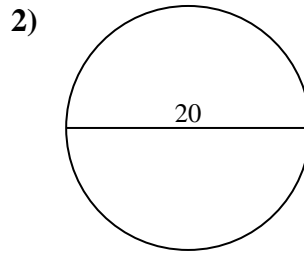
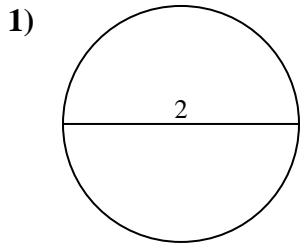


Réponses

- 1. _____
- 2. _____
- 3. _____
- 4. _____
- 5. _____
- 6. _____
- 7. _____
- 8. _____
- 9. _____
- 10. _____



Calculez la circonférence de chaque cercle. Les cercles ne sont pas à l'échelle.

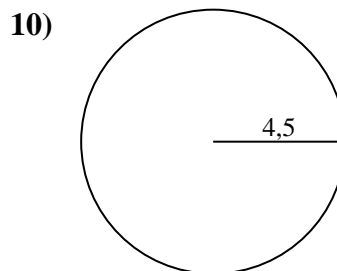
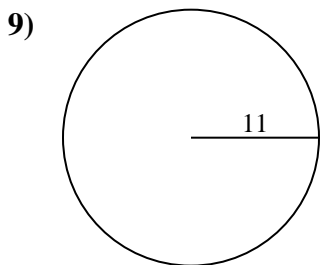
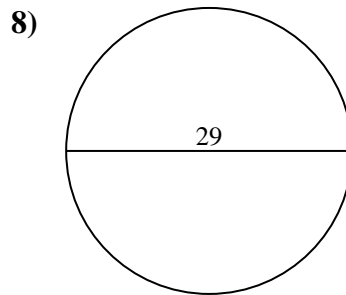
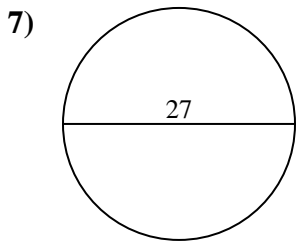
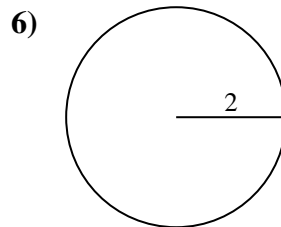
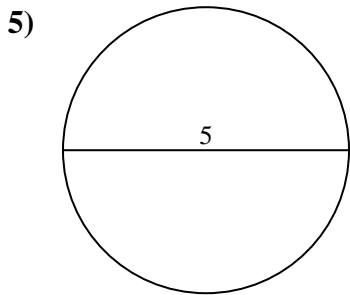
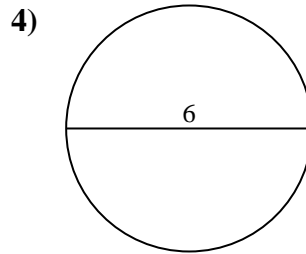
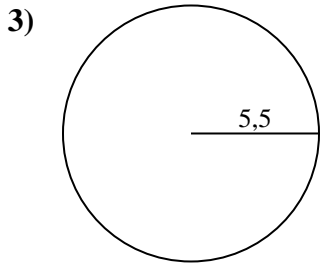
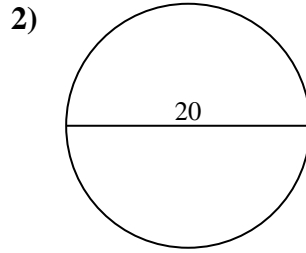
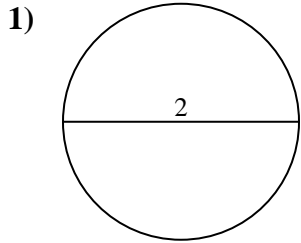
**Réponses**1. 6,28 cm2. 62,83 cm3. 34,56 cm4. 18,85 cm5. 15,71 cm6. 12,57 cm7. 84,82 cm8. 91,11 cm9. 69,12 cm10. 28,27 cm



Calculez la circonférence de chaque cercle. Les cercles ne sont pas à l'échelle.

Réponses

12,57 cm	34,56 cm	18,85 cm	28,27 cm	91,11 cm
84,82 cm	6,28 cm	69,12 cm	15,71 cm	62,83 cm



- 1. _____
- 2. _____
- 3. _____
- 4. _____
- 5. _____
- 6. _____
- 7. _____
- 8. _____
- 9. _____
- 10. _____