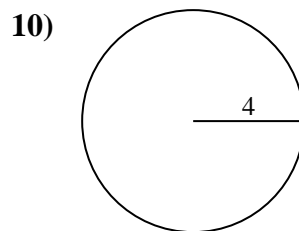
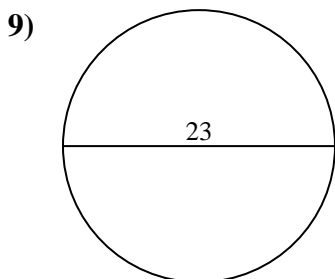
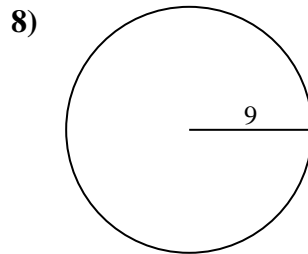
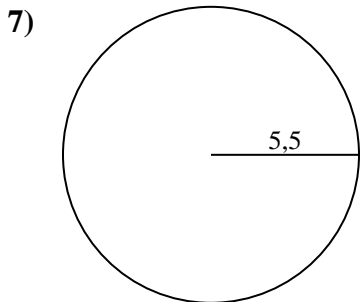
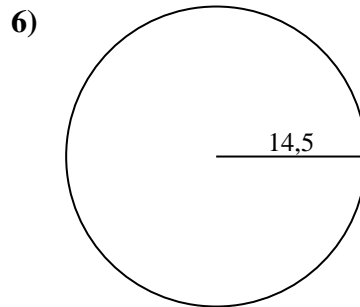
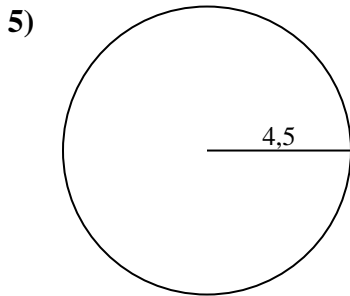
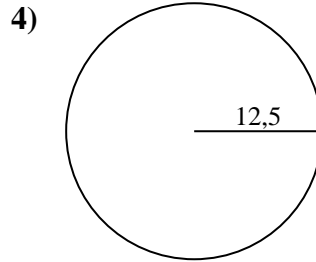
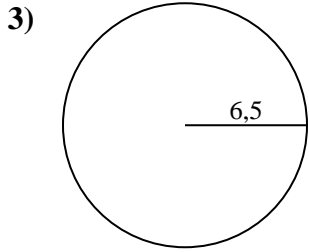
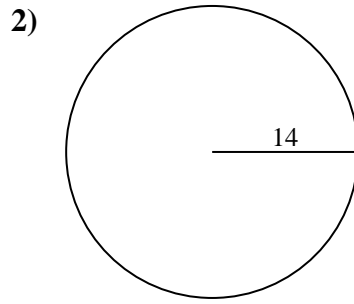
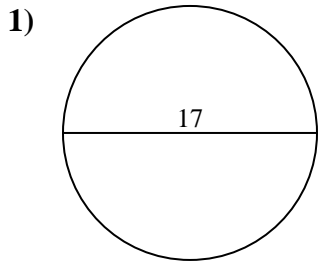




Calculez la circonférence de chaque cercle. Les cercles ne sont pas à l'échelle.



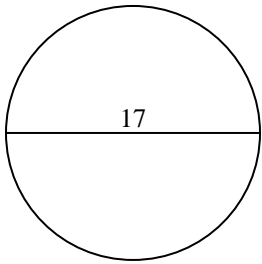
**Réponses**

- 1. \_\_\_\_\_
- 2. \_\_\_\_\_
- 3. \_\_\_\_\_
- 4. \_\_\_\_\_
- 5. \_\_\_\_\_
- 6. \_\_\_\_\_
- 7. \_\_\_\_\_
- 8. \_\_\_\_\_
- 9. \_\_\_\_\_
- 10. \_\_\_\_\_

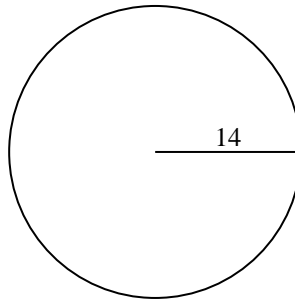


Calculez la circonférence de chaque cercle. Les cercles ne sont pas à l'échelle.

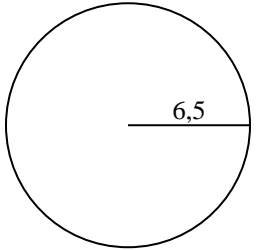
1)



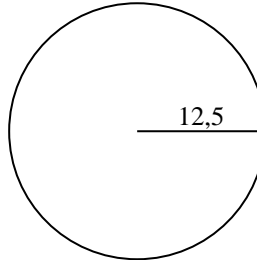
2)



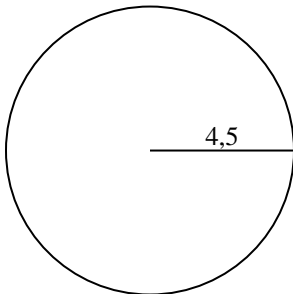
3)



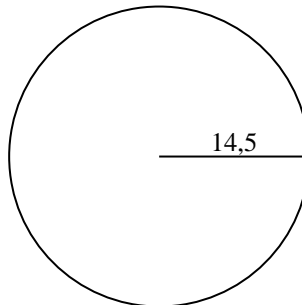
4)



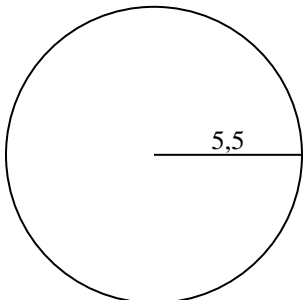
5)



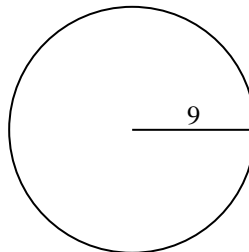
6)



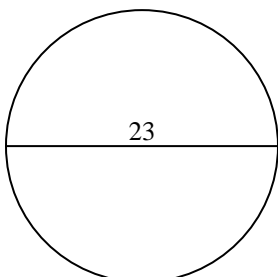
7)



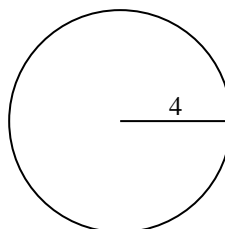
8)



9)



10)

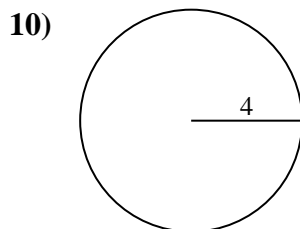
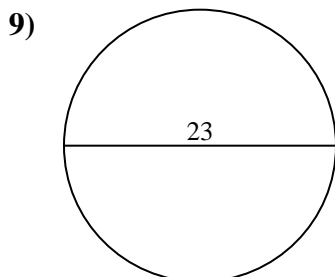
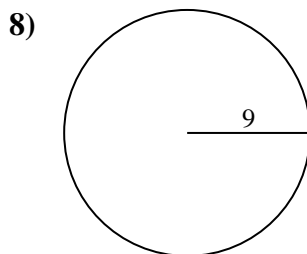
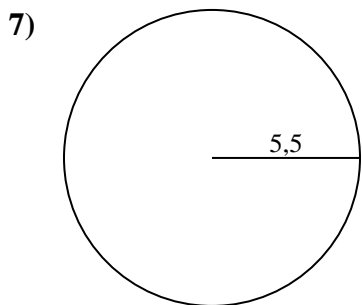
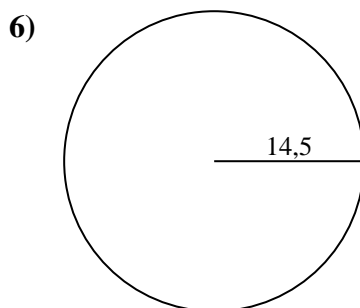
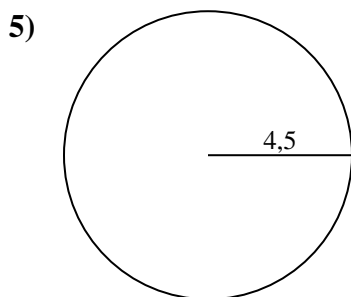
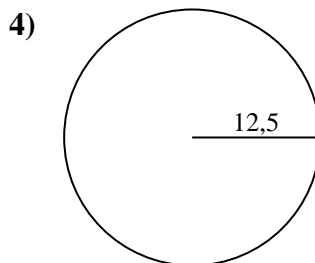
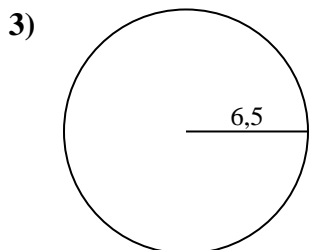
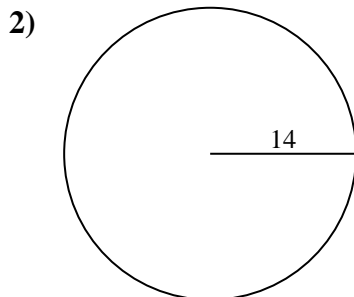
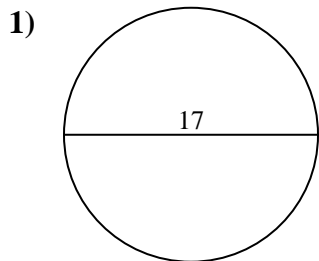
**Réponses**1. **53,41 cm**2. **87,96 cm**3. **40,84 cm**4. **78,54 cm**5. **28,27 cm**6. **91,11 cm**7. **34,56 cm**8. **56,55 cm**9. **72,26 cm**10. **25,13 cm**



Calculez la circonférence de chaque cercle. Les cercles ne sont pas à l'échelle.

72,26 cm	40,84 cm	34,56 cm	53,41 cm	25,13 cm
28,27 cm	87,96 cm	78,54 cm	91,11 cm	56,55 cm

**Réponses**



- 1. \_\_\_\_\_
- 2. \_\_\_\_\_
- 3. \_\_\_\_\_
- 4. \_\_\_\_\_
- 5. \_\_\_\_\_
- 6. \_\_\_\_\_
- 7. \_\_\_\_\_
- 8. \_\_\_\_\_
- 9. \_\_\_\_\_
- 10. \_\_\_\_\_