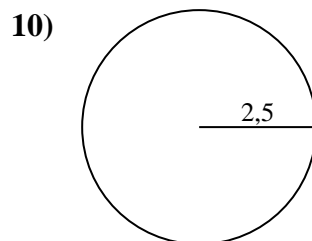
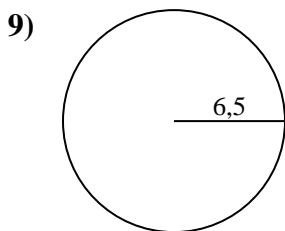
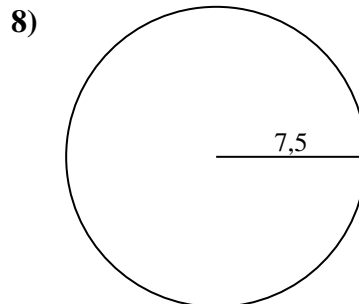
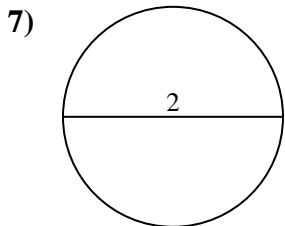
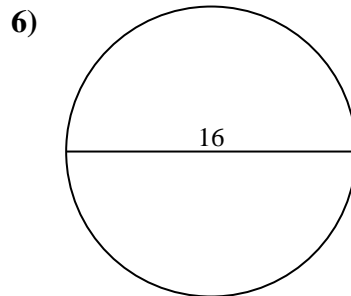
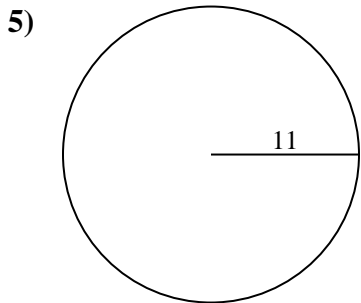
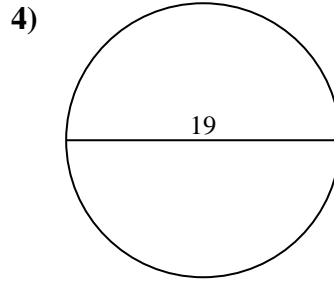
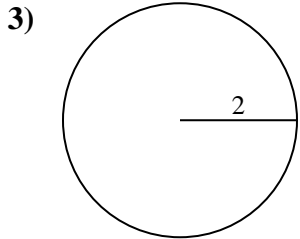
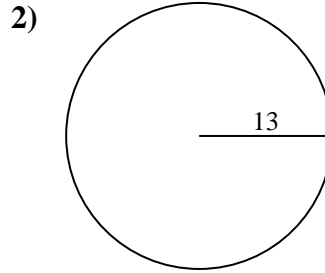
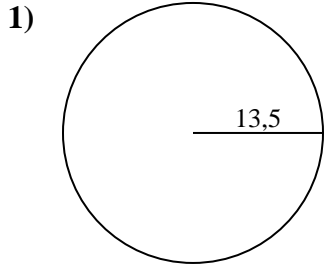




Calculez la circonférence de chaque cercle. Les cercles ne sont pas à l'échelle.

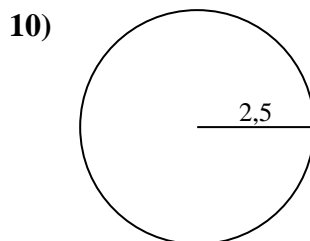
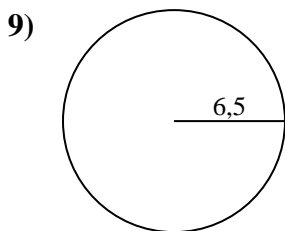
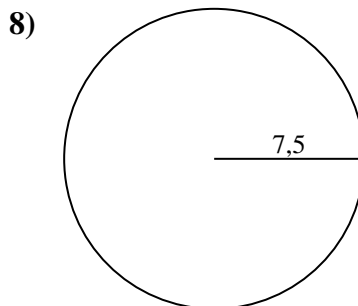
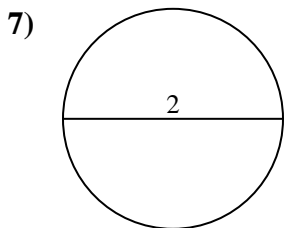
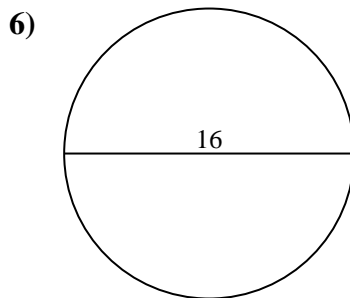
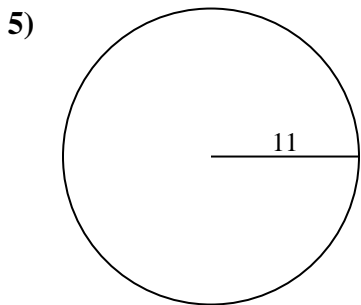
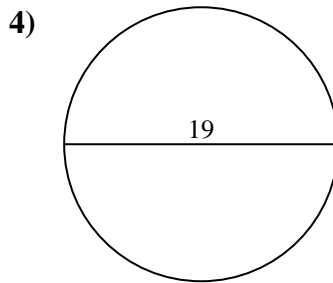
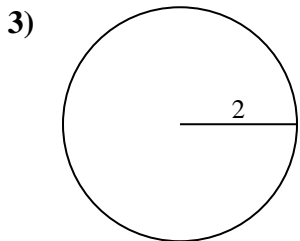
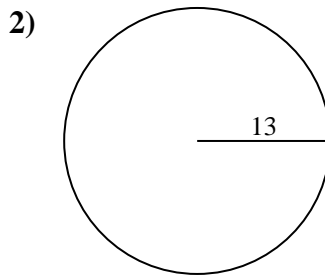
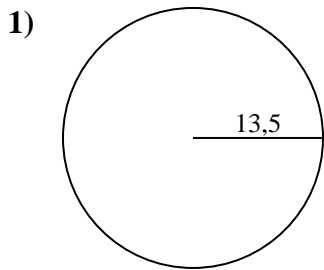


Réponses

- 1. _____
- 2. _____
- 3. _____
- 4. _____
- 5. _____
- 6. _____
- 7. _____
- 8. _____
- 9. _____
- 10. _____



Calculez la circonférence de chaque cercle. Les cercles ne sont pas à l'échelle.

**Réponses**

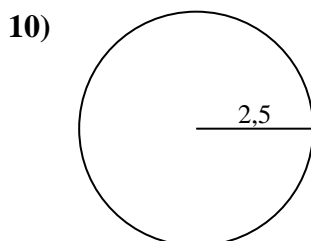
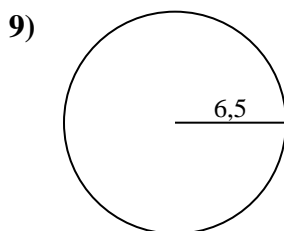
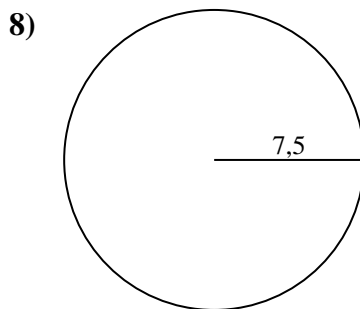
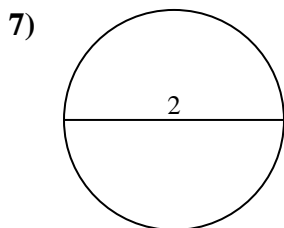
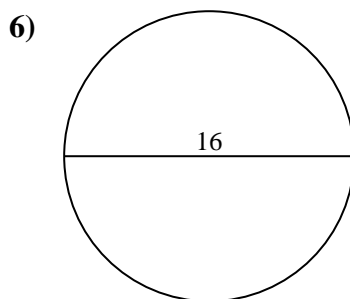
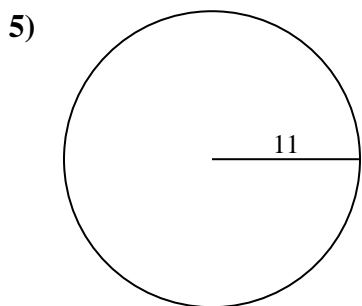
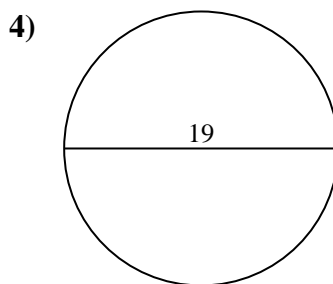
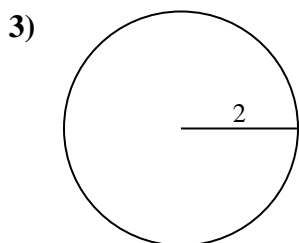
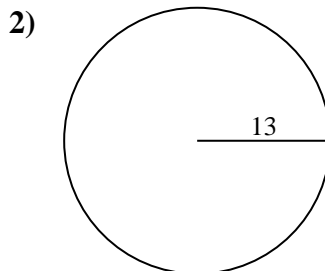
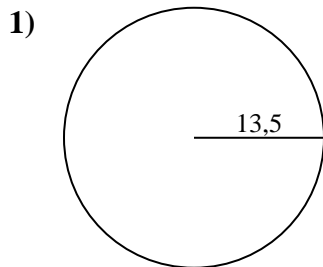
1. 84,82 cm
2. 81,68 cm
3. 12,57 cm
4. 59,69 cm
5. 69,12 cm
6. 50,27 cm
7. 6,28 cm
8. 47,12 cm
9. 40,84 cm
10. 15,71 cm



Calculez la circonférence de chaque cercle. Les cercles ne sont pas à l'échelle.

69,12 cm	6,28 cm	81,68 cm	15,71 cm	12,57 cm
50,27 cm	47,12 cm	84,82 cm	59,69 cm	40,84 cm

Réponses

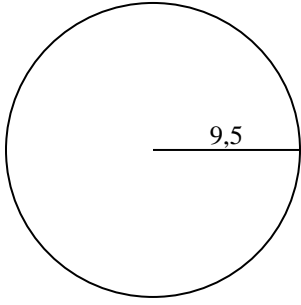


- 1. _____
- 2. _____
- 3. _____
- 4. _____
- 5. _____
- 6. _____
- 7. _____
- 8. _____
- 9. _____
- 10. _____

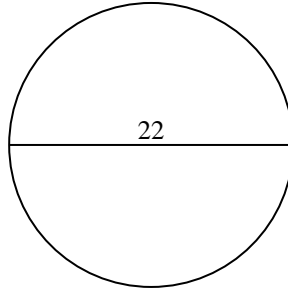


Calculez la circonférence de chaque cercle. Les cercles ne sont pas à l'échelle.

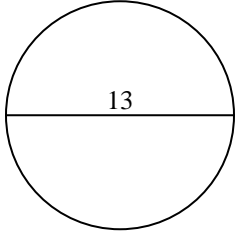
1)



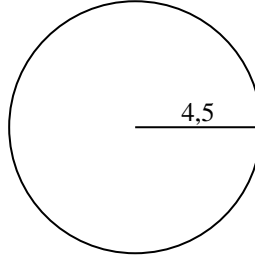
2)



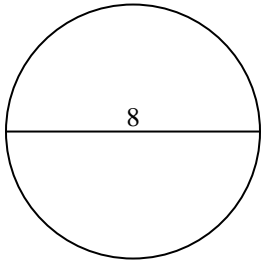
3)



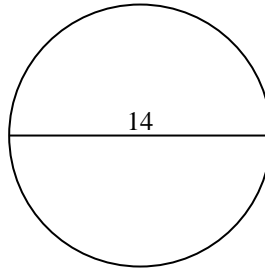
4)



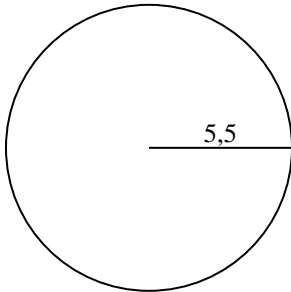
5)



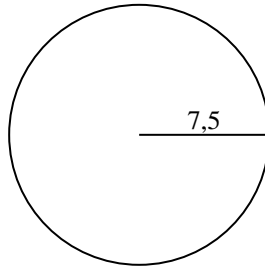
6)



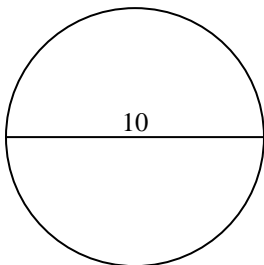
7)



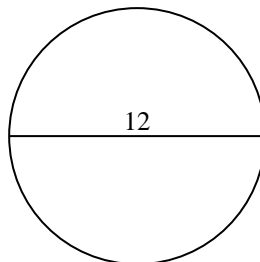
8)



9)



10)



Réponses

1. _____

2. _____

3. _____

4. _____

5. _____

6. _____

7. _____

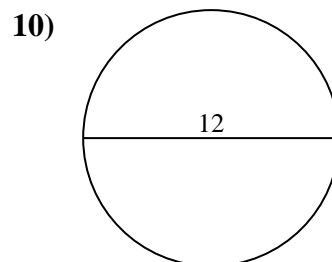
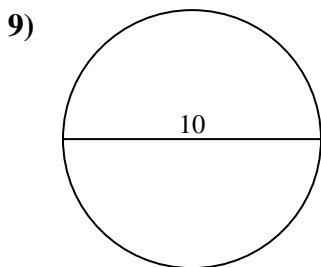
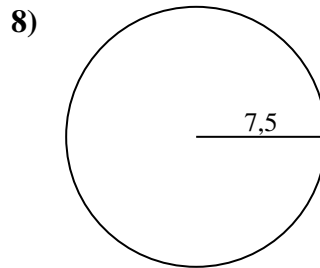
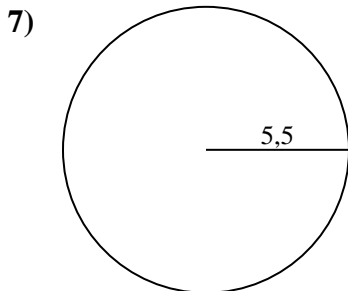
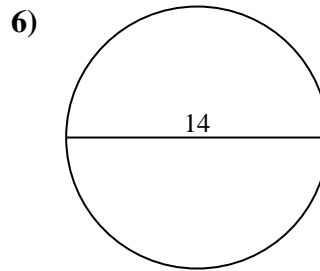
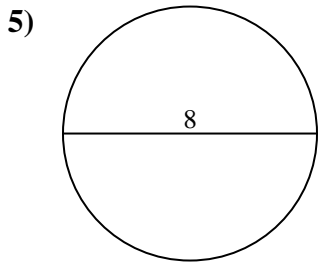
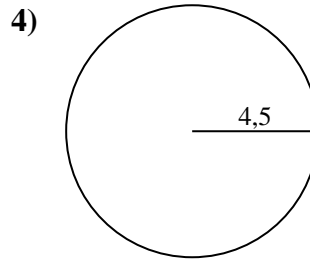
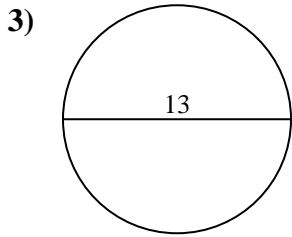
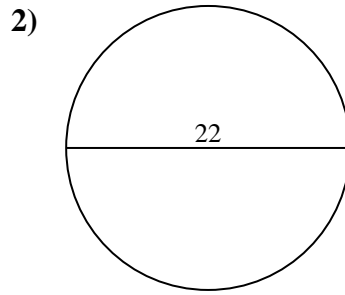
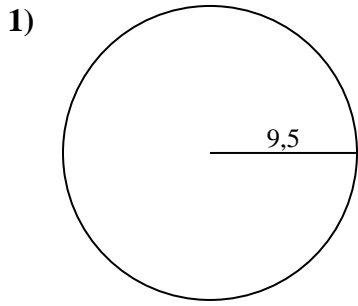
8. _____

9. _____

10. _____



Calculez la circonférence de chaque cercle. Les cercles ne sont pas à l'échelle.

**Réponses**1. 59,69 cm2. 69,12 cm3. 40,84 cm4. 28,27 cm5. 25,13 cm6. 43,98 cm7. 34,56 cm8. 47,12 cm9. 31,42 cm10. 37,7 cm



Calculez la circonférence de chaque cercle. Les cercles ne sont pas à l'échelle.

59,69 cm

25,13 cm

31,42 cm

40,84 cm

34,56 cm

28,27 cm

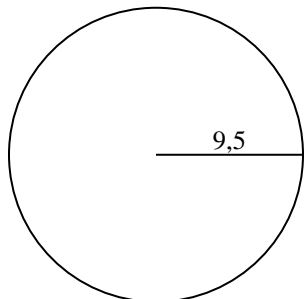
37,7 cm

69,12 cm

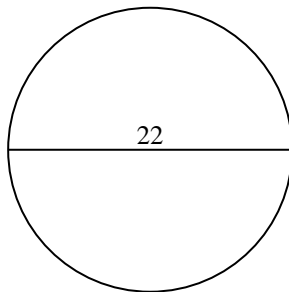
47,12 cm

43,98 cm

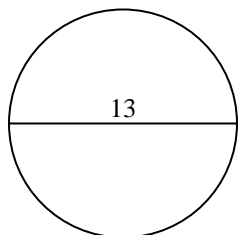
1)



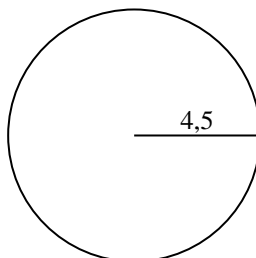
2)



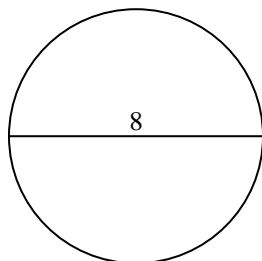
3)



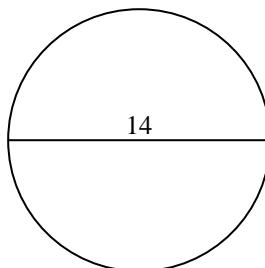
4)



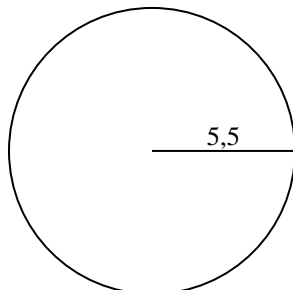
5)



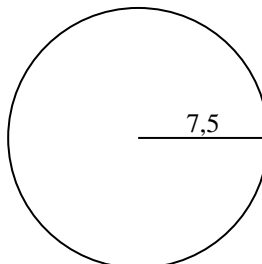
6)



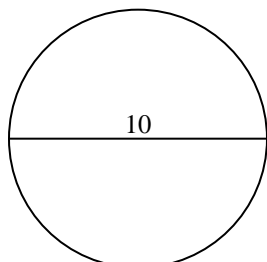
7)



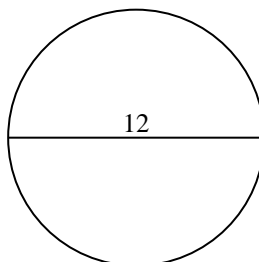
8)



9)



10)

**Réponses**

1. _____

2. _____

3. _____

4. _____

5. _____

6. _____

7. _____

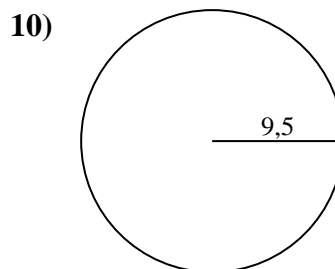
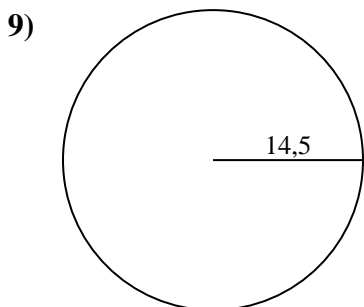
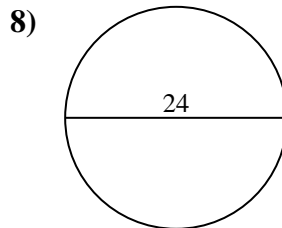
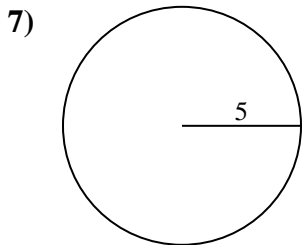
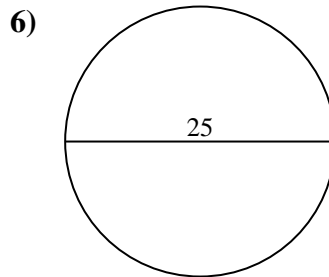
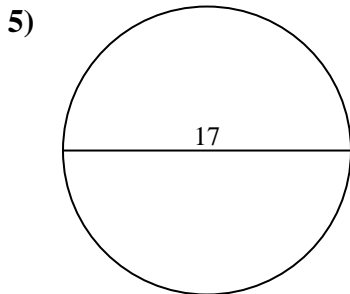
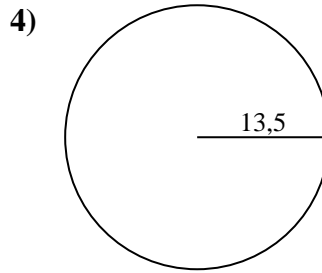
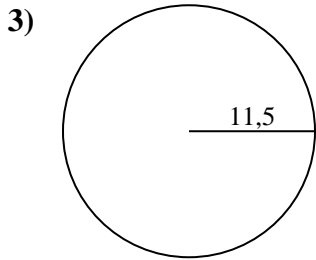
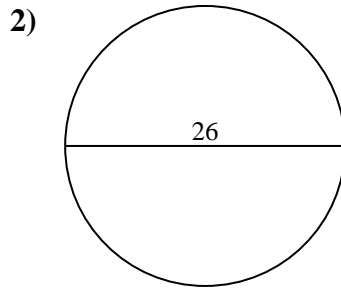
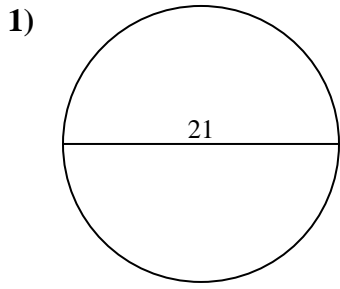
8. _____

9. _____

10. _____



Calculez la circonférence de chaque cercle. Les cercles ne sont pas à l'échelle.



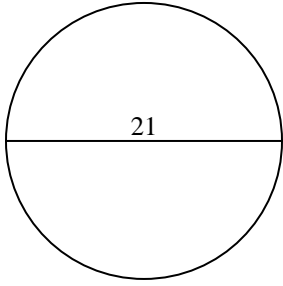
Réponses

- 1. _____
- 2. _____
- 3. _____
- 4. _____
- 5. _____
- 6. _____
- 7. _____
- 8. _____
- 9. _____
- 10. _____

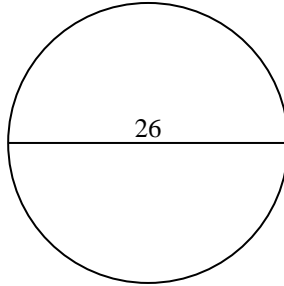


Calculez la circonférence de chaque cercle. Les cercles ne sont pas à l'échelle.

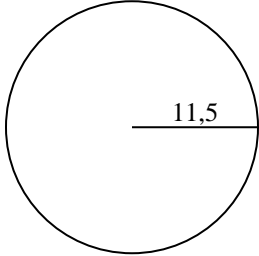
1)



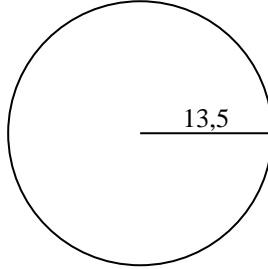
2)



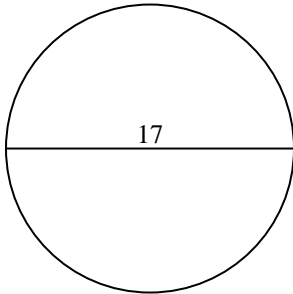
3)



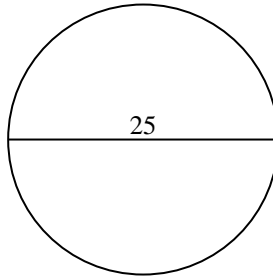
4)



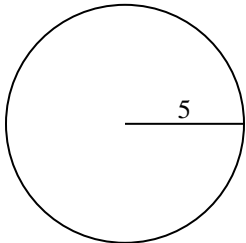
5)



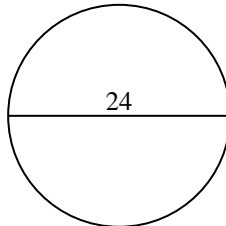
6)



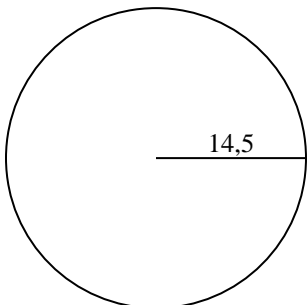
7)



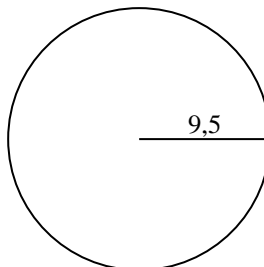
8)



9)



10)

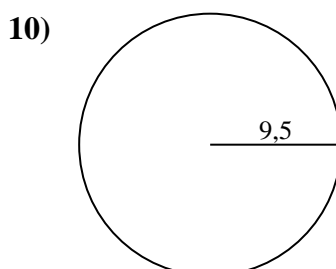
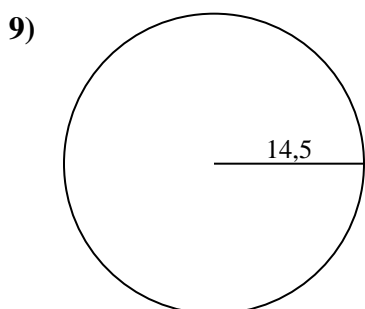
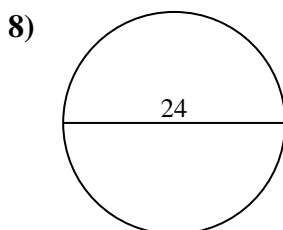
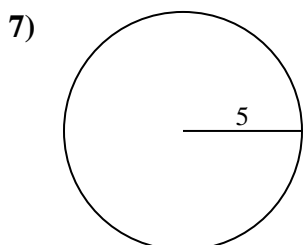
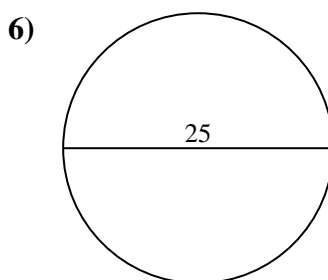
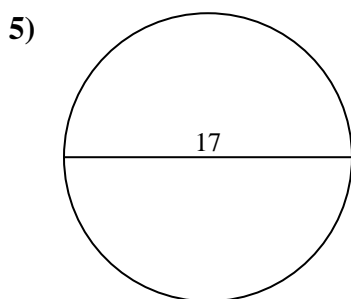
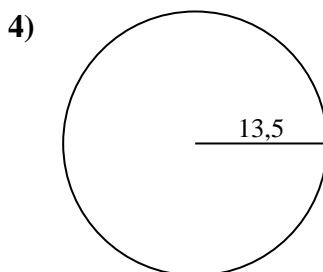
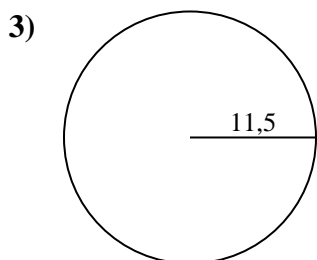
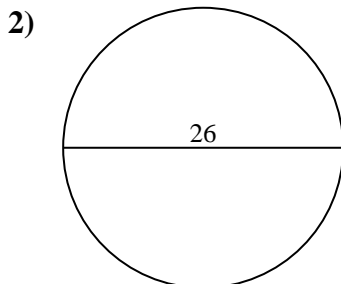
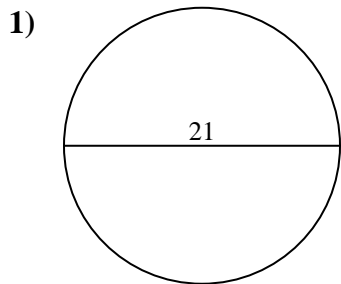
**Réponses**1. 65,97 cm2. 81,68 cm3. 72,26 cm4. 84,82 cm5. 53,41 cm6. 78,54 cm7. 31,42 cm8. 75,4 cm9. 91,11 cm10. 59,69 cm



Calculez la circonférence de chaque cercle. Les cercles ne sont pas à l'échelle.

84,82 cm	78,54 cm	53,41 cm	65,97 cm	91,11 cm
72,26 cm	31,42 cm	75,4 cm	59,69 cm	81,68 cm

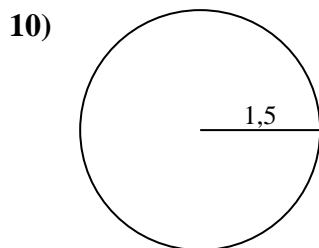
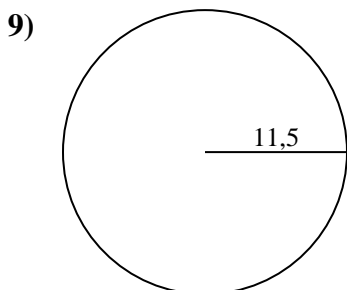
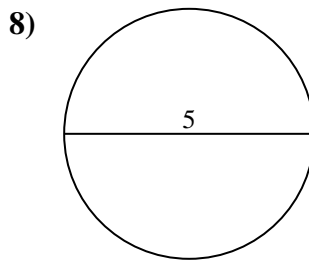
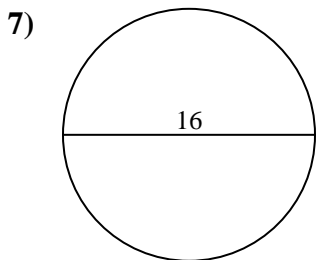
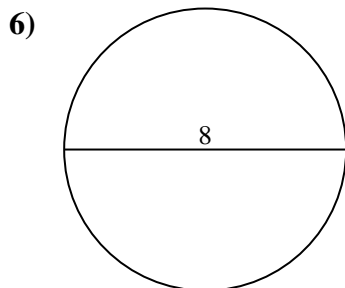
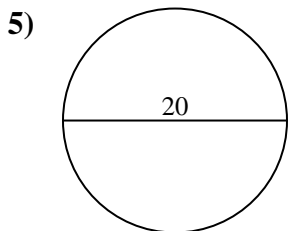
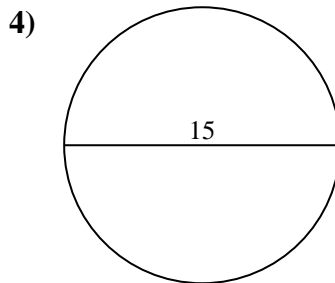
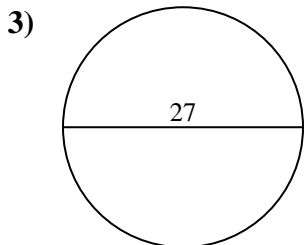
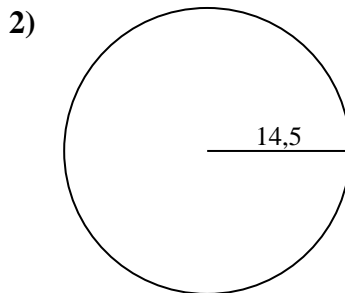
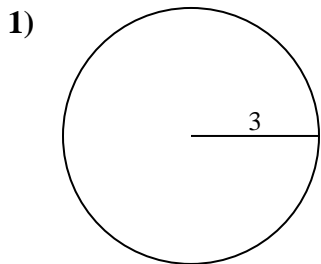
Réponses



- 1. _____
- 2. _____
- 3. _____
- 4. _____
- 5. _____
- 6. _____
- 7. _____
- 8. _____
- 9. _____
- 10. _____



Calculez la circonférence de chaque cercle. Les cercles ne sont pas à l'échelle.



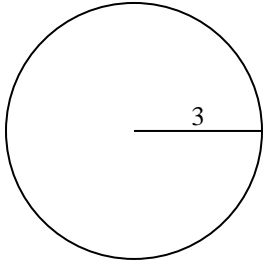
Réponses

- 1. _____
- 2. _____
- 3. _____
- 4. _____
- 5. _____
- 6. _____
- 7. _____
- 8. _____
- 9. _____
- 10. _____

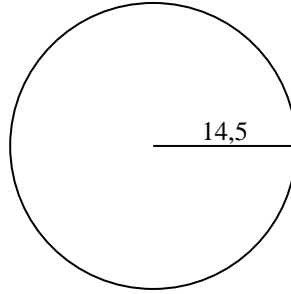


Calculez la circonférence de chaque cercle. Les cercles ne sont pas à l'échelle.

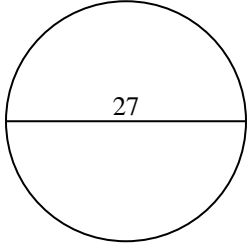
1)



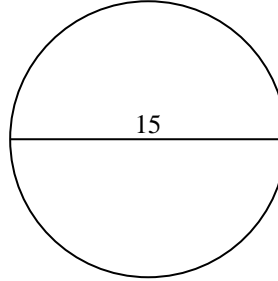
2)



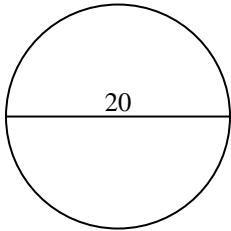
3)



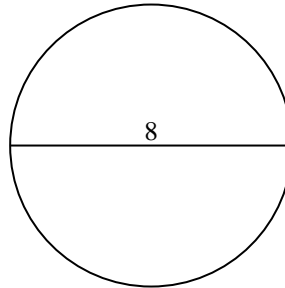
4)



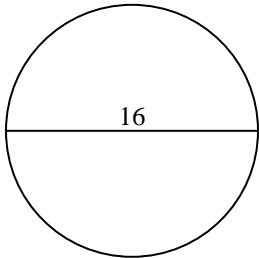
5)



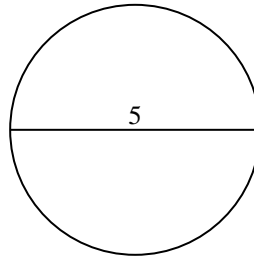
6)



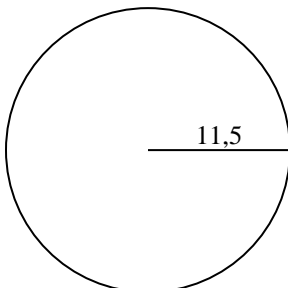
7)



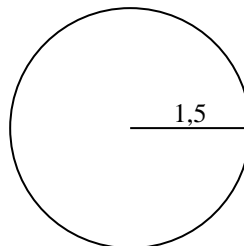
8)



9)



10)

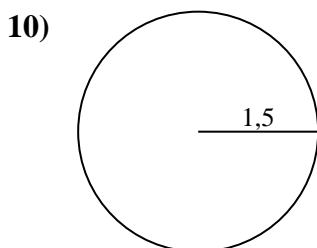
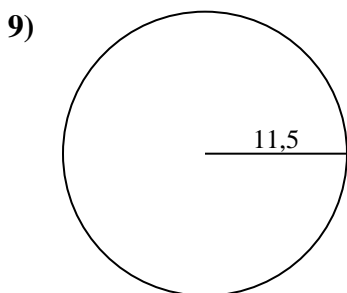
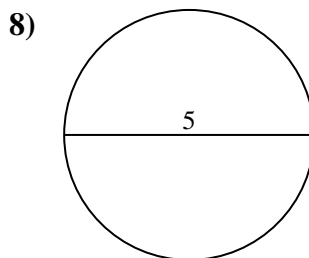
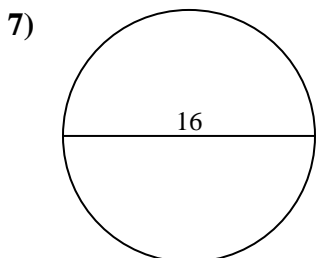
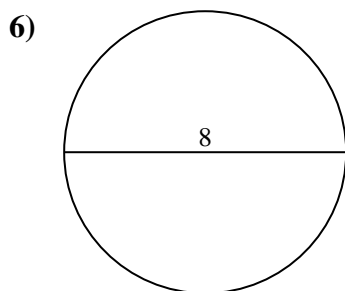
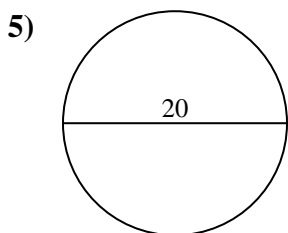
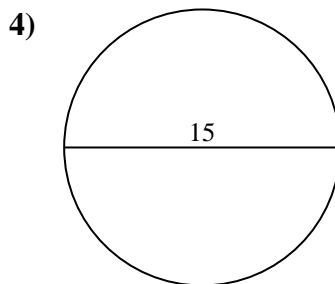
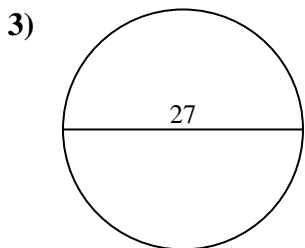
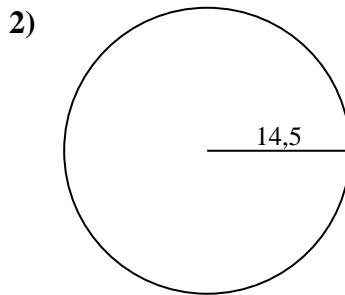
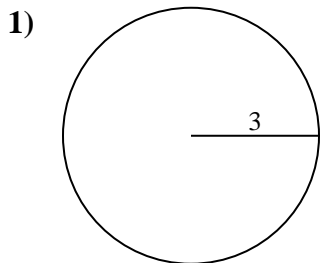
**Réponses**1. 18,85 cm2. 91,11 cm3. 84,82 cm4. 47,12 cm5. 62,83 cm6. 25,13 cm7. 50,27 cm8. 15,71 cm9. 72,26 cm10. 9,42 cm



Calculez la circonférence de chaque cercle. Les cercles ne sont pas à l'échelle.

72,26 cm	9,42 cm	18,85 cm	62,83 cm	50,27 cm
91,11 cm	47,12 cm	84,82 cm	15,71 cm	25,13 cm

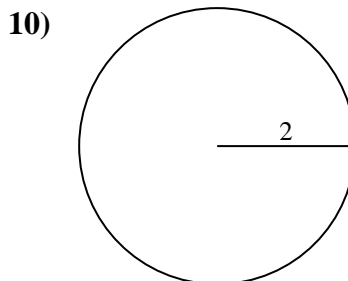
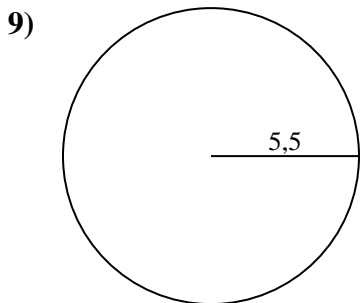
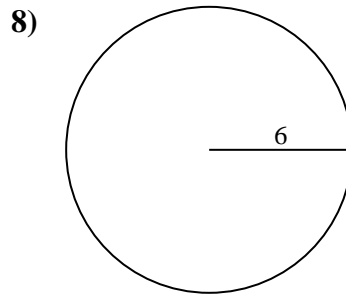
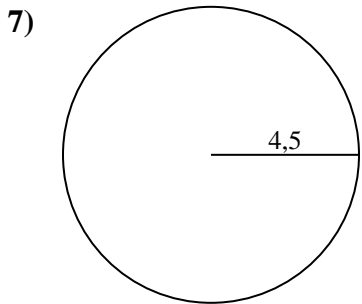
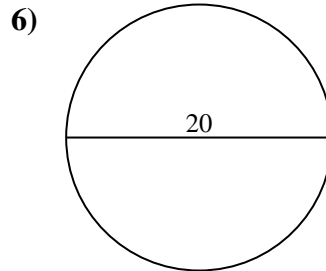
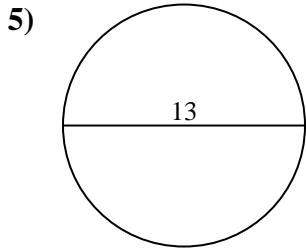
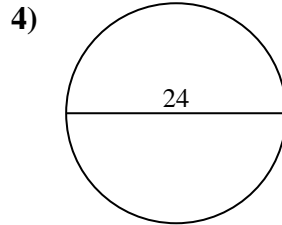
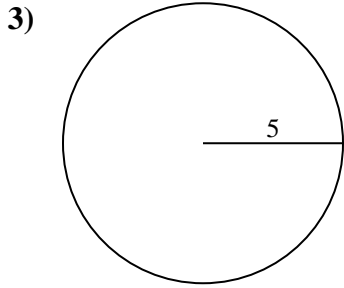
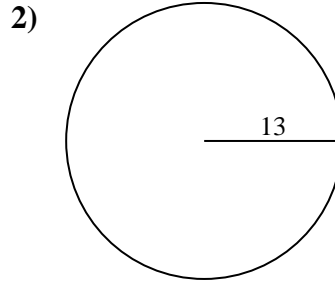
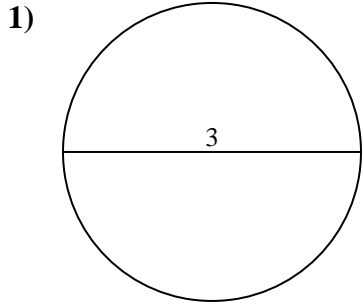
Réponses



- 1. _____
- 2. _____
- 3. _____
- 4. _____
- 5. _____
- 6. _____
- 7. _____
- 8. _____
- 9. _____
- 10. _____



Calculez la circonférence de chaque cercle. Les cercles ne sont pas à l'échelle.



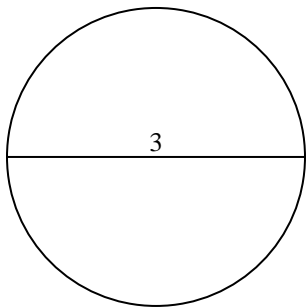
Réponses

- 1. _____
- 2. _____
- 3. _____
- 4. _____
- 5. _____
- 6. _____
- 7. _____
- 8. _____
- 9. _____
- 10. _____

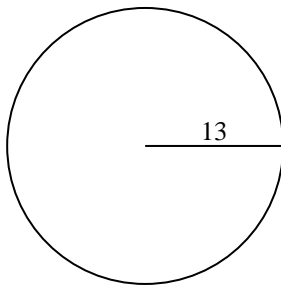


Calculez la circonférence de chaque cercle. Les cercles ne sont pas à l'échelle.

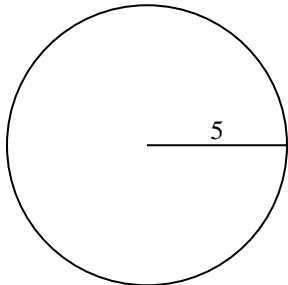
1)



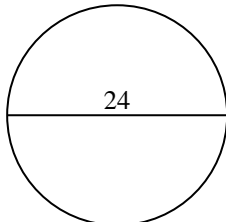
2)



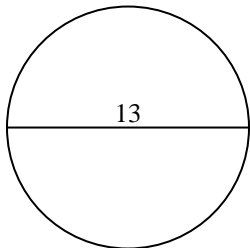
3)



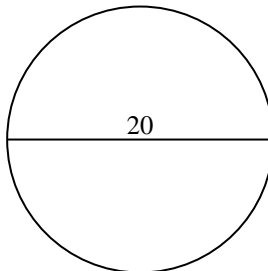
4)



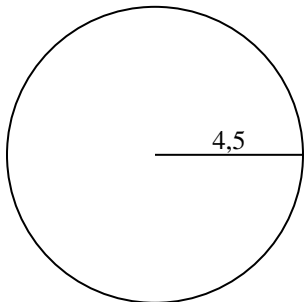
5)



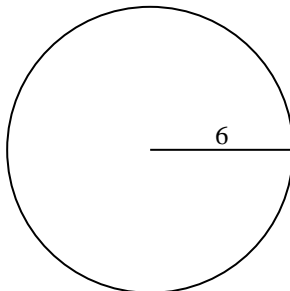
6)



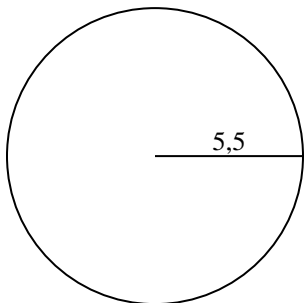
7)



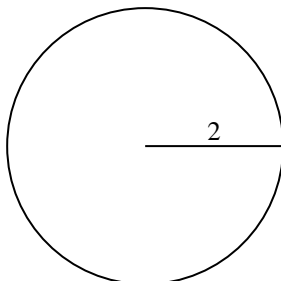
8)



9)



10)

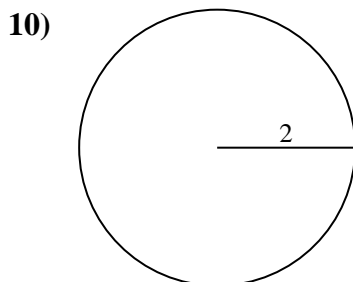
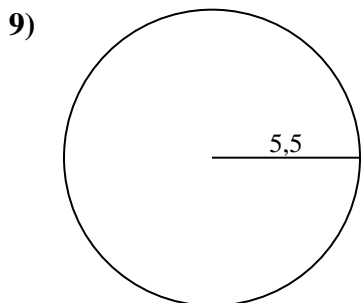
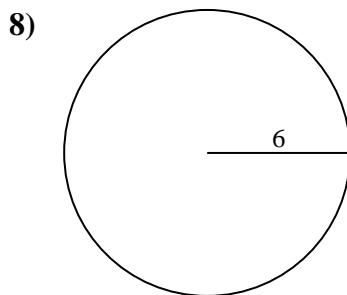
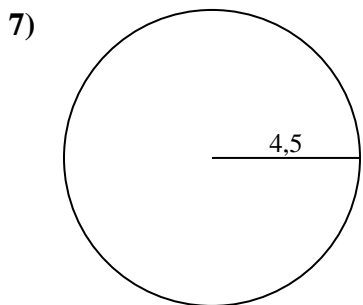
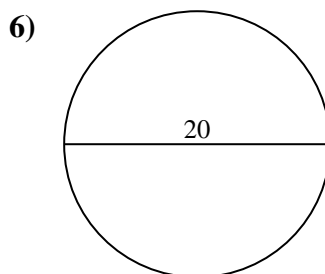
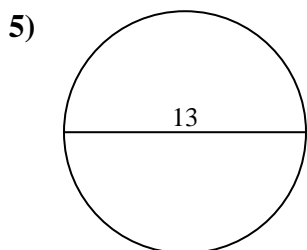
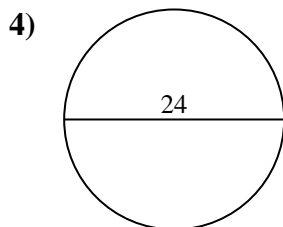
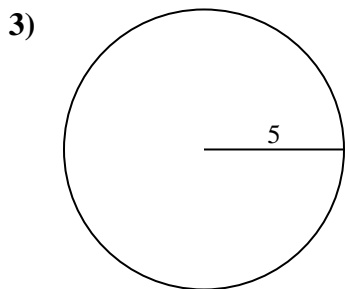
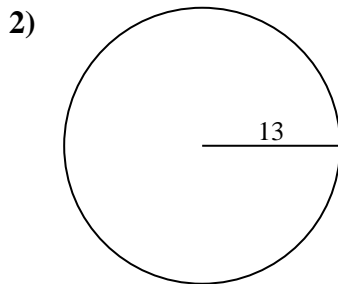
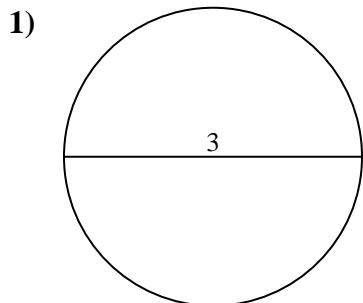
**Réponses**1. 9,42 cm2. 81,68 cm3. 31,42 cm4. 75,4 cm5. 40,84 cm6. 62,83 cm7. 28,27 cm8. 37,7 cm9. 34,56 cm10. 12,57 cm



Calculez la circonférence de chaque cercle. Les cercles ne sont pas à l'échelle.

12,57 cm	28,27 cm	62,83 cm	34,56 cm	81,68 cm
9,42 cm	37,7 cm	75,4 cm	31,42 cm	40,84 cm

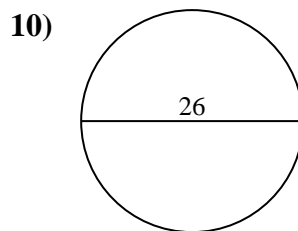
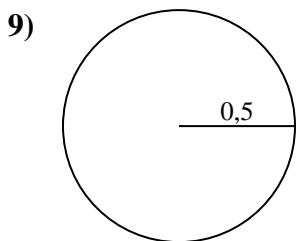
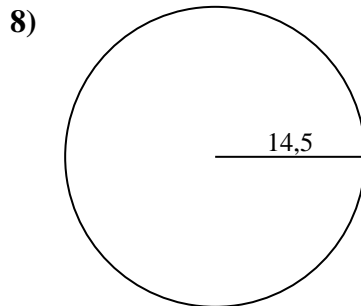
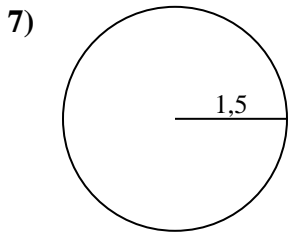
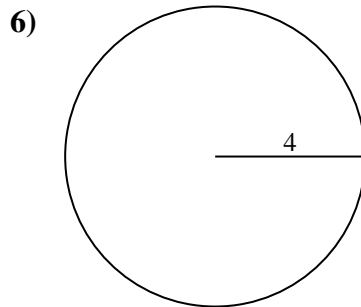
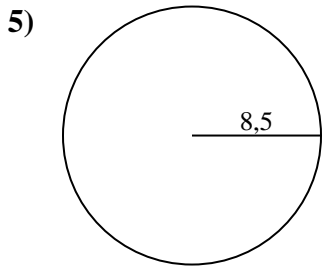
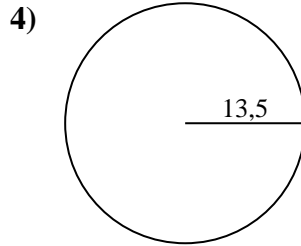
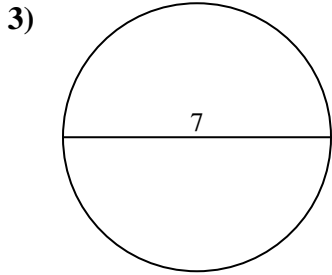
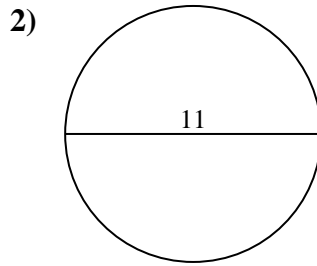
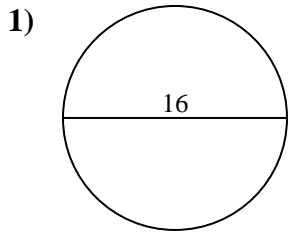
Réponses



- 1. _____
- 2. _____
- 3. _____
- 4. _____
- 5. _____
- 6. _____
- 7. _____
- 8. _____
- 9. _____
- 10. _____



Calculez la circonférence de chaque cercle. Les cercles ne sont pas à l'échelle.

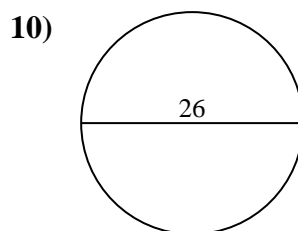
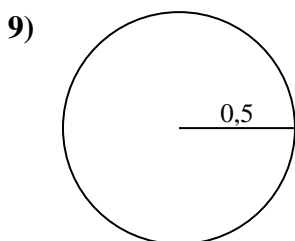
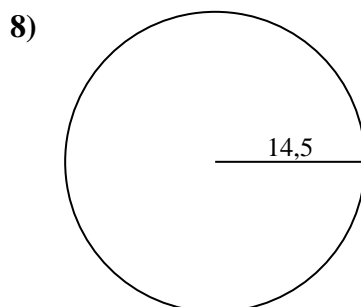
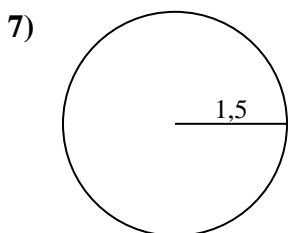
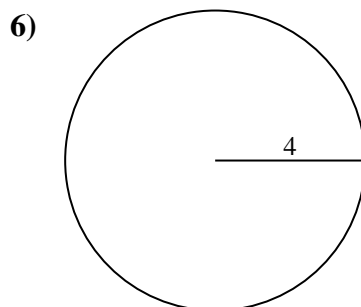
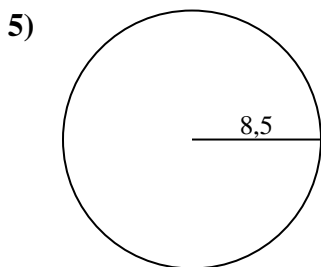
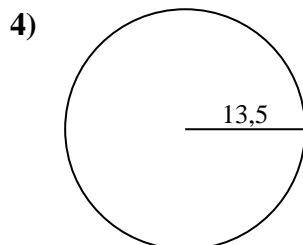
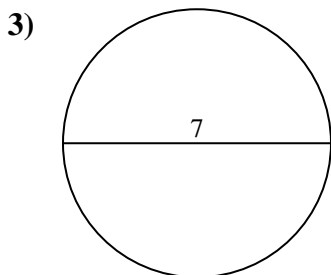
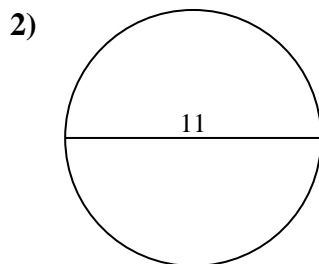
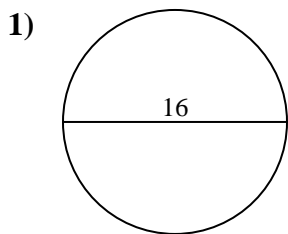


Réponses

- 1. _____
- 2. _____
- 3. _____
- 4. _____
- 5. _____
- 6. _____
- 7. _____
- 8. _____
- 9. _____
- 10. _____



Calculez la circonférence de chaque cercle. Les cercles ne sont pas à l'échelle.

**Réponses**1. 50,27 cm2. 34,56 cm3. 21,99 cm4. 84,82 cm5. 53,41 cm6. 25,13 cm7. 9,42 cm8. 91,11 cm9. 3,14 cm10. 81,68 cm



Calculez la circonférence de chaque cercle. Les cercles ne sont pas à l'échelle.

25,13 cm

81,68 cm

53,41 cm

91,11 cm

50,27 cm

34,56 cm

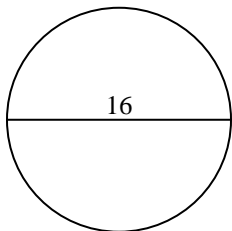
9,42 cm

21,99 cm

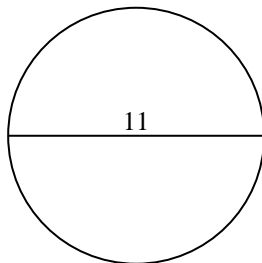
3,14 cm

84,82 cm

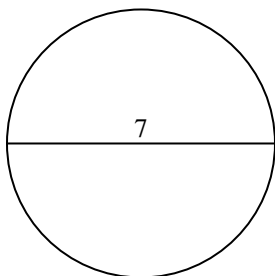
1)



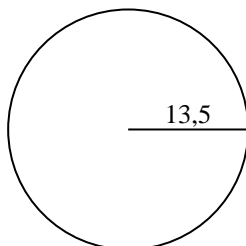
2)



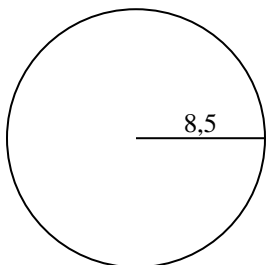
3)



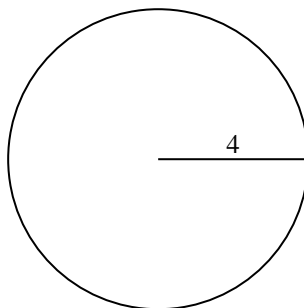
4)



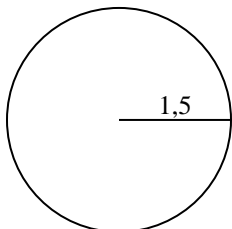
5)



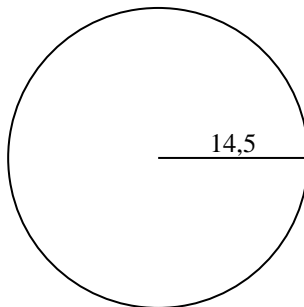
6)



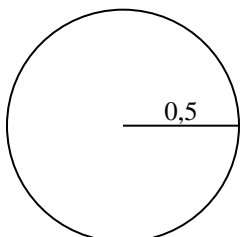
7)



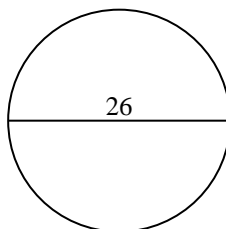
8)



9)



10)

**Réponses**

1. _____

2. _____

3. _____

4. _____

5. _____

6. _____

7. _____

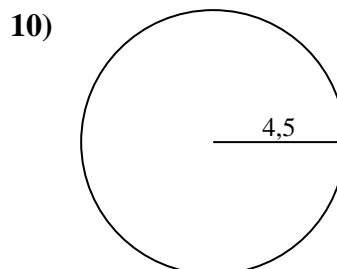
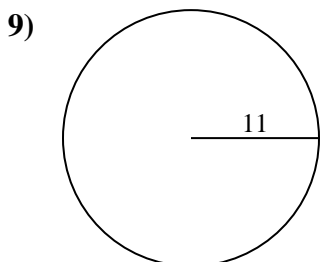
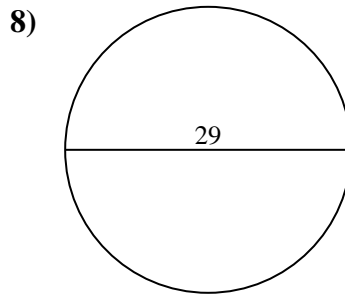
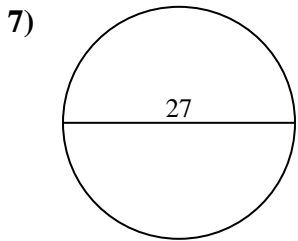
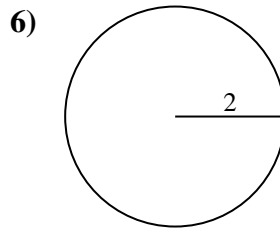
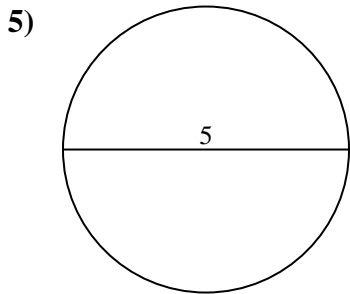
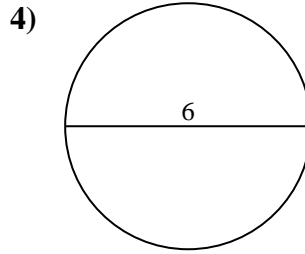
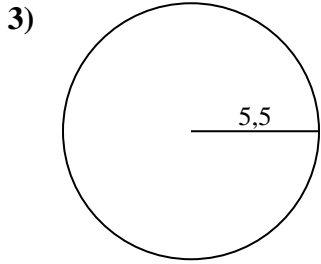
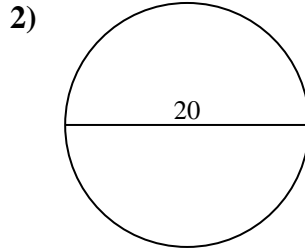
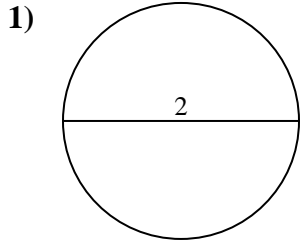
8. _____

9. _____

10. _____



Calculez la circonférence de chaque cercle. Les cercles ne sont pas à l'échelle.

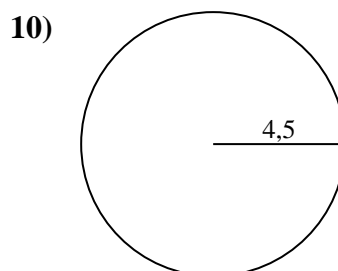
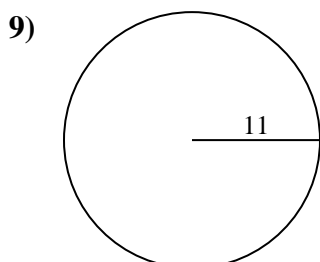
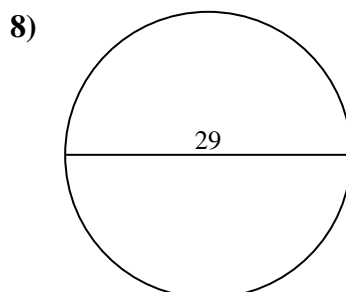
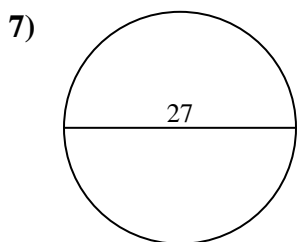
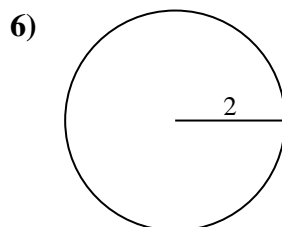
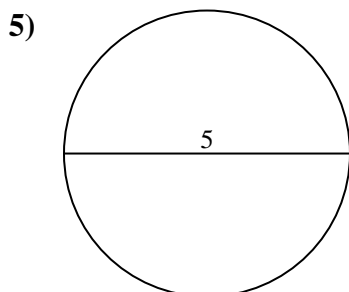
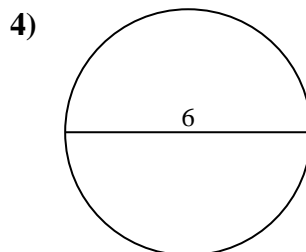
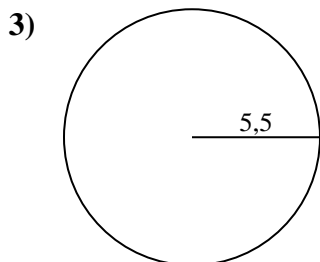
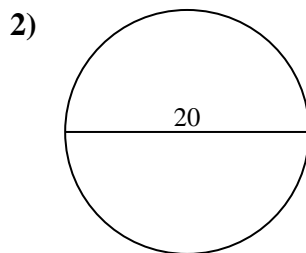
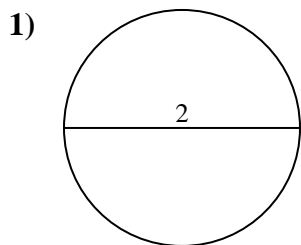


Réponses

- 1. _____
- 2. _____
- 3. _____
- 4. _____
- 5. _____
- 6. _____
- 7. _____
- 8. _____
- 9. _____
- 10. _____



Calculez la circonférence de chaque cercle. Les cercles ne sont pas à l'échelle.

**Réponses**

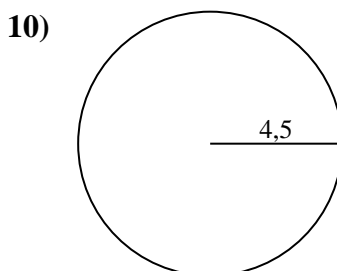
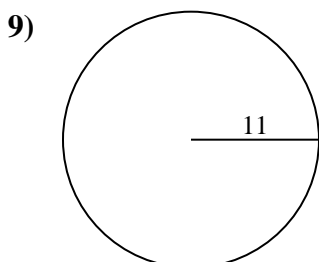
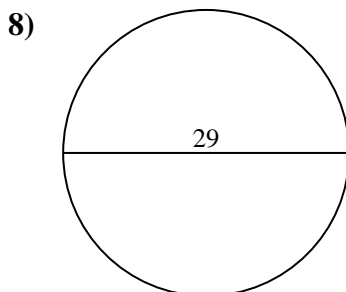
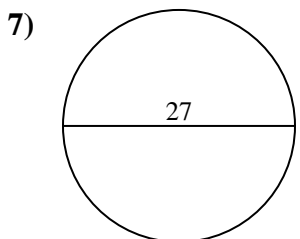
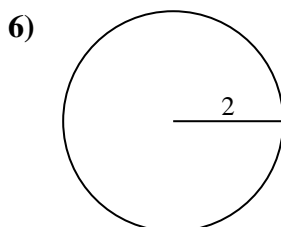
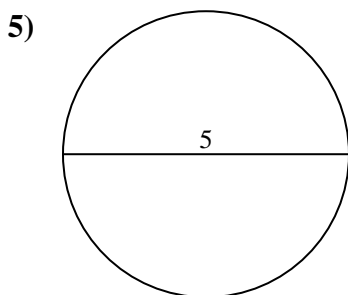
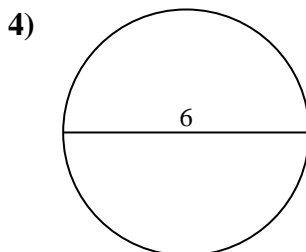
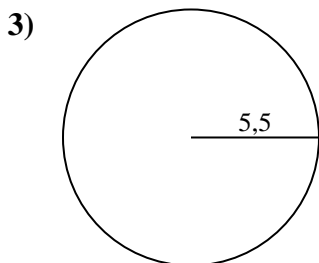
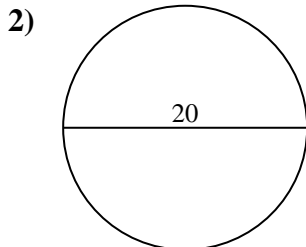
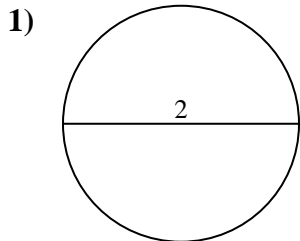
1. 6,28 cm
2. 62,83 cm
3. 34,56 cm
4. 18,85 cm
5. 15,71 cm
6. 12,57 cm
7. 84,82 cm
8. 91,11 cm
9. 69,12 cm
10. 28,27 cm



Calculez la circonférence de chaque cercle. Les cercles ne sont pas à l'échelle.

12,57 cm	34,56 cm	18,85 cm	28,27 cm	91,11 cm
84,82 cm	6,28 cm	69,12 cm	15,71 cm	62,83 cm

Réponses

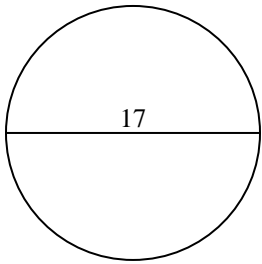


1. _____
2. _____
3. _____
4. _____
5. _____
6. _____
7. _____
8. _____
9. _____
10. _____

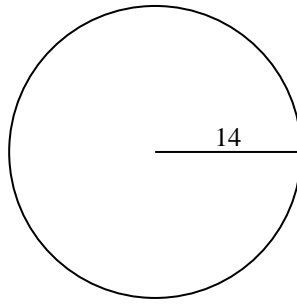


Calculez la circonférence de chaque cercle. Les cercles ne sont pas à l'échelle.

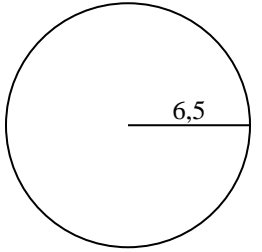
1)



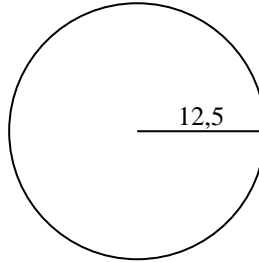
2)



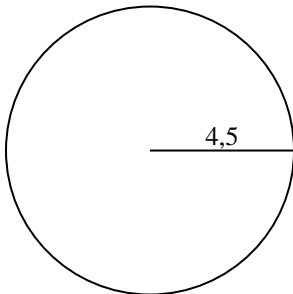
3)



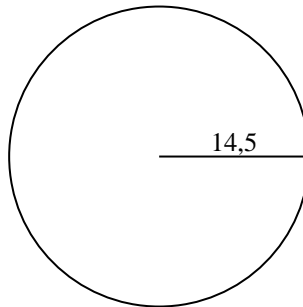
4)



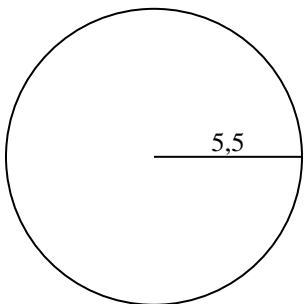
5)



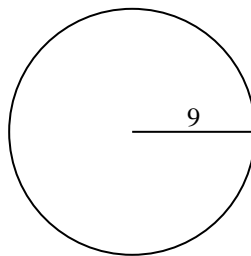
6)



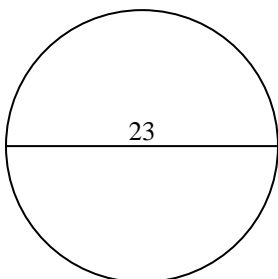
7)



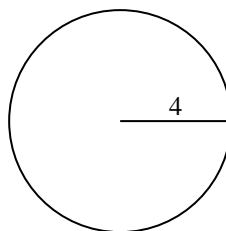
8)



9)



10)



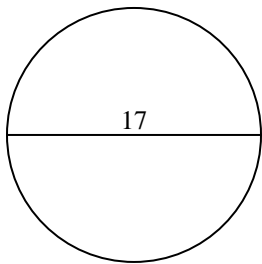
Réponses

- 1. _____
- 2. _____
- 3. _____
- 4. _____
- 5. _____
- 6. _____
- 7. _____
- 8. _____
- 9. _____
- 10. _____

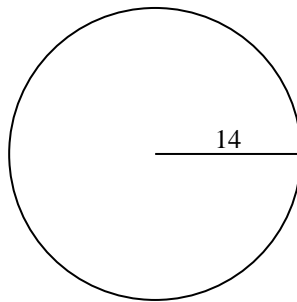


Calculez la circonférence de chaque cercle. Les cercles ne sont pas à l'échelle.

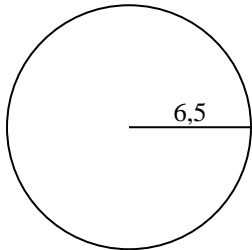
1)



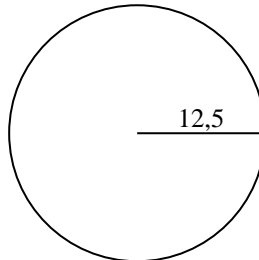
2)



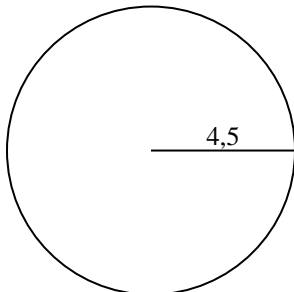
3)



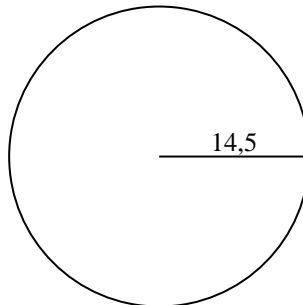
4)



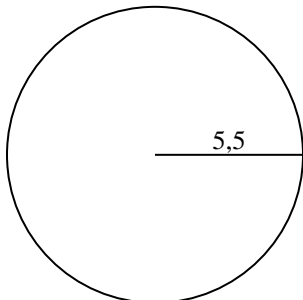
5)



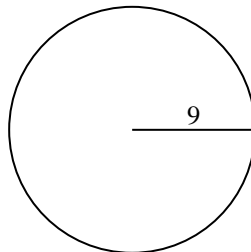
6)



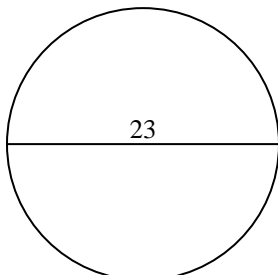
7)



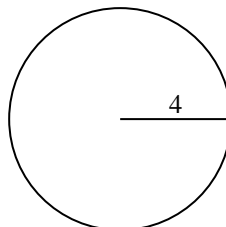
8)



9)



10)

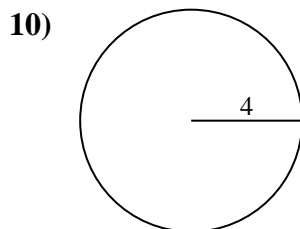
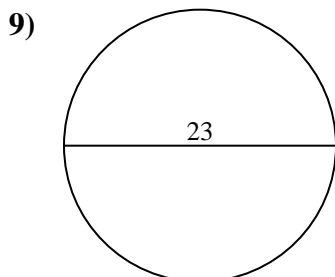
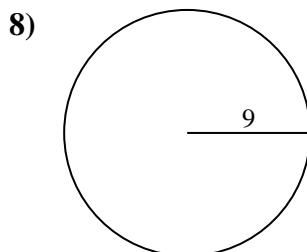
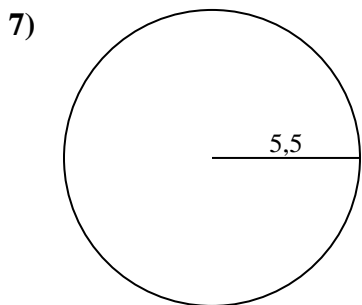
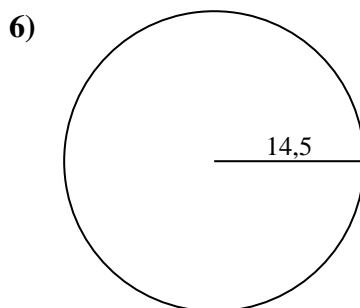
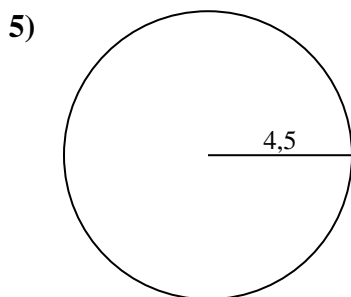
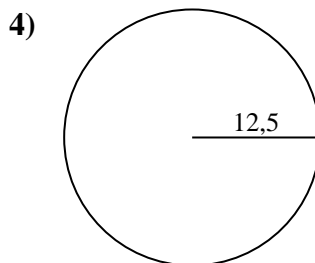
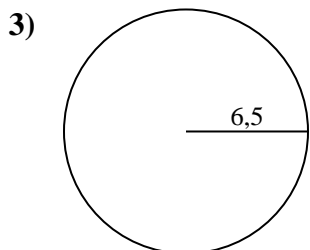
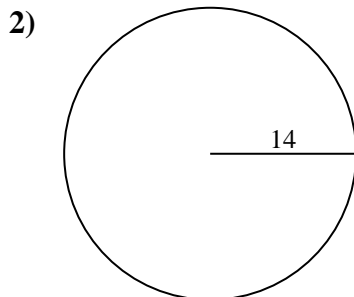
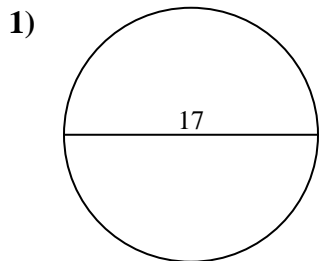
**Réponses**1. 53,41 cm2. 87,96 cm3. 40,84 cm4. 78,54 cm5. 28,27 cm6. 91,11 cm7. 34,56 cm8. 56,55 cm9. 72,26 cm10. 25,13 cm



Calculez la circonférence de chaque cercle. Les cercles ne sont pas à l'échelle.

72,26 cm	40,84 cm	34,56 cm	53,41 cm	25,13 cm
28,27 cm	87,96 cm	78,54 cm	91,11 cm	56,55 cm

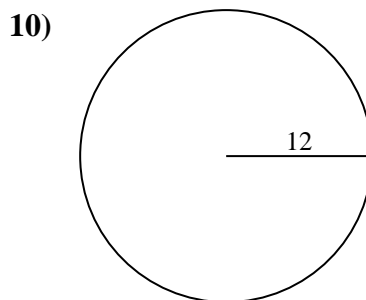
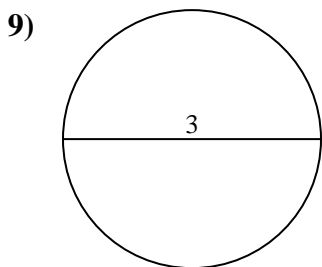
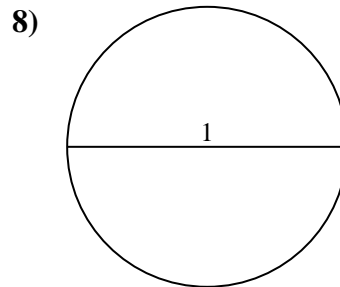
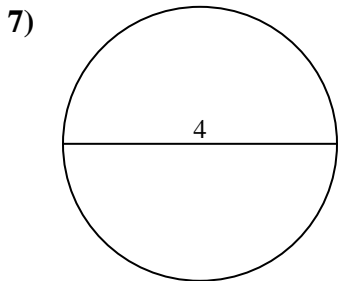
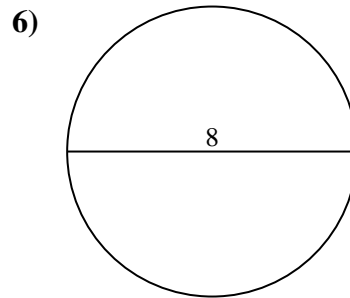
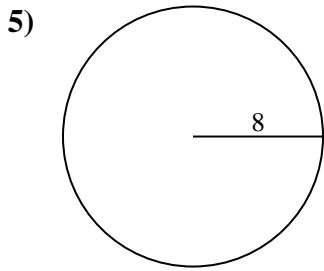
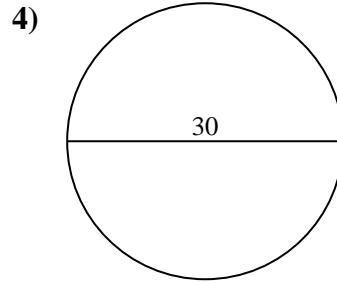
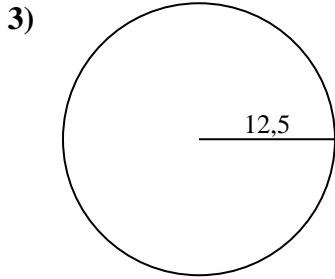
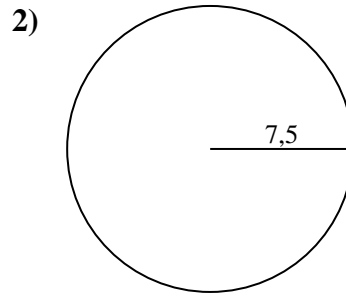
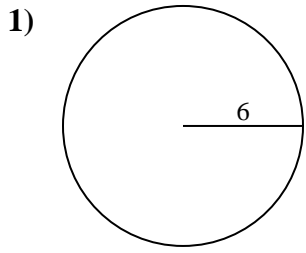
Réponses



- 1. _____
- 2. _____
- 3. _____
- 4. _____
- 5. _____
- 6. _____
- 7. _____
- 8. _____
- 9. _____
- 10. _____



Calculez la circonférence de chaque cercle. Les cercles ne sont pas à l'échelle.

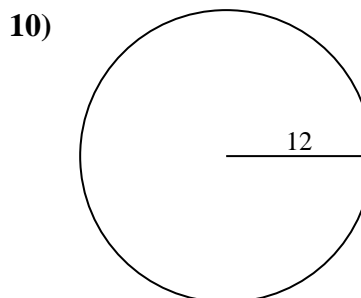
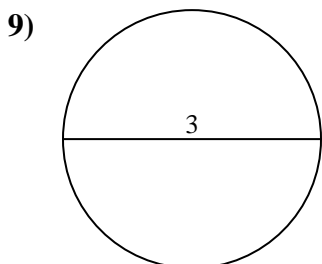
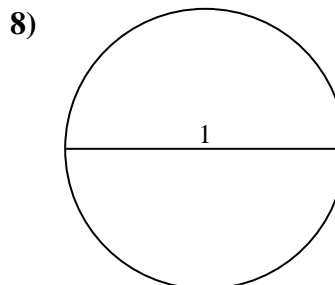
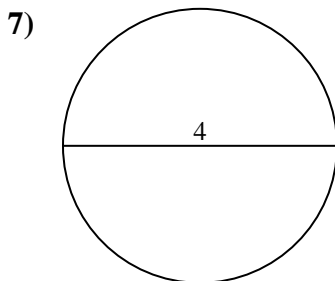
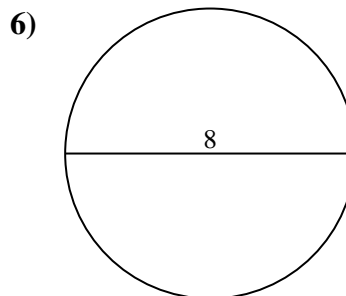
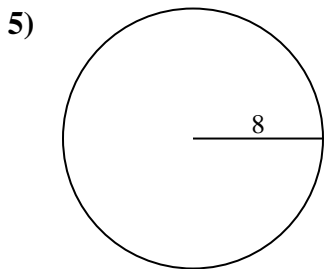
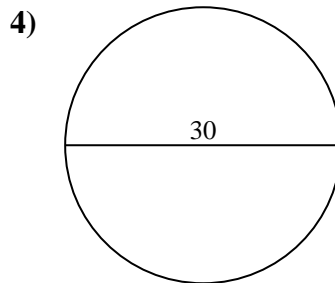
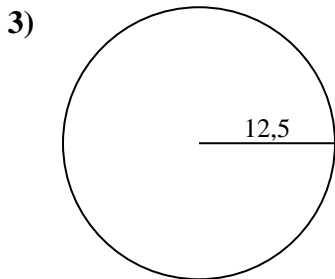
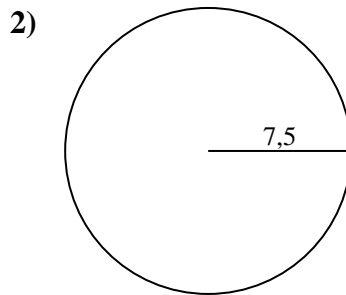
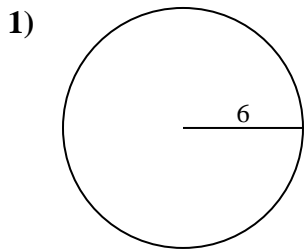


Réponses

- 1. _____
- 2. _____
- 3. _____
- 4. _____
- 5. _____
- 6. _____
- 7. _____
- 8. _____
- 9. _____
- 10. _____



Calculez la circonférence de chaque cercle. Les cercles ne sont pas à l'échelle.

**Réponses**1. 37,7 cm2. 47,12 cm3. 78,54 cm4. 94,25 cm5. 50,27 cm6. 25,13 cm7. 12,57 cm8. 3,14 cm9. 9,42 cm10. 75,4 cm



Calculez la circonférence de chaque cercle. Les cercles ne sont pas à l'échelle.

12,57 cm

75,4 cm

25,13 cm

94,25 cm

50,27 cm

9,42 cm

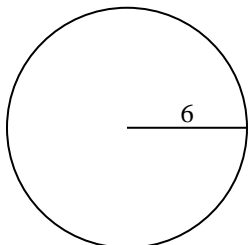
78,54 cm

37,7 cm

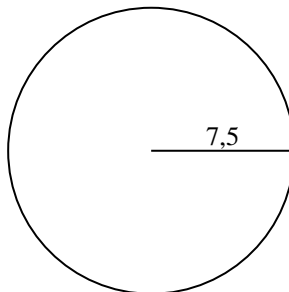
47,12 cm

3,14 cm

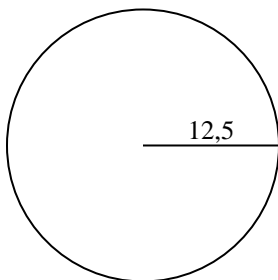
1)



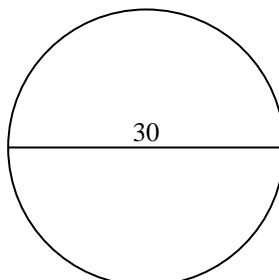
2)



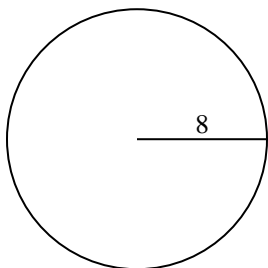
3)



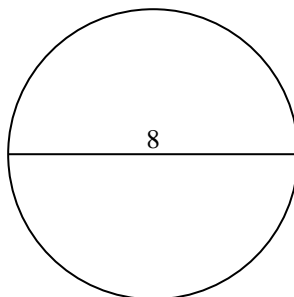
4)



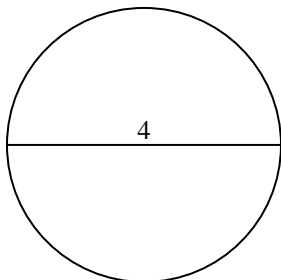
5)



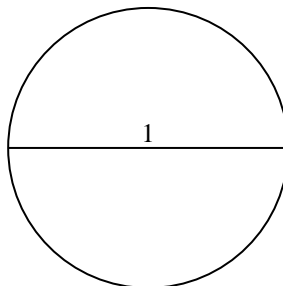
6)



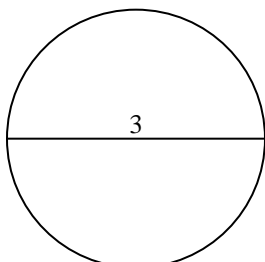
7)



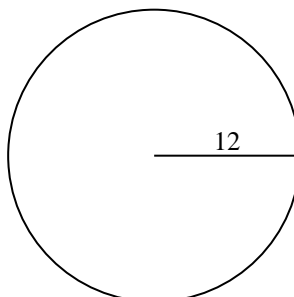
8)



9)



10)

**Réponses**

1. _____

2. _____

3. _____

4. _____

5. _____

6. _____

7. _____

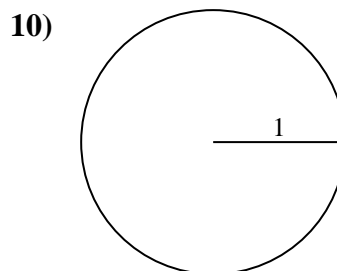
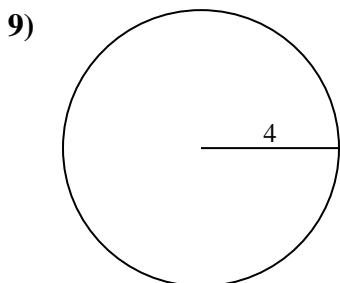
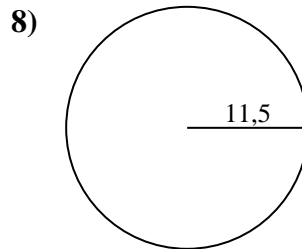
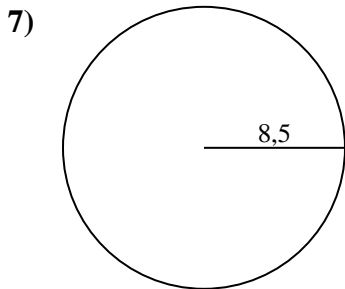
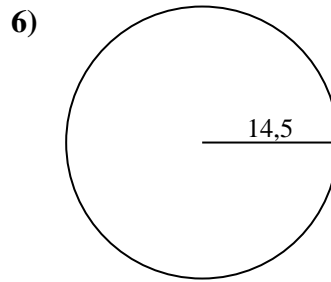
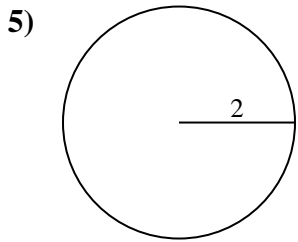
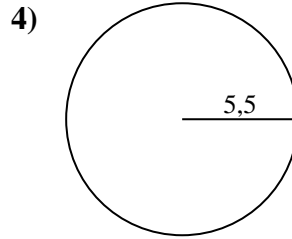
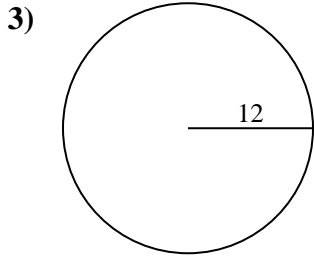
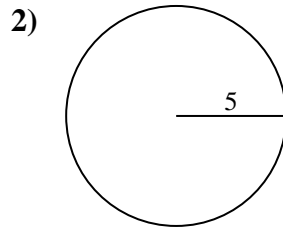
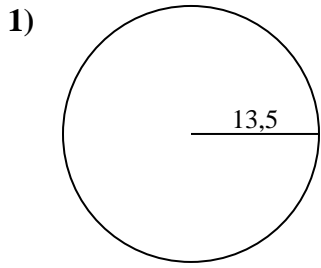
8. _____

9. _____

10. _____



Calculez la circonférence de chaque cercle. Les cercles ne sont pas à l'échelle.

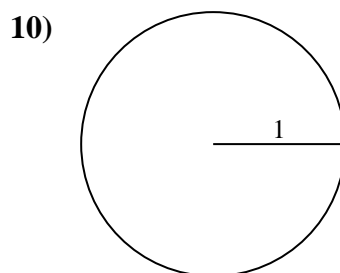
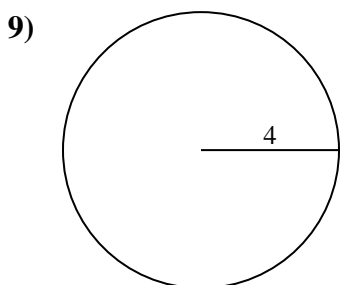
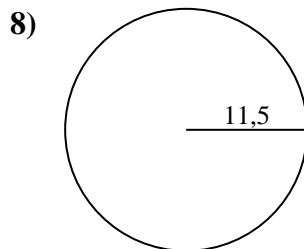
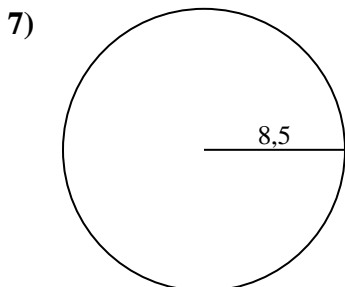
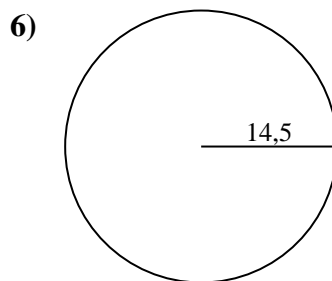
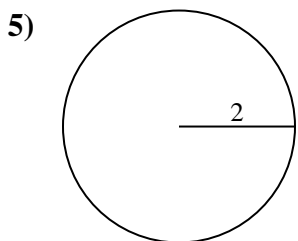
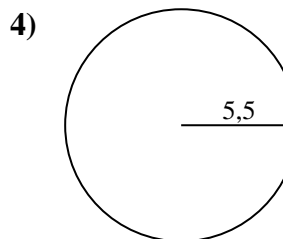
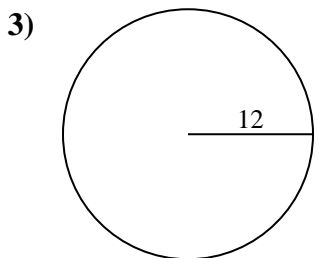
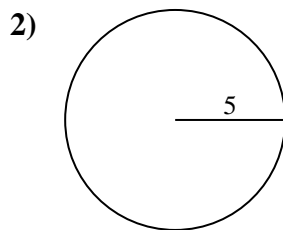
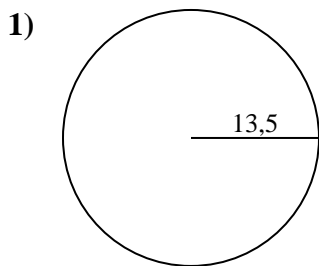


Réponses

- 1. _____
- 2. _____
- 3. _____
- 4. _____
- 5. _____
- 6. _____
- 7. _____
- 8. _____
- 9. _____
- 10. _____



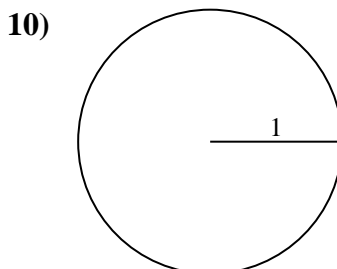
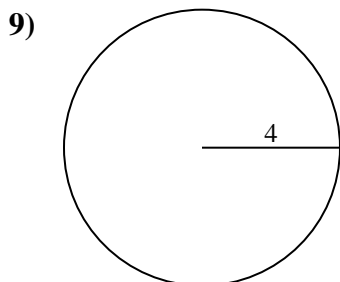
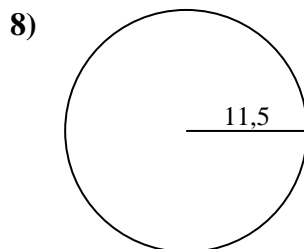
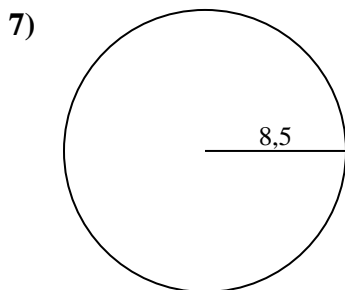
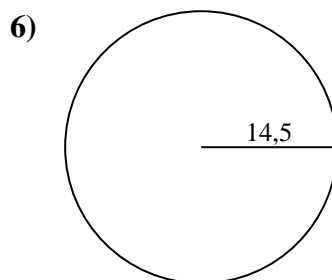
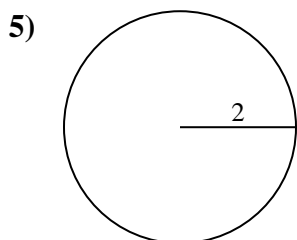
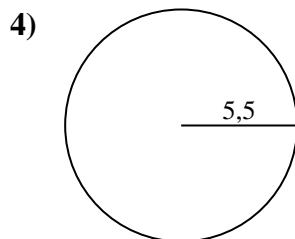
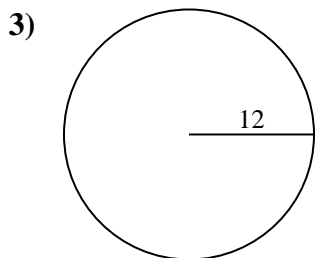
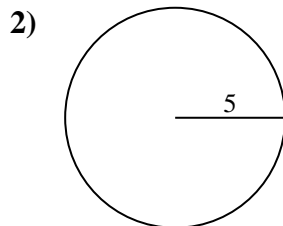
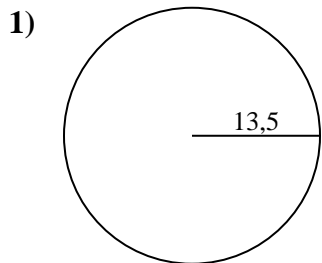
Calculez la circonférence de chaque cercle. Les cercles ne sont pas à l'échelle.

**Réponses**1. 84,82 cm2. 31,42 cm3. 75,4 cm4. 34,56 cm5. 12,57 cm6. 91,11 cm7. 53,41 cm8. 72,26 cm9. 25,13 cm10. 6,28 cm



Calculez la circonférence de chaque cercle. Les cercles ne sont pas à l'échelle.

53,41 cm	84,82 cm	31,42 cm	72,26 cm	34,56 cm
12,57 cm	75,4 cm	91,11 cm	6,28 cm	25,13 cm



Réponses

- 1. _____
- 2. _____
- 3. _____
- 4. _____
- 5. _____
- 6. _____
- 7. _____
- 8. _____
- 9. _____
- 10. _____