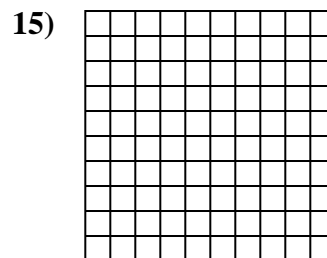
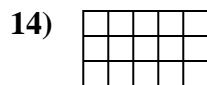
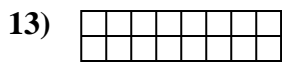
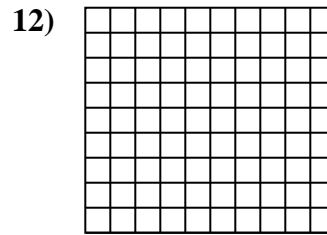
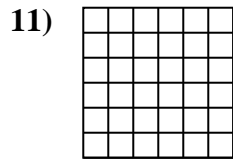
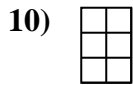
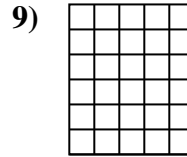

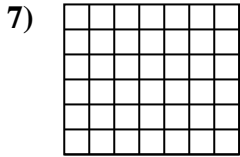

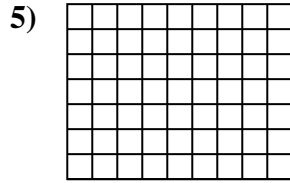
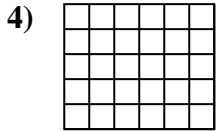
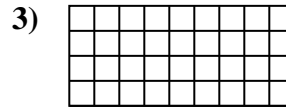
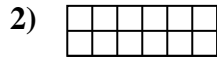
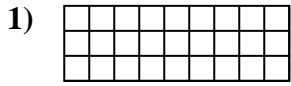


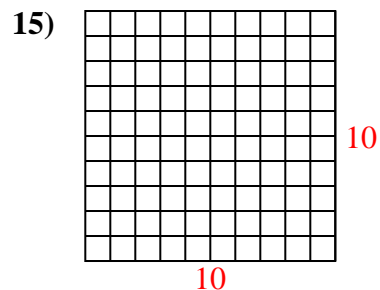
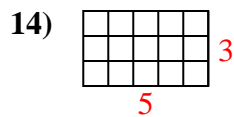
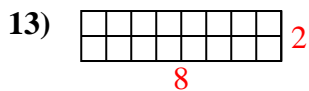
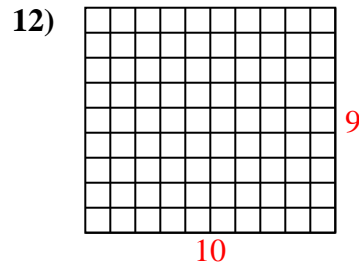
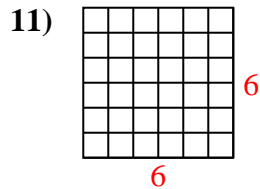
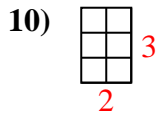
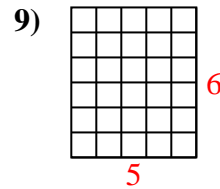
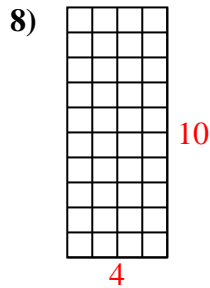
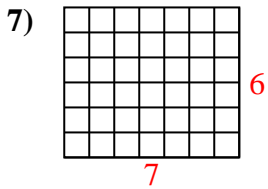
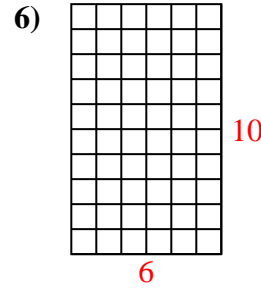
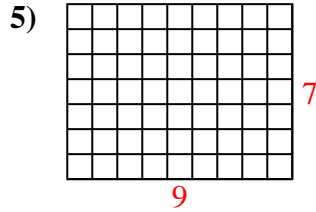
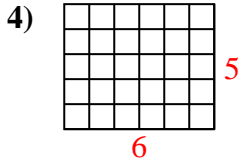
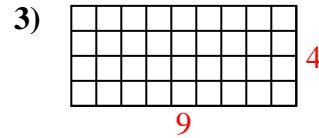
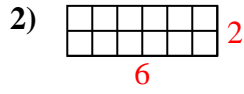


Calculez l'Aire. Chaque bloque = 1 unité (u<sup>2</sup>).



**Réponses**

- 1. \_\_\_\_\_
- 2. \_\_\_\_\_
- 3. \_\_\_\_\_
- 4. \_\_\_\_\_
- 5. \_\_\_\_\_
- 6. \_\_\_\_\_
- 7. \_\_\_\_\_
- 8. \_\_\_\_\_
- 9. \_\_\_\_\_
- 10. \_\_\_\_\_
- 11. \_\_\_\_\_
- 12. \_\_\_\_\_
- 13. \_\_\_\_\_
- 14. \_\_\_\_\_
- 15. \_\_\_\_\_

Calculez l'Aire. Chaque bloque = 1 unité ( $u^2$ ).**Réponses**1. 27  $u^2$ 2. 12  $u^2$ 3. 36  $u^2$ 4. 30  $u^2$ 5. 63  $u^2$ 6. 60  $u^2$ 7. 42  $u^2$ 8. 40  $u^2$ 9. 30  $u^2$ 10. 6  $u^2$ 11. 36  $u^2$ 12. 90  $u^2$ 13. 16  $u^2$ 14. 15  $u^2$ 15. 100  $u^2$