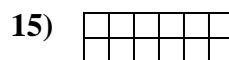
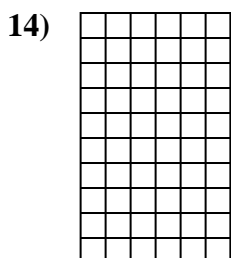
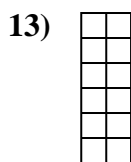
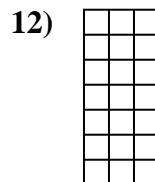
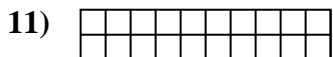
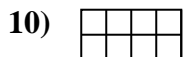
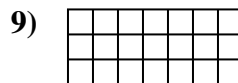
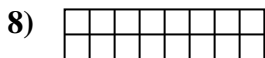
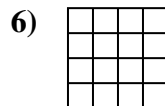
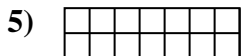
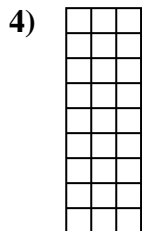

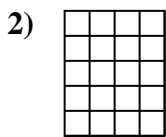
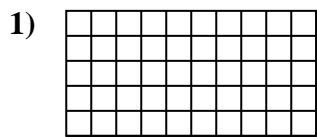




Calculez l'Aire. Chaque bloque = 1 unité (u²).



Réponses

1. _____

2. _____

3. _____

4. _____

5. _____

6. _____

7. _____

8. _____

9. _____

10. _____

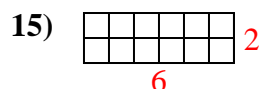
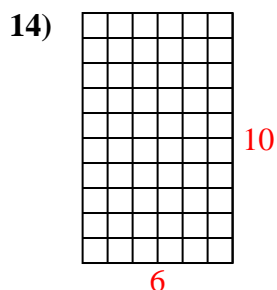
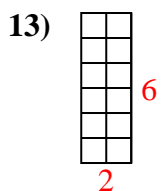
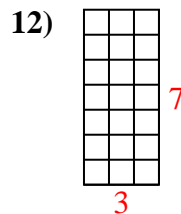
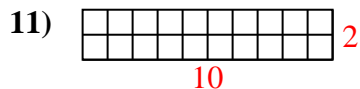
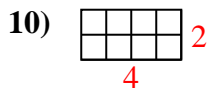
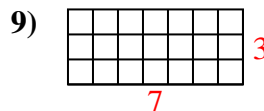
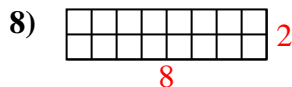
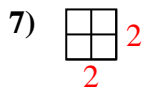
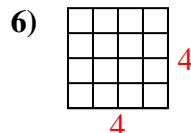
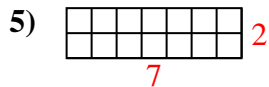
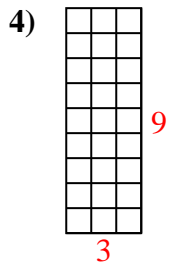
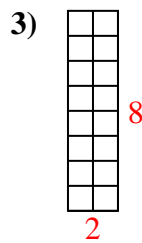
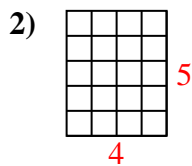
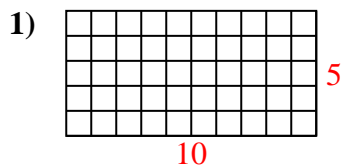
11. _____

12. _____

13. _____

14. _____

15. _____

Calculez l'Aire. Chaque bloque = 1 unité (u^2).**Réponses**1. 50 u^2 2. 20 u^2 3. 16 u^2 4. 27 u^2 5. 14 u^2 6. 16 u^2 7. 4 u^2 8. 16 u^2 9. 21 u^2 10. 8 u^2 11. 20 u^2 12. 21 u^2 13. 12 u^2 14. 60 u^2 15. 12 u^2