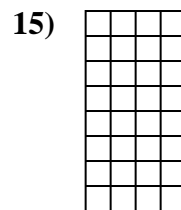
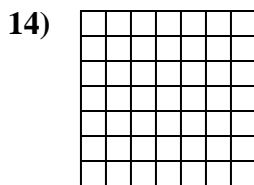
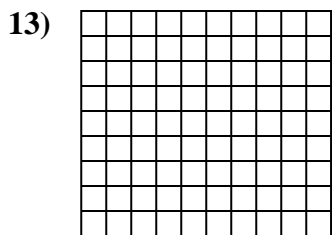
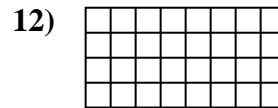
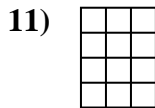
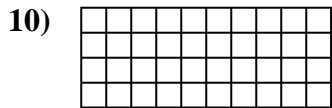
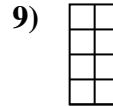
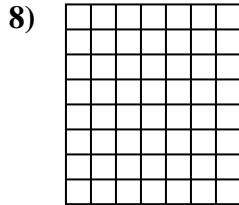
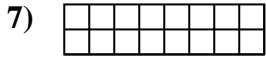

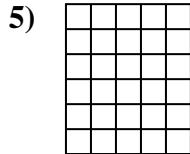
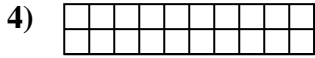
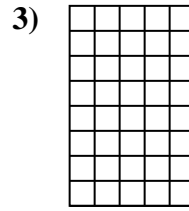
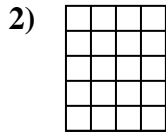
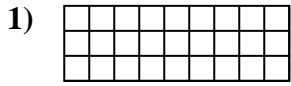




Calculez l'Aire. Chaque bloque = 1 unité (u<sup>2</sup>).



**Réponses**

1. \_\_\_\_\_

2. \_\_\_\_\_

3. \_\_\_\_\_

4. \_\_\_\_\_

5. \_\_\_\_\_

6. \_\_\_\_\_

7. \_\_\_\_\_

8. \_\_\_\_\_

9. \_\_\_\_\_

10. \_\_\_\_\_

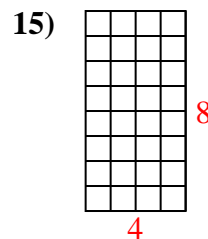
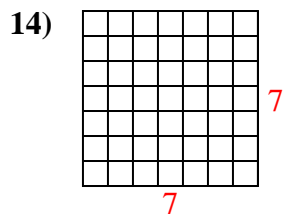
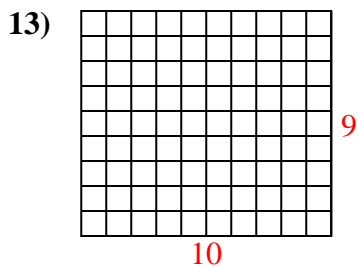
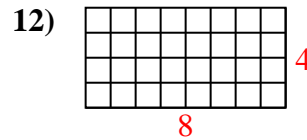
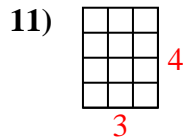
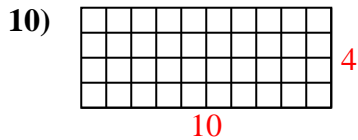
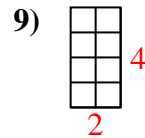
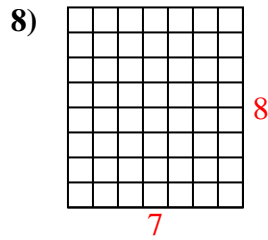
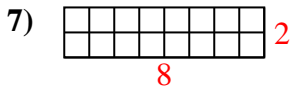
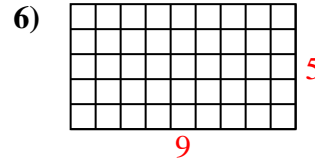
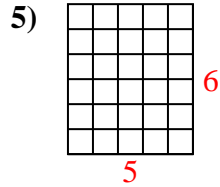
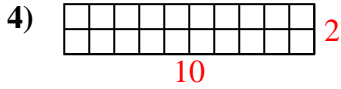
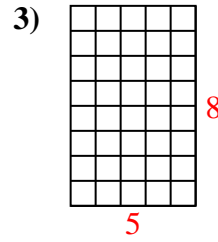
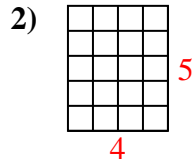
11. \_\_\_\_\_

12. \_\_\_\_\_

13. \_\_\_\_\_

14. \_\_\_\_\_

15. \_\_\_\_\_

Calculez l'Aire. Chaque bloque = 1 unité ( $u^2$ ).**Réponses**1. 27  $u^2$ 2. 20  $u^2$ 3. 40  $u^2$ 4. 20  $u^2$ 5. 30  $u^2$ 6. 45  $u^2$ 7. 16  $u^2$ 8. 56  $u^2$ 9. 8  $u^2$ 10. 40  $u^2$ 11. 12  $u^2$ 12. 32  $u^2$ 13. 90  $u^2$ 14. 49  $u^2$ 15. 32  $u^2$