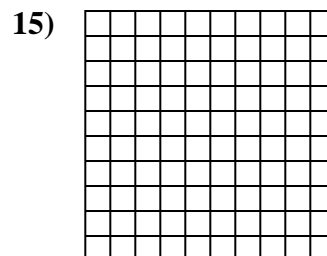
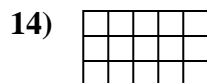
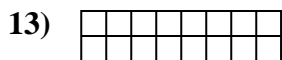
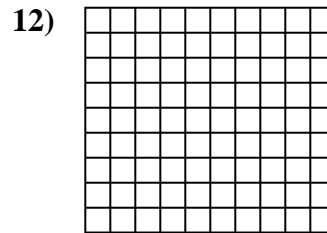
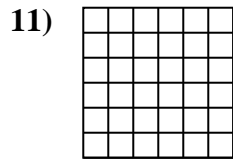
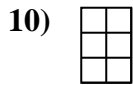
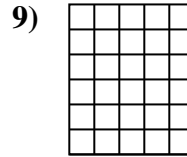

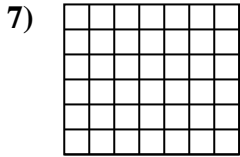

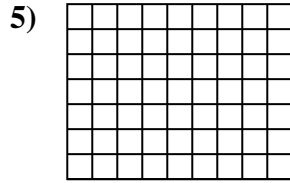
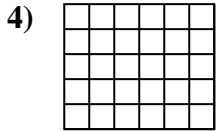
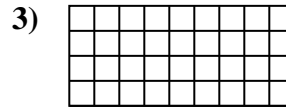
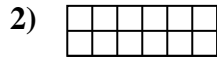
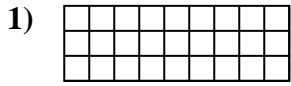


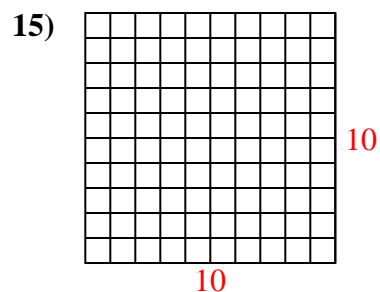
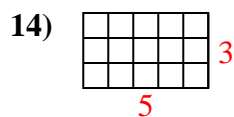
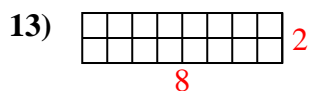
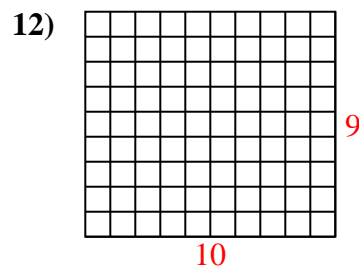
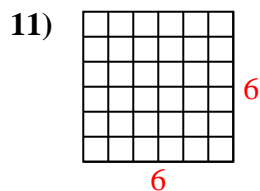
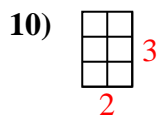
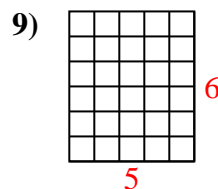
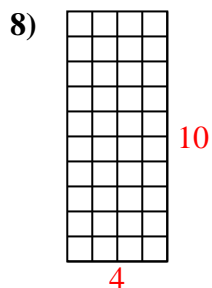
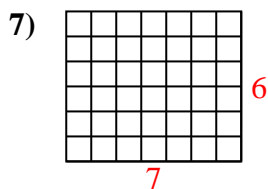
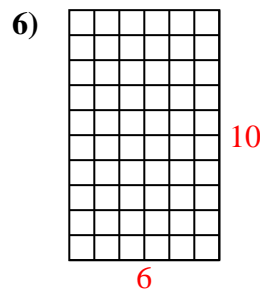
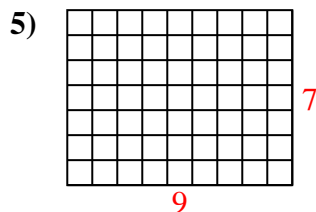
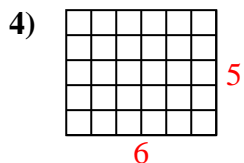
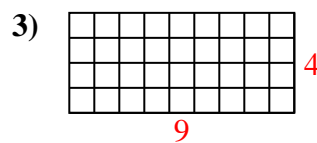
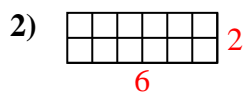
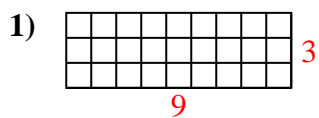


Calculez l'Aire. Chaque bloque = 1 unité (u²).



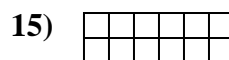
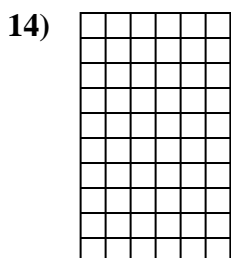
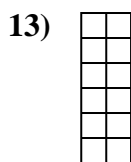
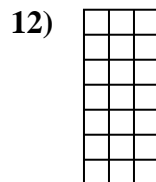
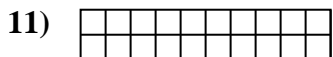
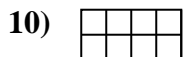
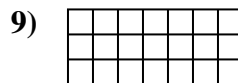
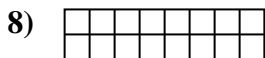
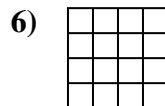
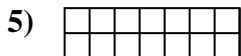
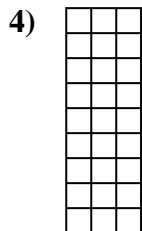

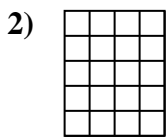
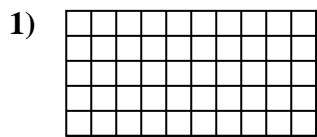
Réponses

- 1. _____
- 2. _____
- 3. _____
- 4. _____
- 5. _____
- 6. _____
- 7. _____
- 8. _____
- 9. _____
- 10. _____
- 11. _____
- 12. _____
- 13. _____
- 14. _____
- 15. _____

Calculez l'Aire. Chaque bloque = 1 unité (u^2).**Réponses**1. 27 u^2 2. 12 u^2 3. 36 u^2 4. 30 u^2 5. 63 u^2 6. 60 u^2 7. 42 u^2 8. 40 u^2 9. 30 u^2 10. 6 u^2 11. 36 u^2 12. 90 u^2 13. 16 u^2 14. 15 u^2 15. 100 u^2



Calculez l'Aire. Chaque bloque = 1 unité (u²).



Réponses

1. _____

2. _____

3. _____

4. _____

5. _____

6. _____

7. _____

8. _____

9. _____

10. _____

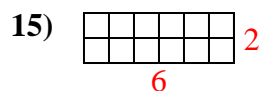
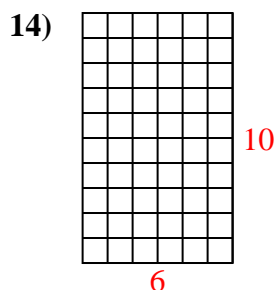
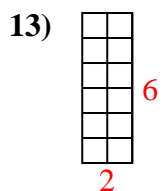
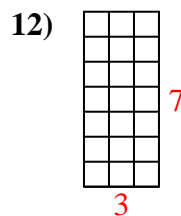
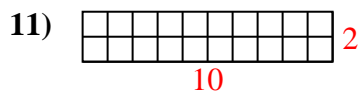
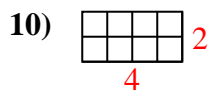
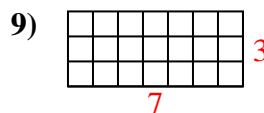
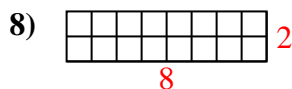
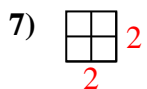
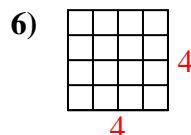
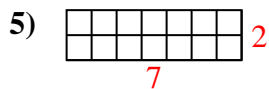
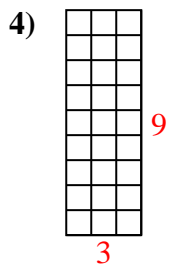
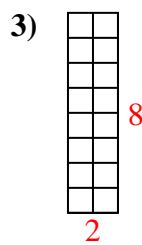
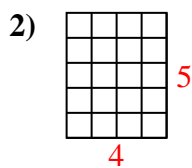
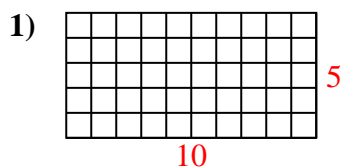
11. _____

12. _____

13. _____

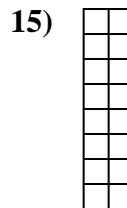

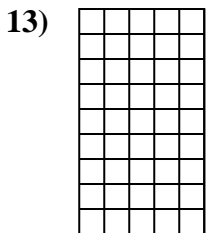
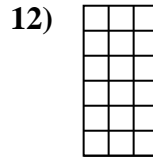
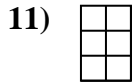
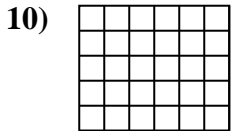

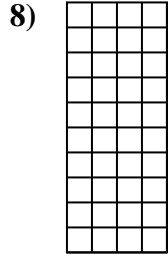


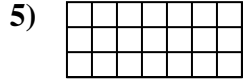
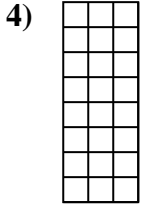
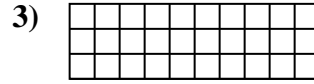
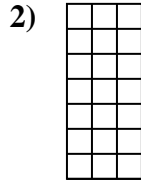

14. _____

15. _____

Calculez l'Aire. Chaque bloque = 1 unité (u^2).**Réponses**1. 50 u^2 2. 20 u^2 3. 16 u^2 4. 27 u^2 5. 14 u^2 6. 16 u^2 7. 4 u^2 8. 16 u^2 9. 21 u^2 10. 8 u^2 11. 20 u^2 12. 21 u^2 13. 12 u^2 14. 60 u^2 15. 12 u^2



Calculez l'Aire. Chaque bloque = 1 unité (u²).



Réponses

1. _____

2. _____

3. _____

4. _____

5. _____

6. _____

7. _____

8. _____

9. _____

10. _____

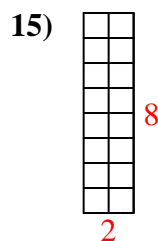
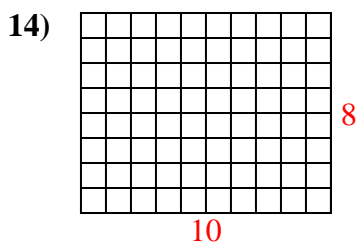
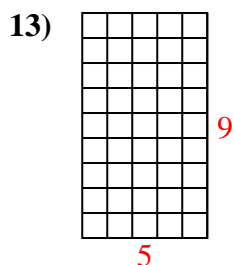
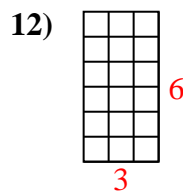
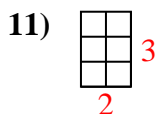
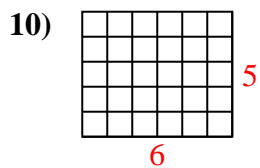
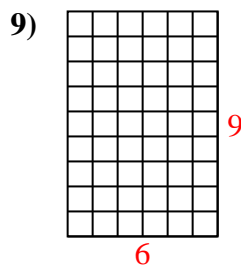
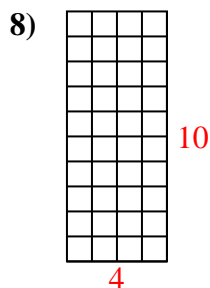
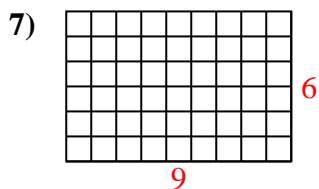
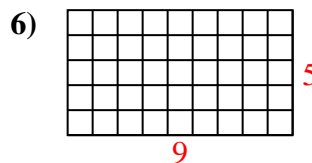
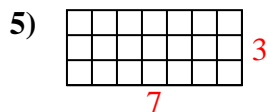
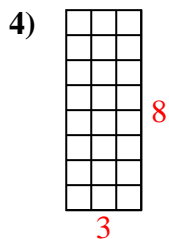
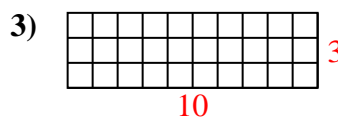
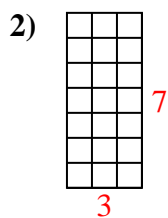
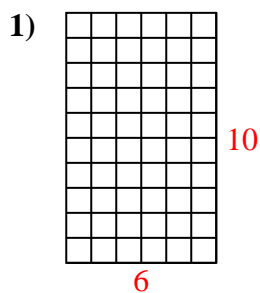
11. _____

12. _____

13. _____

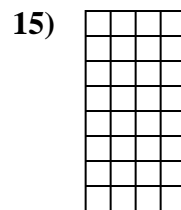
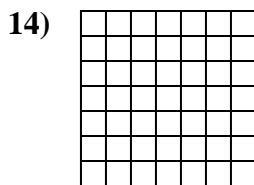

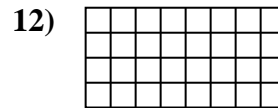
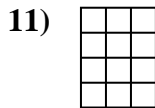
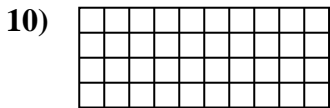
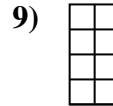
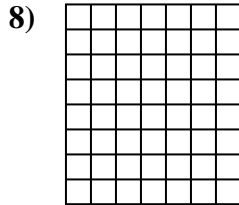
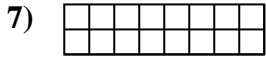

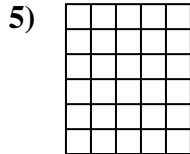
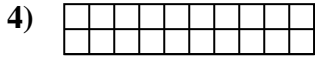
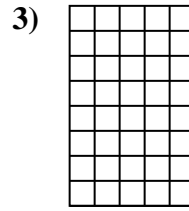
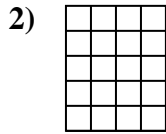
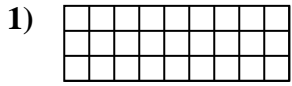
14. _____

15. _____

Calculez l'Aire. Chaque bloque = 1 unité (u^2).**Réponses**1. 60 u^2 2. 21 u^2 3. 30 u^2 4. 24 u^2 5. 21 u^2 6. 45 u^2 7. 54 u^2 8. 40 u^2 9. 54 u^2 10. 30 u^2 11. 6 u^2 12. 18 u^2 13. 45 u^2 14. 80 u^2 15. 16 u^2



Calculez l'Aire. Chaque bloque = 1 unité (u²).

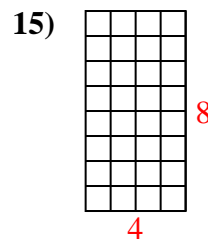
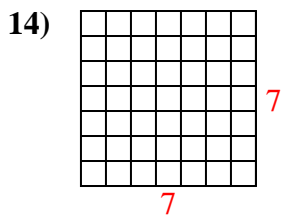
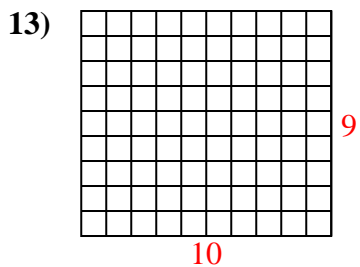
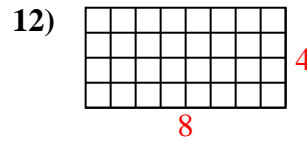
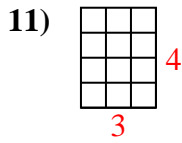
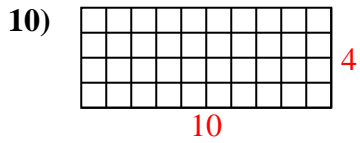
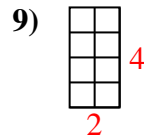
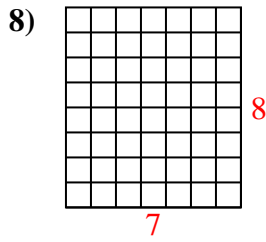
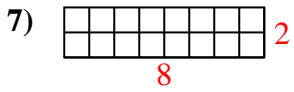
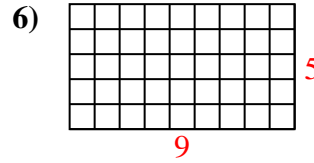
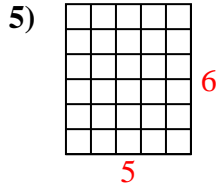
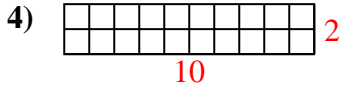
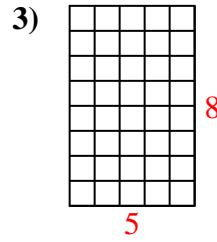
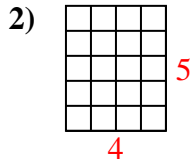
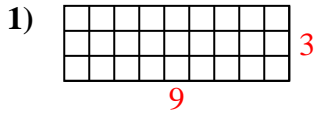


Réponses

- 1. _____
- 2. _____
- 3. _____
- 4. _____
- 5. _____
- 6. _____
- 7. _____
- 8. _____
- 9. _____
- 10. _____
- 11. _____
- 12. _____
- 13. _____
- 14. _____
- 15. _____



Calculez l'Aire. Chaque bloque = 1 unité (u²).



Réponses

1. 27 u²

2. 20 u²

3. 40 u²

4. 20 u²

5. 30 u²

6. 45 u²

7. 16 u²

8. 56 u²

9. 8 u²

10. 40 u²

11. 12 u²

12. 32 u²

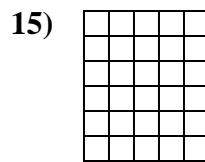
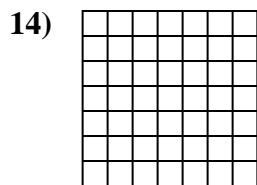
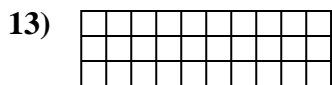

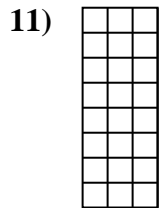
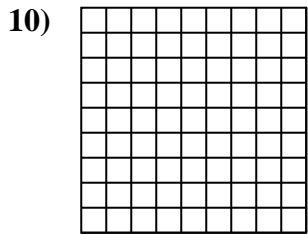
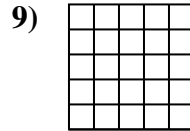
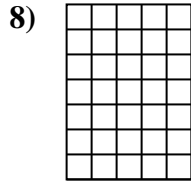
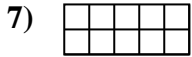
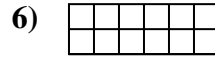
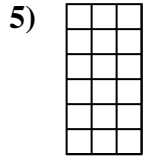
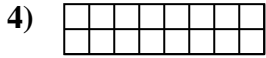
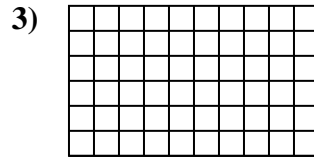
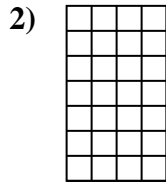
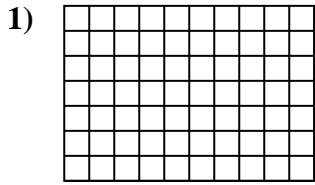
13. 90 u²

14. 49 u²

15. 32 u²

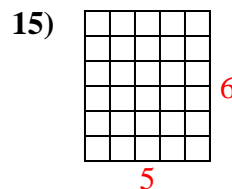
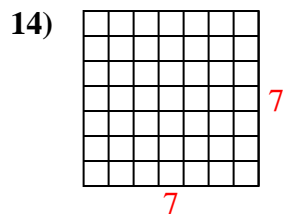
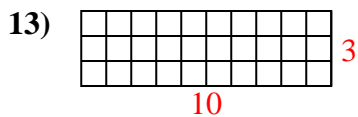
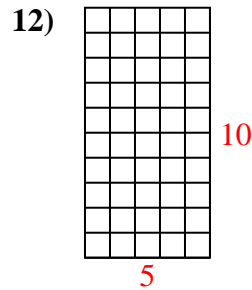
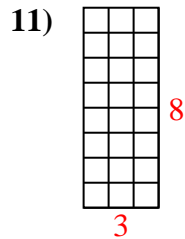
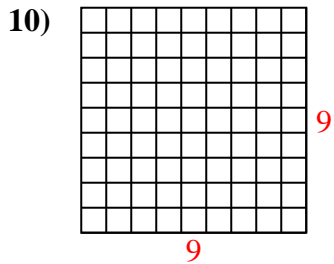
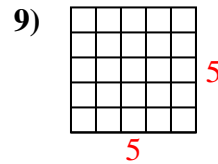
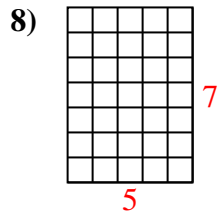
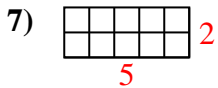
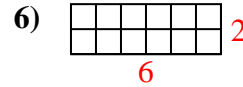
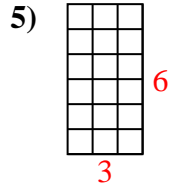
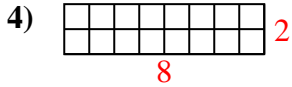
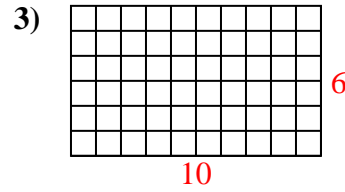
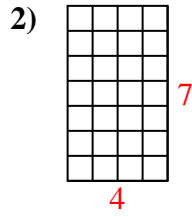
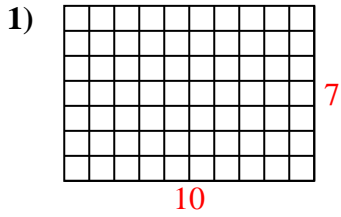


Calculez l'Aire. Chaque bloque = 1 unité (u²).



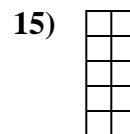
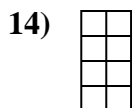
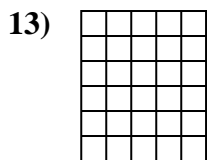
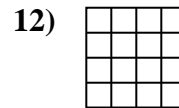
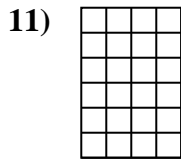
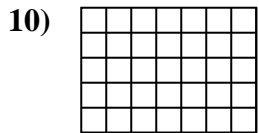
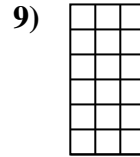


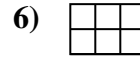
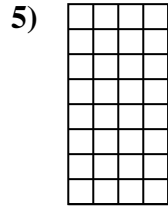
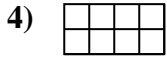
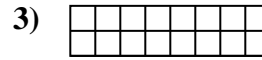
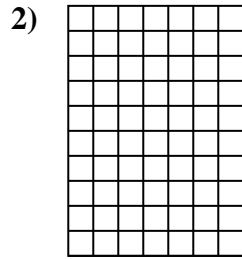
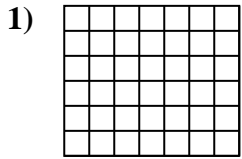
Réponses

1. _____
2. _____
3. _____
4. _____
5. _____
6. _____
7. _____
8. _____
9. _____
10. _____
11. _____
12. _____
13. _____
14. _____
15. _____

Calculez l'Aire. Chaque bloque = 1 unité (u^2).**Réponses**1. 70 u^2 2. 28 u^2 3. 60 u^2 4. 16 u^2 5. 18 u^2 6. 12 u^2 7. 10 u^2 8. 35 u^2 9. 25 u^2 10. 81 u^2 11. 24 u^2 12. 50 u^2 13. 30 u^2 14. 49 u^2 15. 30 u^2

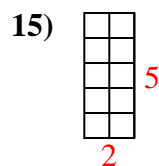
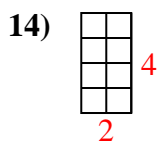
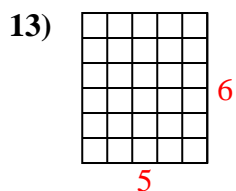
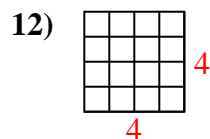
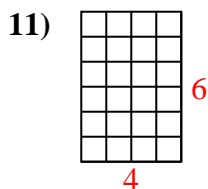
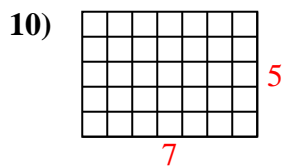
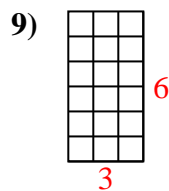
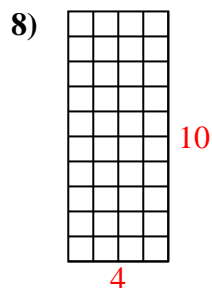
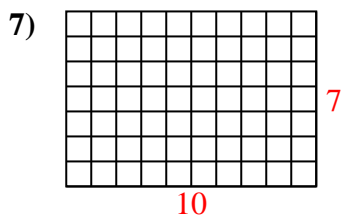
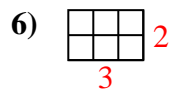
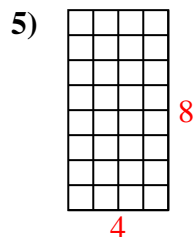
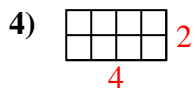
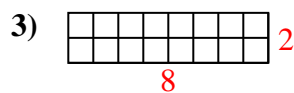
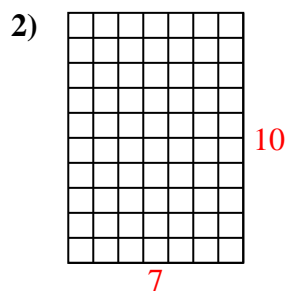
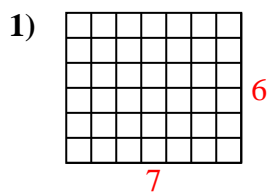


Calculez l'Aire. Chaque bloque = 1 unité (u²).




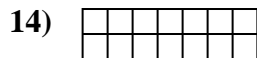
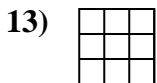
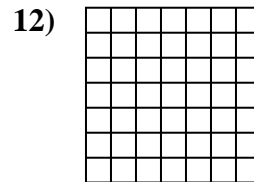
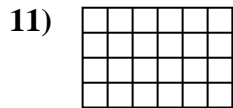
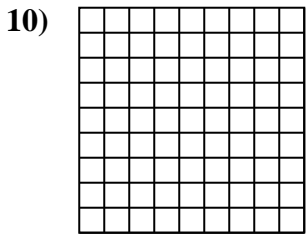
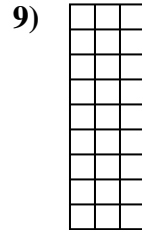
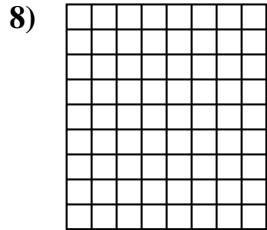
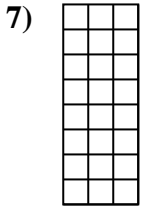
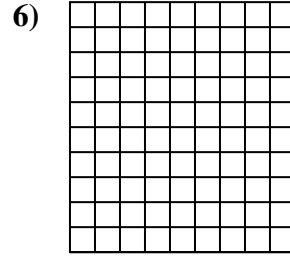
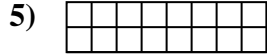
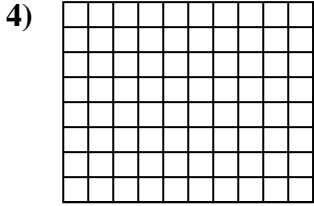
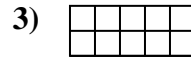
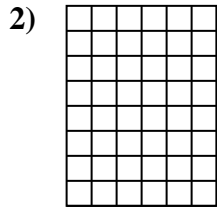
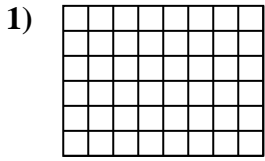
Réponses

1. _____
2. _____
3. _____
4. _____
5. _____
6. _____
7. _____
8. _____
9. _____
10. _____
11. _____
12. _____
13. _____
14. _____
15. _____

Calculez l'Aire. Chaque bloque = 1 unité (u^2).**Réponses**1. 42 u^2 2. 70 u^2 3. 16 u^2 4. 8 u^2 5. 32 u^2 6. 6 u^2 7. 70 u^2 8. 40 u^2 9. 18 u^2 10. 35 u^2 11. 24 u^2 12. 16 u^2 13. 30 u^2 14. 8 u^2 15. 10 u^2



Calculez l'Aire. Chaque bloque = 1 unité (u²).

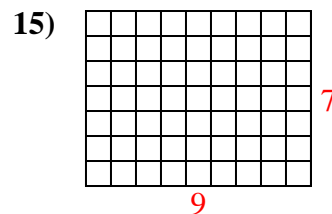
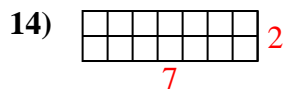
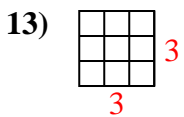
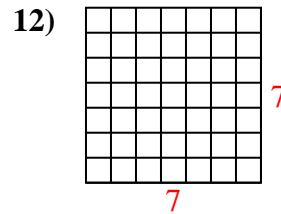
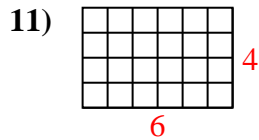
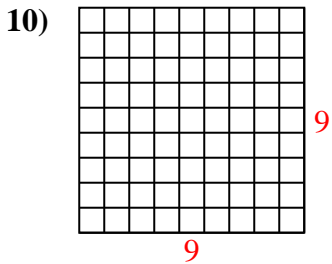
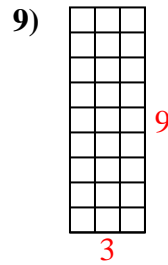
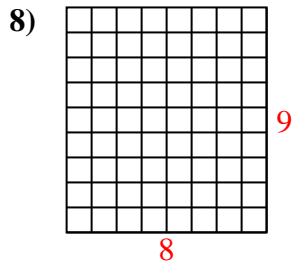
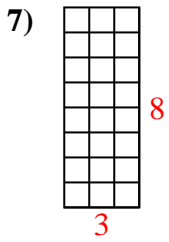
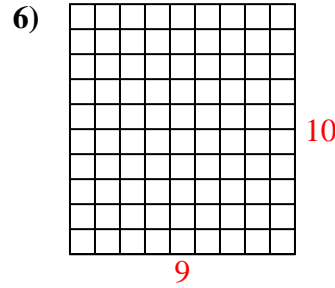
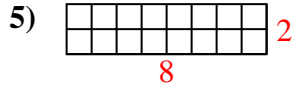
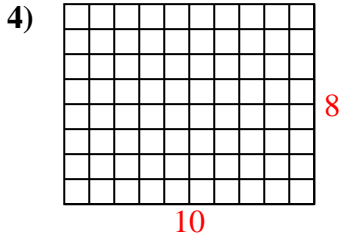
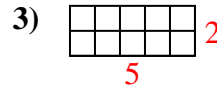
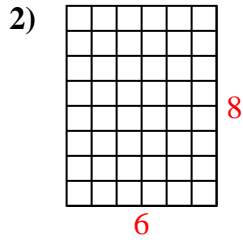
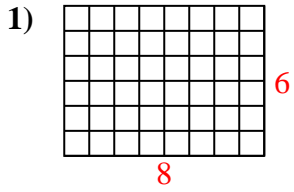


Réponses

- 1. _____
- 2. _____
- 3. _____
- 4. _____
- 5. _____
- 6. _____
- 7. _____
- 8. _____
- 9. _____
- 10. _____
- 11. _____
- 12. _____
- 13. _____
- 14. _____
- 15. _____



Calculez l'Aire. Chaque bloque = 1 unité (u²).



Réponses

1. 48 u²

2. 48 u²

3. 10 u²

4. 80 u²

5. 16 u²

6. 90 u²

7. 24 u²

8. 72 u²

9. 27 u²

10. 81 u²

11. 24 u²

12. 49 u²

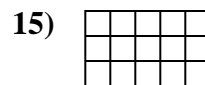
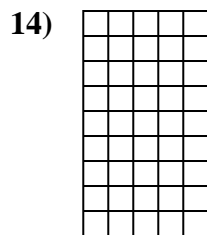
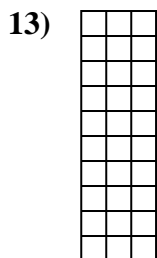
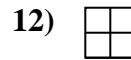
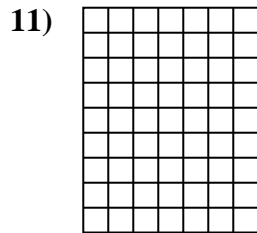
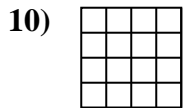
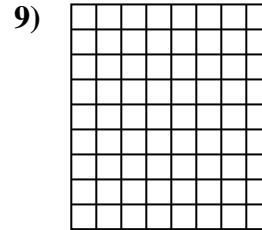

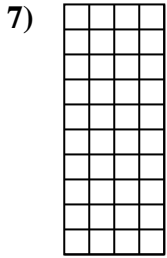

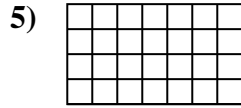
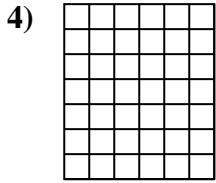
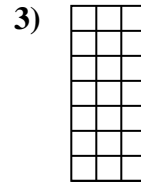
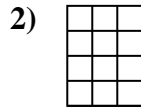
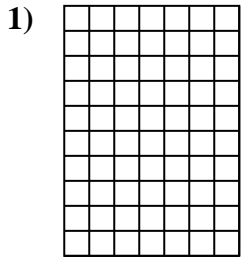
13. 9 u²

14. 14 u²

15. 63 u²

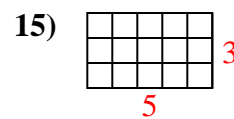
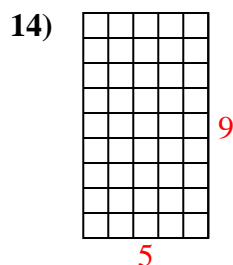
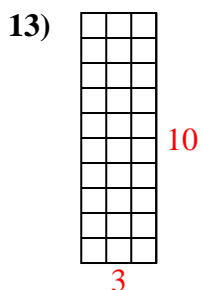
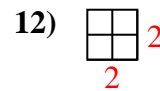
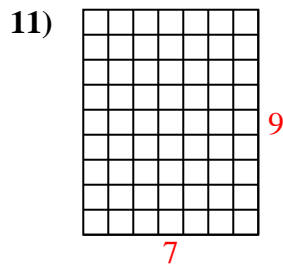
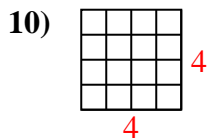
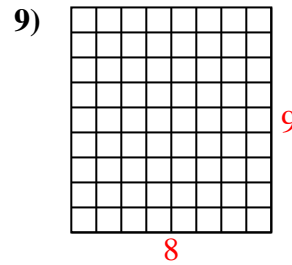
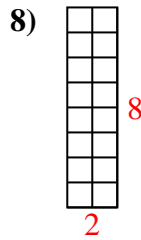
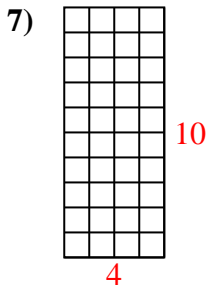
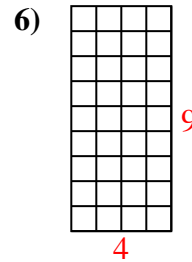
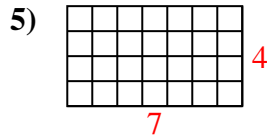
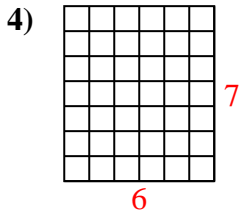
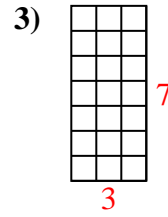
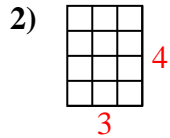
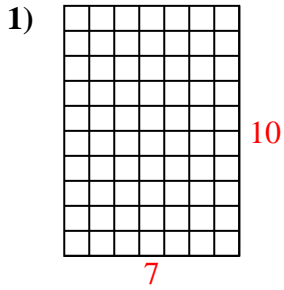


Calculez l'Aire. Chaque bloque = 1 unité (u²).



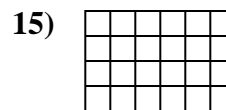
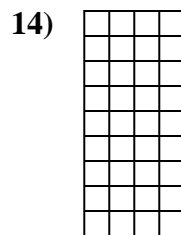
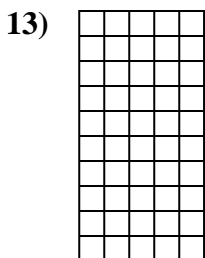
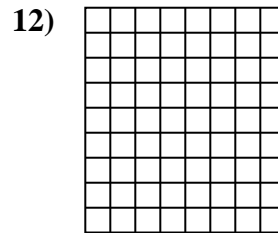
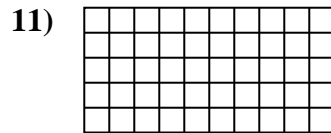
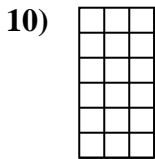
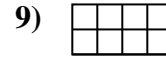

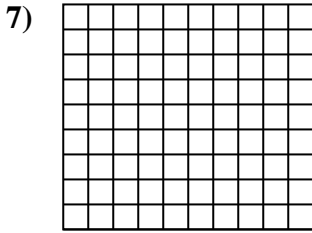
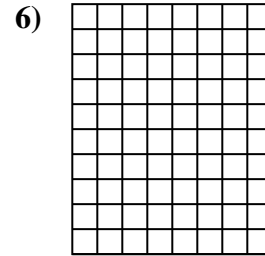
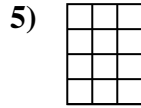
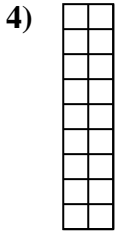
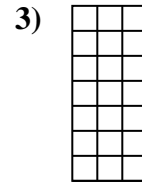
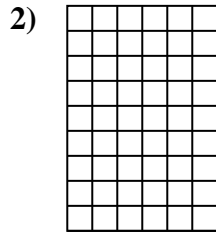
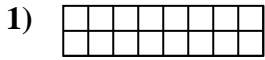
Réponses

- 1. _____
- 2. _____
- 3. _____
- 4. _____
- 5. _____
- 6. _____
- 7. _____
- 8. _____
- 9. _____
- 10. _____
- 11. _____
- 12. _____
- 13. _____
- 14. _____
- 15. _____

Calculez l'Aire. Chaque bloque = 1 unité (u^2).**Réponses**1. 70 u^2 2. 12 u^2 3. 21 u^2 4. 42 u^2 5. 28 u^2 6. 36 u^2 7. 40 u^2 8. 16 u^2 9. 72 u^2 10. 16 u^2 11. 63 u^2 12. 4 u^2 13. 30 u^2 14. 45 u^2 15. 15 u^2



Calculez l'Aire. Chaque bloque = 1 unité (u²).



Réponses

1. _____

2. _____

3. _____

4. _____

5. _____

6. _____

7. _____

8. _____

9. _____

10. _____

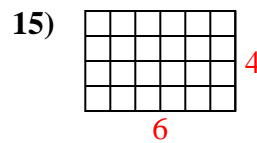
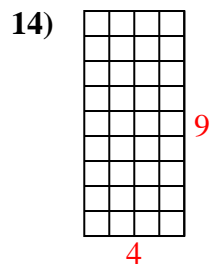
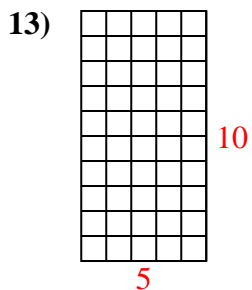
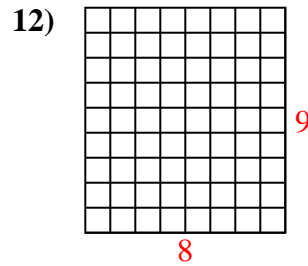
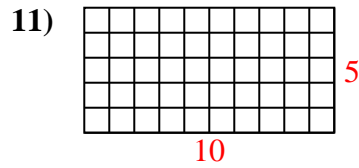
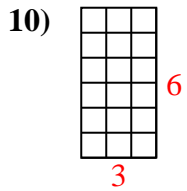
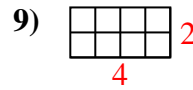
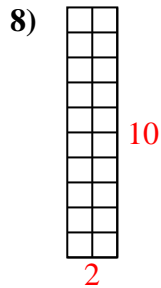
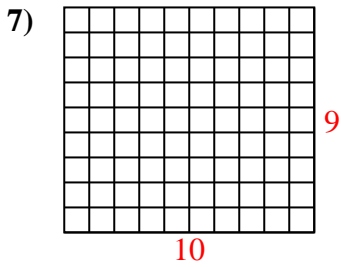
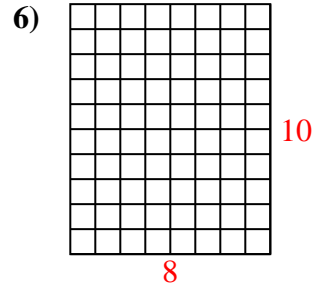
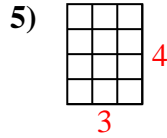
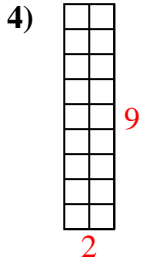
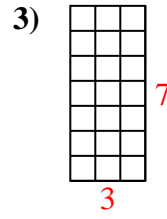
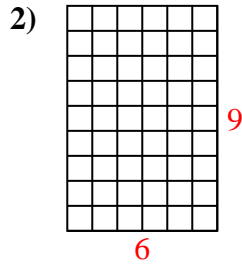
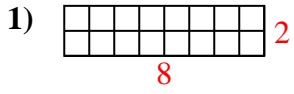
11. _____

12. _____

13. _____

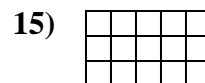

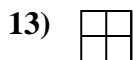
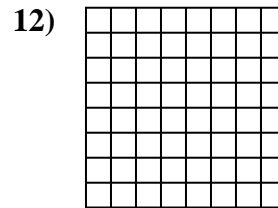
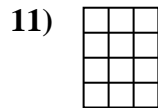
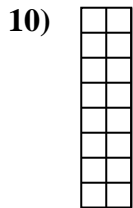
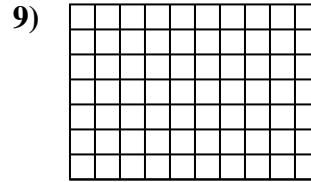
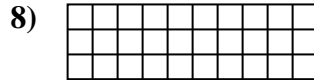
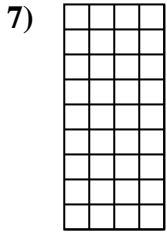
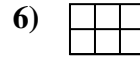
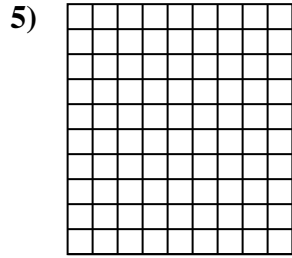
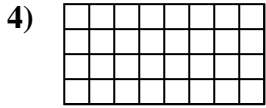
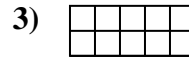
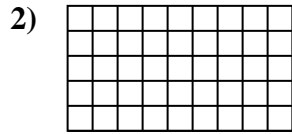
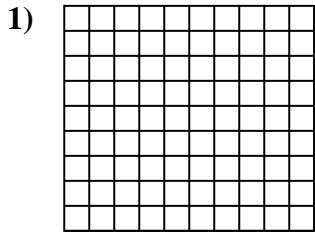
14. _____

15. _____

Calculez l'Aire. Chaque bloque = 1 unité (u^2).**Réponses**1. 16 u^2 2. 54 u^2 3. 21 u^2 4. 18 u^2 5. 12 u^2 6. 80 u^2 7. 90 u^2 8. 20 u^2 9. 8 u^2 10. 18 u^2 11. 50 u^2 12. 72 u^2 13. 50 u^2 14. 36 u^2 15. 24 u^2

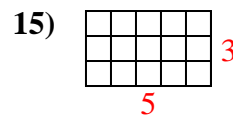
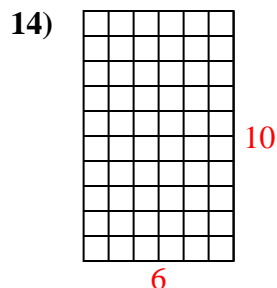
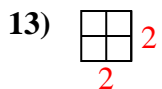
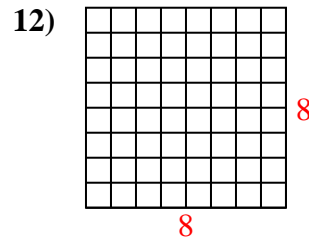
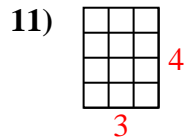
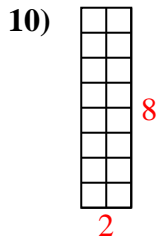
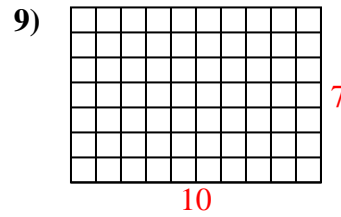
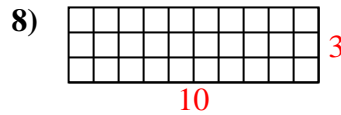
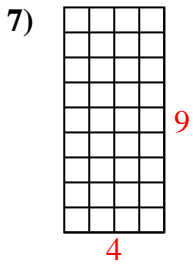
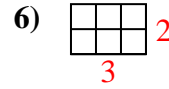
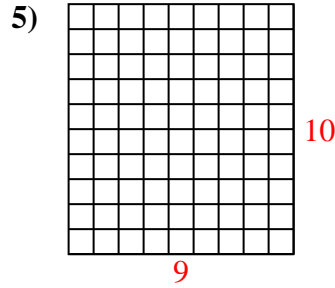
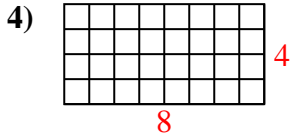
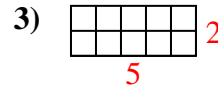
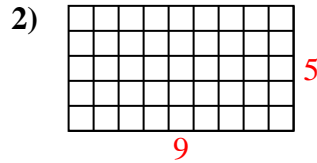
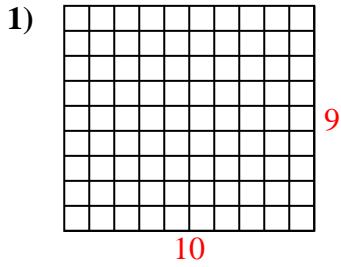


Calculez l'Aire. Chaque bloque = 1 unité (u²).



Réponses

1. _____
2. _____
3. _____
4. _____
5. _____
6. _____
7. _____
8. _____
9. _____
10. _____
11. _____
12. _____
13. _____
14. _____
15. _____

Calculez l'Aire. Chaque bloque = 1 unité (u^2).**Réponses**1. 90 u^2 2. 45 u^2 3. 10 u^2 4. 32 u^2 5. 90 u^2 6. 6 u^2 7. 36 u^2 8. 30 u^2 9. 70 u^2 10. 16 u^2 11. 12 u^2 12. 64 u^2 13. 4 u^2 14. 60 u^2 15. 15 u^2