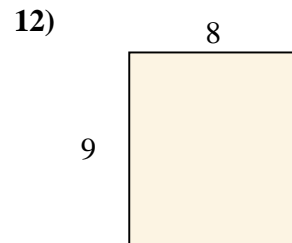
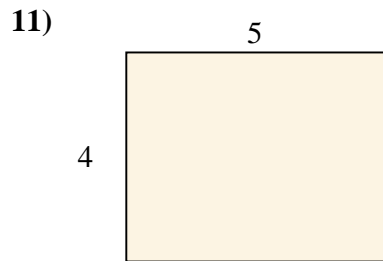
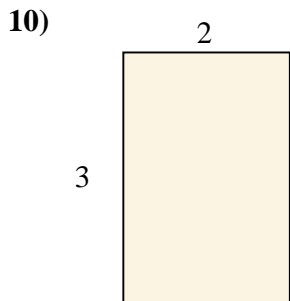
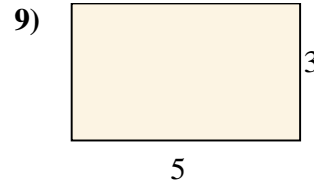

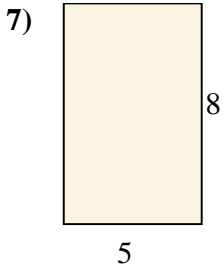
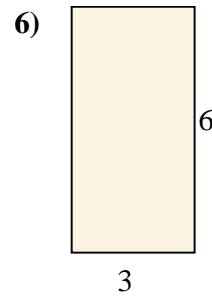
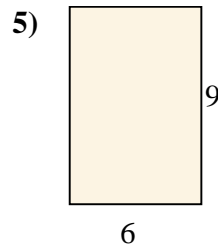
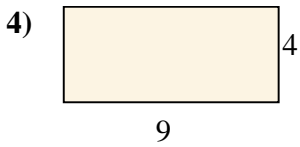
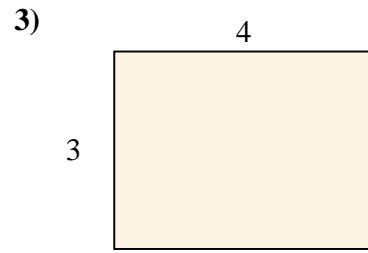
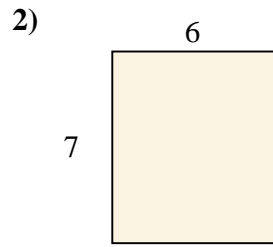
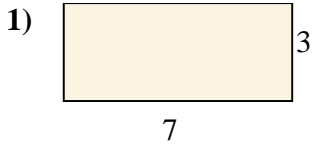




calculez l'aire de chaque rectangle (en cm<sup>2</sup>)

**Réponses**

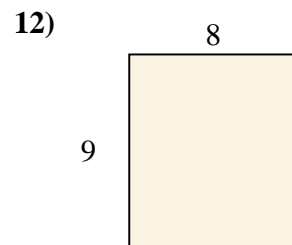
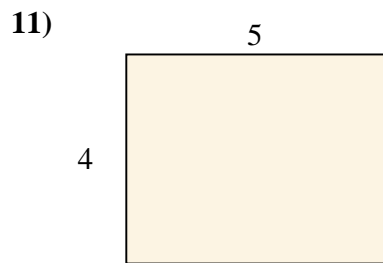
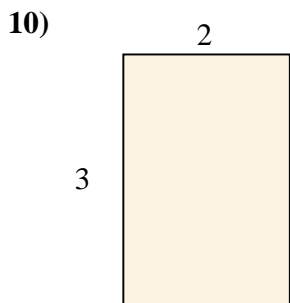
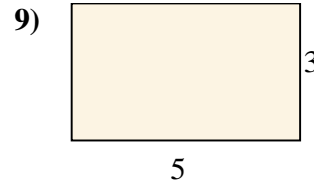

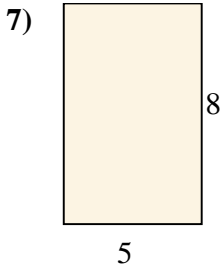
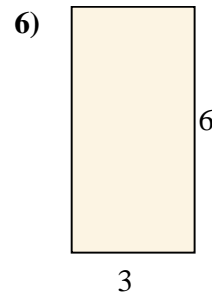
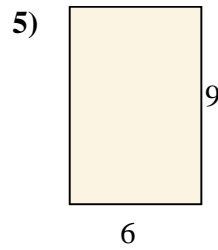
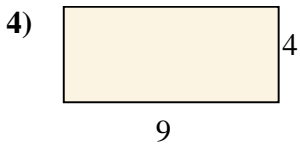
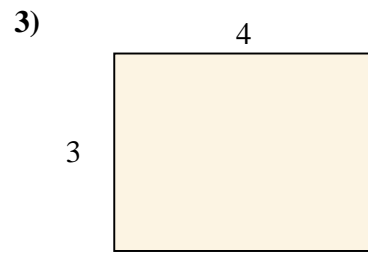
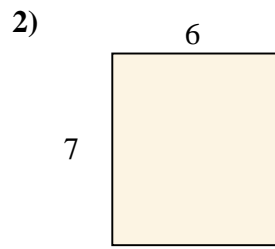
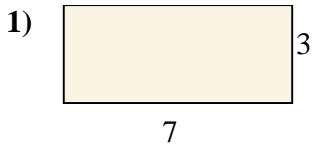


- 1. \_\_\_\_\_
- 2. \_\_\_\_\_
- 3. \_\_\_\_\_
- 4. \_\_\_\_\_
- 5. \_\_\_\_\_
- 6. \_\_\_\_\_
- 7. \_\_\_\_\_
- 8. \_\_\_\_\_
- 9. \_\_\_\_\_
- 10. \_\_\_\_\_
- 11. \_\_\_\_\_
- 12. \_\_\_\_\_



calculez l'aire de chaque rectangle (en cm<sup>2</sup>)

**Réponses**



- 1. 21
- 2. 42
- 3. 12
- 4. 36
- 5. 54
- 6. 18
- 7. 40
- 8. 14
- 9. 15
- 10. 6
- 11. 20
- 12. 72