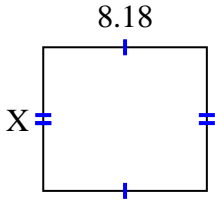




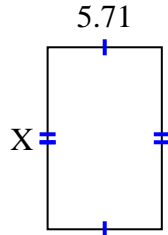
Trouvez la valeur de X pour chaque chiffre. Chaque chiffre est en centimètres (cm). Pas à l'échelle.

Réponses

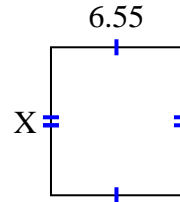
1) area = $58,7324 \text{ cm}^2$



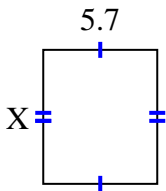
2) area = $51,961 \text{ cm}^2$



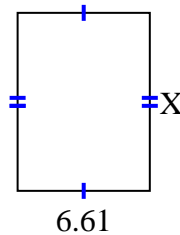
3) area = $48,47 \text{ cm}^2$



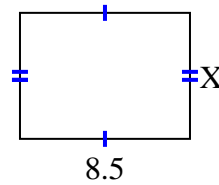
4) area = $38,19 \text{ cm}^2$



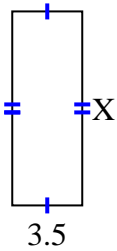
5) area = $58,829 \text{ cm}^2$



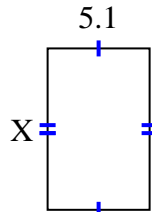
6) area = $53,55 \text{ cm}^2$



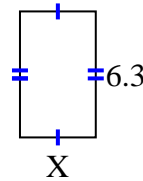
7) area = $33,95 \text{ cm}^2$



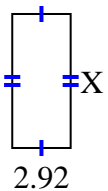
8) area = $41,157 \text{ cm}^2$



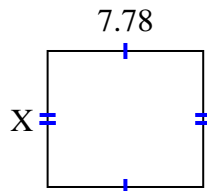
9) area = $23,877 \text{ cm}^2$



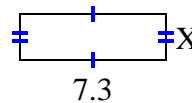
10) area = $19,564 \text{ cm}^2$



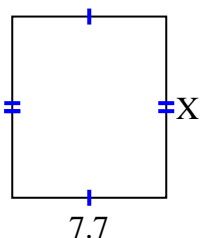
11) area = $52,904 \text{ cm}^2$



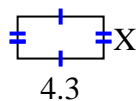
12) area = $16,79 \text{ cm}^2$



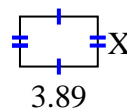
13) area = $69,762 \text{ cm}^2$



14) area = $9,03 \text{ cm}^2$



15) area = $9,725 \text{ cm}^2$

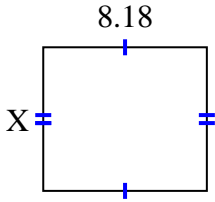


1. _____
2. _____
3. _____
4. _____
5. _____
6. _____
7. _____
8. _____
9. _____
10. _____
11. _____
12. _____
13. _____
14. _____
15. _____

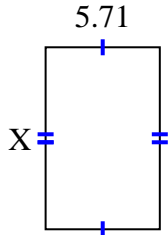


Trouvez la valeur de X pour chaque chiffre. Chaque chiffre est en centimètres (cm). Pas à l'échelle.

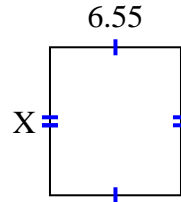
1) area = $58,7324 \text{ cm}^2$



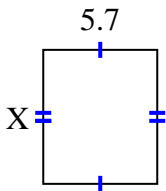
2) area = $51,961 \text{ cm}^2$



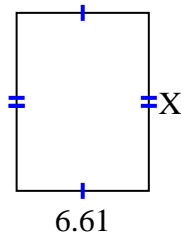
3) area = $48,47 \text{ cm}^2$



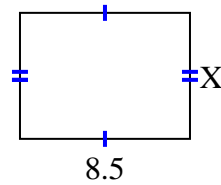
4) area = $38,19 \text{ cm}^2$



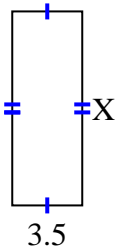
5) area = $58,829 \text{ cm}^2$



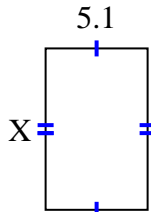
6) area = $53,55 \text{ cm}^2$



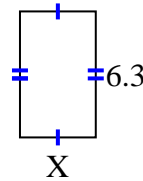
7) area = $33,95 \text{ cm}^2$



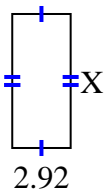
8) area = $41,157 \text{ cm}^2$



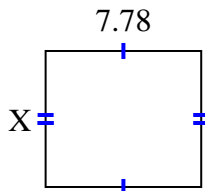
9) area = $23,877 \text{ cm}^2$



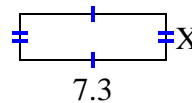
10) area = $19,564 \text{ cm}^2$



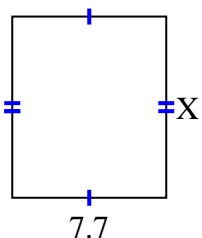
11) area = $52,904 \text{ cm}^2$



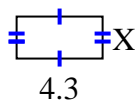
12) area = $16,79 \text{ cm}^2$



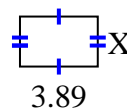
13) area = $69,762 \text{ cm}^2$



14) area = $9,03 \text{ cm}^2$



15) area = $9,725 \text{ cm}^2$



Réponses

1. 7.18

2. 9.1

3. 7.4

4. 6.7

5. 8.9

6. 6.3

7. 9.7

8. 8.07

9. 3.79

10. 6.7

11. 6.8

12. 2.3

13. 9.06

14. 2.1

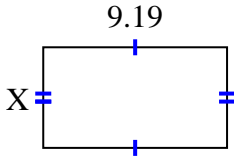
15. 2.5



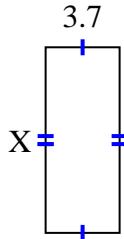
Trouvez la valeur de X pour chaque chiffre. Chaque chiffre est en centimètres (cm). Pas à l'échelle.

Réponses

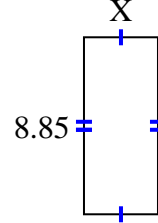
1) area = $46,2257 \text{ cm}^2$



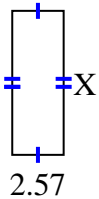
2) area = $34,336 \text{ cm}^2$



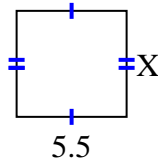
3) area = $32,745 \text{ cm}^2$



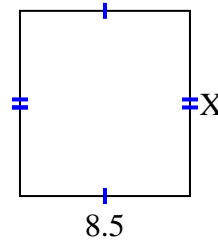
4) area = $18,504 \text{ cm}^2$



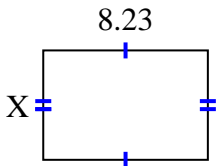
5) area = $29,15 \text{ cm}^2$



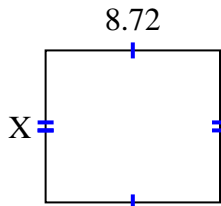
6) area = $78,71 \text{ cm}^2$



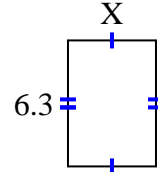
7) area = $45,0181 \text{ cm}^2$



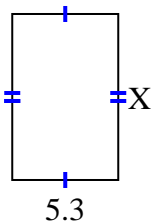
8) area = $66,272 \text{ cm}^2$



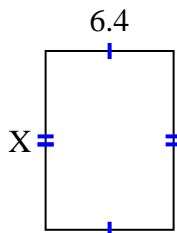
9) area = $27,72 \text{ cm}^2$



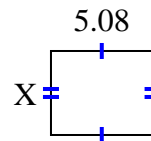
10) area = $43,99 \text{ cm}^2$



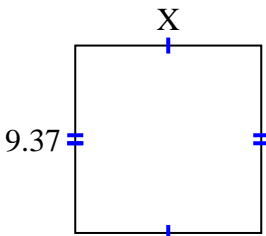
11) area = $57,216 \text{ cm}^2$



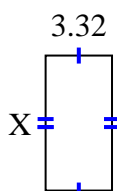
12) area = $21,336 \text{ cm}^2$



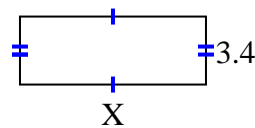
13) area = $87,141 \text{ cm}^2$



14) area = $22,41 \text{ cm}^2$



15) area = $31,62 \text{ cm}^2$

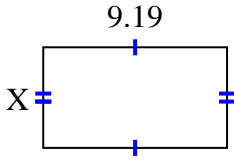


1. _____
2. _____
3. _____
4. _____
5. _____
6. _____
7. _____
8. _____
9. _____
10. _____
11. _____
12. _____
13. _____
14. _____
15. _____

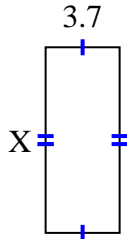


Trouvez la valeur de X pour chaque chiffre. Chaque chiffre est en centimètres (cm). Pas à l'échelle.

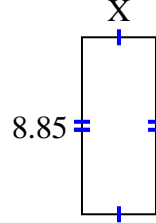
1) area = $46,2257 \text{ cm}^2$



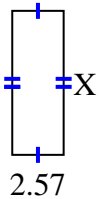
2) area = $34,336 \text{ cm}^2$



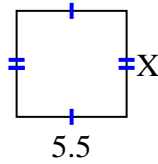
3) area = $32,745 \text{ cm}^2$



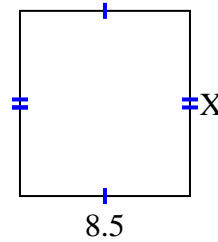
4) area = $18,504 \text{ cm}^2$



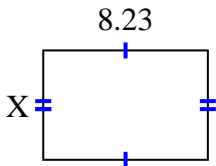
5) area = $29,15 \text{ cm}^2$



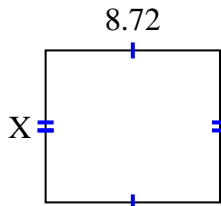
6) area = $78,71 \text{ cm}^2$



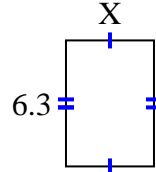
7) area = $45,0181 \text{ cm}^2$



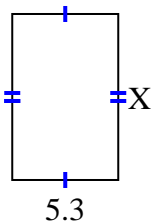
8) area = $66,272 \text{ cm}^2$



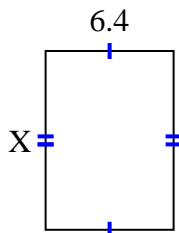
9) area = $27,72 \text{ cm}^2$



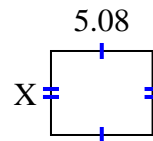
10) area = $43,99 \text{ cm}^2$



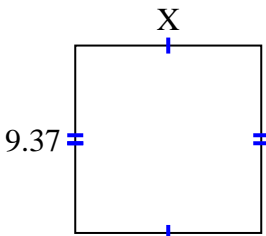
11) area = $57,216 \text{ cm}^2$



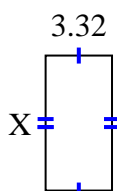
12) area = $21,336 \text{ cm}^2$



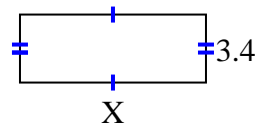
13) area = $87,141 \text{ cm}^2$



14) area = $22,41 \text{ cm}^2$



15) area = $31,62 \text{ cm}^2$



Réponses

1. 5.03

2. 9.28

3. 3.7

4. 7.2

5. 5.3

6. 9.26

7. 5.47

8. 7.6

9. 4.4

10. 8.3

11. 8.94

12. 4.2

13. 9.3

14. 6.75

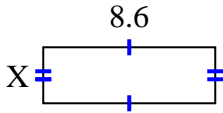
15. 9.3



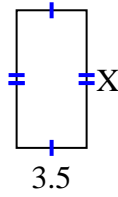
Trouvez la valeur de X pour chaque chiffre. Chaque chiffre est en centimètres (cm). Pas à l'échelle.

Réponses

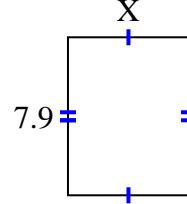
1) area = $24,08 \text{ cm}^2$



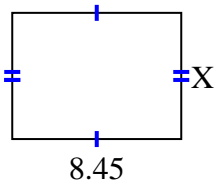
2) area = $24,08 \text{ cm}^2$



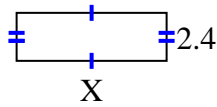
3) area = $47,795 \text{ cm}^2$



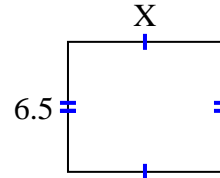
4) area = $53,3195 \text{ cm}^2$



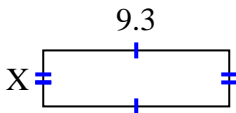
5) area = 18 cm^2



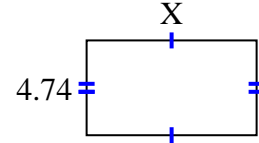
6) area = $50,05 \text{ cm}^2$



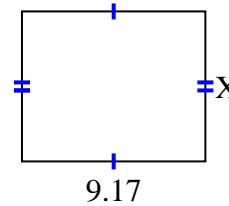
7) area = $26,04 \text{ cm}^2$



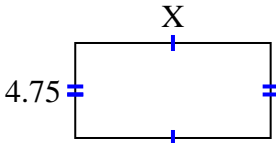
8) area = $40,29 \text{ cm}^2$



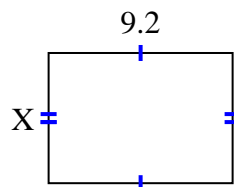
9) area = $68,775 \text{ cm}^2$



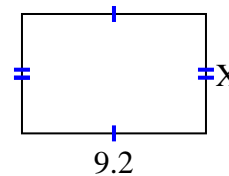
10) area = $46,4075 \text{ cm}^2$



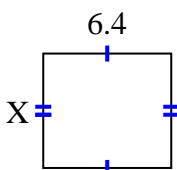
11) area = $59,892 \text{ cm}^2$



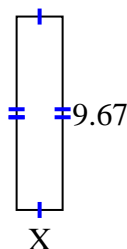
12) area = $54,924 \text{ cm}^2$



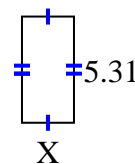
13) area = $36,608 \text{ cm}^2$



14) area = $22,241 \text{ cm}^2$



15) area = $13,806 \text{ cm}^2$

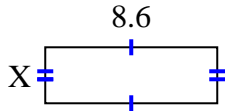


1. _____
2. _____
3. _____
4. _____
5. _____
6. _____
7. _____
8. _____
9. _____
10. _____
11. _____
12. _____
13. _____
14. _____
15. _____

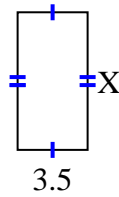


Trouvez la valeur de X pour chaque chiffre. Chaque chiffre est en centimètres (cm). Pas à l'échelle.

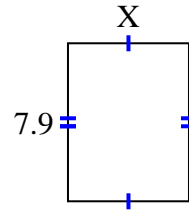
1) area = $24,08 \text{ cm}^2$



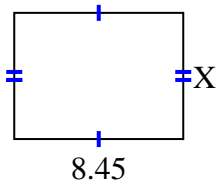
2) area = $24,08 \text{ cm}^2$



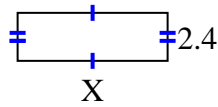
3) area = $47,795 \text{ cm}^2$



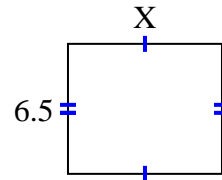
4) area = $53,3195 \text{ cm}^2$



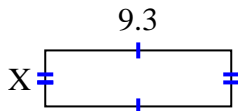
5) area = 18 cm^2



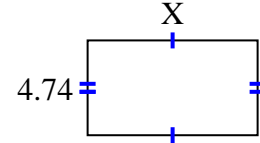
6) area = $50,05 \text{ cm}^2$



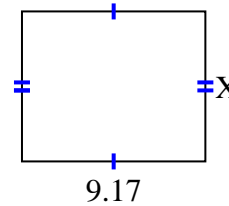
7) area = $26,04 \text{ cm}^2$



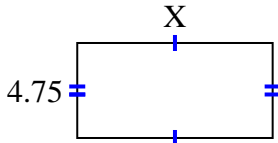
8) area = $40,29 \text{ cm}^2$



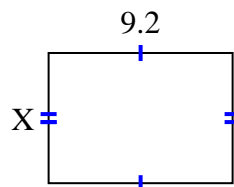
9) area = $68,775 \text{ cm}^2$



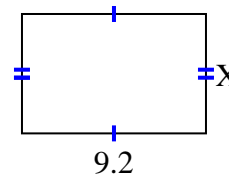
10) area = $46,4075 \text{ cm}^2$



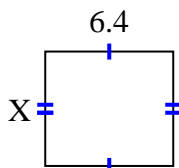
11) area = $59,892 \text{ cm}^2$



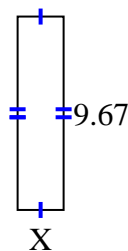
12) area = $54,924 \text{ cm}^2$



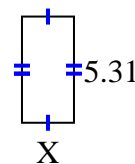
13) area = $36,608 \text{ cm}^2$



14) area = $22,241 \text{ cm}^2$



15) area = $13,806 \text{ cm}^2$



Réponses

1. 2.8

2. 6.88

3. 6.05

4. 6.31

5. 7.5

6. 7.7

7. 2.8

8. 8.5

9. 7.5

10. 9.77

11. 6.51

12. 5.97

13. 5.72

14. 2.3

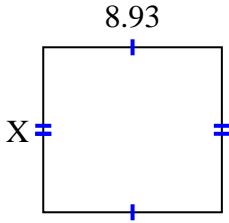
15. 2.6



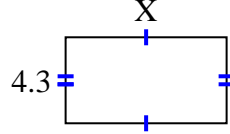
Trouvez la valeur de X pour chaque chiffre. Chaque chiffre est en centimètres (cm). Pas à l'échelle.

Réponses

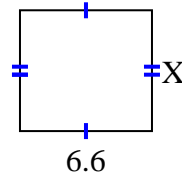
1) area = $73,6725 \text{ cm}^2$



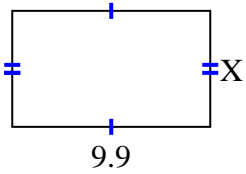
2) area = $34,615 \text{ cm}^2$



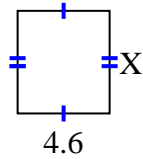
3) area = $39,864 \text{ cm}^2$



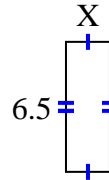
4) area = $57,42 \text{ cm}^2$



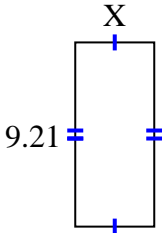
5) area = $23,598 \text{ cm}^2$



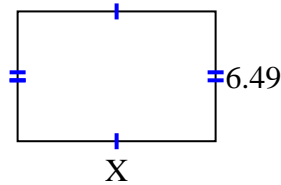
6) area = $14,3 \text{ cm}^2$



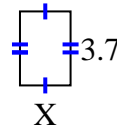
7) area = $36,3795 \text{ cm}^2$



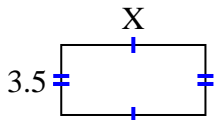
8) area = $64,251 \text{ cm}^2$



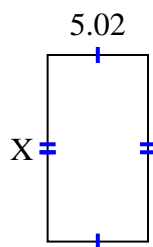
9) area = $9,361 \text{ cm}^2$



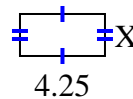
10) area = $25,235 \text{ cm}^2$



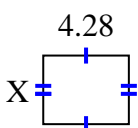
11) area = $46,8366 \text{ cm}^2$



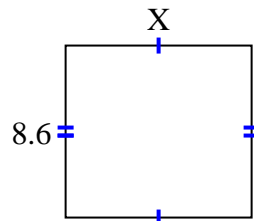
12) area = $8,925 \text{ cm}^2$



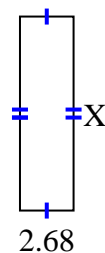
13) area = $14,6804 \text{ cm}^2$



14) area = $79,98 \text{ cm}^2$



15) area = $25,996 \text{ cm}^2$

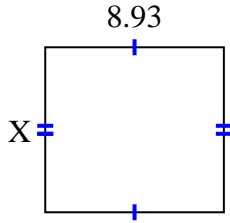


1. _____
2. _____
3. _____
4. _____
5. _____
6. _____
7. _____
8. _____
9. _____
10. _____
11. _____
12. _____
13. _____
14. _____
15. _____

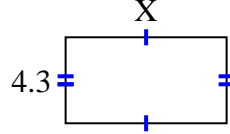


Trouvez la valeur de X pour chaque chiffre. Chaque chiffre est en centimètres (cm). Pas à l'échelle.

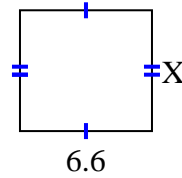
1) area = $73,6725 \text{ cm}^2$



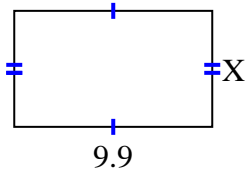
2) area = $34,615 \text{ cm}^2$



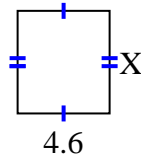
3) area = $39,864 \text{ cm}^2$



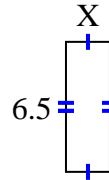
4) area = $57,42 \text{ cm}^2$



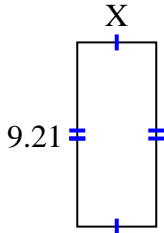
5) area = $23,598 \text{ cm}^2$



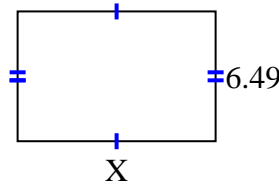
6) area = $14,3 \text{ cm}^2$



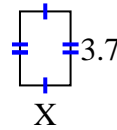
7) area = $36,3795 \text{ cm}^2$



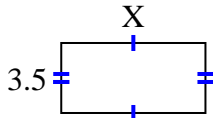
8) area = $64,251 \text{ cm}^2$



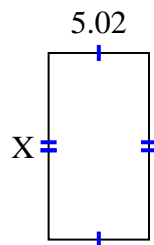
9) area = $9,361 \text{ cm}^2$



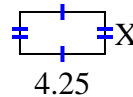
10) area = $25,235 \text{ cm}^2$



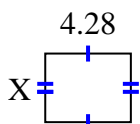
11) area = $46,8366 \text{ cm}^2$



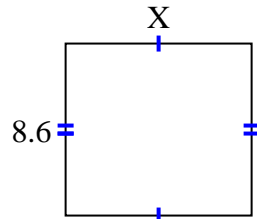
12) area = $8,925 \text{ cm}^2$



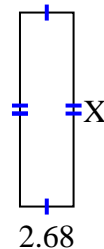
13) area = $14,6804 \text{ cm}^2$



14) area = $79,98 \text{ cm}^2$



15) area = $25,996 \text{ cm}^2$



Réponses

1. 8.25

2. 8.05

3. 6.04

4. 5.8

5. 5.13

6. 2.2

7. 3.95

8. 9.9

9. 2.53

10. 7.21

11. 9.33

12. 2.1

13. 3.43

14. 9.3

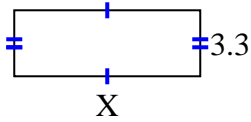
15. 9.7



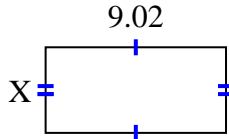
Trouvez la valeur de X pour chaque chiffre. Chaque chiffre est en centimètres (cm). Pas à l'échelle.

Réponses

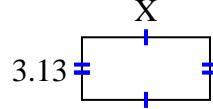
1) area = $30,69 \text{ cm}^2$



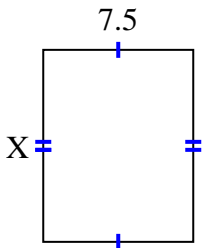
2) area = $38,6056 \text{ cm}^2$



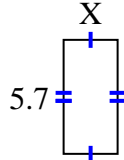
3) area = $20,032 \text{ cm}^2$



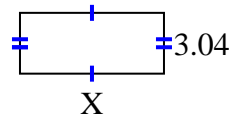
4) area = 72 cm^2



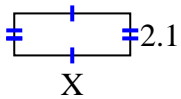
5) area = $15,39 \text{ cm}^2$



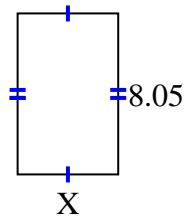
6) area = $21,888 \text{ cm}^2$



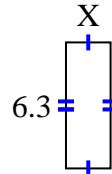
7) area = $12,18 \text{ cm}^2$



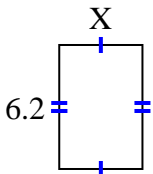
8) area = $40,4915 \text{ cm}^2$



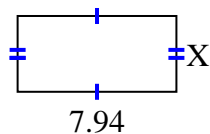
9) area = $14,049 \text{ cm}^2$



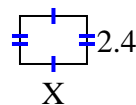
10) area = $25,792 \text{ cm}^2$



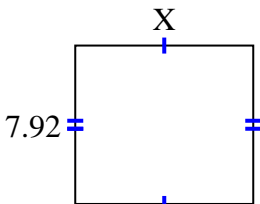
11) area = $30,0926 \text{ cm}^2$



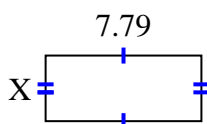
12) area = $8,04 \text{ cm}^2$



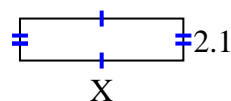
13) area = $70,488 \text{ cm}^2$



14) area = $25,5512 \text{ cm}^2$



15) area = $17,157 \text{ cm}^2$

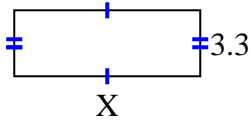


1. _____
2. _____
3. _____
4. _____
5. _____
6. _____
7. _____
8. _____
9. _____
10. _____
11. _____
12. _____
13. _____
14. _____
15. _____

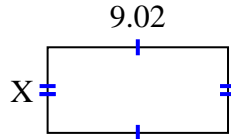


Trouvez la valeur de X pour chaque chiffre. Chaque chiffre est en centimètres (cm). Pas à l'échelle.

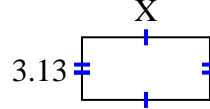
1) area = $30,69 \text{ cm}^2$



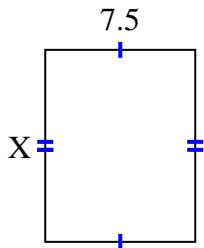
2) area = $38,6056 \text{ cm}^2$



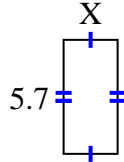
3) area = $20,032 \text{ cm}^2$



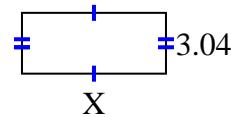
4) area = 72 cm^2



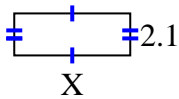
5) area = $15,39 \text{ cm}^2$



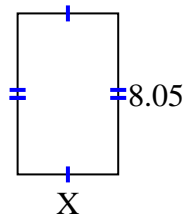
6) area = $21,888 \text{ cm}^2$



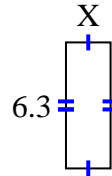
7) area = $12,18 \text{ cm}^2$



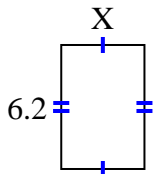
8) area = $40,4915 \text{ cm}^2$



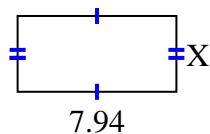
9) area = $14,049 \text{ cm}^2$



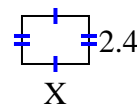
10) area = $25,792 \text{ cm}^2$



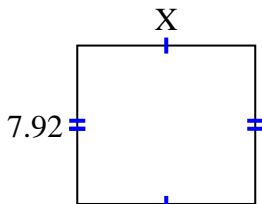
11) area = $30,0926 \text{ cm}^2$



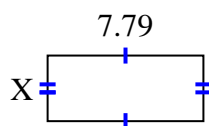
12) area = $8,04 \text{ cm}^2$



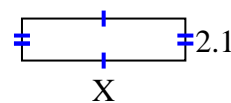
13) area = $70,488 \text{ cm}^2$



14) area = $25,5512 \text{ cm}^2$



15) area = $17,157 \text{ cm}^2$



Réponses

1. 9.3

2. 4.28

3. 6.4

4. 9.6

5. 2.7

6. 7.2

7. 5.8

8. 5.03

9. 2.23

10. 4.16

11. 3.79

12. 3.35

13. 8.9

14. 3.28

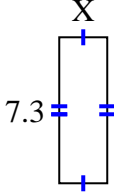
15. 8.17



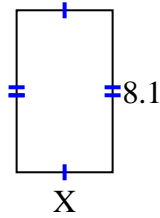
Trouvez la valeur de X pour chaque chiffre. Chaque chiffre est en centimètres (cm). Pas à l'échelle.

Réponses

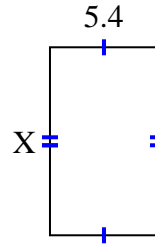
1) area = $17,52 \text{ cm}^2$



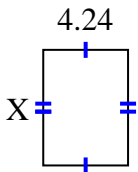
2) area = $38,88 \text{ cm}^2$



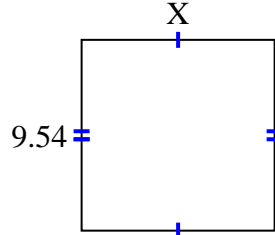
3) area = $50,76 \text{ cm}^2$



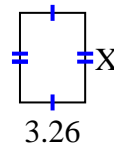
4) area = $24,5072 \text{ cm}^2$



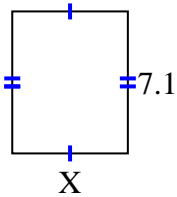
5) area = $92,061 \text{ cm}^2$



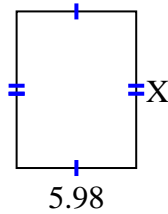
6) area = $14,6048 \text{ cm}^2$



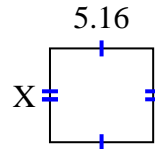
7) area = $41,038 \text{ cm}^2$



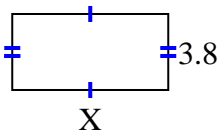
8) area = $46,8234 \text{ cm}^2$



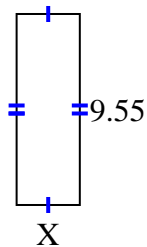
9) area = $24,2004 \text{ cm}^2$



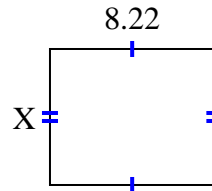
10) area = $29,64 \text{ cm}^2$



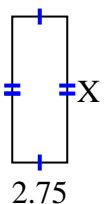
11) area = $30,178 \text{ cm}^2$



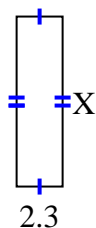
12) area = $55,896 \text{ cm}^2$



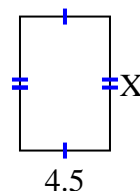
13) area = $20,075 \text{ cm}^2$



14) area = $19,55 \text{ cm}^2$



15) area = $30,15 \text{ cm}^2$

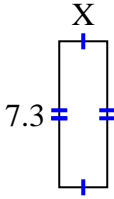


1. _____
2. _____
3. _____
4. _____
5. _____
6. _____
7. _____
8. _____
9. _____
10. _____
11. _____
12. _____
13. _____
14. _____
15. _____

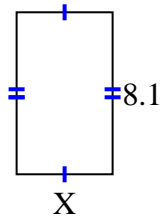


Trouvez la valeur de X pour chaque chiffre. Chaque chiffre est en centimètres (cm). Pas à l'échelle.

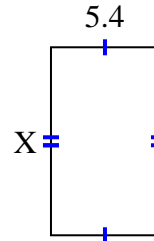
1) area = $17,52 \text{ cm}^2$



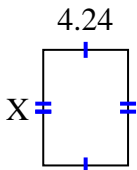
2) area = $38,88 \text{ cm}^2$



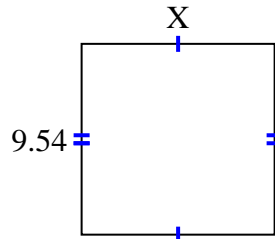
3) area = $50,76 \text{ cm}^2$



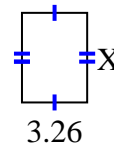
4) area = $24,5072 \text{ cm}^2$



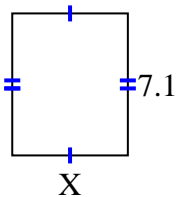
5) area = $92,061 \text{ cm}^2$



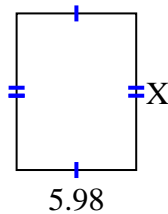
6) area = $14,6048 \text{ cm}^2$



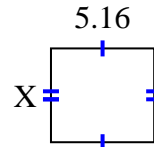
7) area = $41,038 \text{ cm}^2$



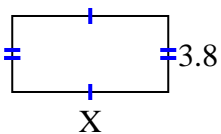
8) area = $46,8234 \text{ cm}^2$



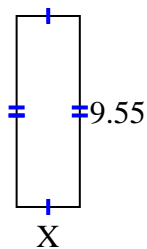
9) area = $24,2004 \text{ cm}^2$



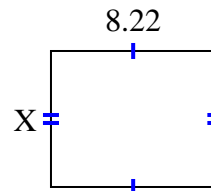
10) area = $29,64 \text{ cm}^2$



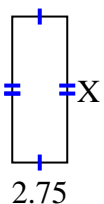
11) area = $30,178 \text{ cm}^2$



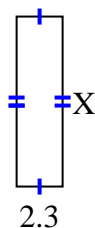
12) area = $55,896 \text{ cm}^2$



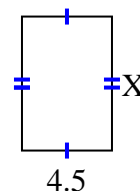
13) area = $20,075 \text{ cm}^2$



14) area = $19,55 \text{ cm}^2$



15) area = $30,15 \text{ cm}^2$



Réponses

1. 2.4

2. 4.8

3. 9.4

4. 5.78

5. 9.65

6. 4.48

7. 5.78

8. 7.83

9. 4.69

10. 7.8

11. 3.16

12. 6.8

13. 7.3

14. 8.5

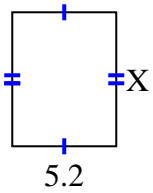
15. 6.7



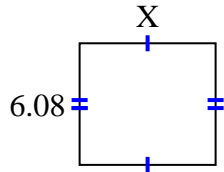
Trouvez la valeur de X pour chaque chiffre. Chaque chiffre est en centimètres (cm). Pas à l'échelle.

Réponses

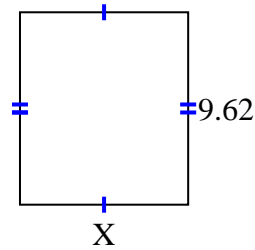
1) area = $34,84 \text{ cm}^2$



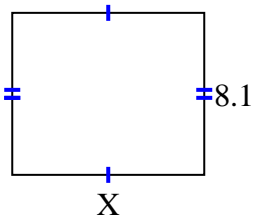
2) area = $41,344 \text{ cm}^2$



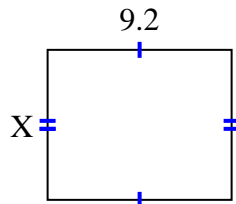
3) area = $80,9042 \text{ cm}^2$



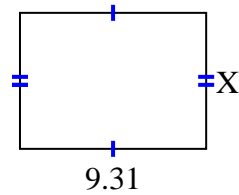
4) area = $77,76 \text{ cm}^2$



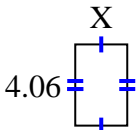
5) area = 69 cm^2



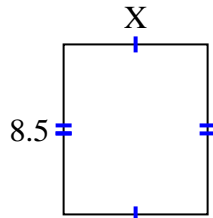
6) area = $63,308 \text{ cm}^2$



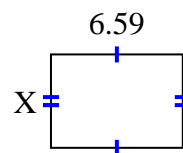
7) area = $10,556 \text{ cm}^2$



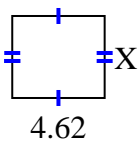
8) area = $61,2 \text{ cm}^2$



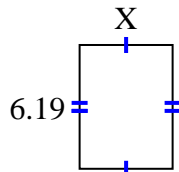
9) area = $30,7753 \text{ cm}^2$



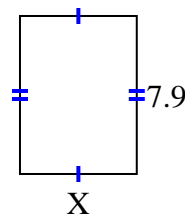
10) area = $18,942 \text{ cm}^2$



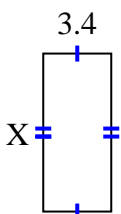
11) area = $28,7835 \text{ cm}^2$



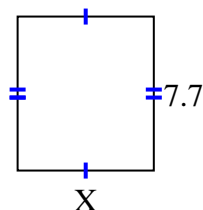
12) area = $46,136 \text{ cm}^2$



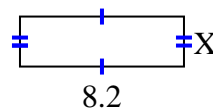
13) area = $26,86 \text{ cm}^2$



14) area = $52,437 \text{ cm}^2$



15) area = $20,5 \text{ cm}^2$

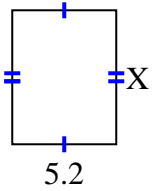


1. _____
2. _____
3. _____
4. _____
5. _____
6. _____
7. _____
8. _____
9. _____
10. _____
11. _____
12. _____
13. _____
14. _____
15. _____

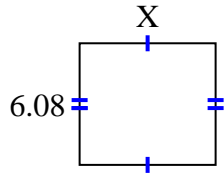


Trouvez la valeur de X pour chaque chiffre. Chaque chiffre est en centimètres (cm). Pas à l'échelle.

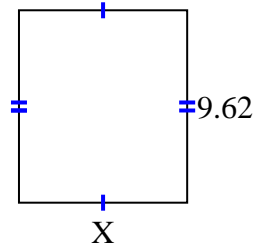
1) area = $34,84 \text{ cm}^2$



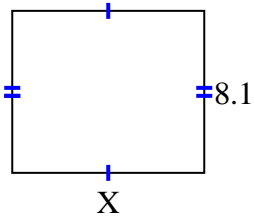
2) area = $41,344 \text{ cm}^2$



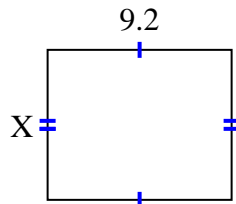
3) area = $80,9042 \text{ cm}^2$



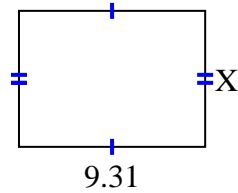
4) area = $77,76 \text{ cm}^2$



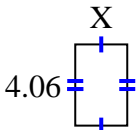
5) area = 69 cm^2



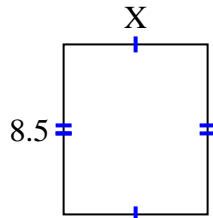
6) area = $63,308 \text{ cm}^2$



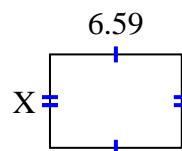
7) area = $10,556 \text{ cm}^2$



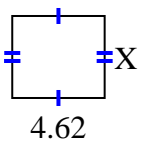
8) area = $61,2 \text{ cm}^2$



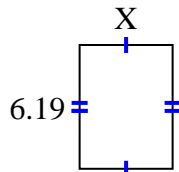
9) area = $30,7753 \text{ cm}^2$



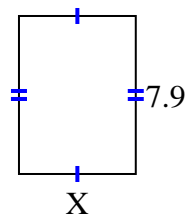
10) area = $18,942 \text{ cm}^2$



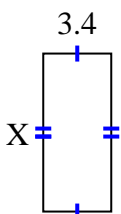
11) area = $28,7835 \text{ cm}^2$



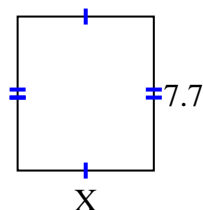
12) area = $46,136 \text{ cm}^2$



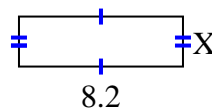
13) area = $26,86 \text{ cm}^2$



14) area = $52,437 \text{ cm}^2$



15) area = $20,5 \text{ cm}^2$



Réponses

1. 6.7

2. 6.8

3. 8.41

4. 9.6

5. 7.5

6. 6.8

7. 2.6

8. 7.2

9. 4.67

10. 4.1

11. 4.65

12. 5.84

13. 7.9

14. 6.81

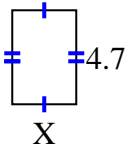
15. 2.5



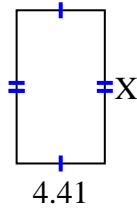
Trouvez la valeur de X pour chaque chiffre. Chaque chiffre est en centimètres (cm). Pas à l'échelle.

Réponses

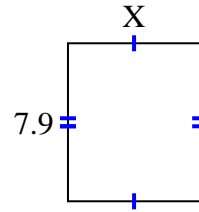
1) area = $15,04 \text{ cm}^2$



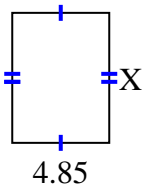
2) area = $33,7806 \text{ cm}^2$



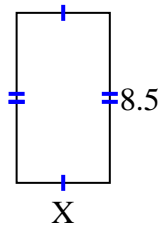
3) area = $52,219 \text{ cm}^2$



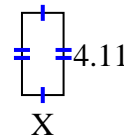
4) area = $31,525 \text{ cm}^2$



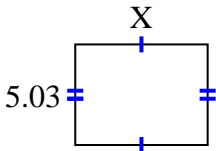
5) area = $39,61 \text{ cm}^2$



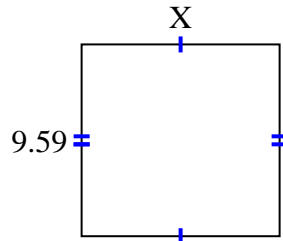
6) area = $8,5488 \text{ cm}^2$



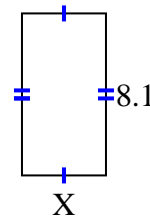
7) area = $33,2986 \text{ cm}^2$



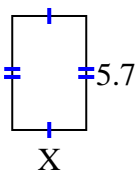
8) area = $94,941 \text{ cm}^2$



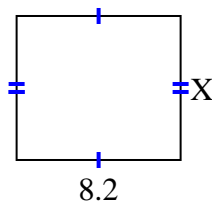
9) area = $34,02 \text{ cm}^2$



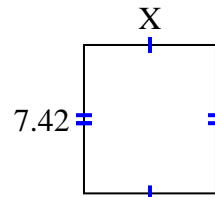
10) area = $21,09 \text{ cm}^2$



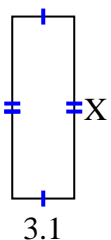
11) area = $59,04 \text{ cm}^2$



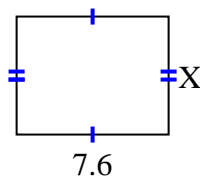
12) area = $48,972 \text{ cm}^2$



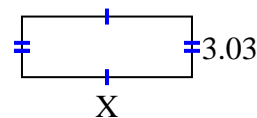
13) area = $28,21 \text{ cm}^2$



14) area = $44,84 \text{ cm}^2$



15) area = $25,755 \text{ cm}^2$

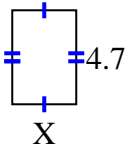


1. _____
2. _____
3. _____
4. _____
5. _____
6. _____
7. _____
8. _____
9. _____
10. _____
11. _____
12. _____
13. _____
14. _____
15. _____

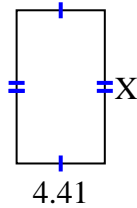


Trouvez la valeur de X pour chaque chiffre. Chaque chiffre est en centimètres (cm). Pas à l'échelle.

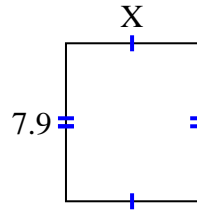
1) area = $15,04 \text{ cm}^2$



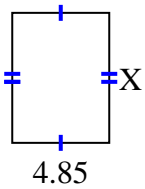
2) area = $33,7806 \text{ cm}^2$



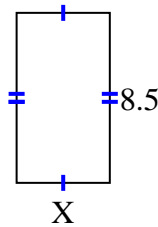
3) area = $52,219 \text{ cm}^2$



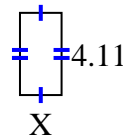
4) area = $31,525 \text{ cm}^2$



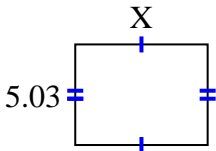
5) area = $39,61 \text{ cm}^2$



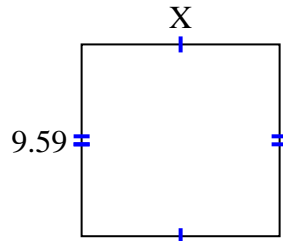
6) area = $8,5488 \text{ cm}^2$



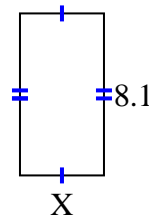
7) area = $33,2986 \text{ cm}^2$



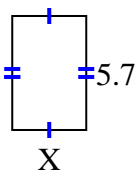
8) area = $94,941 \text{ cm}^2$



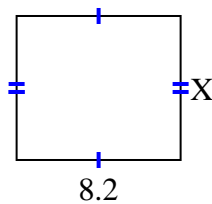
9) area = $34,02 \text{ cm}^2$



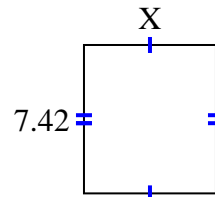
10) area = $21,09 \text{ cm}^2$



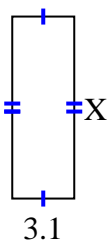
11) area = $59,04 \text{ cm}^2$



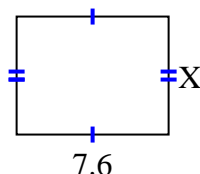
12) area = $48,972 \text{ cm}^2$



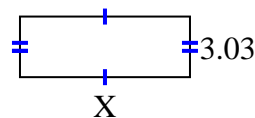
13) area = $28,21 \text{ cm}^2$



14) area = $44,84 \text{ cm}^2$



15) area = $25,755 \text{ cm}^2$



Réponses

1. 3.2

2. 7.66

3. 6.61

4. 6.5

5. 4.66

6. 2.08

7. 6.62

8. 9.9

9. 4.2

10. 3.7

11. 7.2

12. 6.6

13. 9.1

14. 5.9

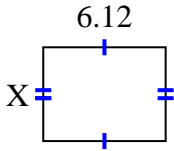
15. 8.5



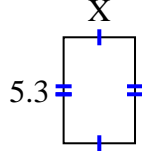
Trouvez la valeur de X pour chaque chiffre. Chaque chiffre est en centimètres (cm). Pas à l'échelle.

Réponses

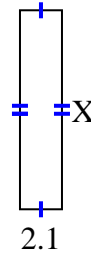
1) area = $28,7028 \text{ cm}^2$



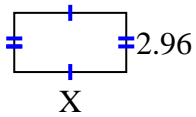
2) area = $18,921 \text{ cm}^2$



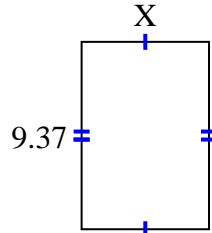
3) area = $20,895 \text{ cm}^2$



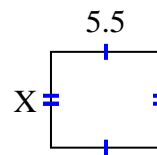
4) area = $16,576 \text{ cm}^2$



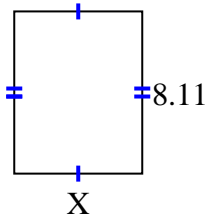
5) area = $59,6869 \text{ cm}^2$



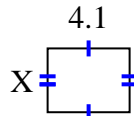
6) area = $26,345 \text{ cm}^2$



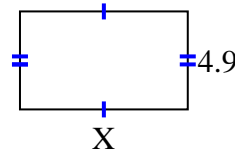
7) area = $51,904 \text{ cm}^2$



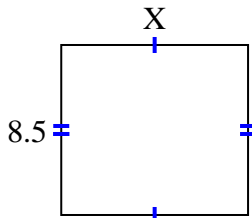
8) area = $13,079 \text{ cm}^2$



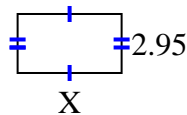
9) area = $41,111 \text{ cm}^2$



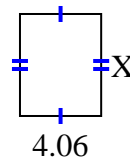
10) area = $79,39 \text{ cm}^2$



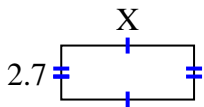
11) area = $15,34 \text{ cm}^2$



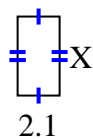
12) area = $20,706 \text{ cm}^2$



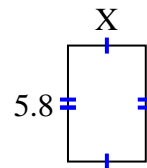
13) area = $17,928 \text{ cm}^2$



14) area = $8,295 \text{ cm}^2$



15) area = $22,562 \text{ cm}^2$

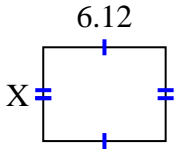


1. _____
2. _____
3. _____
4. _____
5. _____
6. _____
7. _____
8. _____
9. _____
10. _____
11. _____
12. _____
13. _____
14. _____
15. _____

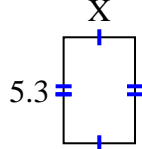


Trouvez la valeur de X pour chaque chiffre. Chaque chiffre est en centimètres (cm). Pas à l'échelle.

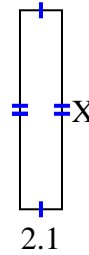
1) area = $28,7028 \text{ cm}^2$



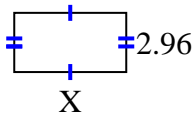
2) area = $18,921 \text{ cm}^2$



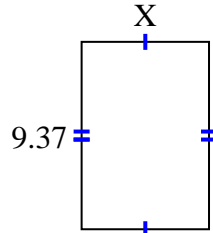
3) area = $20,895 \text{ cm}^2$



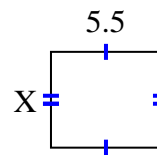
4) area = $16,576 \text{ cm}^2$



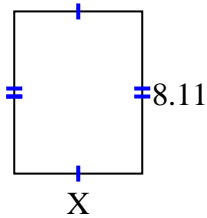
5) area = $59,6869 \text{ cm}^2$



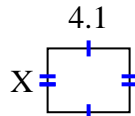
6) area = $26,345 \text{ cm}^2$



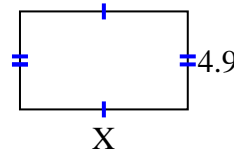
7) area = $51,904 \text{ cm}^2$



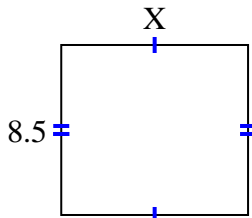
8) area = $13,079 \text{ cm}^2$



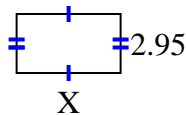
9) area = $41,111 \text{ cm}^2$



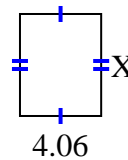
10) area = $79,39 \text{ cm}^2$



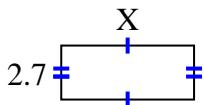
11) area = $15,34 \text{ cm}^2$



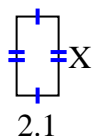
12) area = $20,706 \text{ cm}^2$



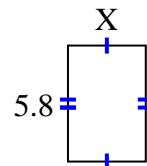
13) area = $17,928 \text{ cm}^2$



14) area = $8,295 \text{ cm}^2$



15) area = $22,562 \text{ cm}^2$



Réponses

1. 4.69

2. 3.57

3. 9.95

4. 5.6

5. 6.37

6. 4.79

7. 6.4

8. 3.19

9. 8.39

10. 9.34

11. 5.2

12. 5.1

13. 6.64

14. 3.95

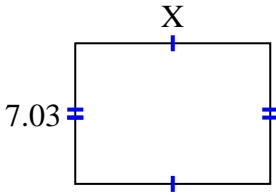
15. 3.89



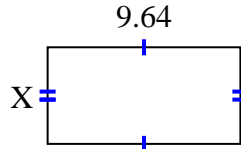
Trouvez la valeur de X pour chaque chiffre. Chaque chiffre est en centimètres (cm). Pas à l'échelle.

Réponses

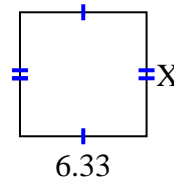
1) area = $68,5425 \text{ cm}^2$



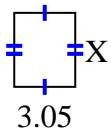
2) area = $46,5612 \text{ cm}^2$




3) area = $39,246 \text{ cm}^2$



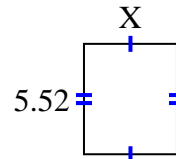
4) area = $11,285 \text{ cm}^2$



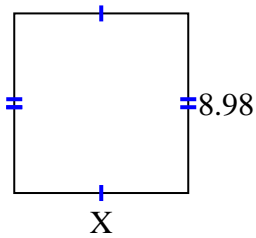
5) area = $23,8425 \text{ cm}^2$



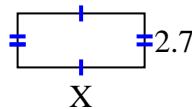
6) area = $25,668 \text{ cm}^2$



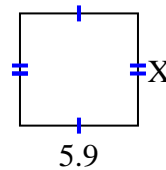
7) area = $78,126 \text{ cm}^2$



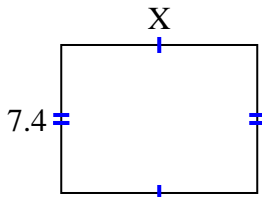
8) area = $17,145 \text{ cm}^2$



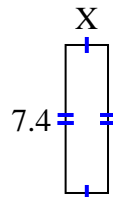
9) area = $33,099 \text{ cm}^2$



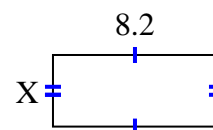
10) area = $72,52 \text{ cm}^2$



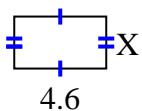
11) area = $15,688 \text{ cm}^2$



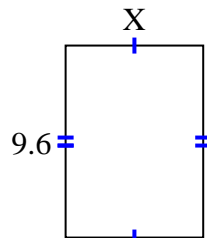
12) area = $29,356 \text{ cm}^2$



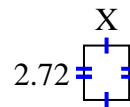
13) area = $11,96 \text{ cm}^2$



14) area = $66,048 \text{ cm}^2$



15) area = $6,1472 \text{ cm}^2$

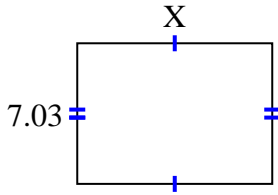


1. _____
2. _____
3. _____
4. _____
5. _____
6. _____
7. _____
8. _____
9. _____
10. _____
11. _____
12. _____
13. _____
14. _____
15. _____

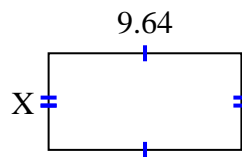


Trouvez la valeur de X pour chaque chiffre. Chaque chiffre est en centimètres (cm). Pas à l'échelle.

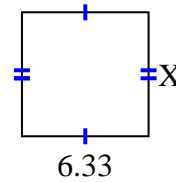
1) area = $68,5425 \text{ cm}^2$



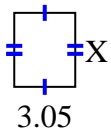
2) area = $46,5612 \text{ cm}^2$




3) area = $39,246 \text{ cm}^2$



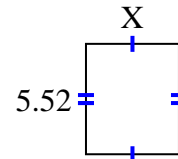
4) area = $11,285 \text{ cm}^2$



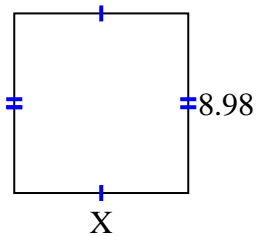
5) area = $23,8425 \text{ cm}^2$



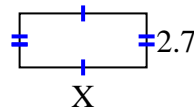
6) area = $25,668 \text{ cm}^2$



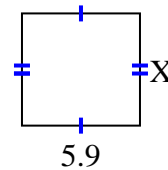
7) area = $78,126 \text{ cm}^2$



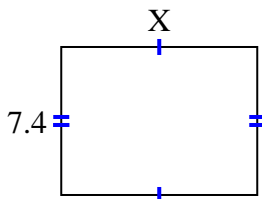
8) area = $17,145 \text{ cm}^2$



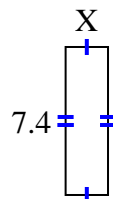
9) area = $33,099 \text{ cm}^2$



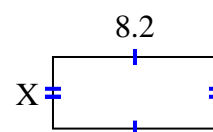
10) area = $72,52 \text{ cm}^2$



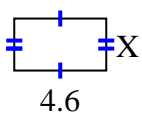
11) area = $15,688 \text{ cm}^2$



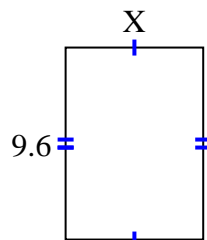
12) area = $29,356 \text{ cm}^2$



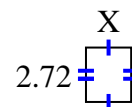
13) area = $11,96 \text{ cm}^2$



14) area = $66,048 \text{ cm}^2$



15) area = $6,1472 \text{ cm}^2$



Réponses

1. 9.75

2. 4.83

3. 6.2

4. 3.7

5. 2.75

6. 4.65

7. 8.7

8. 6.35

9. 5.61

10. 9.8

11. 2.12

12. 3.58

13. 2.6

14. 6.88

15. 2.26