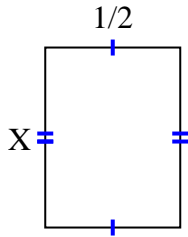




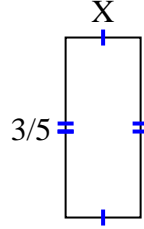
Trouvez la valeur de X pour chaque chiffre. Chaque chiffre est en centimètres (cm). Pas à l'échelle.

Réponses

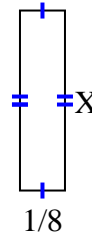
1) area = $\frac{2}{6} \text{ cm}^2$



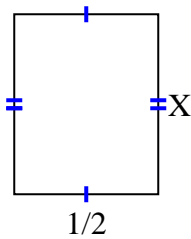
2) area = $\frac{3}{20} \text{ cm}^2$



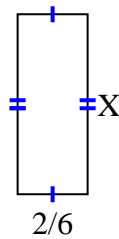
3) area = $\frac{1}{16} \text{ cm}^2$



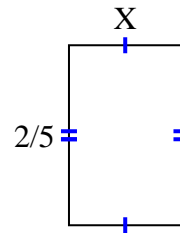
4) area = $\frac{5}{16} \text{ cm}^2$



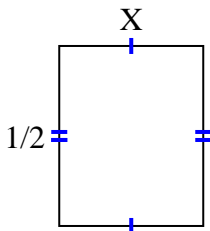
5) area = $\frac{12}{42} \text{ cm}^2$



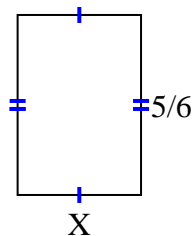
6) area = $\frac{4}{40} \text{ cm}^2$



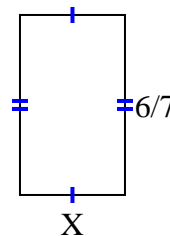
7) area = $\frac{2}{10} \text{ cm}^2$



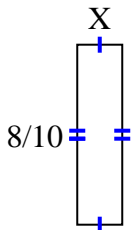
8) area = $\frac{20}{42} \text{ cm}^2$



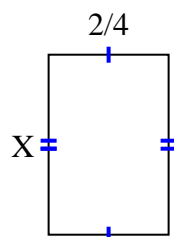
9) area = $\frac{12}{28} \text{ cm}^2$



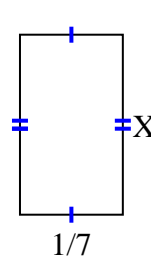
10) area = $\frac{8}{50} \text{ cm}^2$



11) area = $\frac{12}{32} \text{ cm}^2$



12) area = $\frac{1}{28} \text{ cm}^2$

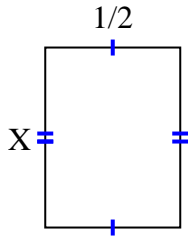


1. _____
2. _____
3. _____
4. _____
5. _____
6. _____
7. _____
8. _____
9. _____
10. _____
11. _____
12. _____

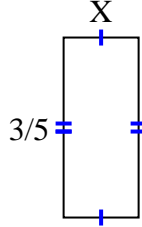


Trouvez la valeur de X pour chaque chiffre. Chaque chiffre est en centimètres (cm). Pas à l'échelle.

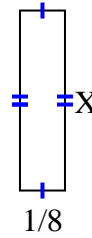
1) area = $\frac{2}{6} \text{ cm}^2$



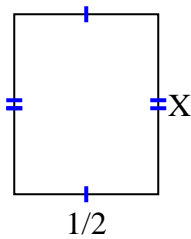
2) area = $\frac{3}{20} \text{ cm}^2$



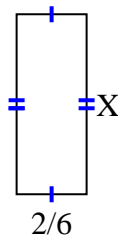
3) area = $\frac{1}{16} \text{ cm}^2$



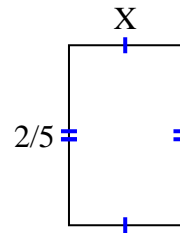
4) area = $\frac{5}{16} \text{ cm}^2$



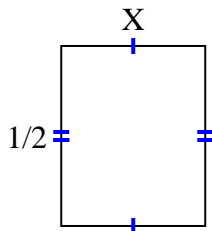
5) area = $\frac{12}{42} \text{ cm}^2$



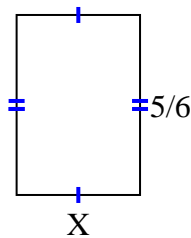
6) area = $\frac{4}{40} \text{ cm}^2$



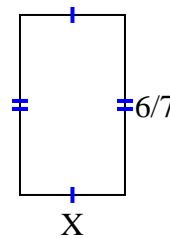
7) area = $\frac{2}{10} \text{ cm}^2$



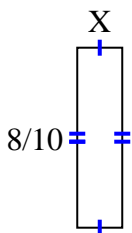
8) area = $\frac{20}{42} \text{ cm}^2$



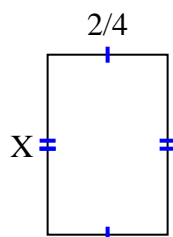
9) area = $\frac{12}{28} \text{ cm}^2$



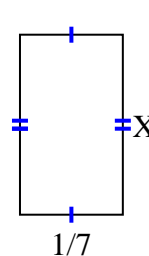
10) area = $\frac{8}{50} \text{ cm}^2$



11) area = $\frac{12}{32} \text{ cm}^2$



12) area = $\frac{1}{28} \text{ cm}^2$



Réponses

1. $\frac{2}{3}$
2. $\frac{1}{4}$
3. $\frac{1}{2}$
4. $\frac{5}{8}$
5. $\frac{6}{7}$
6. $\frac{2}{8}$
7. $\frac{2}{5}$
8. $\frac{4}{7}$
9. $\frac{2}{4}$
10. $\frac{1}{5}$
11. $\frac{6}{8}$
12. $\frac{1}{4}$