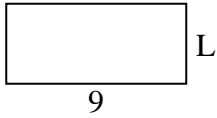




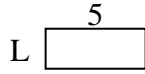
Déterminez la valeur de 'L'.

**Réponses**


1) Aire =  $36u^2$



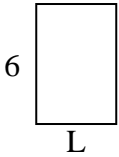
2) Aire =  $10u^2$



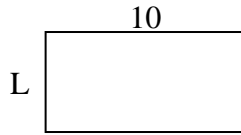
3) Aire =  $14u^2$



4) Aire =  $24u^2$



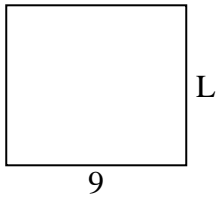
5) Aire =  $50u^2$



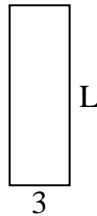
6) Aire =  $6u^2$



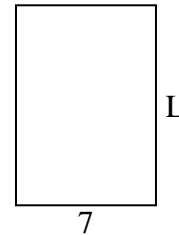
7) Aire =  $72u^2$



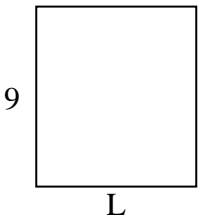
8) Aire =  $27u^2$



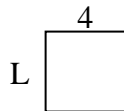
9) Aire =  $70u^2$



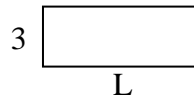
10) Aire =  $72u^2$




11) Aire =  $16u^2$



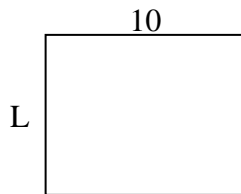
12) Aire =  $24u^2$




13) Aire =  $14u^2$



14) Aire =  $80u^2$



15) Aire =  $27u^2$



1. \_\_\_\_\_

2. \_\_\_\_\_

3. \_\_\_\_\_

4. \_\_\_\_\_

5. \_\_\_\_\_

6. \_\_\_\_\_

7. \_\_\_\_\_

8. \_\_\_\_\_

9. \_\_\_\_\_

10. \_\_\_\_\_

11. \_\_\_\_\_

12. \_\_\_\_\_

13. \_\_\_\_\_

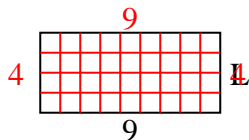
14. \_\_\_\_\_

15. \_\_\_\_\_

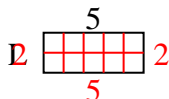


Déterminez la valeur de 'L'.

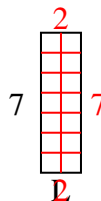
1) Aire =  $36u^2$



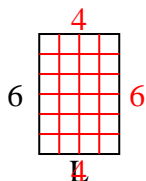
2) Aire =  $10u^2$



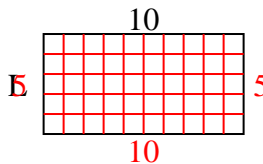
3) Aire =  $14u^2$



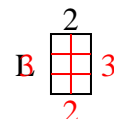
4) Aire =  $24u^2$



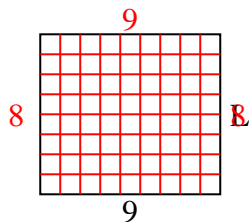
5) Aire =  $50u^2$



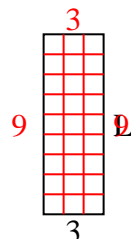
6) Aire =  $6u^2$



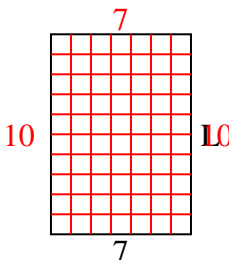
7) Aire =  $72u^2$



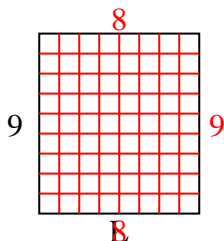
8) Aire =  $27u^2$



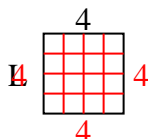
9) Aire =  $70u^2$



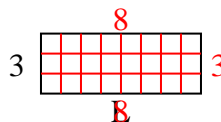
10) Aire =  $72u^2$



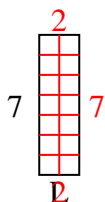
11) Aire =  $16u^2$



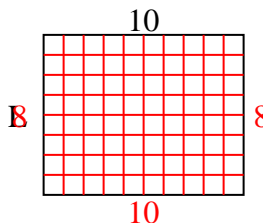
12) Aire =  $24u^2$



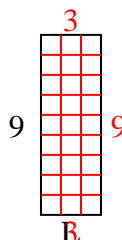
13) Aire =  $14u^2$



14) Aire =  $80u^2$



15) Aire =  $27u^2$

**Réponses**1. **4**2. **2**3. **2**4. **4**5. **5**6. **3**7. **8**8. **9**9. **10**10. **8**11. **4**12. **8**13. **2**14. **8**15. **3**