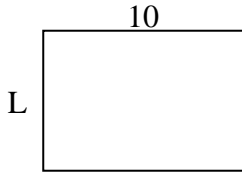




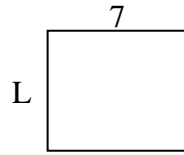
Déterminez la valeur de 'L'.

**Réponses**

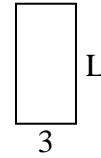
1) Aire =  $70u^2$



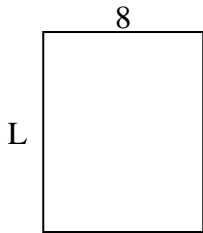
2) Aire =  $42u^2$



3) Aire =  $18u^2$



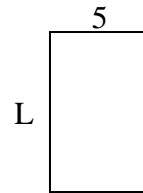
4) Aire =  $80u^2$



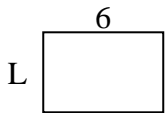
5) Aire =  $18u^2$



6) Aire =  $40u^2$



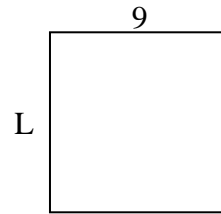
7) Aire =  $24u^2$



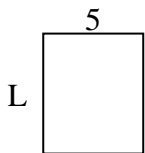
8) Aire =  $60u^2$



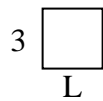
9) Aire =  $81u^2$



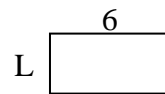
10) Aire =  $30u^2$



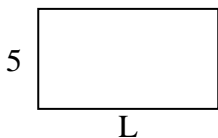
11) Aire =  $9u^2$



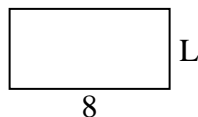
12) Aire =  $18u^2$



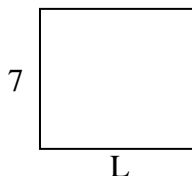
13) Aire =  $45u^2$



14) Aire =  $32u^2$



15) Aire =  $56u^2$



1. \_\_\_\_\_

2. \_\_\_\_\_

3. \_\_\_\_\_

4. \_\_\_\_\_

5. \_\_\_\_\_

6. \_\_\_\_\_

7. \_\_\_\_\_

8. \_\_\_\_\_

9. \_\_\_\_\_

10. \_\_\_\_\_

11. \_\_\_\_\_

12. \_\_\_\_\_

13. \_\_\_\_\_

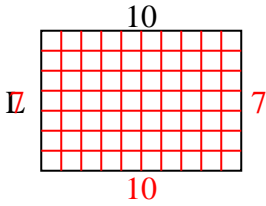
14. \_\_\_\_\_

15. \_\_\_\_\_

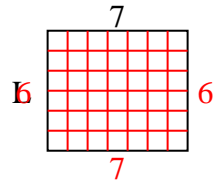


Déterminez la valeur de 'L'.

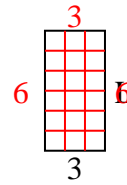
1) Aire =  $70u^2$



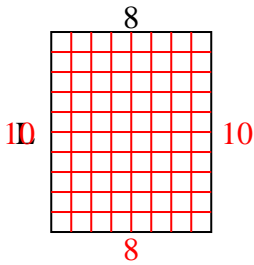
2) Aire =  $42u^2$



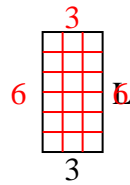
3) Aire =  $18u^2$



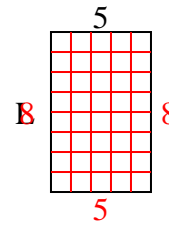
4) Aire =  $80u^2$



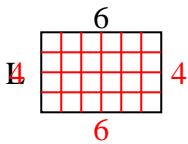
5) Aire =  $18u^2$



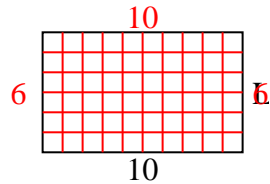
6) Aire =  $40u^2$



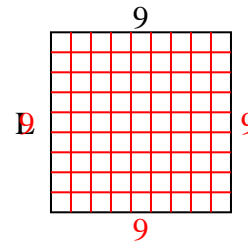
7) Aire =  $24u^2$



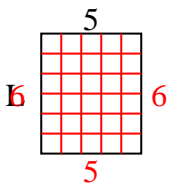
8) Aire =  $60u^2$



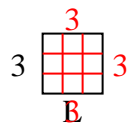
9) Aire =  $81u^2$



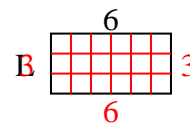
10) Aire =  $30u^2$



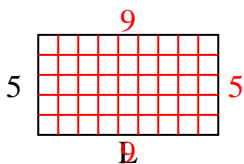
11) Aire =  $9u^2$



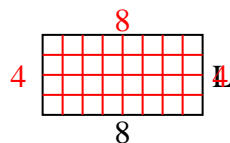
12) Aire =  $18u^2$



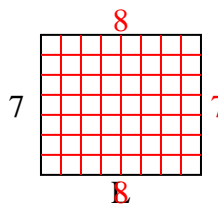
13) Aire =  $45u^2$



14) Aire =  $32u^2$



15) Aire =  $56u^2$

**Réponses**1. 72. 63. 64. 105. 66. 87. 48. 69. 910. 611. 312. 313. 914. 415. 8