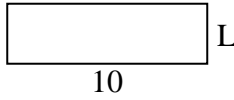




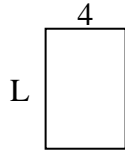
Déterminez la valeur de 'L'.

Réponses

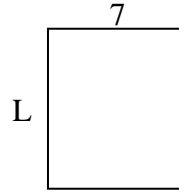
1) Aire = $30u^2$



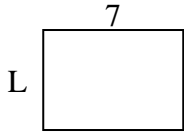
2) Aire = $24u^2$



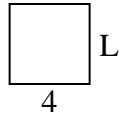
3) Aire = $56u^2$



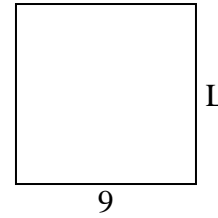
4) Aire = $35u^2$



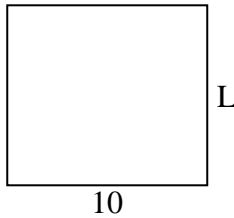
5) Aire = $16u^2$



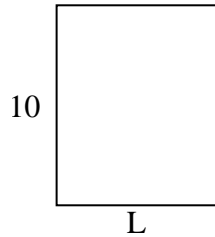
6) Aire = $81u^2$



7) Aire = $90u^2$




8) Aire = $80u^2$



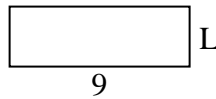
9) Aire = $27u^2$




10) Aire = $32u^2$



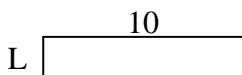
11) Aire = $27u^2$



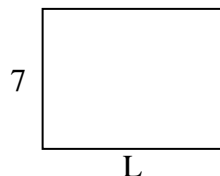
12) Aire = $14u^2$



13) Aire = $20u^2$



14) Aire = $63u^2$



15) Aire = $18u^2$



1. _____

2. _____

3. _____

4. _____

5. _____

6. _____

7. _____

8. _____

9. _____

10. _____

11. _____

12. _____

13. _____

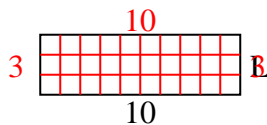
14. _____

15. _____

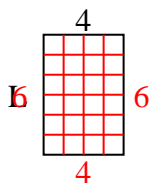


Déterminez la valeur de 'L'.

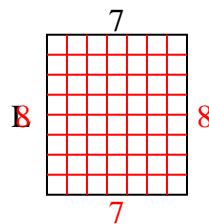
1) Aire = $30u^2$



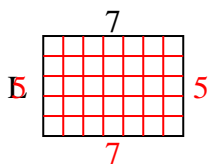
2) Aire = $24u^2$



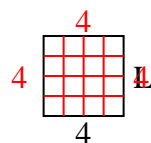
3) Aire = $56u^2$



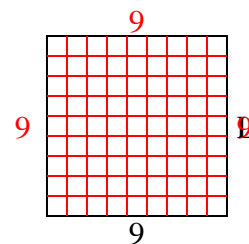
4) Aire = $35u^2$



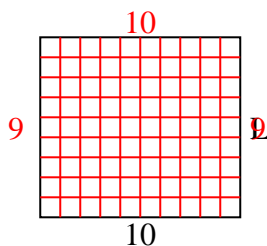
5) Aire = $16u^2$



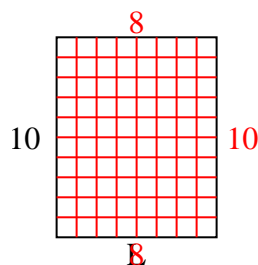
6) Aire = $81u^2$



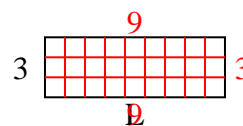
7) Aire = $90u^2$



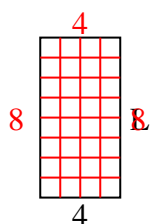
8) Aire = $80u^2$



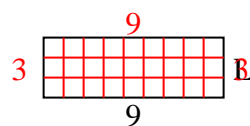
9) Aire = $27u^2$



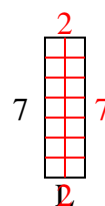
10) Aire = $32u^2$



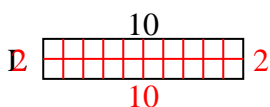
11) Aire = $27u^2$



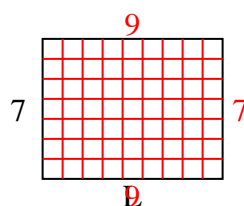
12) Aire = $14u^2$



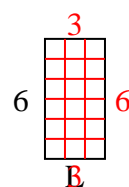
13) Aire = $20u^2$



14) Aire = $63u^2$



15) Aire = $18u^2$

**Réponses**1. 32. 63. 84. 55. 46. 97. 98. 89. 910. 811. 312. 213. 214. 915. 3