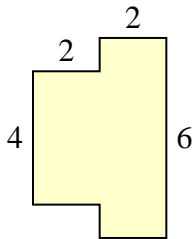


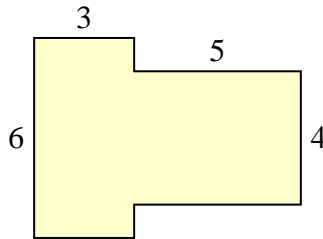


Calculez l'aire totale de chaque figure. Les mesures sont en millimètres (mm).

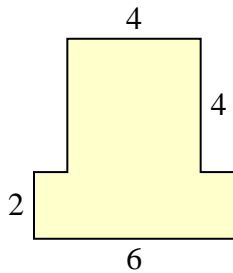
1)



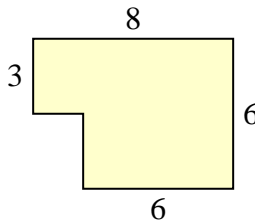
2)



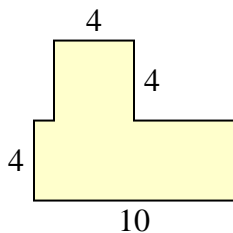
3)



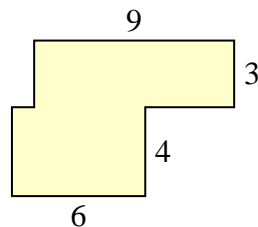
4)



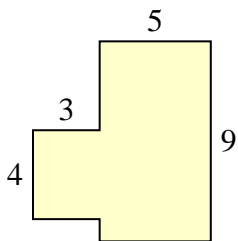
5)



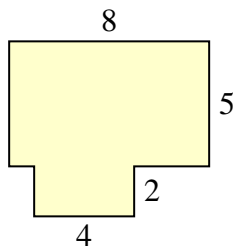
6)



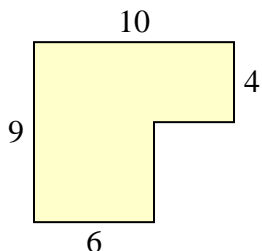
7)



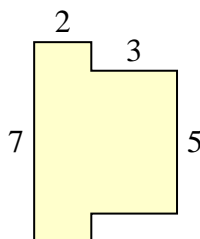
8)



9)



10)



Réponses

1. _____

2. _____

3. _____

4. _____

5. _____

6. _____

7. _____

8. _____

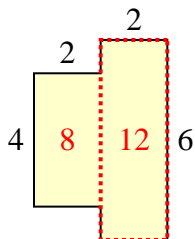
9. _____

10. _____

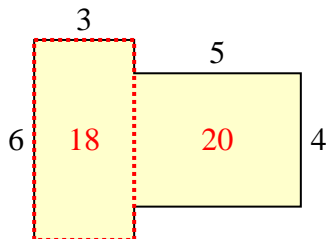


Calculez l'aire totale de chaque figure. Les mesures sont en millimètres (mm).

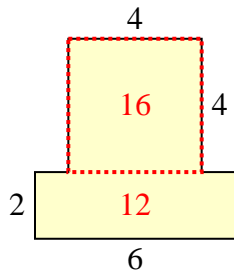
1)



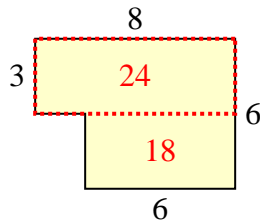
2)



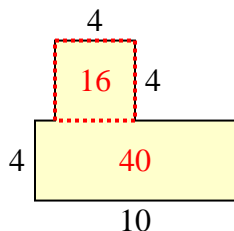
3)



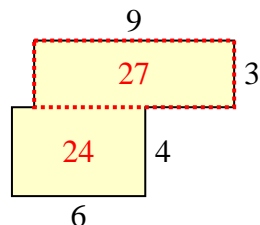
4)



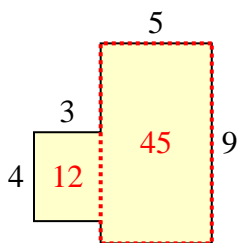
5)



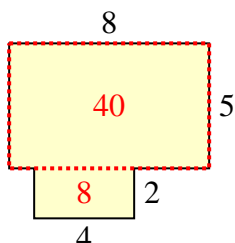
6)



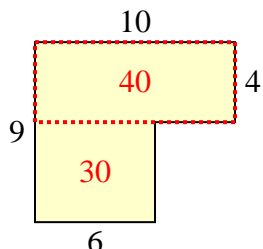
7)



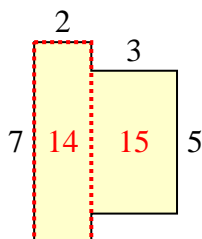
8)



9)



10)

**Réponses**

1. 20 mm²
2. 38 mm²
3. 28 mm²
4. 42 mm²
5. 56 mm²
6. 51 mm²
7. 57 mm²
8. 48 mm²
9. 70 mm²
10. 29 mm²