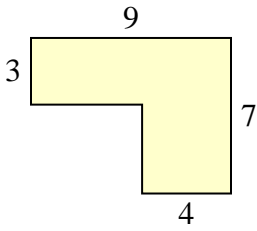


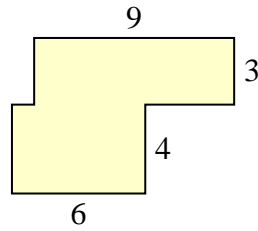


Calculez l'aire totale de chaque figure. Les mesures sont en millimètres (mm).

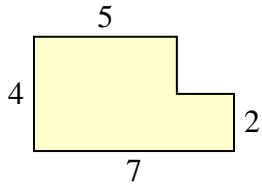
1)



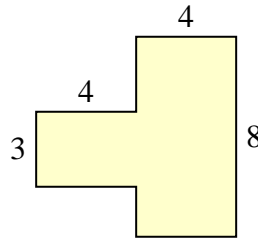
2)



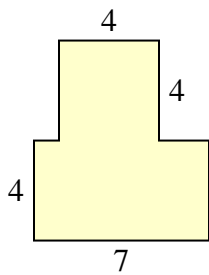
3)



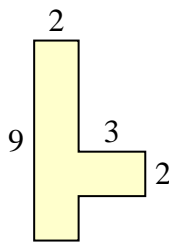
4)



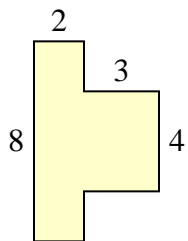
5)



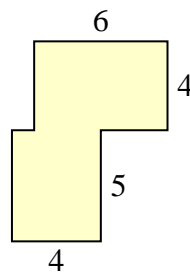
6)



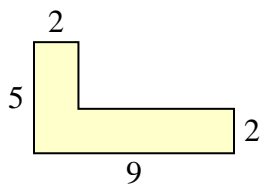
7)



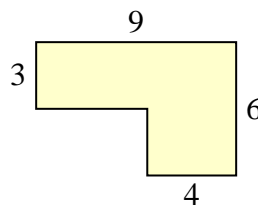
8)



9)



10)

**Réponses**

1. _____

2. _____

3. _____

4. _____

5. _____

6. _____

7. _____

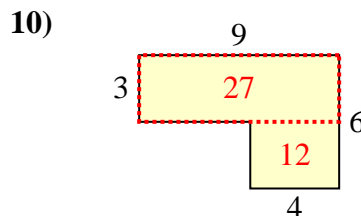
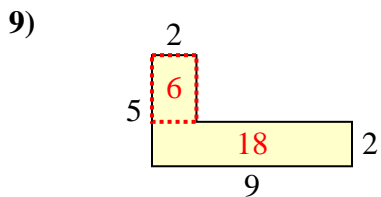
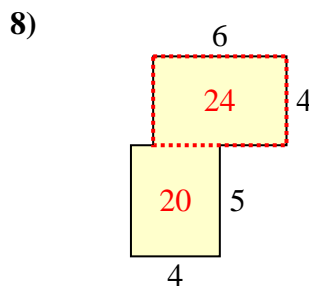
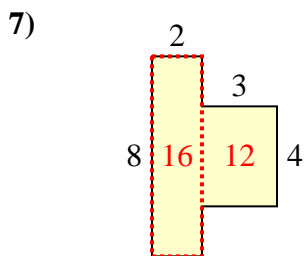
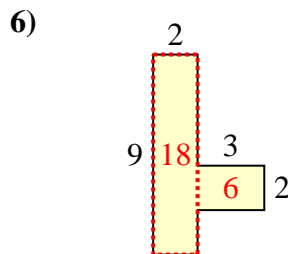
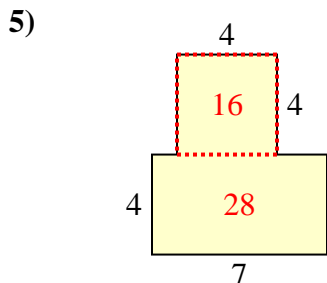
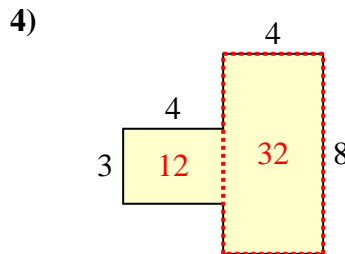
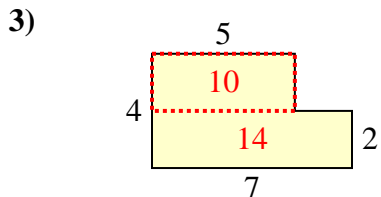
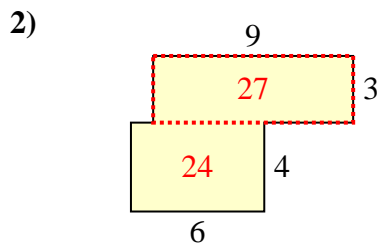
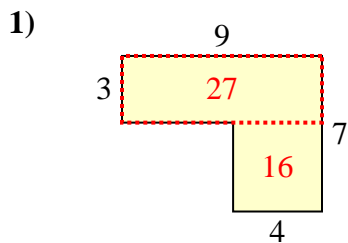
8. _____

9. _____

10. _____



Calculez l'aire totale de chaque figure. Les mesures sont en millimètres (mm).

**Réponses**

1. 43 mm²
2. 51 mm²
3. 24 mm²
4. 44 mm²
5. 44 mm²
6. 24 mm²
7. 28 mm²
8. 44 mm²
9. 24 mm²
10. 39 mm²