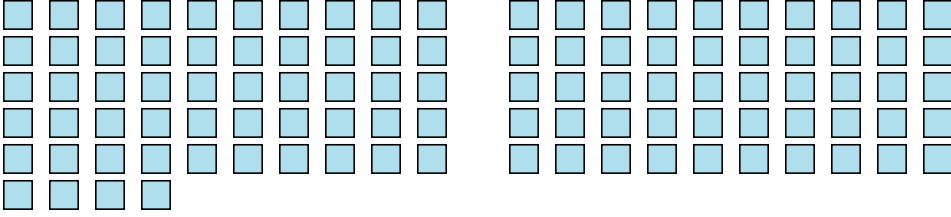




Comptez le nombre de formes affichées.

Réponses

1) 

1. _____

2. _____

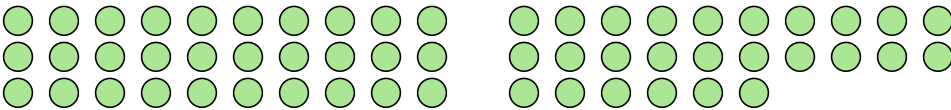
3. _____

2) 

4. _____

5. _____

3) 

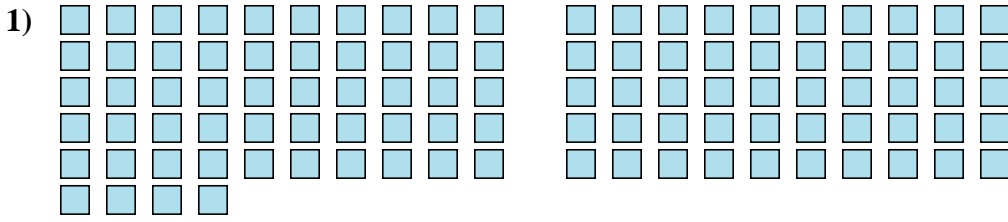
4) 

5) 



Comptez le nombre de formes affichées.

Réponses



1. 104

2. 69

3. 17

4. 56

5. 25

