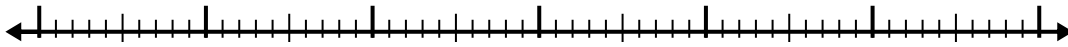


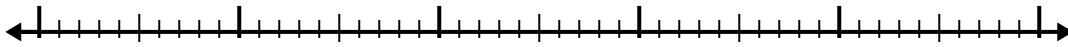


Utilisez la droite numérique pour résoudre chaque problème.

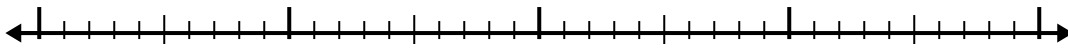
1)  $6.5 + 3.2 =$



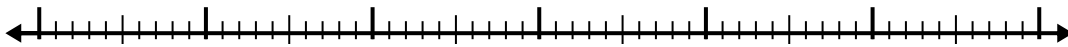
2)  $5.3 + 3.8 =$



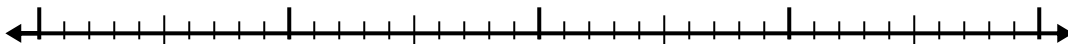
3)  $3.1 + 1.1 =$



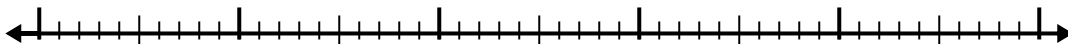
4)  $8.4 + 3.2 =$



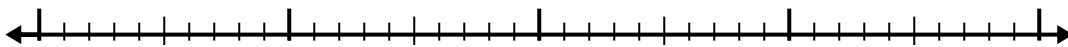
5)  $5.7 + 1.2 =$



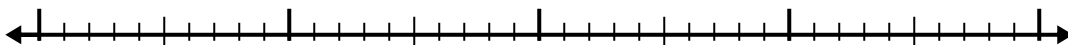
6)  $2 + 2.8 =$



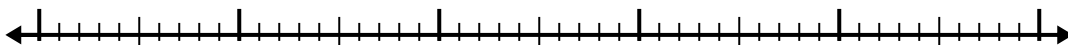
7)  $4.2 + 1.8 =$



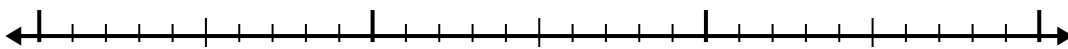
8)  $6.6 + 1.4 =$



9)  $4.3 + 3.9 =$



10)  $1.1 + 1.4 =$

**Réponses**

1. \_\_\_\_\_

2. \_\_\_\_\_

3. \_\_\_\_\_

4. \_\_\_\_\_

5. \_\_\_\_\_

6. \_\_\_\_\_

7. \_\_\_\_\_

8. \_\_\_\_\_

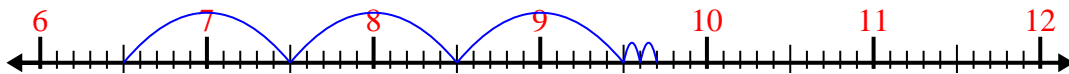
9. \_\_\_\_\_

10. \_\_\_\_\_

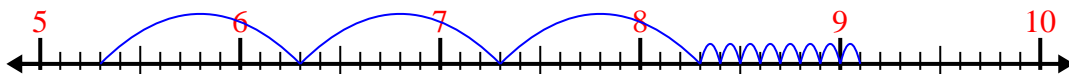


Utilisez la droite numérique pour résoudre chaque problème.

1)  $6.5 + 3.2 =$



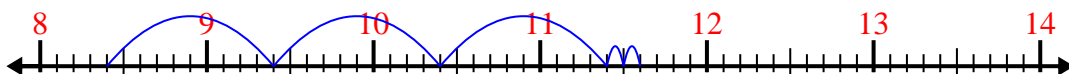
2)  $5.3 + 3.8 =$



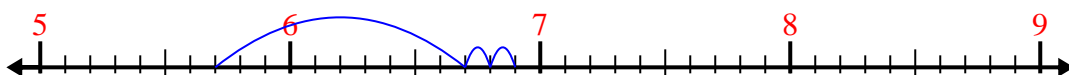
3)  $3.1 + 1.1 =$



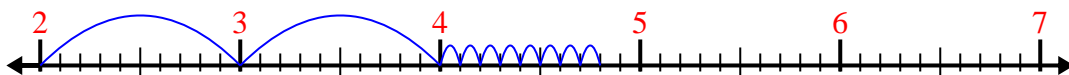
4)  $8.4 + 3.2 =$



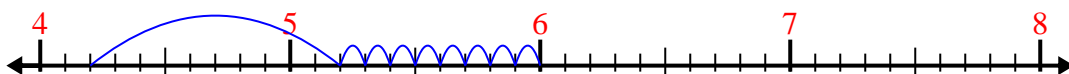
5)  $5.7 + 1.2 =$



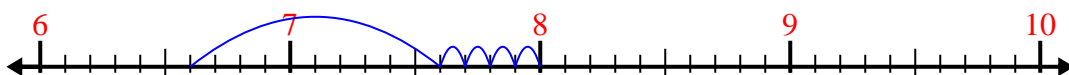
6)  $2 + 2.8 =$



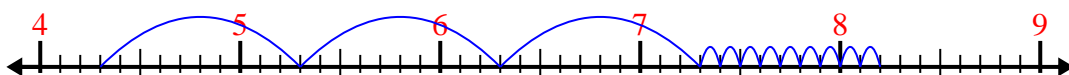
7)  $4.2 + 1.8 =$



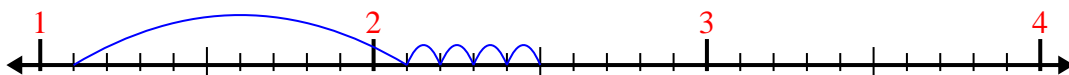
8)  $6.6 + 1.4 =$



9)  $4.3 + 3.9 =$



10)  $1.1 + 1.4 =$

**Réponses**1. 9,72. 9,13. 4,24. 11,65. 6,96. 4,87. 6,08. 8,09. 8,210. 2,5